




Iguala cada ecuación para responder y escribe la respuesta.

Respuestas


Ej) $\frac{1}{5} + \frac{1}{5}$



1) $\frac{1}{10} + \frac{1}{10}$



2) $\frac{1}{5} + \frac{1}{5} + \frac{1}{5}$



3) $\frac{1}{3} + \frac{1}{3}$



4) $\frac{1}{12} + \frac{1}{12}$



5) $\frac{1}{12} + \frac{1}{12} + \frac{1}{12} + \frac{1}{12}$



6) $\frac{1}{4} + \frac{1}{4}$



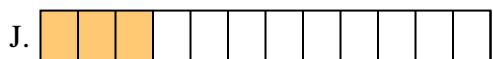
7) $\frac{1}{6} + \frac{1}{6}$



8) $\frac{1}{4} + \frac{1}{4} + \frac{1}{4}$



9) $\frac{1}{10} + \frac{1}{10} + \frac{1}{10} + \frac{1}{10}$




10) $\frac{1}{6} + \frac{1}{6} + \frac{1}{6} + \frac{1}{6} + \frac{1}{6}$



11) $\frac{1}{8} + \frac{1}{8} + \frac{1}{8} + \frac{1}{8}$




12) $\frac{1}{12} + \frac{1}{12} + \frac{1}{12}$




13) $\frac{1}{8} + \frac{1}{8}$



14) $\frac{1}{6} + \frac{1}{6} + \frac{1}{6} + \frac{1}{6}$



15) $\frac{1}{8} + \frac{1}{8} + \frac{1}{8} + \frac{1}{8} + \frac{1}{8}$

Ej. **G**

1. _____

2. _____

3. _____

4. _____

5. _____

6. _____

7. _____

8. _____

9. _____

10. _____

11. _____

12. _____

13. _____


14. _____

15. _____



Iguala cada ecuación para responder y escribe la respuesta.

Ej) $\frac{1}{5} + \frac{1}{5}$




1) $\frac{1}{10} + \frac{1}{10}$



2) $\frac{1}{5} + \frac{1}{5} + \frac{1}{5}$



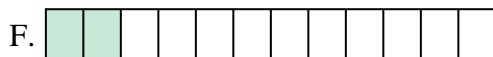
3) $\frac{1}{3} + \frac{1}{3}$



4) $\frac{1}{12} + \frac{1}{12}$



5) $\frac{1}{12} + \frac{1}{12} + \frac{1}{12} + \frac{1}{12}$



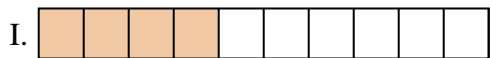
6) $\frac{1}{4} + \frac{1}{4}$



7) $\frac{1}{6} + \frac{1}{6}$



8) $\frac{1}{4} + \frac{1}{4} + \frac{1}{4}$



9) $\frac{1}{10} + \frac{1}{10} + \frac{1}{10} + \frac{1}{10}$




10) $\frac{1}{6} + \frac{1}{6} + \frac{1}{6} + \frac{1}{6} + \frac{1}{6}$



11) $\frac{1}{8} + \frac{1}{8} + \frac{1}{8} + \frac{1}{8}$




12) $\frac{1}{12} + \frac{1}{12} + \frac{1}{12}$




13) $\frac{1}{8} + \frac{1}{8}$



14) $\frac{1}{6} + \frac{1}{6} + \frac{1}{6} + \frac{1}{6}$



15) $\frac{1}{8} + \frac{1}{8} + \frac{1}{8} + \frac{1}{8} + \frac{1}{8}$

**Respuestas**Ej. **G** 1. **E** 2. **O** 3. **K** 4. **F** 5. **M** 6. **D** 7. **A** 8. **P** 9. **I** 10. **B** 11. **C** 12. **J** 13. **N** 14. **L** 15. **H**