



Iguala cada ecuación para responder y escribe la respuesta.

Respuestas

Ej) $\frac{1}{12} + \frac{1}{12} + \frac{1}{12}$




Ej. **N**

1) $\frac{1}{6} + \frac{1}{6} + \frac{1}{6} + \frac{1}{6} + \frac{1}{6}$



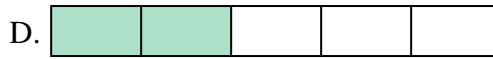
1. _____

2) $\frac{1}{8} + \frac{1}{8} + \frac{1}{8} + \frac{1}{8} + \frac{1}{8}$



2. _____

3) $\frac{1}{5} + \frac{1}{5}$




3. _____

4) $\frac{1}{3} + \frac{1}{3}$



4. _____

5) $\frac{1}{10} + \frac{1}{10} + \frac{1}{10} + \frac{1}{10} + \frac{1}{10} + \frac{1}{10} + \frac{1}{10}$



5. _____

6) $\frac{1}{5} + \frac{1}{5} + \frac{1}{5} + \frac{1}{5}$




6. _____

7) $\frac{1}{4} + \frac{1}{4}$



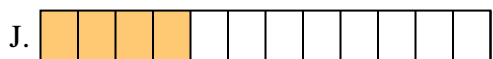
7. _____

8) $\frac{1}{6} + \frac{1}{6}$




8. _____

9) $\frac{1}{10} + \frac{1}{10} + \frac{1}{10} + \frac{1}{10} + \frac{1}{10}$



9. _____

10) $\frac{1}{6} + \frac{1}{6} + \frac{1}{6}$



10. _____

11) $\frac{1}{8} + \frac{1}{8} + \frac{1}{8}$



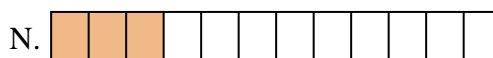
11. _____

12) $\frac{1}{12} + \frac{1}{12} + \frac{1}{12} + \frac{1}{12}$




12. _____

13) $\frac{1}{6} + \frac{1}{6} + \frac{1}{6} + \frac{1}{6}$




13. _____

14) $\frac{1}{10} + \frac{1}{10}$



14. _____

15) $\frac{1}{12} + \frac{1}{12} + \frac{1}{12} + \frac{1}{12} + \frac{1}{12} + \frac{1}{12} + \frac{1}{12}$



15. _____



Iguala cada ecuación para responder y escribe la respuesta.


Ej) $\frac{1}{12} + \frac{1}{12} + \frac{1}{12}$



1) $\frac{1}{6} + \frac{1}{6} + \frac{1}{6} + \frac{1}{6} + \frac{1}{6}$



2) $\frac{1}{8} + \frac{1}{8} + \frac{1}{8} + \frac{1}{8} + \frac{1}{8}$




3) $\frac{1}{5} + \frac{1}{5}$



4) $\frac{1}{3} + \frac{1}{3}$



5) $\frac{1}{10} + \frac{1}{10} + \frac{1}{10} + \frac{1}{10} + \frac{1}{10} + \frac{1}{10} + \frac{1}{10}$




6) $\frac{1}{5} + \frac{1}{5} + \frac{1}{5} + \frac{1}{5}$



7) $\frac{1}{4} + \frac{1}{4}$




8) $\frac{1}{6} + \frac{1}{6}$



9) $\frac{1}{10} + \frac{1}{10} + \frac{1}{10} + \frac{1}{10} + \frac{1}{10}$



10) $\frac{1}{6} + \frac{1}{6} + \frac{1}{6}$



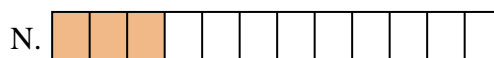
11) $\frac{1}{8} + \frac{1}{8} + \frac{1}{8}$




12) $\frac{1}{12} + \frac{1}{12} + \frac{1}{12} + \frac{1}{12}$




13) $\frac{1}{6} + \frac{1}{6} + \frac{1}{6} + \frac{1}{6}$



14) $\frac{1}{10} + \frac{1}{10}$



15) $\frac{1}{12} + \frac{1}{12} + \frac{1}{12} + \frac{1}{12} + \frac{1}{12} + \frac{1}{12} + \frac{1}{12}$

**Respuestas**Ej. N 1. I 2. C 3. D 4. M 5. F 6. A 7. E 8. B 9. P 10. G 11. L 12. J 13. K 14. O 15. H