




Iguala cada ecuación para responder y escribe la respuesta.

Respuestas

Ej) $\frac{1}{8} + \frac{1}{8} + \frac{1}{8} + \frac{1}{8} + \frac{1}{8}$



Ej. **A**

1) $\frac{1}{4} + \frac{1}{4} + \frac{1}{4}$



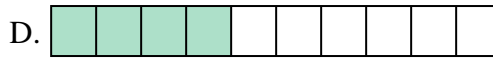
1. _____

2) $\frac{1}{10} + \frac{1}{10} + \frac{1}{10} + \frac{1}{10} + \frac{1}{10} + \frac{1}{10}$



2. _____

3) $\frac{1}{6} + \frac{1}{6}$




3. _____

4) $\frac{1}{8} + \frac{1}{8} + \frac{1}{8} + \frac{1}{8} + \frac{1}{8} + \frac{1}{8} + \frac{1}{8}$



4. _____

5) $\frac{1}{6} + \frac{1}{6} + \frac{1}{6} + \frac{1}{6}$



5. _____

6) $\frac{1}{12} + \frac{1}{12} + \frac{1}{12} + \frac{1}{12} + \frac{1}{12}$



6. _____

7) $\frac{1}{8} + \frac{1}{8} + \frac{1}{8} + \frac{1}{8}$



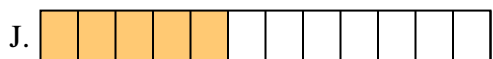
7. _____

8) $\frac{1}{3} + \frac{1}{3}$



8. _____

9) $\frac{1}{6} + \frac{1}{6} + \frac{1}{6} + \frac{1}{6} + \frac{1}{6}$



9. _____

10) $\frac{1}{12} + \frac{1}{12} + \frac{1}{12} + \frac{1}{12}$



10. _____

11) $\frac{1}{10} + \frac{1}{10} + \frac{1}{10} + \frac{1}{10}$




11. _____

12) $\frac{1}{5} + \frac{1}{5} + \frac{1}{5} + \frac{1}{5}$



12. _____

13) $\frac{1}{4} + \frac{1}{4}$




13. _____

14) $\frac{1}{8} + \frac{1}{8} + \frac{1}{8} + \frac{1}{8} + \frac{1}{8} + \frac{1}{8}$



14. _____

15) $\frac{1}{5} + \frac{1}{5}$




15. _____




Iguala cada ecuación para responder y escribe la respuesta.

Ej) $\frac{1}{8} + \frac{1}{8} + \frac{1}{8} + \frac{1}{8} + \frac{1}{8}$



1) $\frac{1}{4} + \frac{1}{4} + \frac{1}{4}$



2) $\frac{1}{10} + \frac{1}{10} + \frac{1}{10} + \frac{1}{10} + \frac{1}{10} + \frac{1}{10}$




3) $\frac{1}{6} + \frac{1}{6}$



4) $\frac{1}{8} + \frac{1}{8} + \frac{1}{8} + \frac{1}{8} + \frac{1}{8} + \frac{1}{8} + \frac{1}{8}$



5) $\frac{1}{6} + \frac{1}{6} + \frac{1}{6} + \frac{1}{6}$



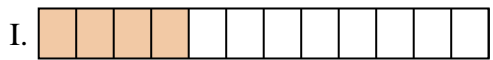
6) $\frac{1}{12} + \frac{1}{12} + \frac{1}{12} + \frac{1}{12} + \frac{1}{12}$



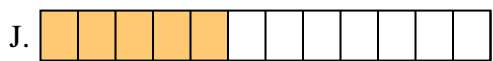
7) $\frac{1}{8} + \frac{1}{8} + \frac{1}{8} + \frac{1}{8}$




8) $\frac{1}{3} + \frac{1}{3}$




9) $\frac{1}{6} + \frac{1}{6} + \frac{1}{6} + \frac{1}{6} + \frac{1}{6}$



10) $\frac{1}{12} + \frac{1}{12} + \frac{1}{12} + \frac{1}{12}$




11) $\frac{1}{10} + \frac{1}{10} + \frac{1}{10} + \frac{1}{10}$



12) $\frac{1}{5} + \frac{1}{5} + \frac{1}{5} + \frac{1}{5}$




13) $\frac{1}{4} + \frac{1}{4}$



14) $\frac{1}{8} + \frac{1}{8} + \frac{1}{8} + \frac{1}{8} + \frac{1}{8} + \frac{1}{8}$



15) $\frac{1}{5} + \frac{1}{5}$

**Respuestas**Ej. **A** 1. **F** 2. **P** 3. **N** 4. **O** 5. **H** 6. **J** 7. **C** 8. **K** 9. **L** 10. **I** 11. **D** 12. **B** 13. **M** 14. **G** 15. **E**