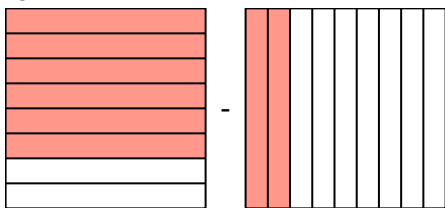




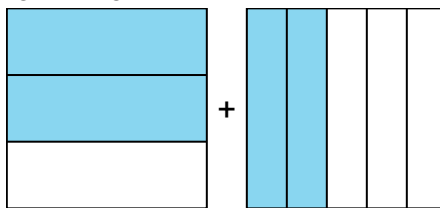
Resuelve cada problema.

Respuestas

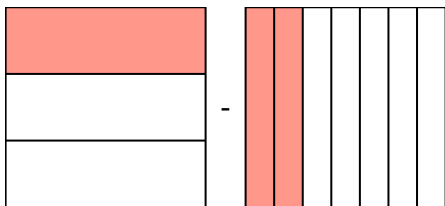
1) $\frac{6}{8} - \frac{2}{9} =$



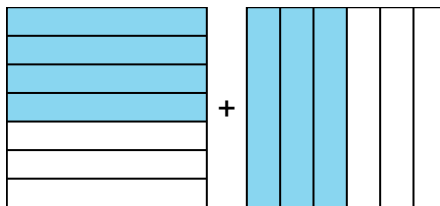
2) $\frac{2}{3} + \frac{2}{5} =$



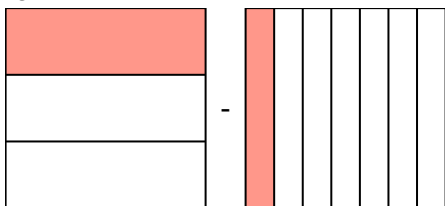
3) $\frac{1}{3} - \frac{2}{7} =$



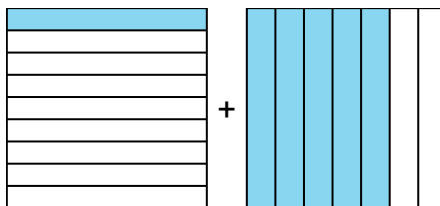
4) $\frac{4}{7} + \frac{3}{6} =$



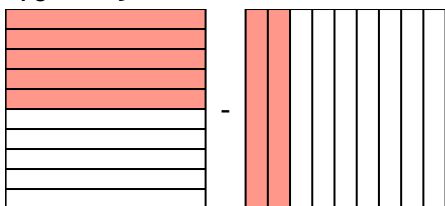
5) $\frac{1}{3} - \frac{1}{7} =$



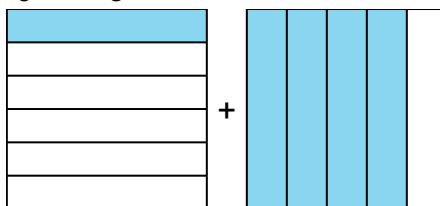
6) $\frac{1}{9} + \frac{5}{7} =$



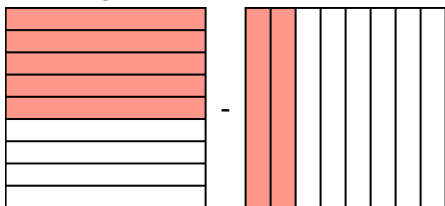
7) $\frac{5}{10} - \frac{2}{9} =$



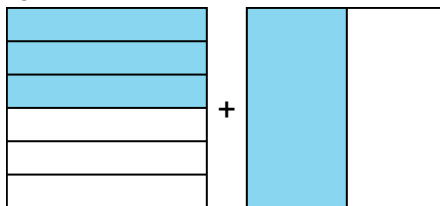
8) $\frac{1}{6} + \frac{4}{5} =$



9) $\frac{5}{9} - \frac{2}{8} =$



10) $\frac{3}{6} + \frac{1}{2} =$

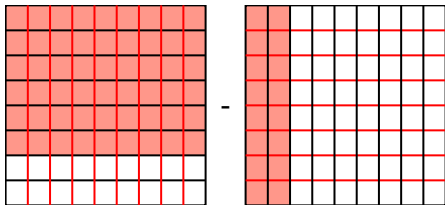


1. _____
2. _____
3. _____
4. _____
5. _____
6. _____
7. _____
8. _____
9. _____
10. _____

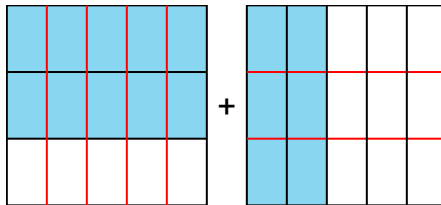


Resuelve cada problema.

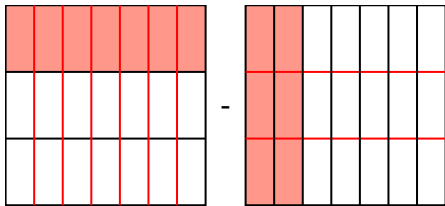
1) $\frac{6}{8} - \frac{2}{9} =$



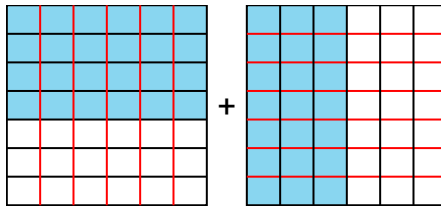
2) $\frac{2}{3} + \frac{2}{5} =$



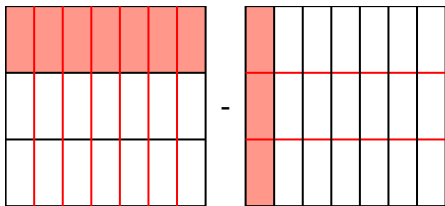
3) $\frac{1}{3} - \frac{2}{7} =$



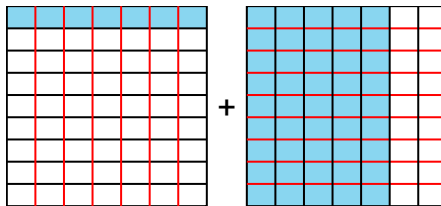
4) $\frac{4}{7} + \frac{3}{6} =$



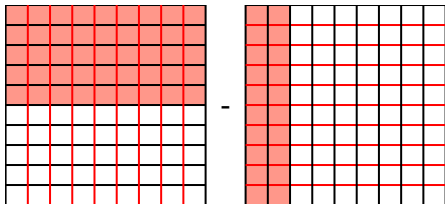
5) $\frac{1}{3} - \frac{1}{7} =$



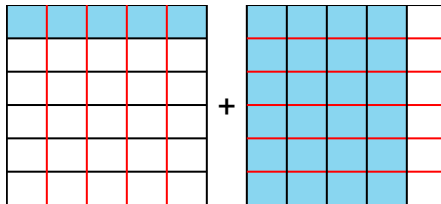
6) $\frac{1}{9} + \frac{5}{7} =$



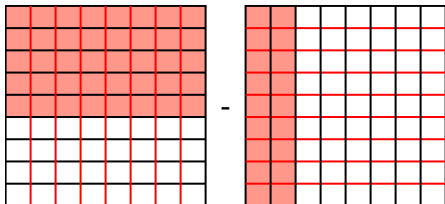
7) $\frac{5}{10} - \frac{2}{9} =$



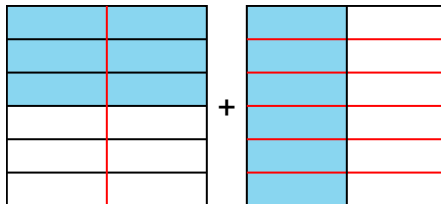
8) $\frac{1}{6} + \frac{4}{5} =$



9) $\frac{5}{9} - \frac{2}{8} =$



10) $\frac{3}{6} + \frac{1}{2} =$

**Respuestas**

1. $\frac{70}{72}$
2. $1 \frac{1}{15}$
3. $\frac{13}{21}$
4. $1 \frac{3}{42}$
5. $\frac{10}{21}$
6. $\frac{52}{63}$
7. $\frac{65}{90}$
8. $\frac{29}{30}$
9. $\frac{58}{72}$
10. $\frac{6}{6}$