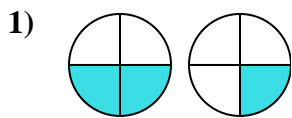


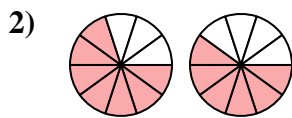


Determina cuál letra compara mejor las fracciones mostradas.

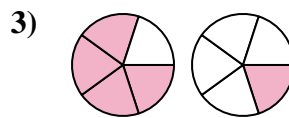
Respuestas



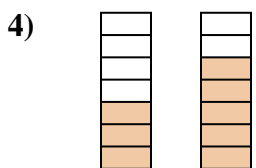
- A. $\frac{2}{2} < \frac{3}{1}$
- B. $\frac{2}{2} > \frac{1}{3}$
- C. $\frac{2}{2} < \frac{1}{3}$
- D. $\frac{2}{4} > \frac{1}{4}$



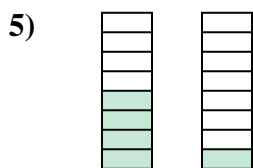
- A. $\frac{7}{10} > \frac{6}{10}$
- B. $\frac{7}{3} < \frac{6}{4}$
- C. $\frac{7}{10} < \frac{6}{10}$
- D. $\frac{10}{7} > \frac{10}{6}$



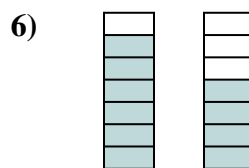
- A. $\frac{4}{1} < \frac{1}{4}$
- B. $\frac{4}{5} > \frac{1}{5}$
- C. $\frac{4}{1} > \frac{1}{4}$
- D. $\frac{1}{4} < \frac{4}{1}$



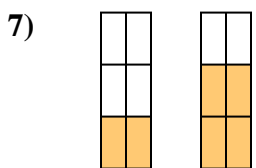
- A. $\frac{7}{3} > \frac{7}{5}$
- B. $\frac{3}{7} < \frac{5}{7}$
- C. $\frac{4}{3} > \frac{2}{5}$
- D. $\frac{3}{4} > \frac{5}{2}$



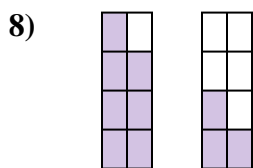
- A. $\frac{4}{8} > \frac{1}{8}$
- B. $\frac{4}{4} > \frac{1}{7}$
- C. $\frac{4}{4} < \frac{1}{7}$
- D. $\frac{4}{4} < \frac{7}{1}$



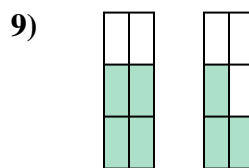
- A. $\frac{6}{1} > \frac{4}{3}$
- B. $\frac{1}{6} < \frac{3}{4}$
- C. $\frac{6}{7} > \frac{4}{7}$
- D. $\frac{6}{7} < \frac{4}{7}$



- A. $\frac{2}{6} < \frac{4}{6}$
- B. $\frac{2}{6} > \frac{4}{6}$
- C. $\frac{4}{2} > \frac{2}{4}$
- D. $\frac{2}{4} < \frac{4}{2}$



- A. $\frac{7}{8} > \frac{3}{8}$
- B. $\frac{7}{1} > \frac{3}{5}$
- C. $\frac{7}{8} < \frac{3}{8}$
- D. $\frac{1}{7} < \frac{5}{3}$



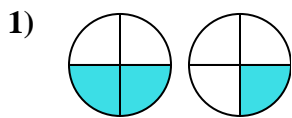
- A. $\frac{2}{4} < \frac{3}{3}$
- B. $\frac{6}{4} > \frac{6}{3}$
- C. $\frac{4}{2} < \frac{3}{3}$
- D. $\frac{4}{6} > \frac{3}{6}$

- 1. _____
- 2. _____
- 3. _____
- 4. _____
- 5. _____
- 6. _____
- 7. _____
- 8. _____
- 9. _____

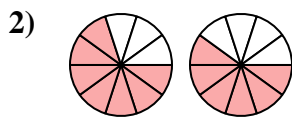


Determina cuál letra compara mejor las fracciones mostradas.

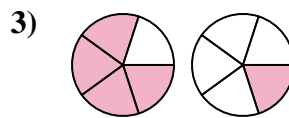
Respuestas



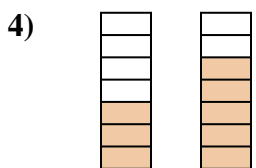
- A. $\frac{2}{2} < \frac{3}{1}$
- B. $\frac{2}{2} > \frac{1}{3}$
- C. $\frac{2}{2} < \frac{1}{3}$
- D. $\frac{2}{4} > \frac{1}{4}$



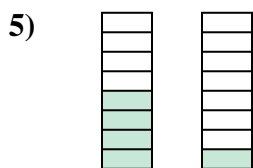
- A. $\frac{7}{10} > \frac{6}{10}$
- B. $\frac{7}{3} < \frac{6}{4}$
- C. $\frac{7}{10} < \frac{6}{10}$
- D. $\frac{10}{7} > \frac{10}{6}$



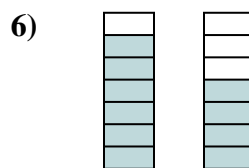
- A. $\frac{4}{1} < \frac{1}{4}$
- B. $\frac{4}{5} > \frac{1}{5}$
- C. $\frac{4}{1} > \frac{1}{4}$
- D. $\frac{1}{4} < \frac{4}{1}$



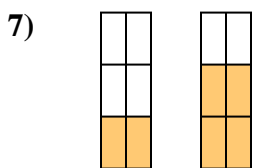
- A. $\frac{7}{3} > \frac{7}{5}$
- B. $\frac{3}{7} < \frac{5}{7}$
- C. $\frac{4}{3} > \frac{2}{5}$
- D. $\frac{3}{4} > \frac{5}{2}$



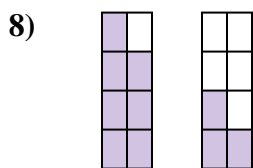
- A. $\frac{4}{8} > \frac{1}{8}$
- B. $\frac{4}{4} > \frac{1}{7}$
- C. $\frac{4}{4} < \frac{1}{7}$
- D. $\frac{4}{4} < \frac{7}{1}$



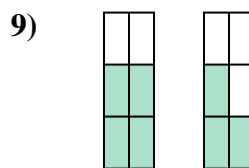
- A. $\frac{6}{1} > \frac{4}{3}$
- B. $\frac{1}{6} < \frac{3}{4}$
- C. $\frac{6}{7} > \frac{4}{7}$
- D. $\frac{6}{7} < \frac{4}{7}$



- A. $\frac{2}{6} < \frac{4}{6}$
- B. $\frac{2}{6} > \frac{4}{6}$
- C. $\frac{4}{2} > \frac{2}{4}$
- D. $\frac{2}{4} < \frac{4}{2}$



- A. $\frac{7}{8} > \frac{3}{8}$
- B. $\frac{7}{1} > \frac{3}{5}$
- C. $\frac{7}{8} < \frac{3}{8}$
- D. $\frac{1}{7} < \frac{5}{3}$



- A. $\frac{2}{4} < \frac{3}{3}$
- B. $\frac{6}{4} > \frac{6}{3}$
- C. $\frac{4}{2} < \frac{3}{3}$
- D. $\frac{4}{6} > \frac{3}{6}$

- 1. **D**
- 2. **A**
- 3. **B**
- 4. **B**
- 5. **A**
- 6. **C**
- 7. **A**
- 8. **A**
- 9. **D**