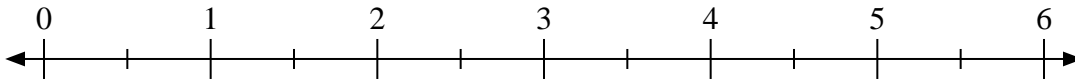


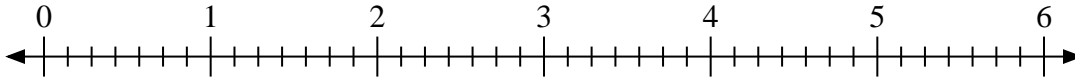


Usa la recta numérica para resolver.

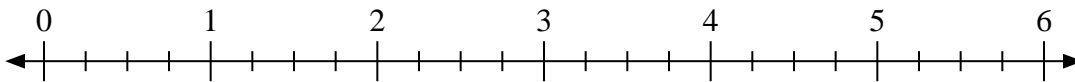
1)  $4 \div \frac{1}{2}$



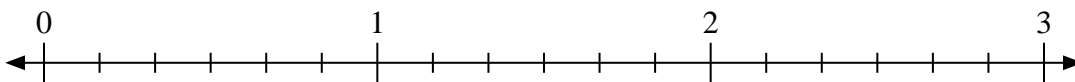
2)  $2 \div \frac{1}{7}$



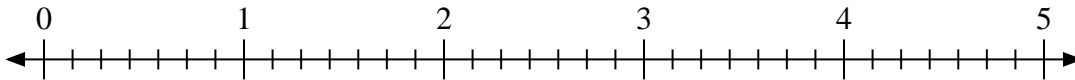
3)  $5 \div \frac{1}{4}$



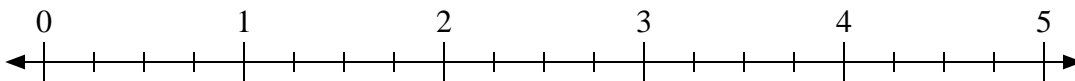
4)  $2 \div \frac{3}{6}$



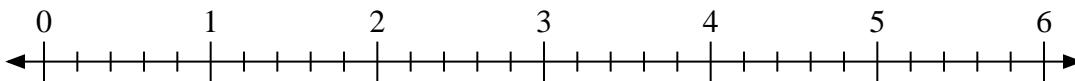
5)  $2 \div \frac{4}{7}$



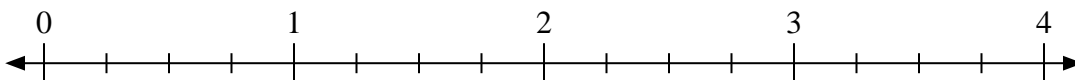
6)  $4 \div \frac{3}{4}$



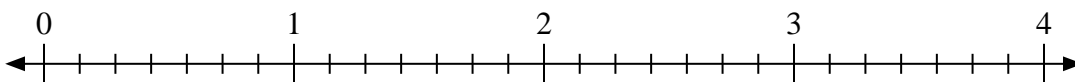
7)  $4 \div \frac{1}{5}$



8)  $3 \div \frac{3}{4}$



9)  $3 \div \frac{5}{7}$



**Respuestas**

1. \_\_\_\_\_

2. \_\_\_\_\_

3. \_\_\_\_\_

4. \_\_\_\_\_

5. \_\_\_\_\_

6. \_\_\_\_\_

7. \_\_\_\_\_

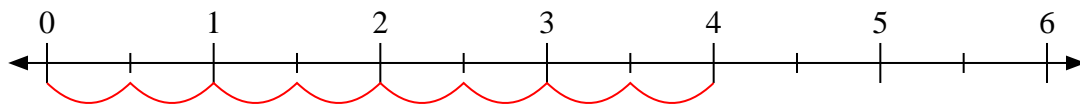
8. \_\_\_\_\_

9. \_\_\_\_\_

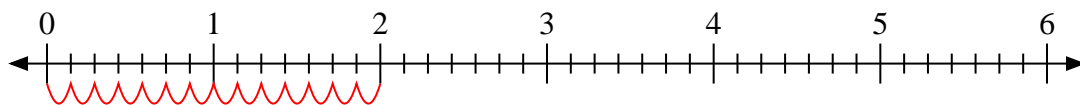


Usa la recta numérica para resolver.

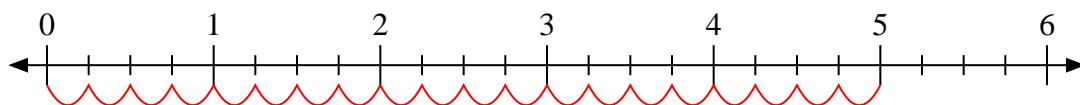
1)  $4 \div \frac{1}{2}$



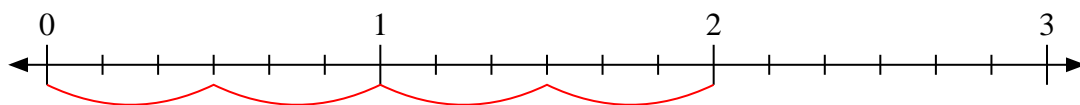
2)  $2 \div \frac{1}{7}$



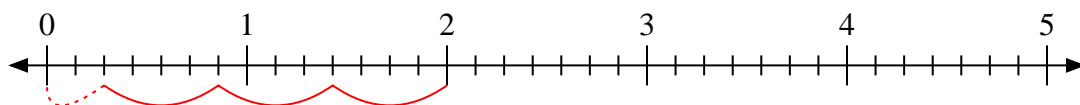
3)  $5 \div \frac{1}{4}$



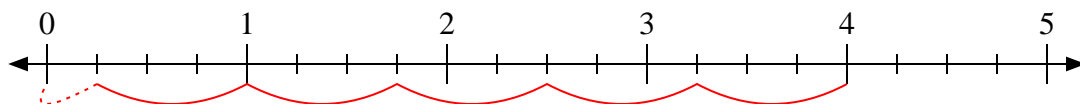
4)  $2 \div \frac{3}{6}$



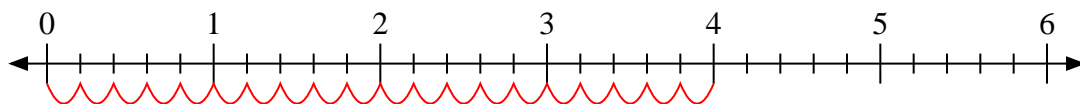
5)  $2 \div \frac{4}{7}$



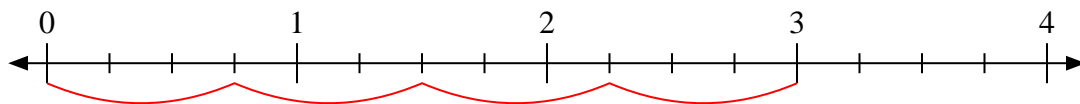
6)  $4 \div \frac{3}{4}$



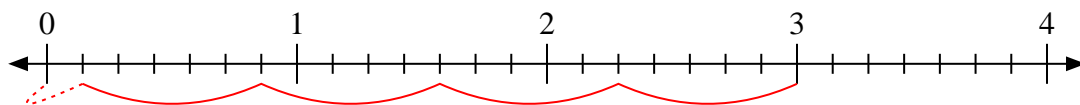
7)  $4 \div \frac{1}{5}$



8)  $3 \div \frac{3}{4}$



9)  $3 \div \frac{5}{7}$



**Respuestas**

1. 8

2. 14

3. 20

4. 4

5.  $3 \frac{2}{4}$

6.  $5 \frac{1}{3}$

7. 20

8. 4

9.  $4 \frac{1}{5}$