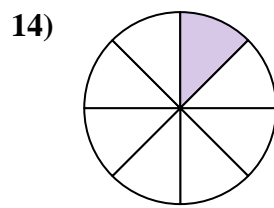
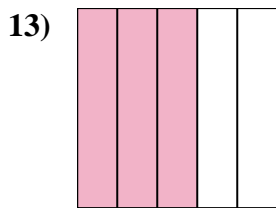
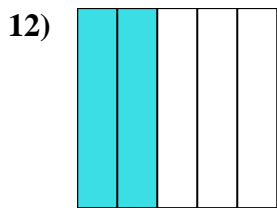
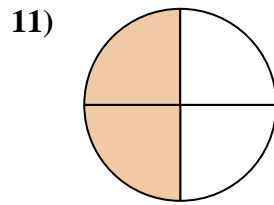
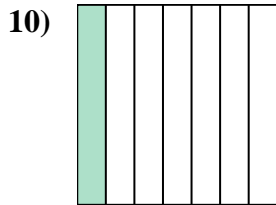
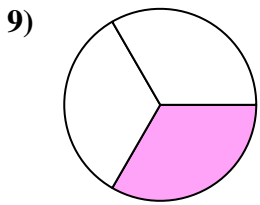
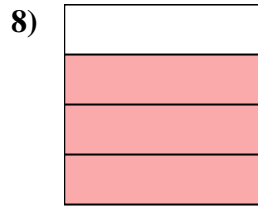
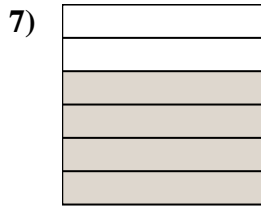
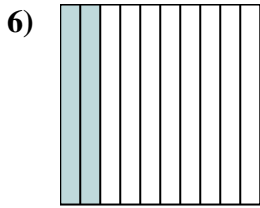
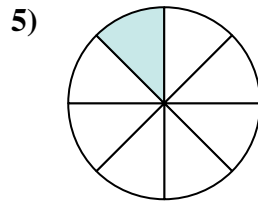
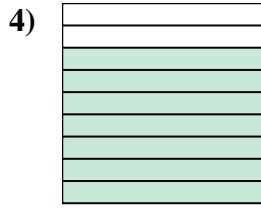
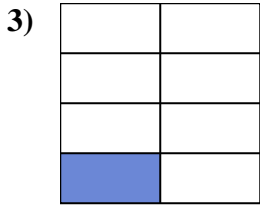
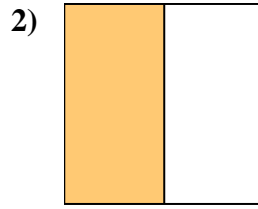
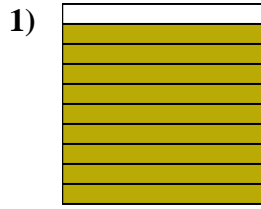
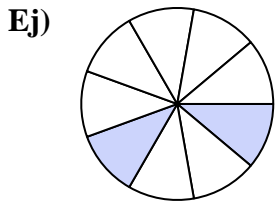




Escribe la cantidad sombreada en forma escrita.



**Respuestas**

Ej. dos novenos

1. \_\_\_\_\_

2. \_\_\_\_\_

3. \_\_\_\_\_

4. \_\_\_\_\_

5. \_\_\_\_\_

6. \_\_\_\_\_

7. \_\_\_\_\_

8. \_\_\_\_\_

9. \_\_\_\_\_

10. \_\_\_\_\_

11. \_\_\_\_\_

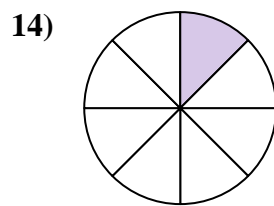
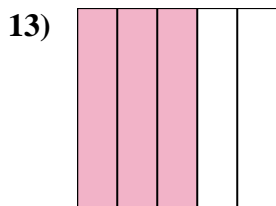
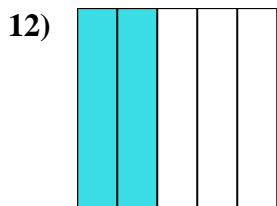
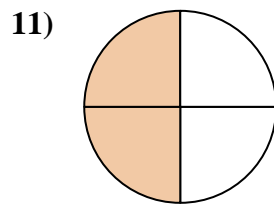
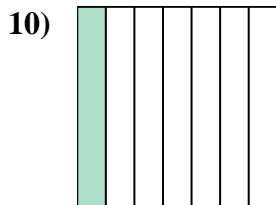
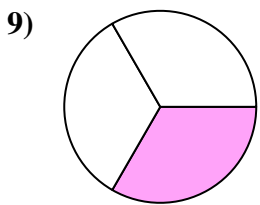
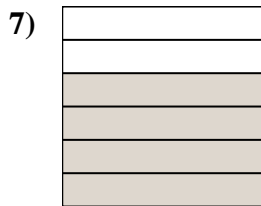
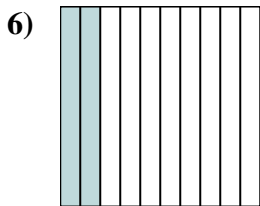
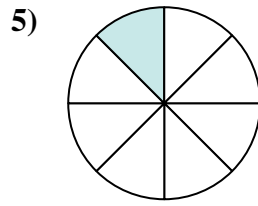
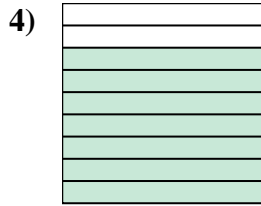
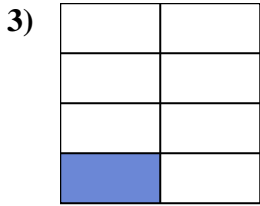
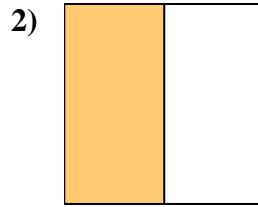
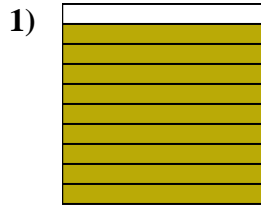
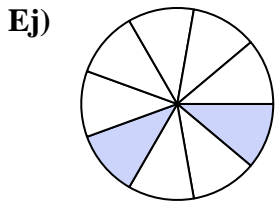
12. \_\_\_\_\_

13. \_\_\_\_\_

14. \_\_\_\_\_



Escriba la cantidad sombreada en forma escrita.



**Respuestas**

Ej. dos novenos

1. nueve décimos

2. una mitad

3. un séptimo

4. siete novenos

5. uno octo

6. dos décimas

7. cuatro sextos

8. tres cuartos

9. un tercio

10. un séptimo

11. dos cuartos

12. dos quintas partes

13. tres quintos

14. uno octo