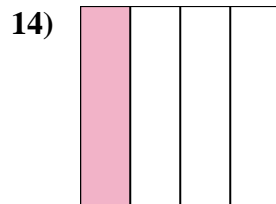
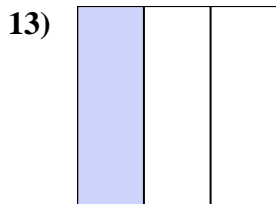
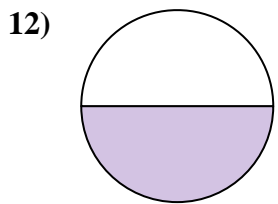
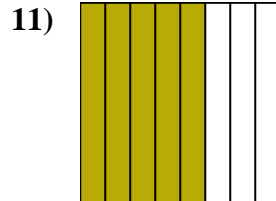
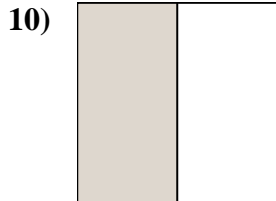
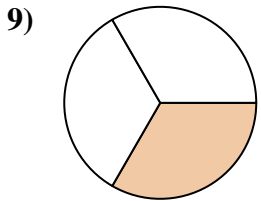
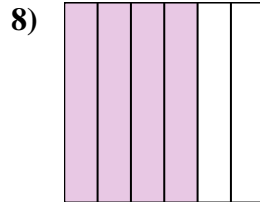
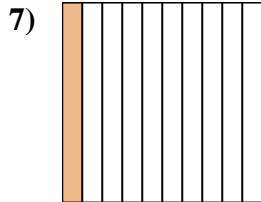
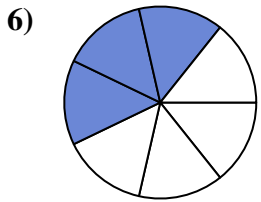
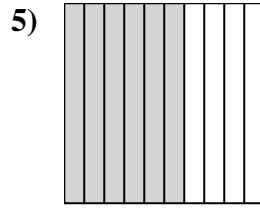
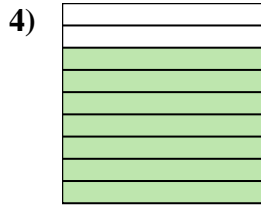
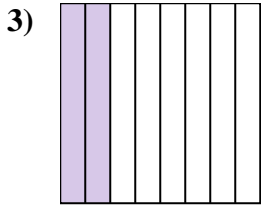
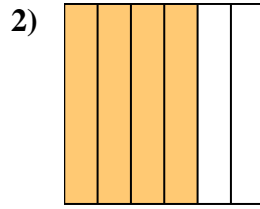
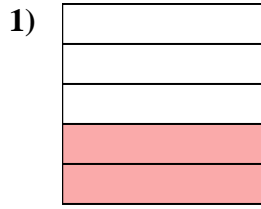
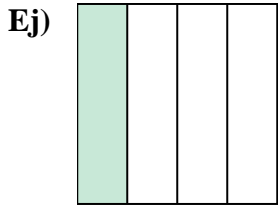




Escriba la cantidad sombreada en forma escrita.



**Respuestas**

Ej. **un cuarto**

1. \_\_\_\_\_

2. \_\_\_\_\_

3. \_\_\_\_\_

4. \_\_\_\_\_

5. \_\_\_\_\_

6. \_\_\_\_\_

7. \_\_\_\_\_

8. \_\_\_\_\_

9. \_\_\_\_\_

10. \_\_\_\_\_

11. \_\_\_\_\_

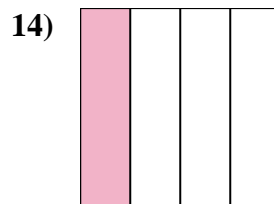
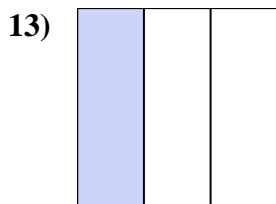
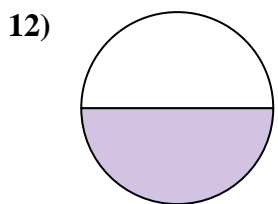
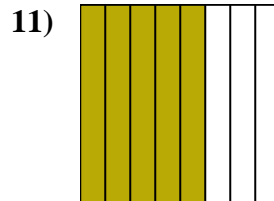
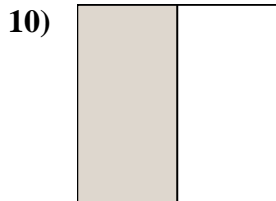
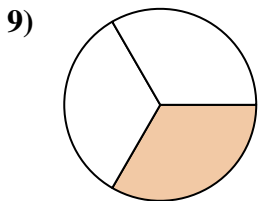
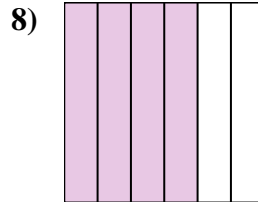
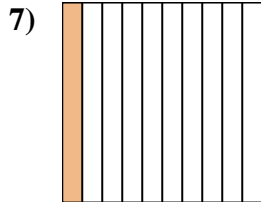
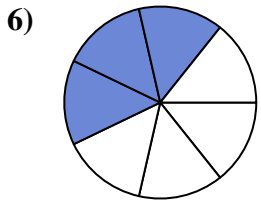
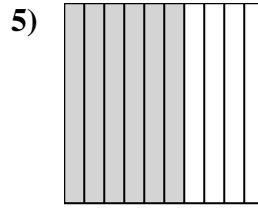
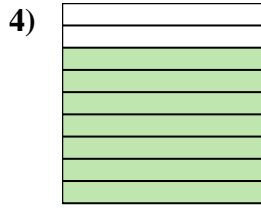
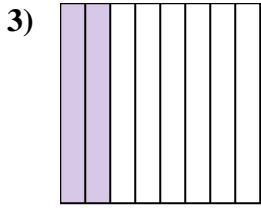
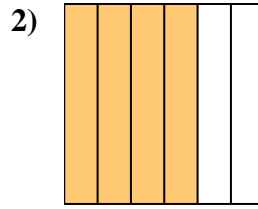
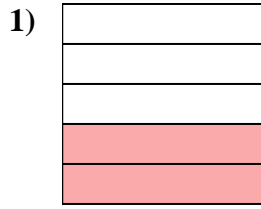
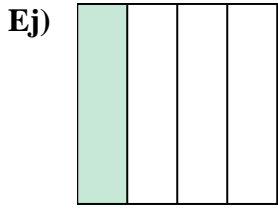
12. \_\_\_\_\_

13. \_\_\_\_\_

14. \_\_\_\_\_



Escriba la cantidad sombreada en forma escrita.



**Respuestas**

Ej. un cuarto

1. dos quintas partes

2. cuatro sextos

3. dos octavos

4. siete novenos

5. seis décimas

6. tres séptimos

7. una décima parte

8. cuatro sextos

9. un tercio

10. una mitad

11. cinco octavos

12. una mitad

13. un tercio

14. un cuarto