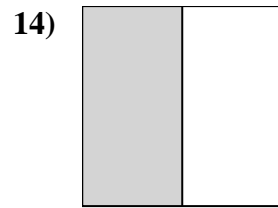
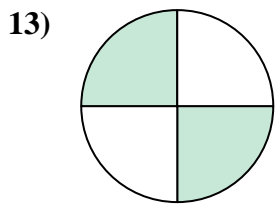
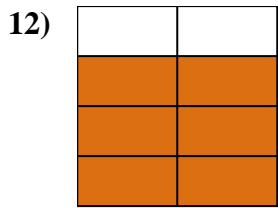
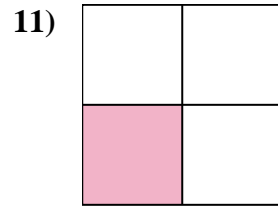
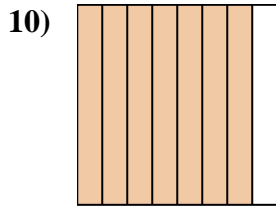
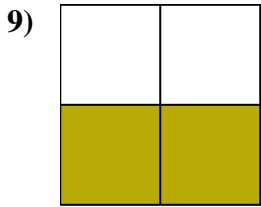
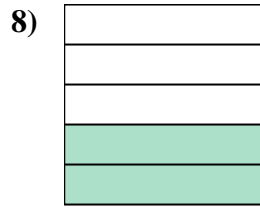
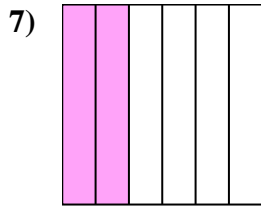
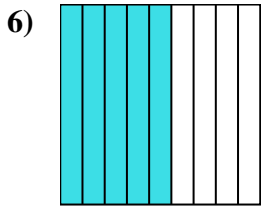
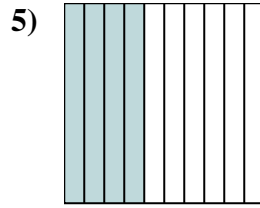
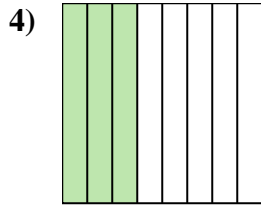
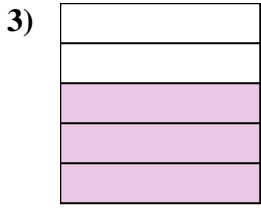
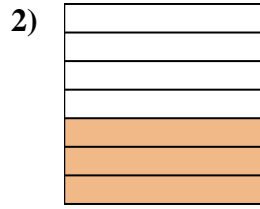
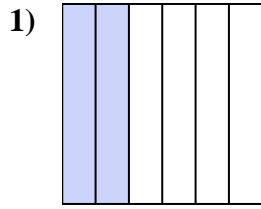
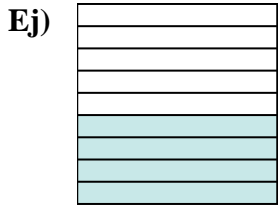




Escriba la cantidad sombreada en forma escrita.



Respuestas

Ej. **cuatro novenos**

1. _____

2. _____

3. _____

4. _____

5. _____

6. _____

7. _____

8. _____

9. _____

10. _____

11. _____

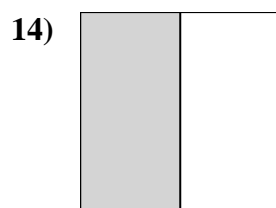
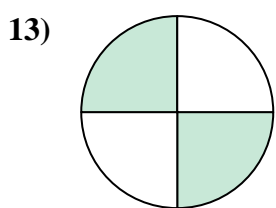
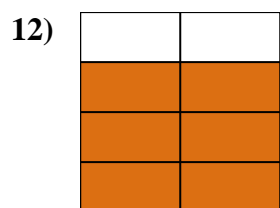
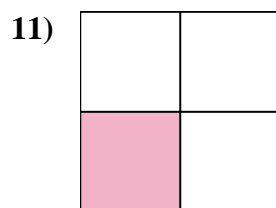
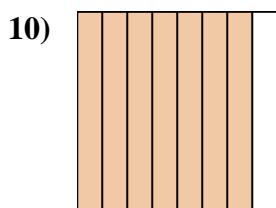
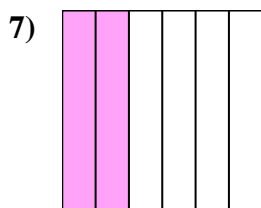
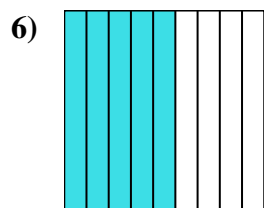
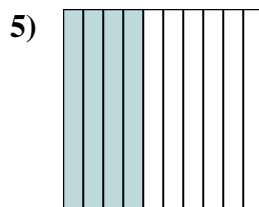
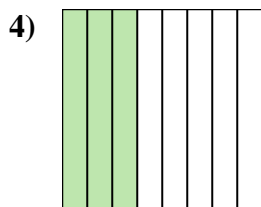
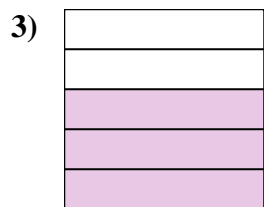
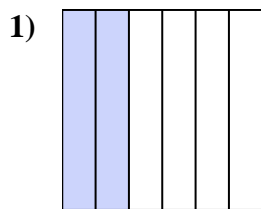

12. _____

13. _____

14. _____



Escriba la cantidad sombreada en forma escrita.



Respuestas

Ej. **cuatro novenos**

1. **dos sextos**

2. **tres séptimos**

3. **tres quintos**

4. **tres octavos**

5. **cuatro décimas**

6. **cinco novenos**

7. **dos sextos**

8. **dos quintas partes**

9. **dos tercios**

10. **siete octavos**

11. **un tercio**

12. **seis séptimos**

13. **dos cuartos**

14. **una mitad**