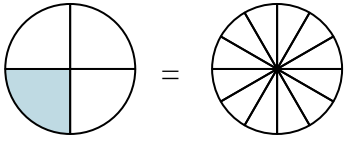


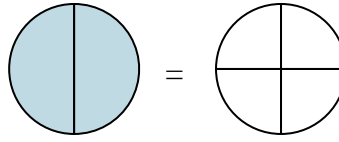


Sombrea la fracción visual para encontrar la fracción equivalente.

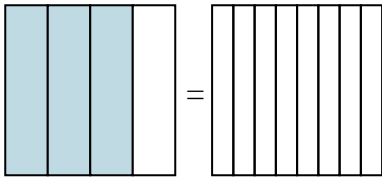
Ej)  $\frac{1}{4} = \frac{3}{12}$



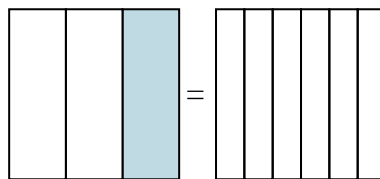
1)  $\frac{2}{2} =$



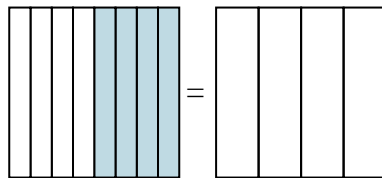
2)  $\frac{3}{4} =$



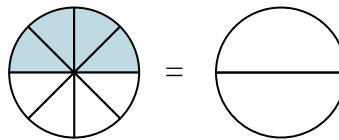
3)  $\frac{1}{3} =$



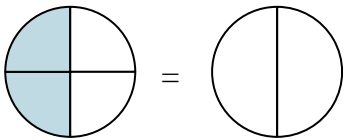
4)  $\frac{4}{8} =$



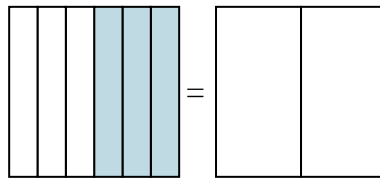
5)  $\frac{4}{8} =$



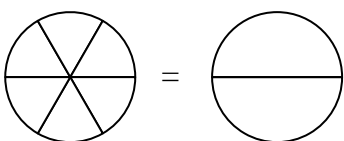
6)  $\frac{2}{4} =$



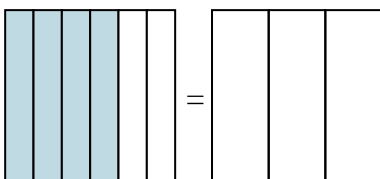
7)  $\frac{3}{6} =$



8)  $\frac{0}{6} =$



9)  $\frac{4}{6} =$



**Respuestas**

Ej.  $\frac{3}{12}$

1. \_\_\_\_\_

2. \_\_\_\_\_

3. \_\_\_\_\_

4. \_\_\_\_\_

5. \_\_\_\_\_

6. \_\_\_\_\_

7. \_\_\_\_\_

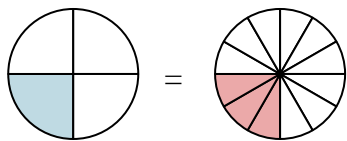
8. \_\_\_\_\_

9. \_\_\_\_\_

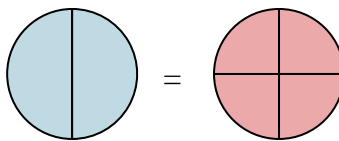


Sombrea la fracción visual para encontrar la fracción equivalente.

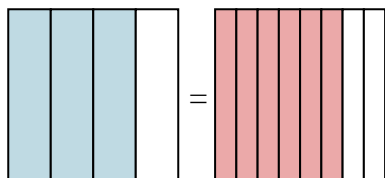
Ej)  $\frac{1}{4} = \frac{3}{12}$



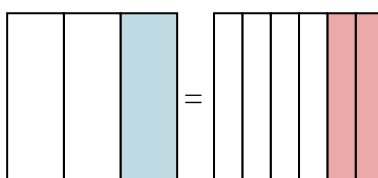
1)  $\frac{2}{2} = \frac{4}{4}$



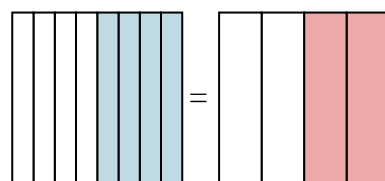
2)  $\frac{3}{4} = \frac{6}{8}$



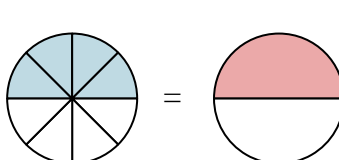
3)  $\frac{1}{3} = \frac{2}{6}$



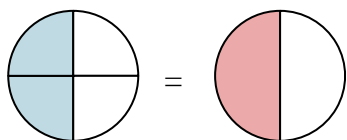
4)  $\frac{4}{8} = \frac{2}{4}$



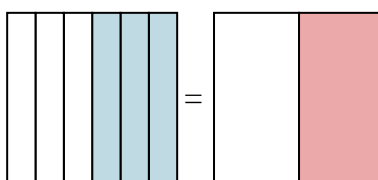
5)  $\frac{4}{8} = \frac{1}{2}$



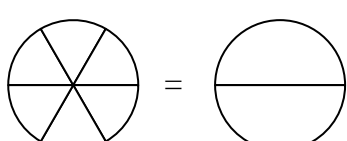
6)  $\frac{2}{4} = \frac{1}{2}$



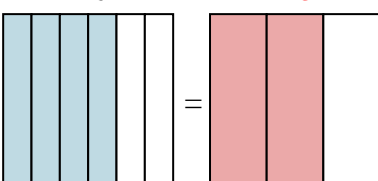
7)  $\frac{3}{6} = \frac{1}{2}$



8)  $\frac{0}{6} = \frac{0}{2}$



9)  $\frac{4}{6} = \frac{2}{3}$

**Respuestas**

Ej.  $\frac{3}{12}$

1.  $\frac{4}{4}$

2.  $\frac{6}{8}$

3.  $\frac{2}{6}$

4.  $\frac{2}{4}$

5.  $\frac{1}{2}$

6.  $\frac{1}{2}$

7.  $\frac{1}{2}$

8.  $\frac{0}{2}$

9.  $\frac{2}{3}$