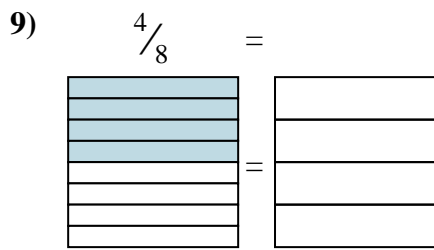
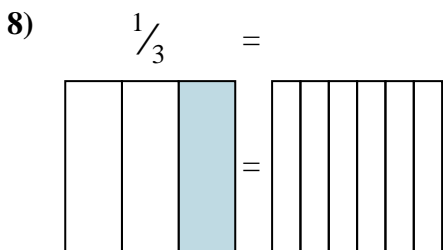
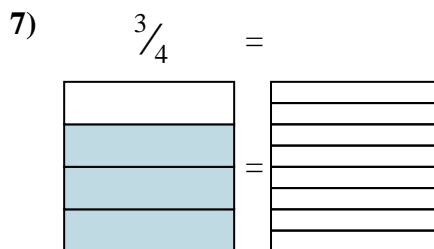
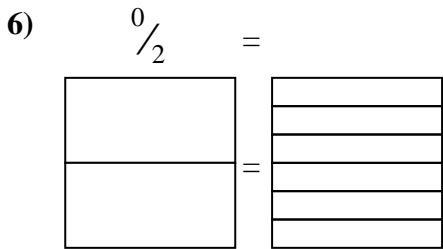
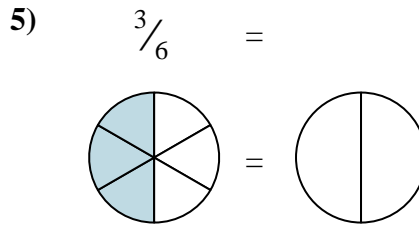
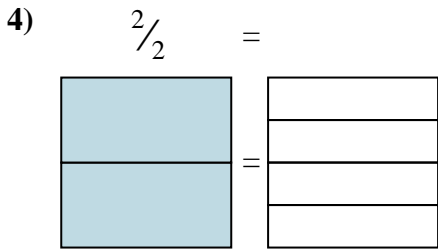
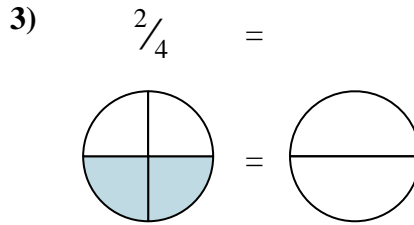
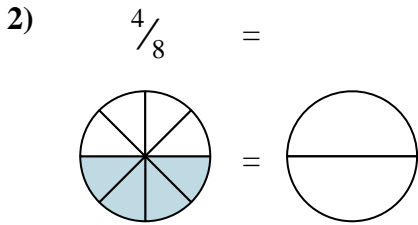
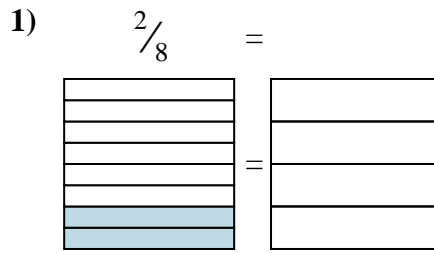
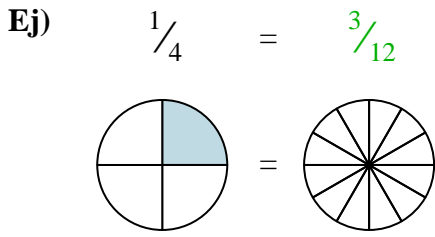




Sombrea la fracción visual para encontrar la fracción equivalente.



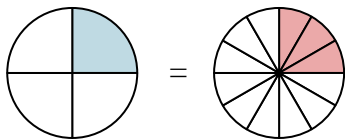
Respuestas

- Ej. $\frac{3}{12}$
1. _____
2. _____
3. _____
4. _____
5. _____
6. _____
7. _____
8. _____
9. _____

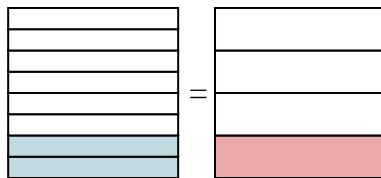


Sombrea la fracción visual para encontrar la fracción equivalente.

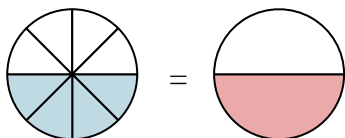
Ej) $\frac{1}{4} = \frac{3}{12}$



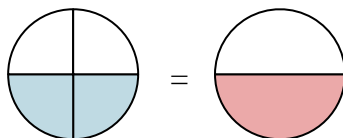
1) $\frac{2}{8} = \frac{1}{4}$



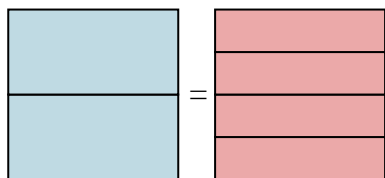
2) $\frac{4}{8} = \frac{1}{2}$



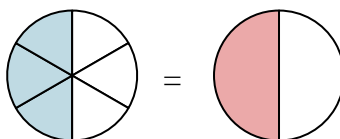
3) $\frac{2}{4} = \frac{1}{2}$



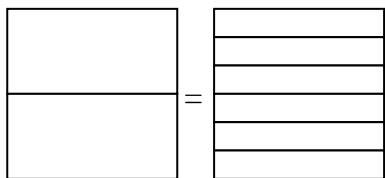
4) $\frac{2}{2} = \frac{4}{4}$



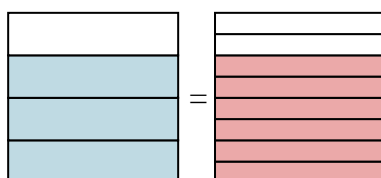
5) $\frac{3}{6} = \frac{1}{2}$



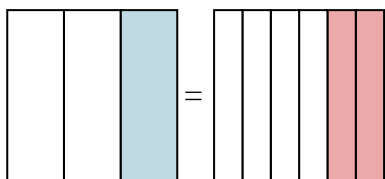
6) $\frac{0}{2} = \frac{0}{6}$



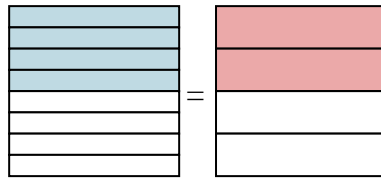
7) $\frac{3}{4} = \frac{6}{8}$



8) $\frac{1}{3} = \frac{2}{6}$



9) $\frac{4}{8} = \frac{2}{4}$

**Respuestas**

Ej. $\frac{3}{12}$

1. $\frac{1}{4}$

2. $\frac{1}{2}$

3. $\frac{1}{2}$

4. $\frac{4}{4}$

5. $\frac{1}{2}$

6. $\frac{0}{6}$

7. $\frac{6}{8}$

8. $\frac{2}{6}$

9. $\frac{2}{4}$