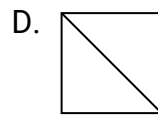
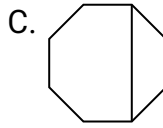
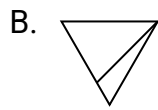
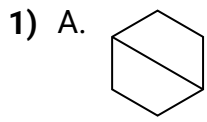


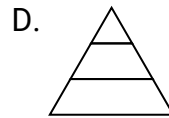
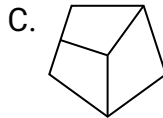
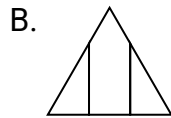
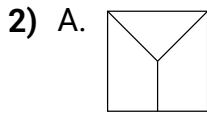


Determina cuál opción(es) muestran la forma dividida para que cada pieza tenga un área igual. Si ninguna, escribe 'ninguna'.

**Respuestas**

1. \_\_\_\_\_

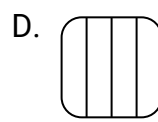
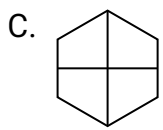
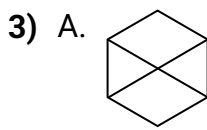
2. \_\_\_\_\_



3. \_\_\_\_\_

4. \_\_\_\_\_


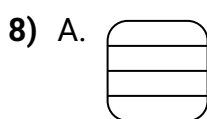
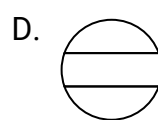
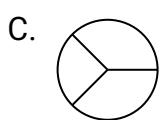
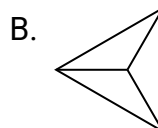
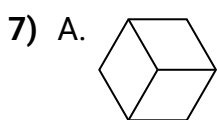
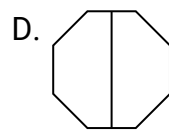
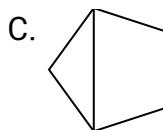

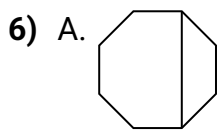
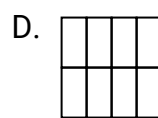
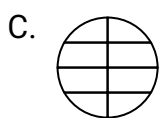
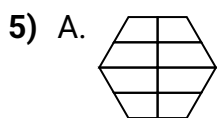
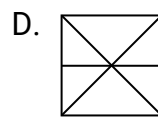
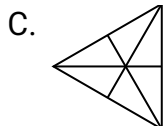
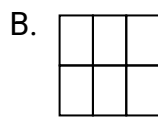
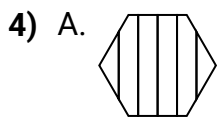
5. \_\_\_\_\_



6. \_\_\_\_\_

7. \_\_\_\_\_

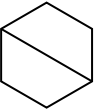

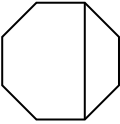

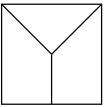
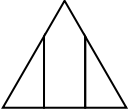
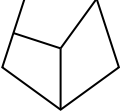
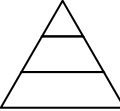
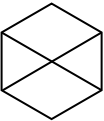

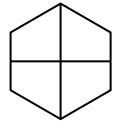
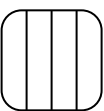
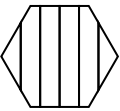

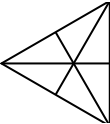
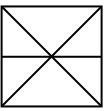
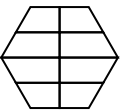
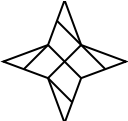
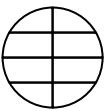
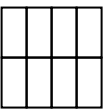
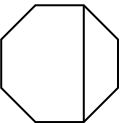
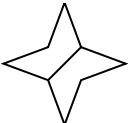
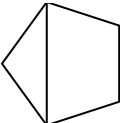
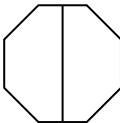
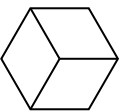
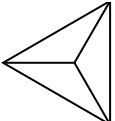
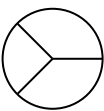
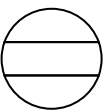
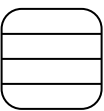


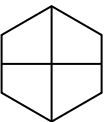
8. \_\_\_\_\_





Determina cuál opción(es) muestran la forma dividida para que cada pieza tenga un área igual. Si ninguna, escribe 'ninguna'.

**Respuestas**

- 1) A.  B.  C.  D. 
- 2) A.  B.  C.  D. 
- 3) A.  B.  C.  D. 
- 4) A.  B.  C.  D. 
- 5) A.  B.  C.  D. 
- 6) A.  B.  C.  D. 
- 7) A.  B.  C.  D. 
- 8) A.  B.  C.  D. 

1. **A,D**
2. **ninguna**
3. **C**
4. **B,C**
5. **D**
6. **B,D**
7. **A,B**
8. **B,D**