






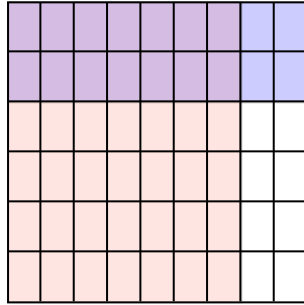
Usa la caja para mostrar de manera visual cómo multiplicar dos fracciones.

**Respuestas**

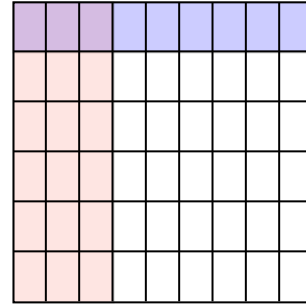
Ej)  $\frac{3}{9} \times \frac{5}{8} =$



1)  $\frac{7}{9} \times \frac{2}{6} =$



2)  $\frac{3}{9} \times \frac{1}{6} =$



Ej.  $\frac{15}{72}$

1.  $\frac{14}{54}$

2.  $\frac{3}{54}$

3.  $\frac{10}{28}$

4.  $\frac{1}{15}$

5.  $\frac{5}{12}$

6.  $\frac{6}{12}$

7.  $\frac{5}{27}$

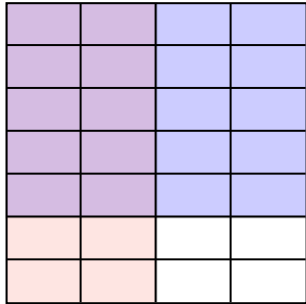
8.  $\frac{4}{10}$

9.  $\frac{2}{30}$

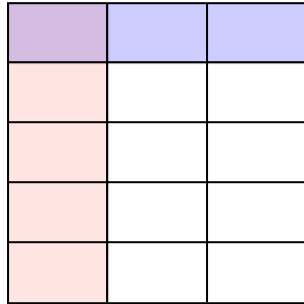
10.  $\frac{1}{18}$

11.  $\frac{24}{35}$

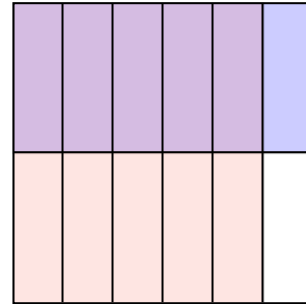
3)  $\frac{2}{4} \times \frac{5}{7} =$




4)  $\frac{1}{3} \times \frac{1}{5} =$



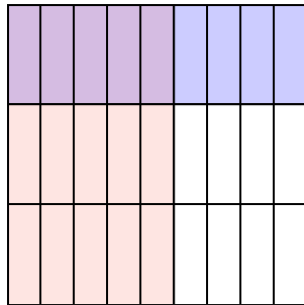
5)  $\frac{5}{6} \times \frac{1}{2} =$



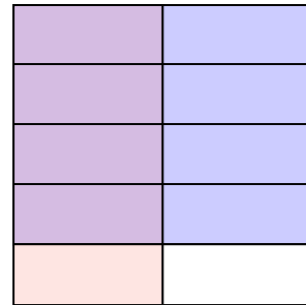
6)  $\frac{3}{4} \times \frac{2}{3} =$



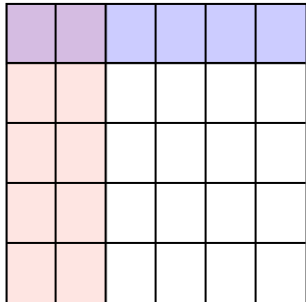
7)  $\frac{5}{9} \times \frac{1}{3} =$



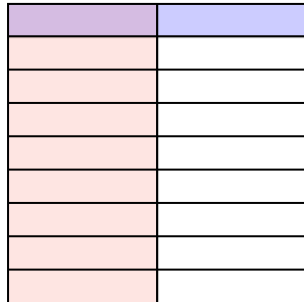
8)  $\frac{1}{2} \times \frac{4}{5} =$



9)  $\frac{2}{6} \times \frac{1}{5} =$



10)  $\frac{1}{2} \times \frac{1}{9} =$



11)  $\frac{6}{7} \times \frac{4}{5} =$

