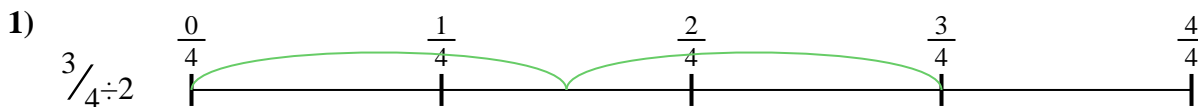





Usa la recta numérica para resolver cada problema. El primero ya está marcado como ejemplo.

**Respuestas**



1. \_\_\_\_\_

2. \_\_\_\_\_



3. \_\_\_\_\_

4. \_\_\_\_\_



5. \_\_\_\_\_

6. \_\_\_\_\_


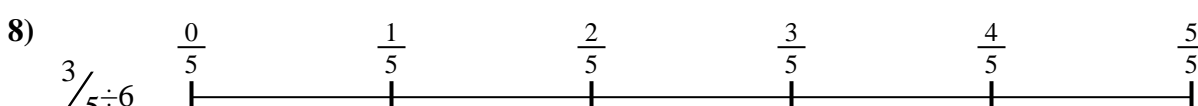
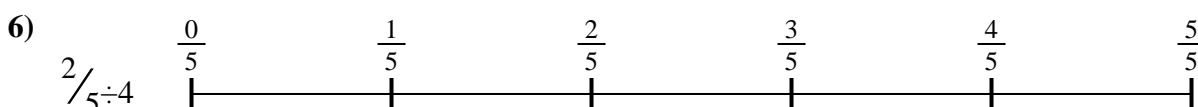


7. \_\_\_\_\_

8. \_\_\_\_\_



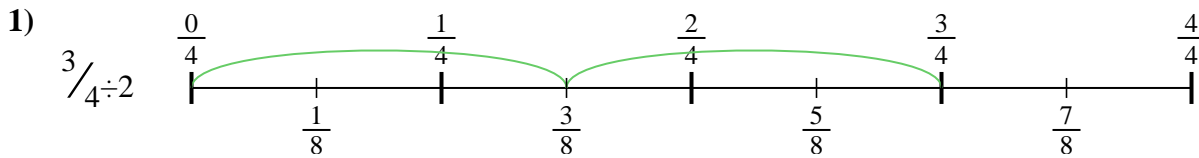
9. \_\_\_\_\_



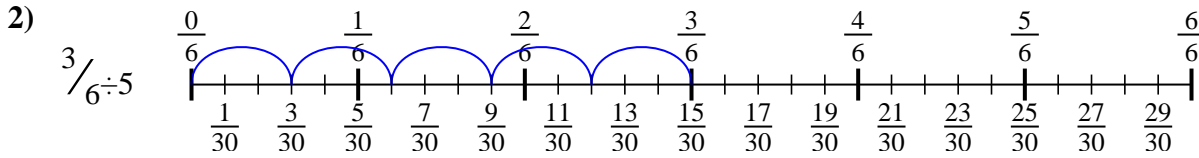


Usa la recta numérica para resolver cada problema. El primero ya está marcado como ejemplo.

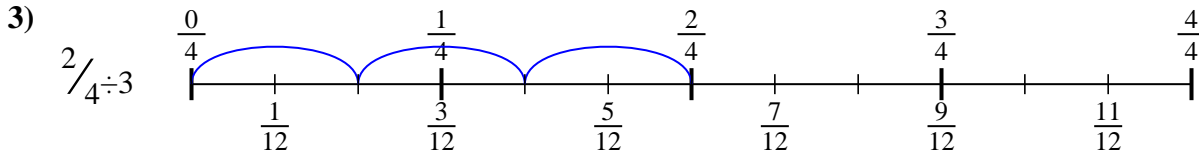
**Respuestas**



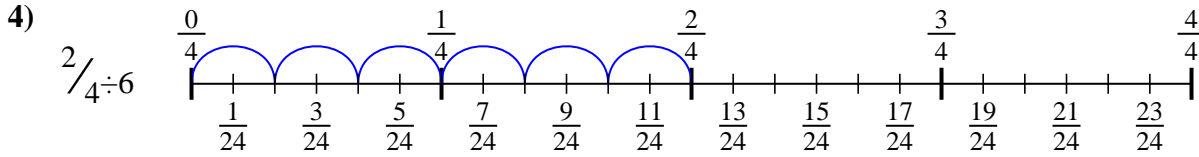
1.  $\frac{3}{8}$



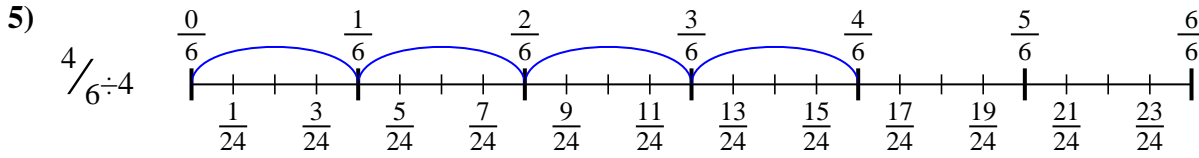
2.  $\frac{3}{30}$



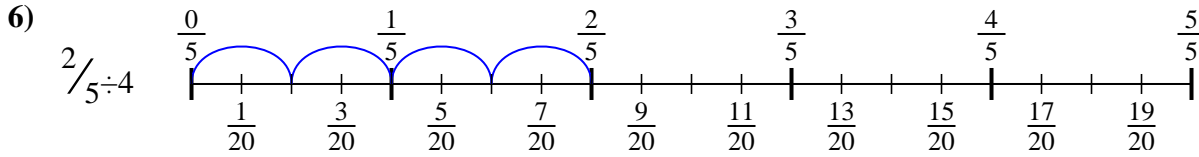
3.  $\frac{2}{12}$



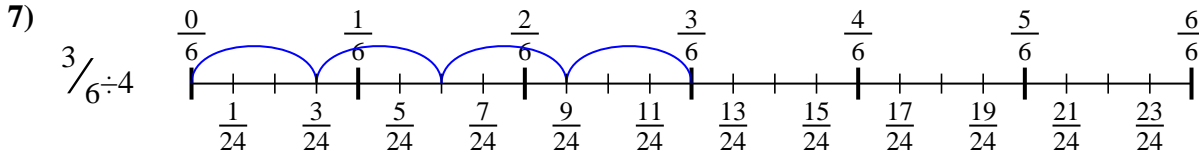
4.  $\frac{2}{24}$



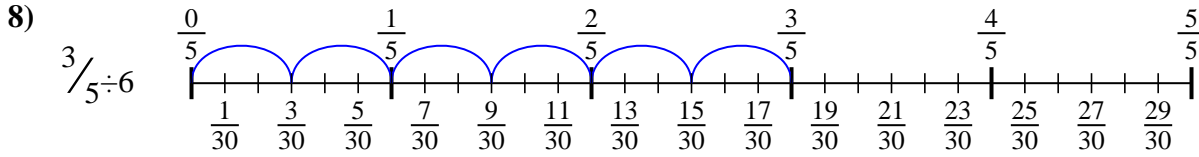
5.  $\frac{4}{24}$



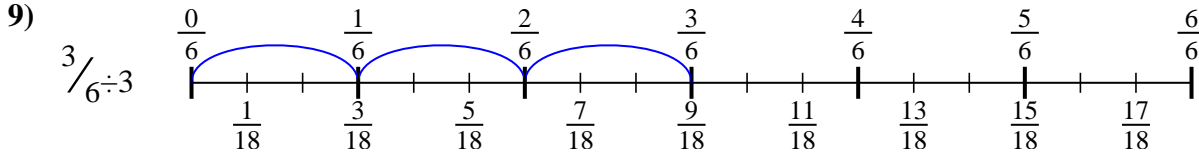
6.  $\frac{2}{20}$



7.  $\frac{3}{24}$



8.  $\frac{3}{30}$



9.  $\frac{3}{18}$



Usa la recta numérica para resolver cada problema. El primero ya está marcado como ejemplo.

**Respuestas**

$\frac{3}{24}$	$\frac{3}{30}$	$\frac{2}{20}$	$\frac{3}{30}$
$\frac{4}{24}$	$\frac{2}{12}$	$\frac{3}{8}$	$\frac{2}{24}$
$\frac{3}{18}$			

1. \_\_\_\_\_

2. \_\_\_\_\_

3. \_\_\_\_\_

4. \_\_\_\_\_

5. \_\_\_\_\_

6. \_\_\_\_\_

7. \_\_\_\_\_

8. \_\_\_\_\_

9. \_\_\_\_\_

