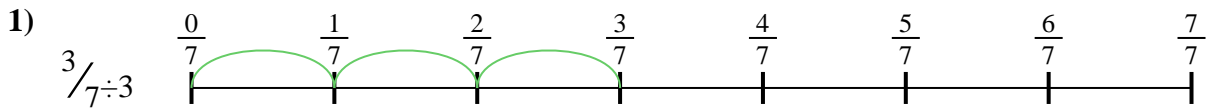





Usa la recta numérica para resolver cada problema. El primero ya está marcado como ejemplo.

**Respuestas**




1. \_\_\_\_\_

2. \_\_\_\_\_




3. \_\_\_\_\_

4. \_\_\_\_\_



5. \_\_\_\_\_

6. \_\_\_\_\_

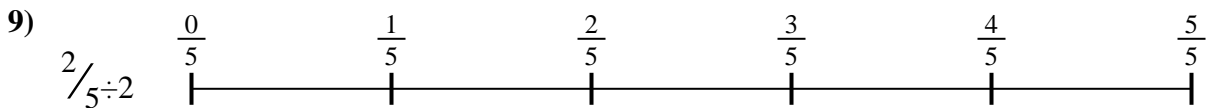
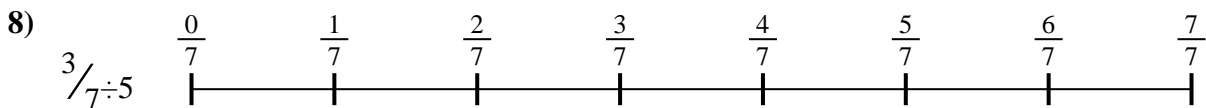
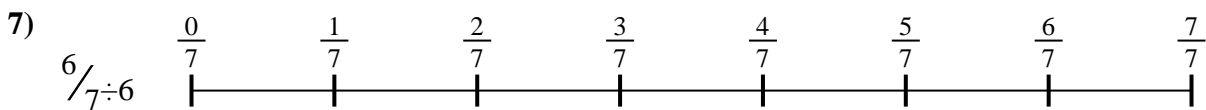
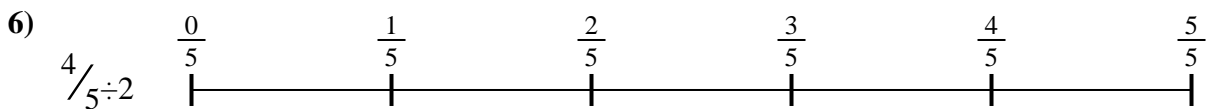


7. \_\_\_\_\_

8. \_\_\_\_\_

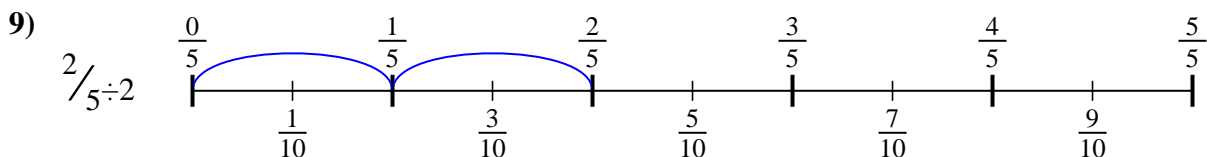
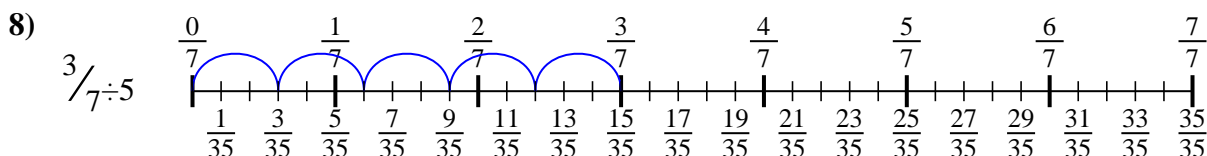
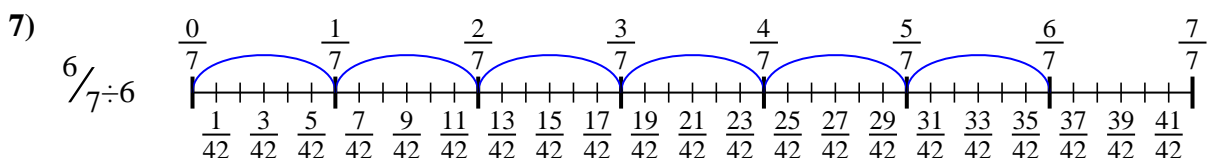
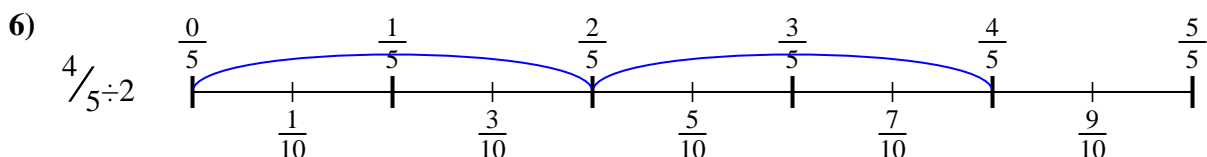
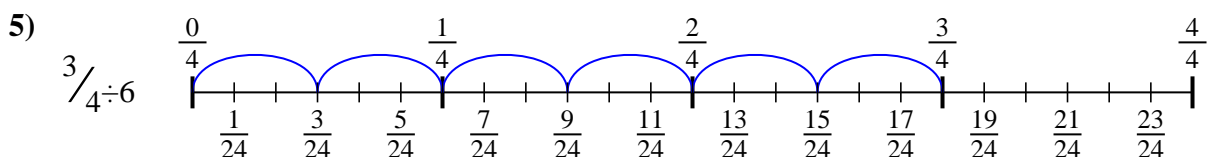
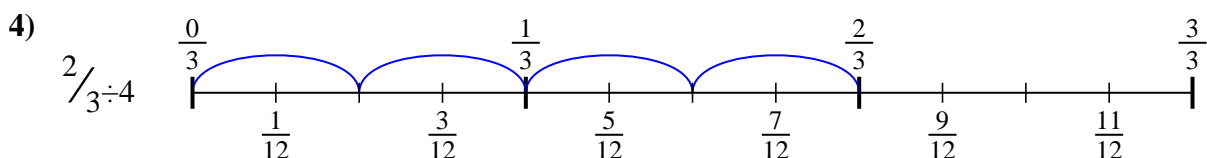
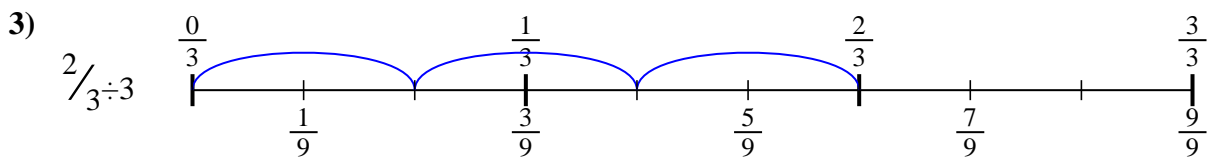
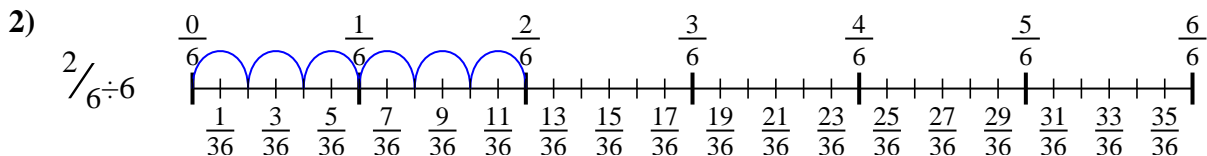
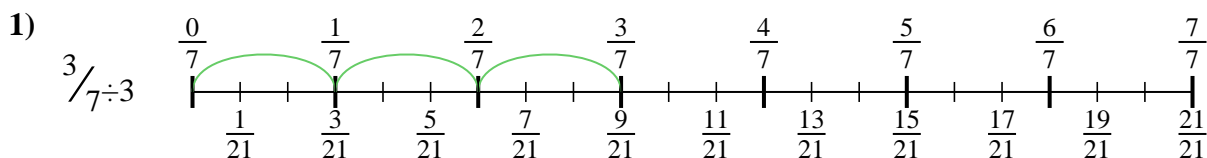


9. \_\_\_\_\_





Usa la recta numérica para resolver cada problema. El primero ya está marcado como ejemplo.

**Respuestas**

1.  $\frac{3}{21}$

2.  $\frac{2}{36}$

3.  $\frac{2}{9}$

4.  $\frac{2}{12}$

5.  $\frac{3}{24}$

6.  $\frac{4}{10}$

7.  $\frac{6}{42}$

8.  $\frac{3}{35}$

9.  $\frac{2}{10}$



Usa la recta numérica para resolver cada problema. El primero ya está marcado como ejemplo.

**Respuestas**

$\frac{3}{35}$

$\frac{2}{36}$

$\frac{2}{10}$

$\frac{2}{12}$

$\frac{3}{24}$

$\frac{6}{42}$

$\frac{3}{21}$

$\frac{4}{10}$

$\frac{2}{9}$

1. \_\_\_\_\_

2. \_\_\_\_\_

3. \_\_\_\_\_

4. \_\_\_\_\_

5. \_\_\_\_\_

6. \_\_\_\_\_

7. \_\_\_\_\_

8. \_\_\_\_\_

9. \_\_\_\_\_

