


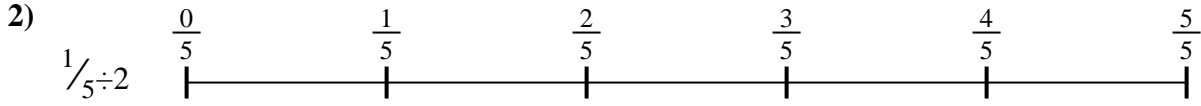


Usa la línea numérica para resolver cada problema. El primero ya está hecho como ejemplo

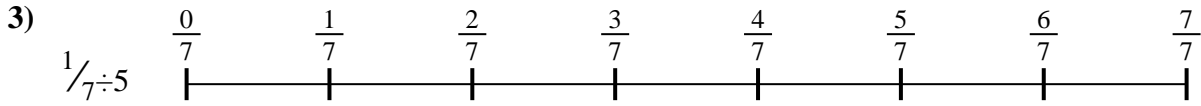
**Respuestas**




1. \_\_\_\_\_



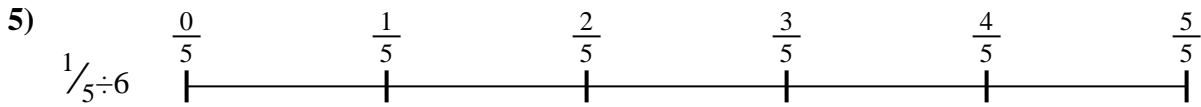
2. \_\_\_\_\_




3. \_\_\_\_\_



4. \_\_\_\_\_



5. \_\_\_\_\_



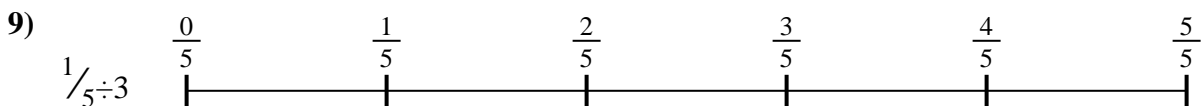
6. \_\_\_\_\_



7. \_\_\_\_\_



8. \_\_\_\_\_

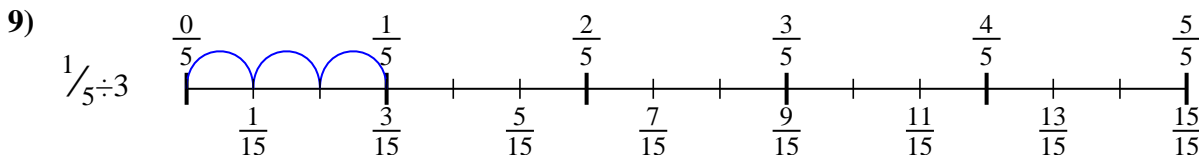
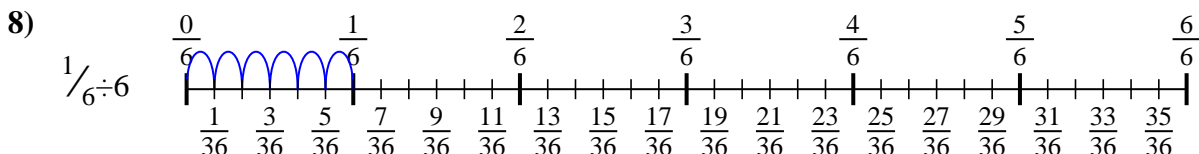
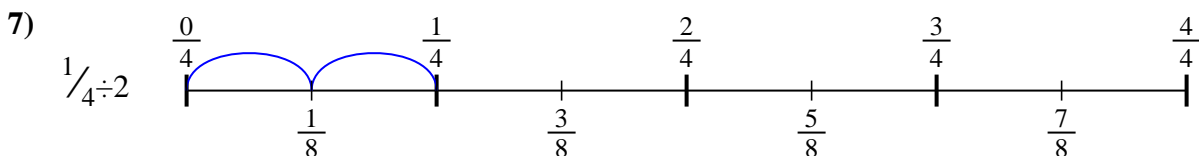
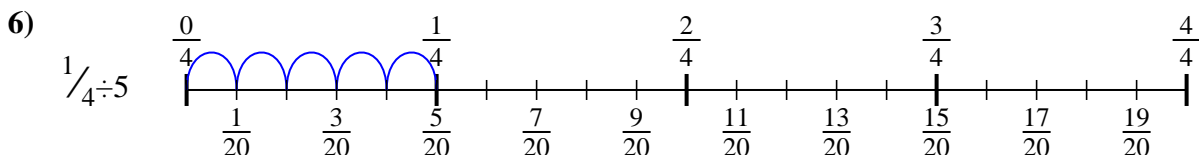
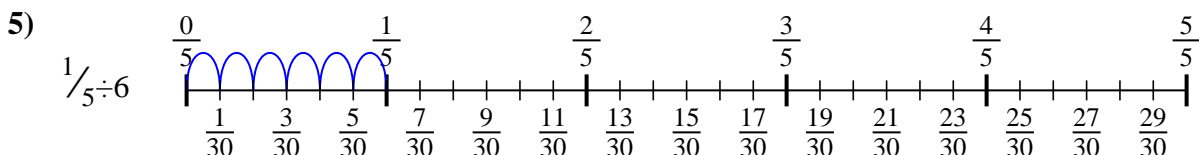
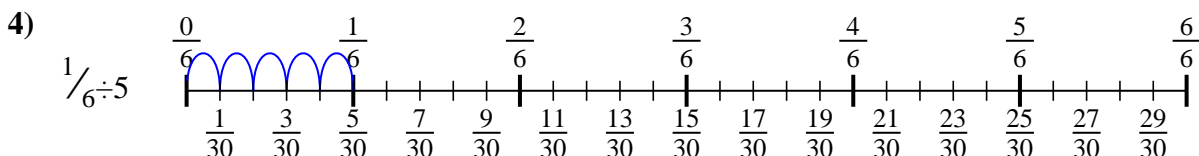
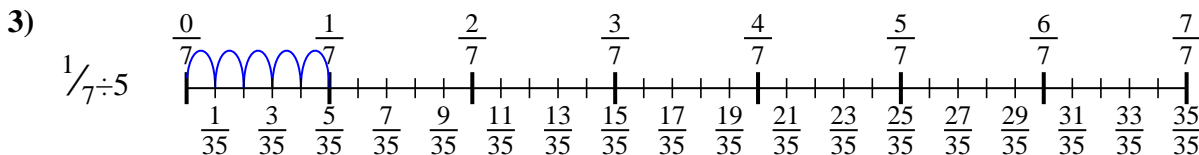
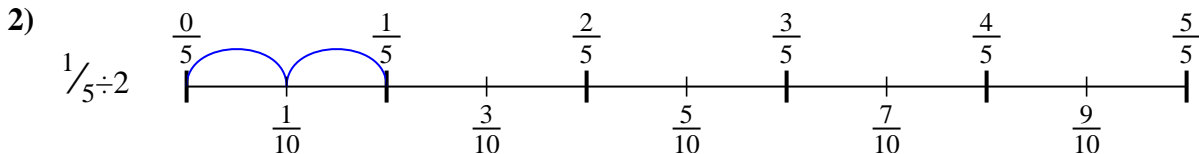
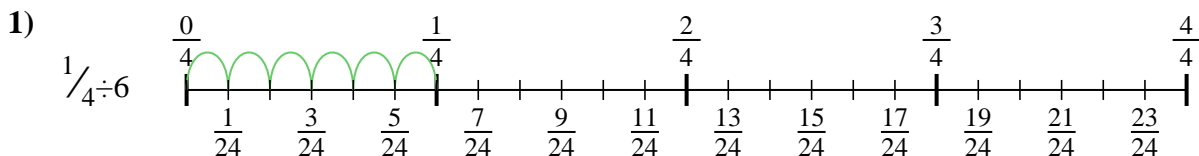


9. \_\_\_\_\_



Usa la línea numérica para resolver cada problema. El primero ya está hecho como ejemplo

**Respuestas**



1.  $\frac{1}{24}$

2.  $\frac{1}{10}$

3.  $\frac{1}{35}$

4.  $\frac{1}{30}$

5.  $\frac{1}{30}$

6.  $\frac{1}{20}$

7.  $\frac{1}{8}$

8.  $\frac{1}{36}$

9.  $\frac{1}{15}$



Usa la línea numérica para resolver cada problema. El primero ya está hecho como ejemplo

**Respuestas**

$\frac{1}{30}$

$\frac{1}{36}$

$\frac{1}{20}$

$\frac{1}{8}$

$\frac{1}{15}$

$\frac{1}{24}$

$\frac{1}{30}$

$\frac{1}{35}$

$\frac{1}{10}$

1. \_\_\_\_\_

2. \_\_\_\_\_

3. \_\_\_\_\_

4. \_\_\_\_\_

5. \_\_\_\_\_

6. \_\_\_\_\_

7. \_\_\_\_\_

8. \_\_\_\_\_

9. \_\_\_\_\_

