




Usa la línea numérica para resolver cada problema. El primero ya está hecho como ejemplo

**Respuestas**



1. \_\_\_\_\_

2. \_\_\_\_\_



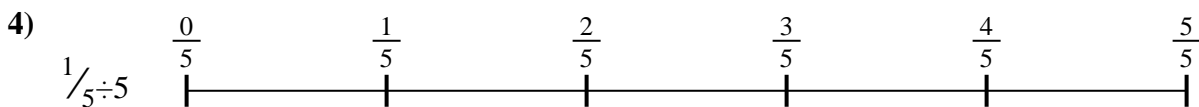
3. \_\_\_\_\_

4. \_\_\_\_\_



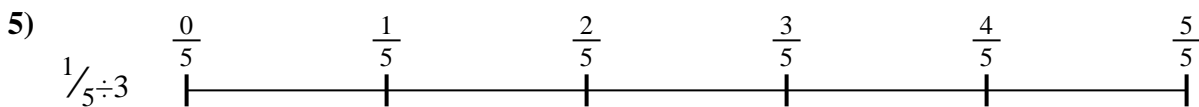
5. \_\_\_\_\_

6. \_\_\_\_\_

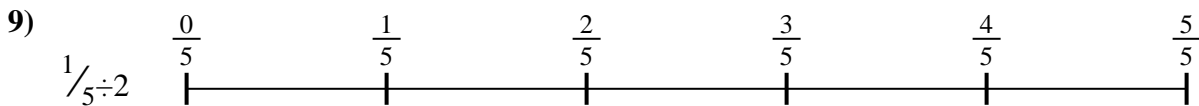
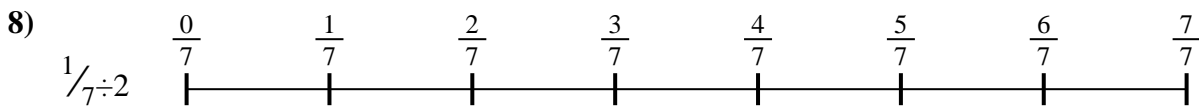


7. \_\_\_\_\_

8. \_\_\_\_\_



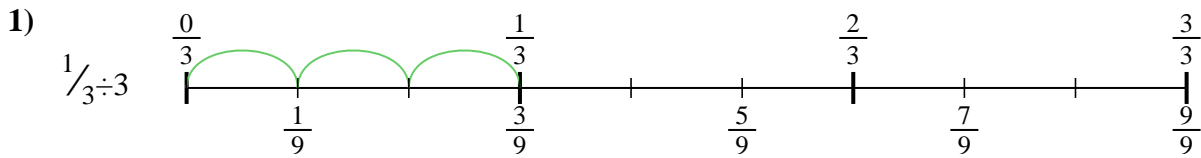
9. \_\_\_\_\_



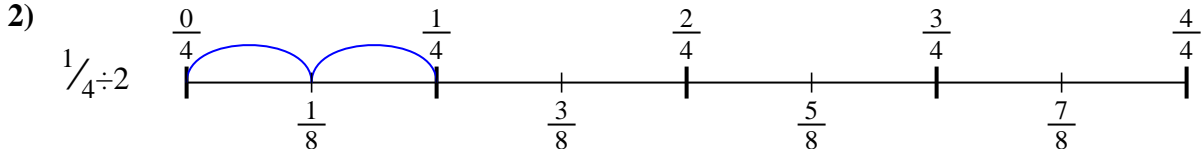


Usa la línea numérica para resolver cada problema. El primero ya está hecho como ejemplo

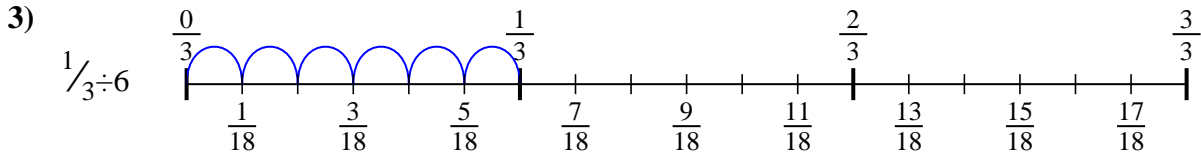
**Respuestas**



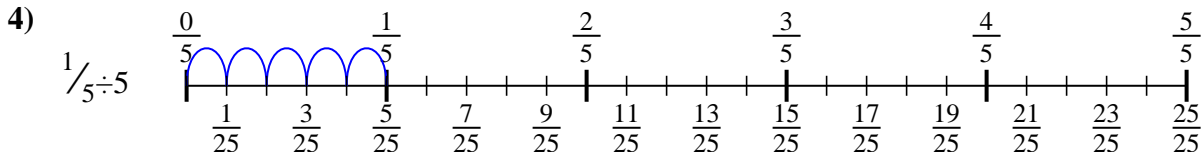
1.  $\frac{1}{9}$



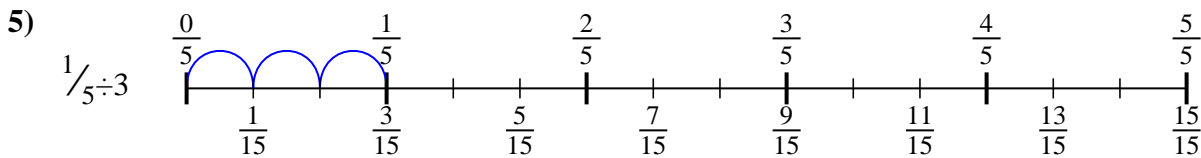
2.  $\frac{1}{8}$



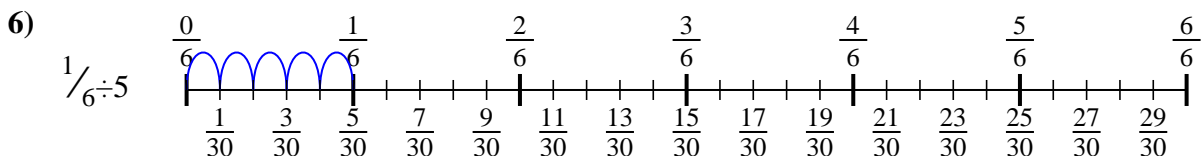
3.  $\frac{1}{18}$



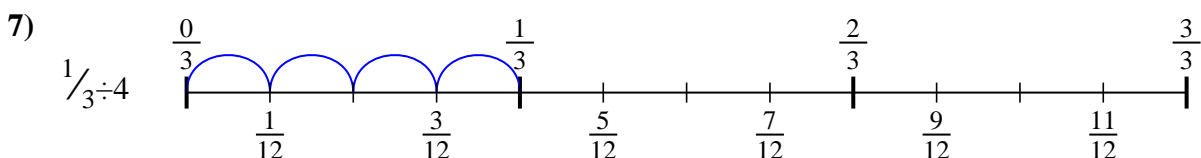
4.  $\frac{1}{25}$



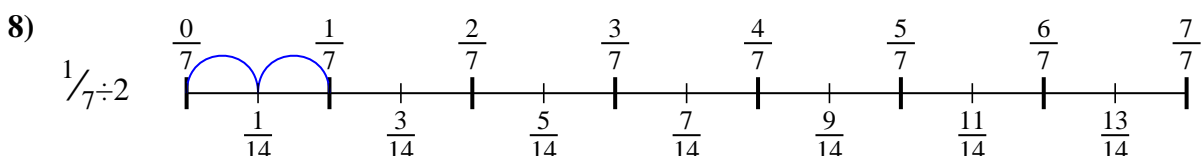
5.  $\frac{1}{15}$



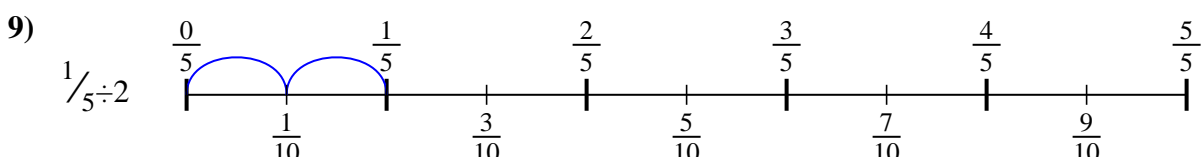
6.  $\frac{1}{30}$



7.  $\frac{1}{12}$



8.  $\frac{1}{14}$



9.  $\frac{1}{10}$



Usa la línea numérica para resolver cada problema. El primero ya está hecho como ejemplo

**Respuestas**

$\frac{1}{14}$

$\frac{1}{9}$

$\frac{1}{30}$

$\frac{1}{10}$

$\frac{1}{18}$

$\frac{1}{8}$

$\frac{1}{25}$

$\frac{1}{15}$

$\frac{1}{12}$

1. \_\_\_\_\_

2. \_\_\_\_\_

3. \_\_\_\_\_

4. \_\_\_\_\_

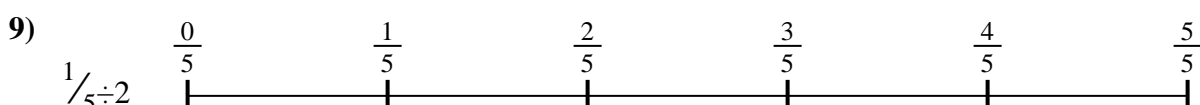
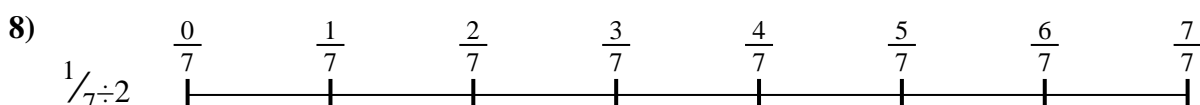

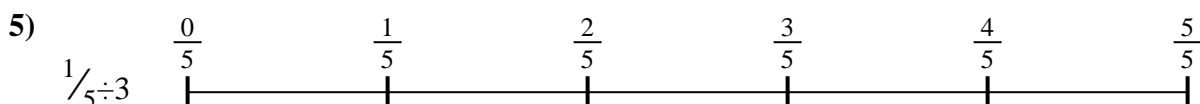
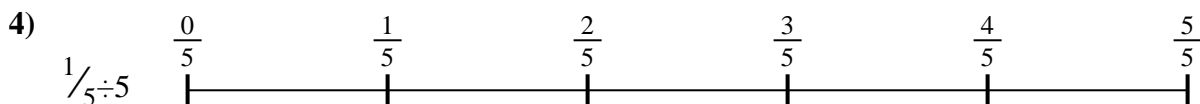

5. \_\_\_\_\_

6. \_\_\_\_\_

7. \_\_\_\_\_

8. \_\_\_\_\_

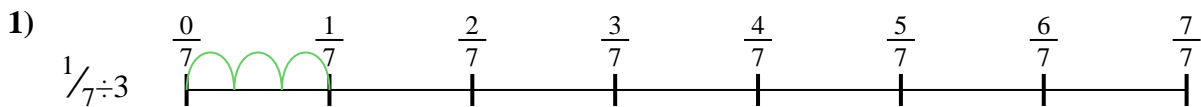
9. \_\_\_\_\_






Usa la línea numérica para resolver cada problema. El primero ya está hecho como ejemplo

**Respuestas**



1. \_\_\_\_\_

2. \_\_\_\_\_



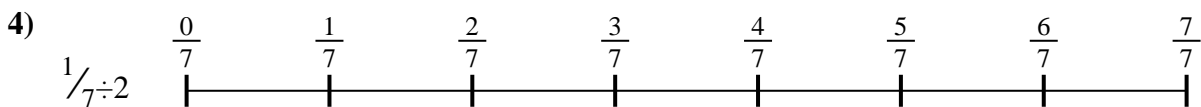
3. \_\_\_\_\_

4. \_\_\_\_\_



5. \_\_\_\_\_

6. \_\_\_\_\_





7. \_\_\_\_\_

8. \_\_\_\_\_



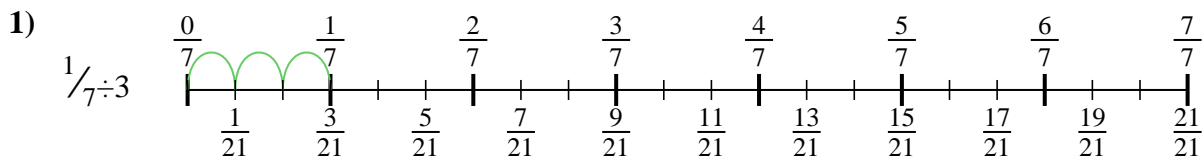
9. \_\_\_\_\_



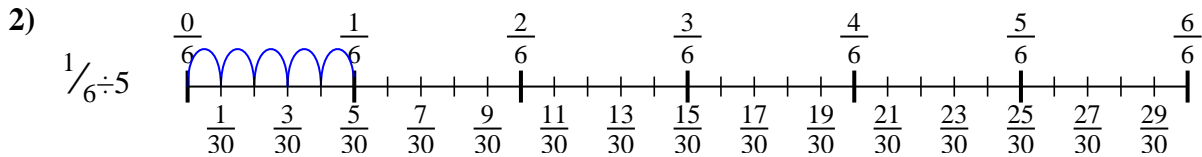


Usa la línea numérica para resolver cada problema. El primero ya está hecho como ejemplo

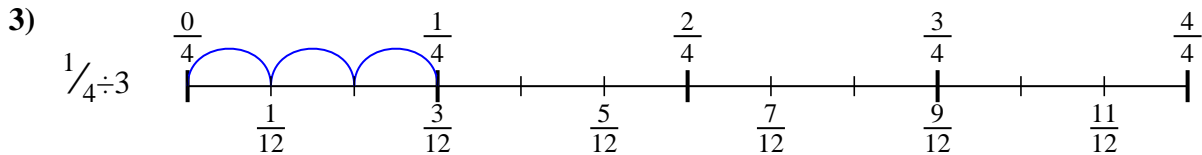
**Respuestas**



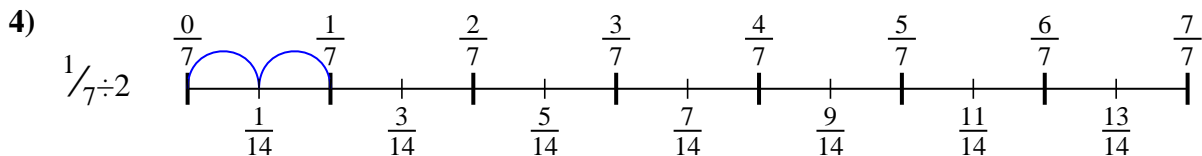
1.  $\frac{1}{21}$



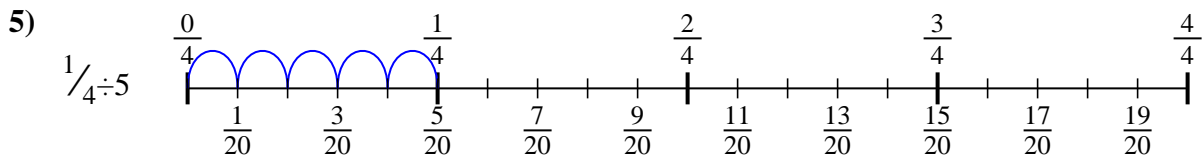
2.  $\frac{1}{30}$



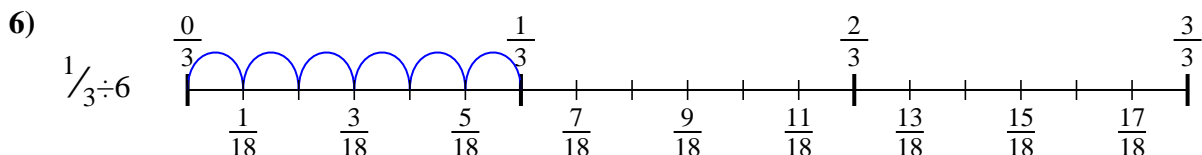
3.  $\frac{1}{12}$



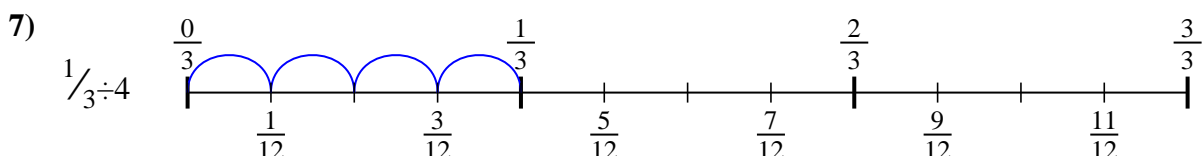
4.  $\frac{1}{14}$



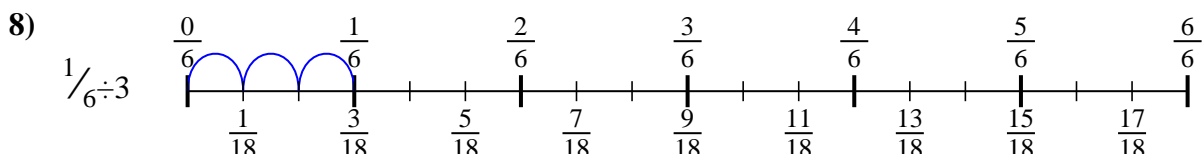
5.  $\frac{1}{20}$



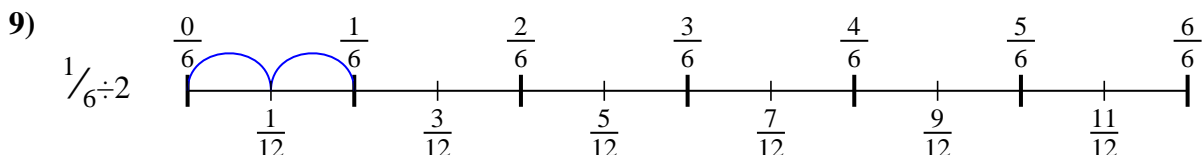
6.  $\frac{1}{18}$



7.  $\frac{1}{12}$



8.  $\frac{1}{18}$




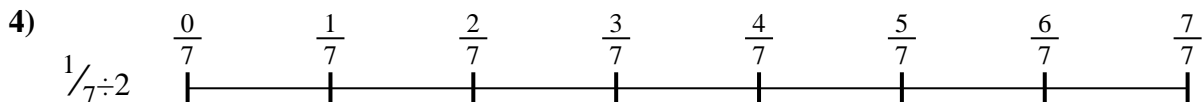

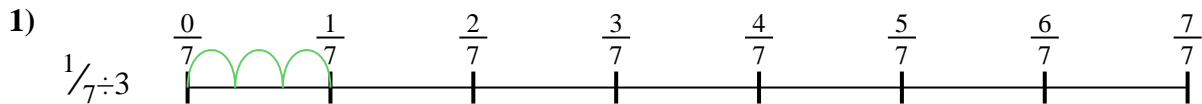
9.  $\frac{1}{12}$



Usa la línea numérica para resolver cada problema. El primero ya está hecho como ejemplo

**Respuestas**

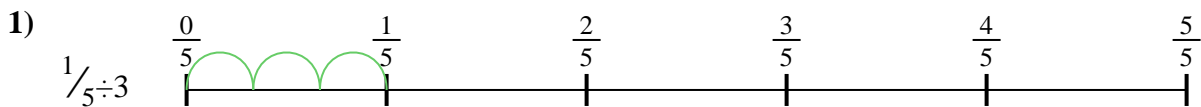
$\frac{1}{30}$	$\frac{1}{12}$	$\frac{1}{12}$	$\frac{1}{20}$
$\frac{1}{21}$	$\frac{1}{18}$	$\frac{1}{18}$	$\frac{1}{12}$
$\frac{1}{14}$			



1. \_\_\_\_\_
2. \_\_\_\_\_
3. \_\_\_\_\_
4. \_\_\_\_\_
5. \_\_\_\_\_
6. \_\_\_\_\_
7. \_\_\_\_\_
8. \_\_\_\_\_
9. \_\_\_\_\_

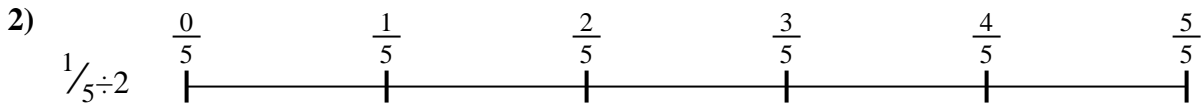


Usa la línea numérica para resolver cada problema. El primero ya está hecho como ejemplo

**Respuestas**

1. \_\_\_\_\_

2. \_\_\_\_\_



3. \_\_\_\_\_

4. \_\_\_\_\_



5. \_\_\_\_\_

6. \_\_\_\_\_



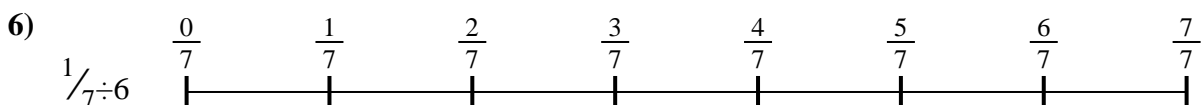


7. \_\_\_\_\_

8. \_\_\_\_\_



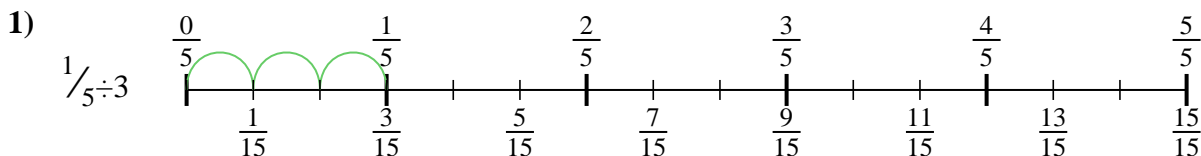
9. \_\_\_\_\_



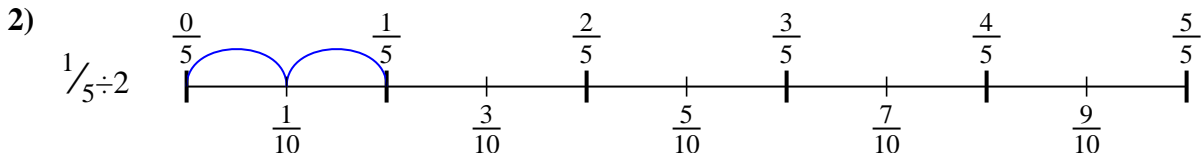


Usa la línea numérica para resolver cada problema. El primero ya está hecho como ejemplo

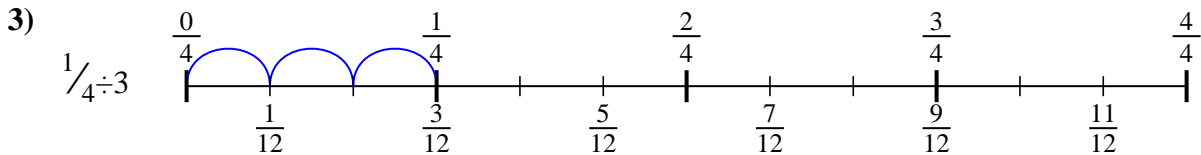
**Respuestas**



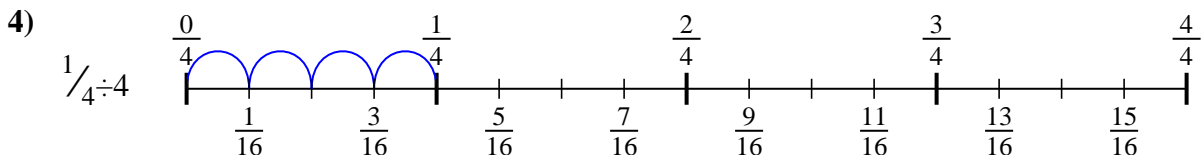
1.  $\frac{1}{15}$



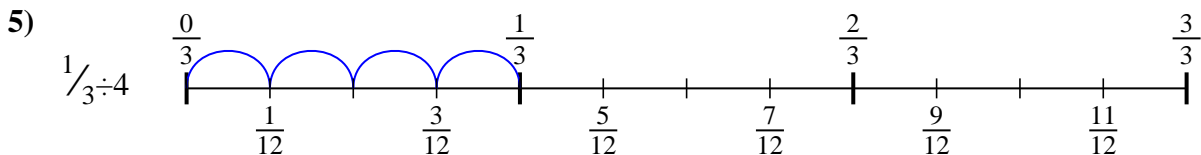
2.  $\frac{1}{10}$



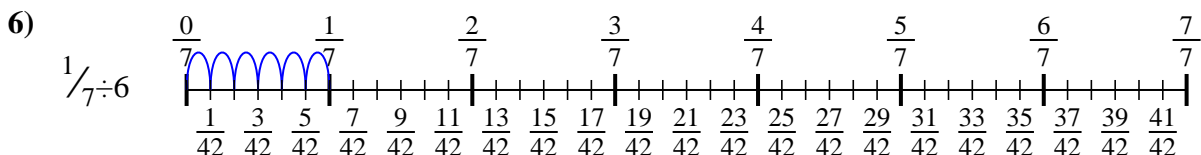
3.  $\frac{1}{12}$



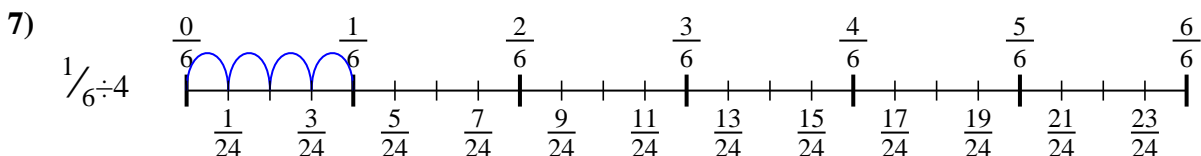
4.  $\frac{1}{16}$



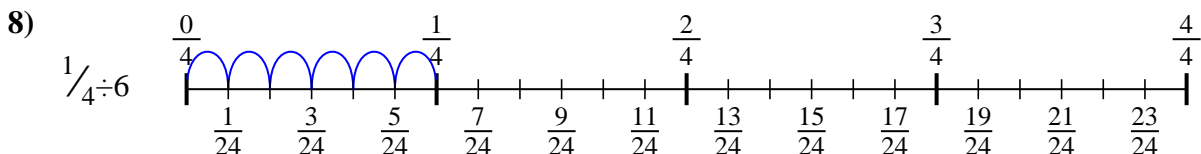
5.  $\frac{1}{12}$



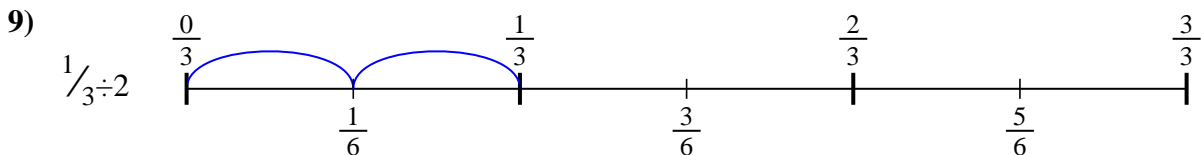
6.  $\frac{1}{42}$



7.  $\frac{1}{24}$



8.  $\frac{1}{24}$



9.  $\frac{1}{6}$





Usa la línea numérica para resolver cada problema. El primero ya está hecho como ejemplo

**Respuestas**

$\frac{1}{16}$

$\frac{1}{15}$

$\frac{1}{12}$

$\frac{1}{42}$

$\frac{1}{12}$

$\frac{1}{10}$

$\frac{1}{24}$

$\frac{1}{6}$

$\frac{1}{24}$

1. \_\_\_\_\_

2. \_\_\_\_\_

3. \_\_\_\_\_

4. \_\_\_\_\_

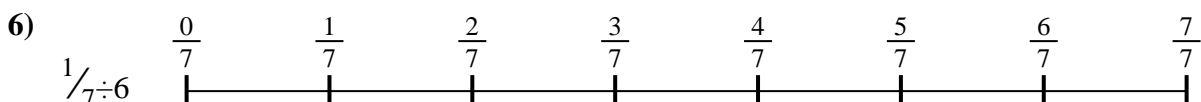


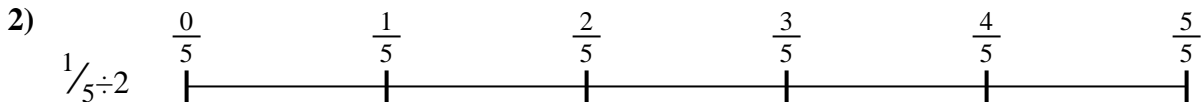
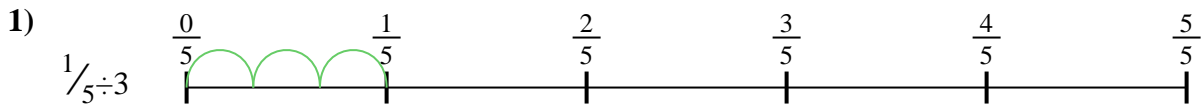
5. \_\_\_\_\_

6. \_\_\_\_\_

7. \_\_\_\_\_

8. \_\_\_\_\_


9. \_\_\_\_\_





Usa la línea numérica para resolver cada problema. El primero ya está hecho como ejemplo

**Respuestas**



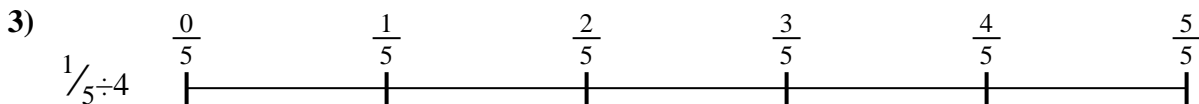
1. \_\_\_\_\_

2. \_\_\_\_\_



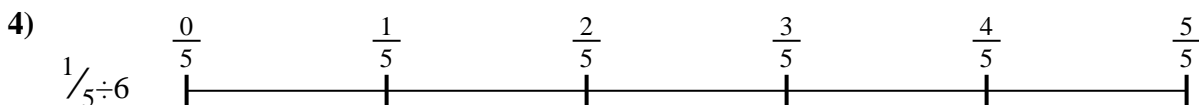
3. \_\_\_\_\_

4. \_\_\_\_\_



5. \_\_\_\_\_

6. \_\_\_\_\_



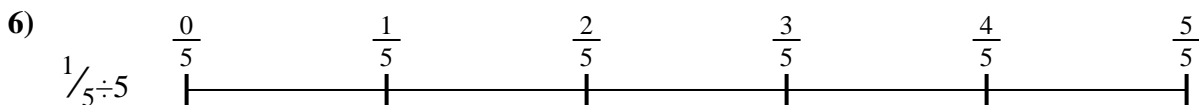


7. \_\_\_\_\_

8. \_\_\_\_\_



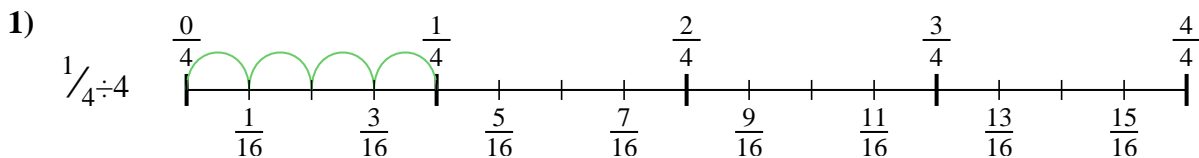
9. \_\_\_\_\_



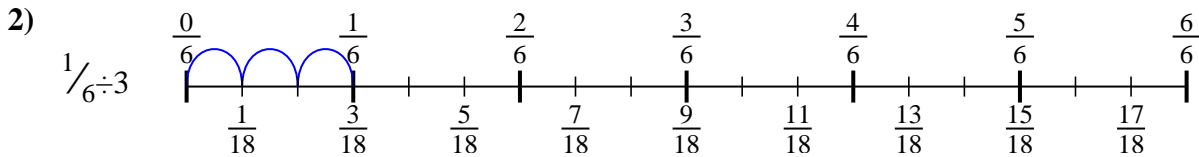


Usa la línea numérica para resolver cada problema. El primero ya está hecho como ejemplo

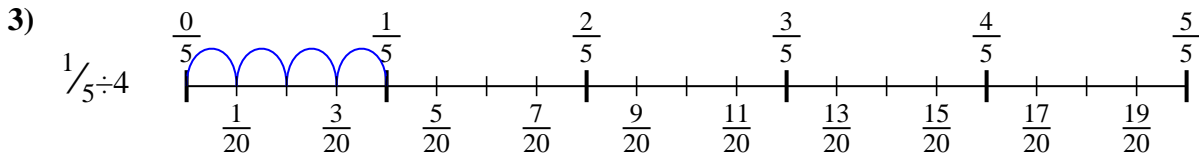
**Respuestas**



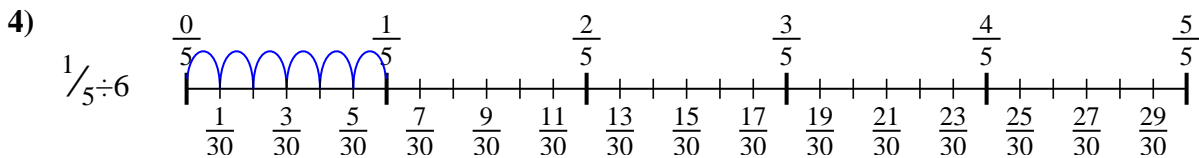
1.  $\frac{1}{16}$



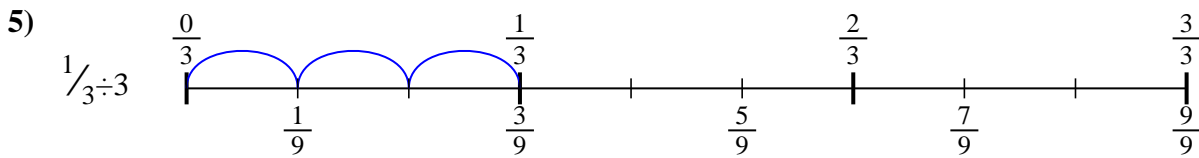
2.  $\frac{1}{18}$



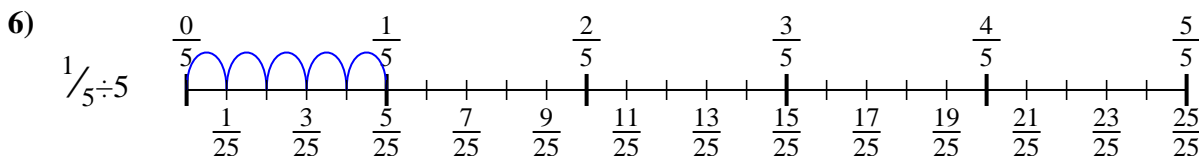
3.  $\frac{1}{20}$



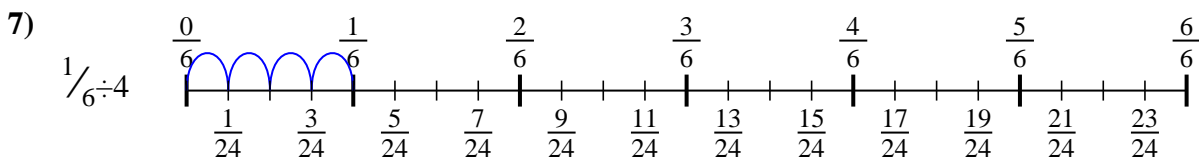
4.  $\frac{1}{30}$



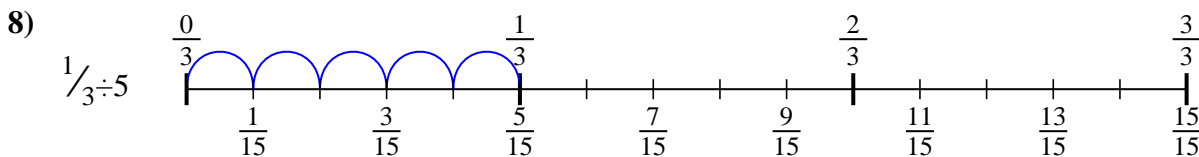
5.  $\frac{1}{9}$



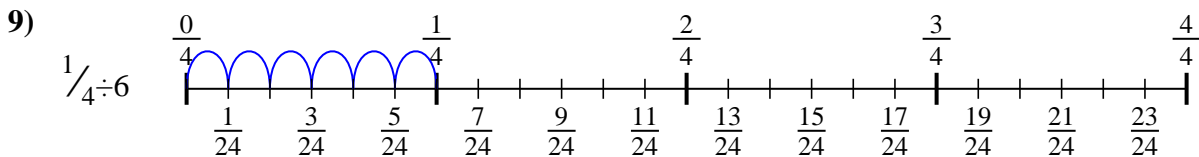
6.  $\frac{1}{25}$



7.  $\frac{1}{24}$



8.  $\frac{1}{15}$




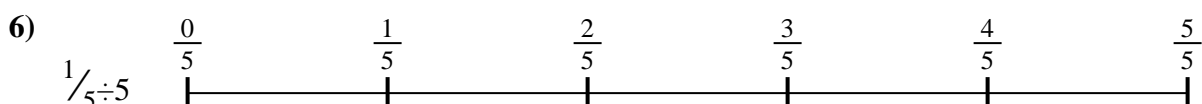

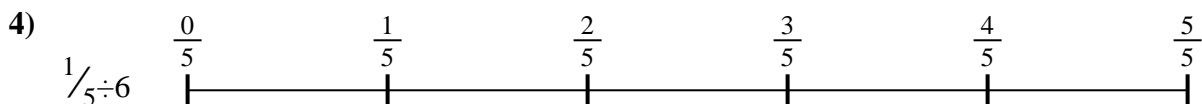
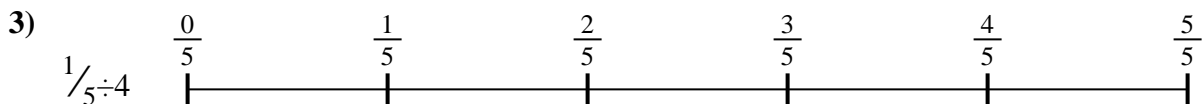
9.  $\frac{1}{24}$



Usa la línea numérica para resolver cada problema. El primero ya está hecho como ejemplo

**Respuestas**

$\frac{1}{30}$	$\frac{1}{9}$	$\frac{1}{20}$	$\frac{1}{24}$
$\frac{1}{25}$	$\frac{1}{24}$	$\frac{1}{18}$	$\frac{1}{16}$
$\frac{1}{15}$			

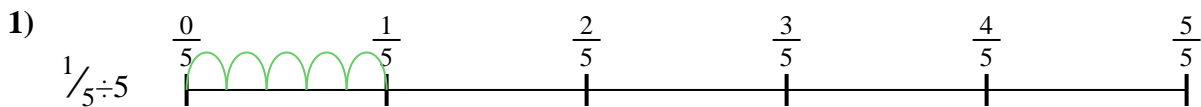


1. \_\_\_\_\_
2. \_\_\_\_\_
3. \_\_\_\_\_
4. \_\_\_\_\_
5. \_\_\_\_\_
6. \_\_\_\_\_
7. \_\_\_\_\_
8. \_\_\_\_\_
9. \_\_\_\_\_



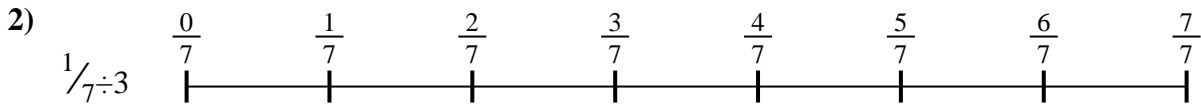
Usa la línea numérica para resolver cada problema. El primero ya está hecho como ejemplo

**Respuestas**



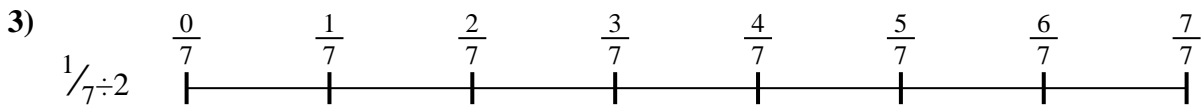
1. \_\_\_\_\_

2. \_\_\_\_\_



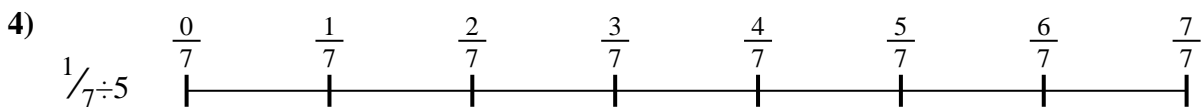
3. \_\_\_\_\_

4. \_\_\_\_\_



5. \_\_\_\_\_

6. \_\_\_\_\_

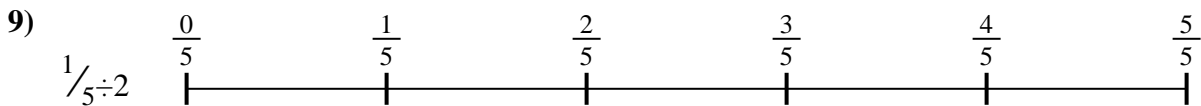


7. \_\_\_\_\_

8. \_\_\_\_\_



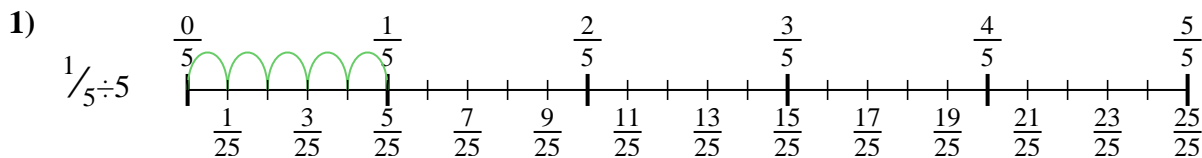
9. \_\_\_\_\_



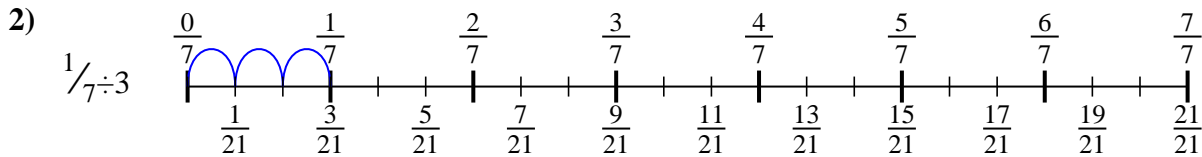


Usa la línea numérica para resolver cada problema. El primero ya está hecho como ejemplo

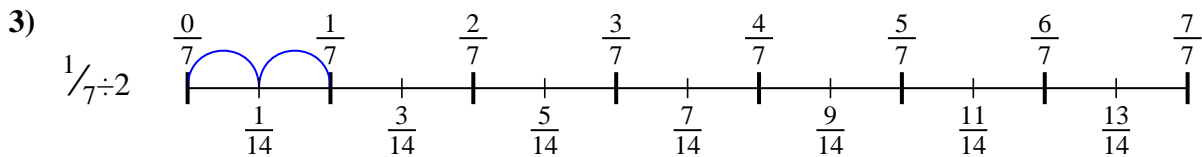
**Respuestas**



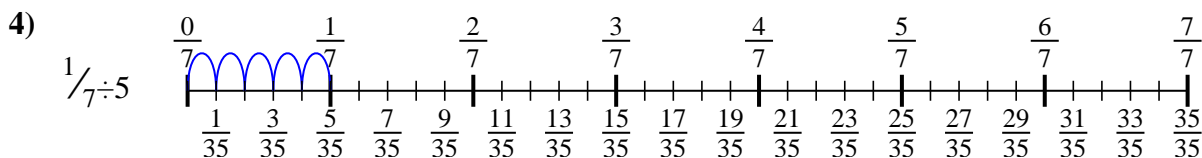
1.  $\frac{1}{25}$



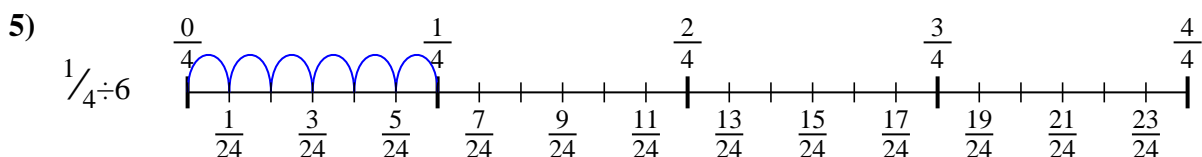
2.  $\frac{1}{21}$



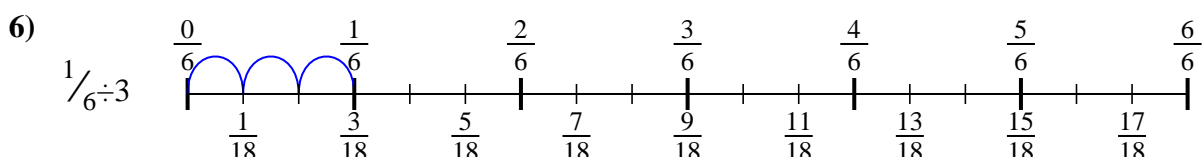
3.  $\frac{1}{14}$



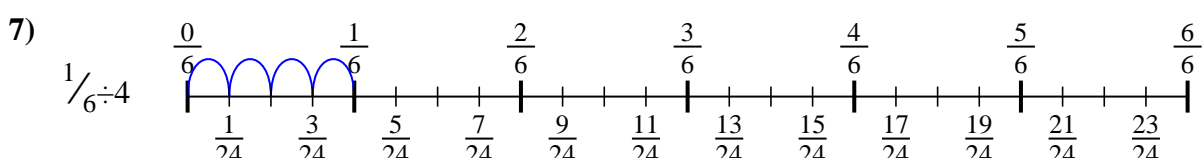
4.  $\frac{1}{35}$



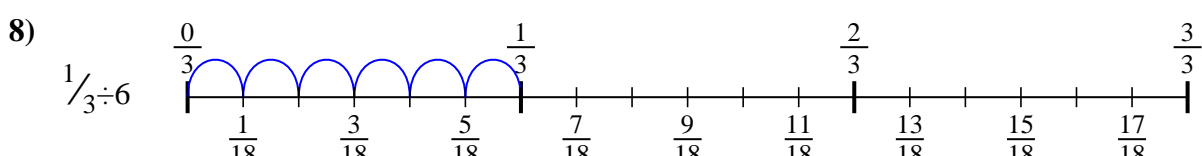
5.  $\frac{1}{24}$



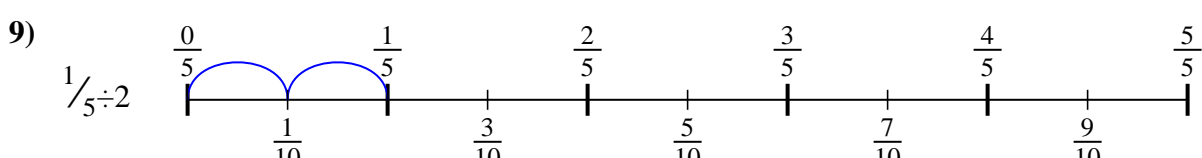
6.  $\frac{1}{18}$



7.  $\frac{1}{24}$



8.  $\frac{1}{18}$



9.  $\frac{1}{10}$



Usa la línea numérica para resolver cada problema. El primero ya está hecho como ejemplo

**Respuestas**

$\frac{1}{18}$

$\frac{1}{35}$

$\frac{1}{18}$

$\frac{1}{21}$

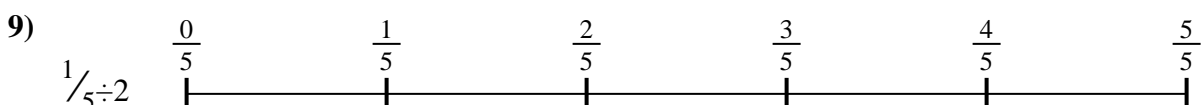



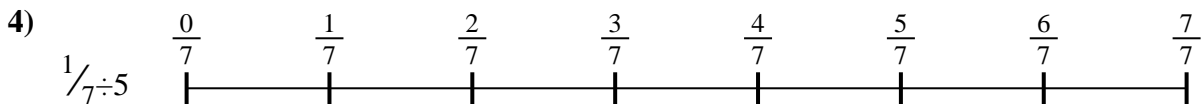
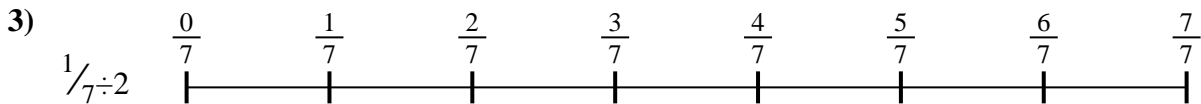
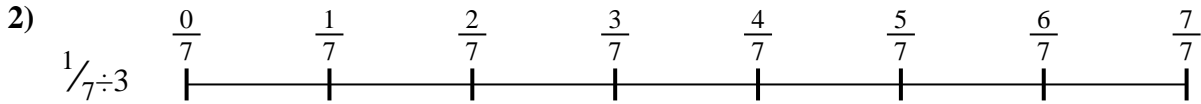
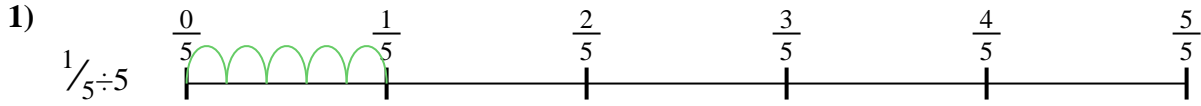
$\frac{1}{24}$

$\frac{1}{14}$

$\frac{1}{10}$

$\frac{1}{25}$

$\frac{1}{24}$



1. \_\_\_\_\_
2. \_\_\_\_\_
3. \_\_\_\_\_
4. \_\_\_\_\_
5. \_\_\_\_\_
6. \_\_\_\_\_
7. \_\_\_\_\_
8. \_\_\_\_\_
9. \_\_\_\_\_



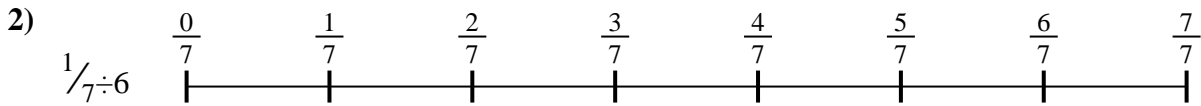
Usa la línea numérica para resolver cada problema. El primero ya está hecho como ejemplo

**Respuestas**



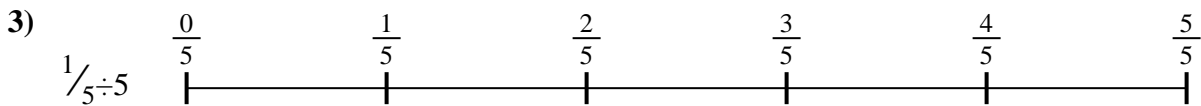
1. \_\_\_\_\_

2. \_\_\_\_\_




3. \_\_\_\_\_

4. \_\_\_\_\_



5. \_\_\_\_\_

6. \_\_\_\_\_

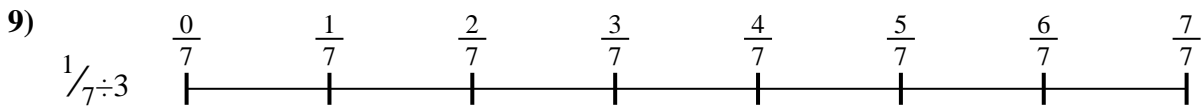
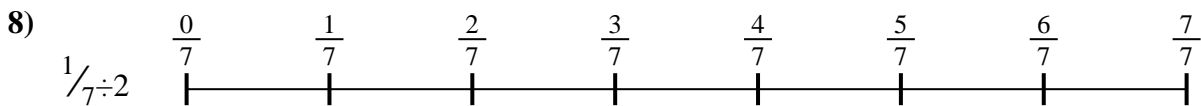


7. \_\_\_\_\_

8. \_\_\_\_\_



9. \_\_\_\_\_

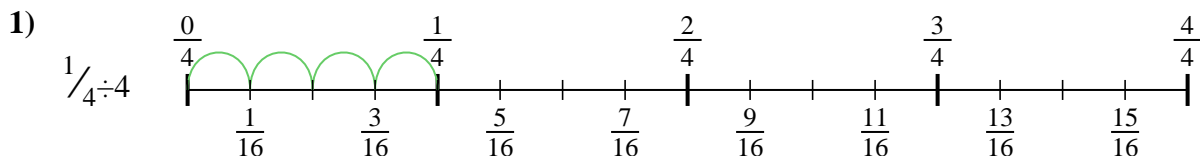




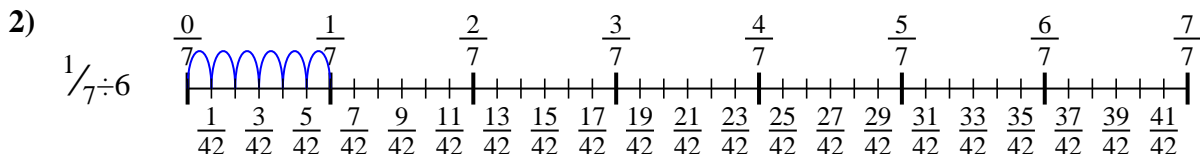


Usa la línea numérica para resolver cada problema. El primero ya está hecho como ejemplo

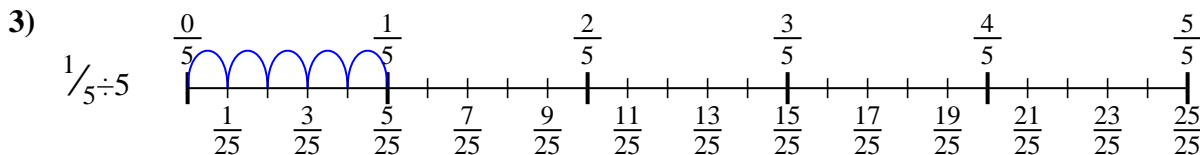
**Respuestas**



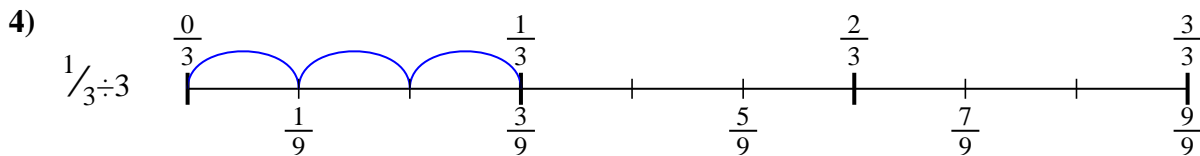
1.  $\frac{1}{16}$



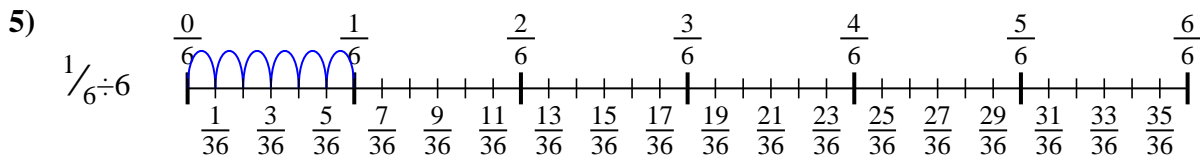
2.  $\frac{1}{42}$



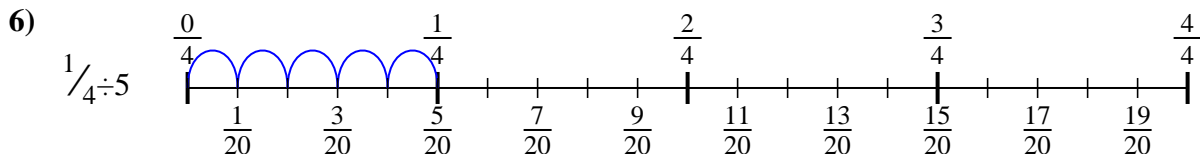
3.  $\frac{1}{25}$



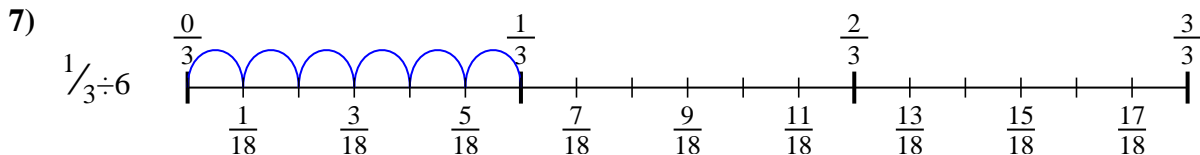
4.  $\frac{1}{9}$



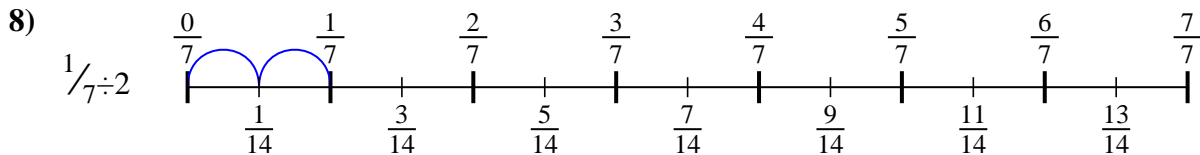
5.  $\frac{1}{36}$



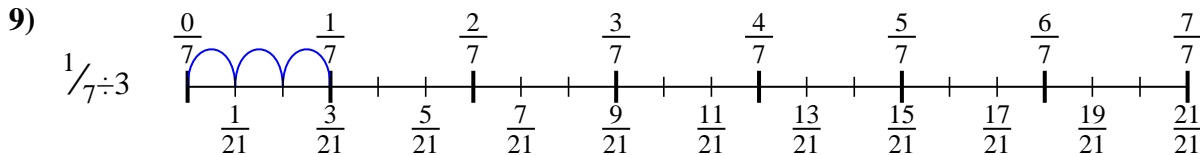
6.  $\frac{1}{20}$



7.  $\frac{1}{18}$



8.  $\frac{1}{14}$



9.  $\frac{1}{21}$



Usa la línea numérica para resolver cada problema. El primero ya está hecho como ejemplo

**Respuestas**

$\frac{1}{42}$

$\frac{1}{20}$

$\frac{1}{14}$

$\frac{1}{21}$

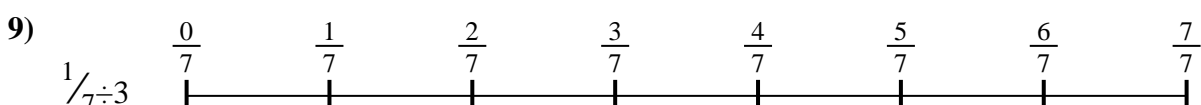
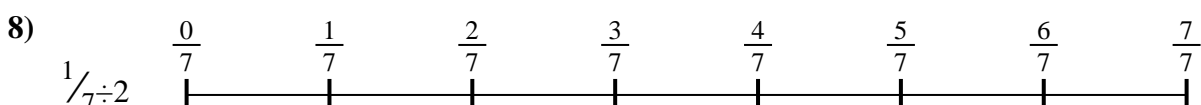



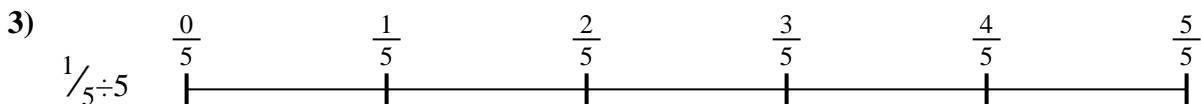
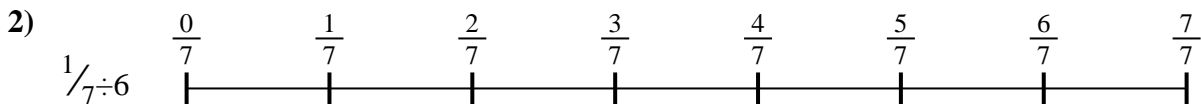
$\frac{1}{36}$

$\frac{1}{25}$

$\frac{1}{16}$

$\frac{1}{9}$

$\frac{1}{18}$



1. \_\_\_\_\_

2. \_\_\_\_\_

3. \_\_\_\_\_

4. \_\_\_\_\_

5. \_\_\_\_\_

6. \_\_\_\_\_

7. \_\_\_\_\_

8. \_\_\_\_\_

9. \_\_\_\_\_



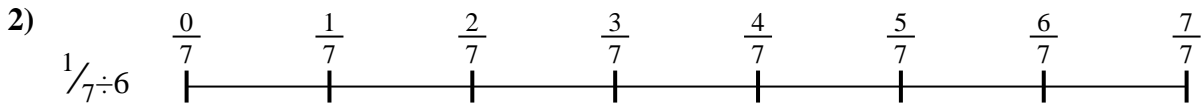
Usa la línea numérica para resolver cada problema. El primero ya está hecho como ejemplo

**Respuestas**



1. \_\_\_\_\_

2. \_\_\_\_\_



3. \_\_\_\_\_

4. \_\_\_\_\_



5. \_\_\_\_\_

6. \_\_\_\_\_


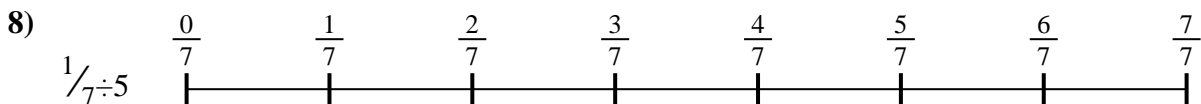
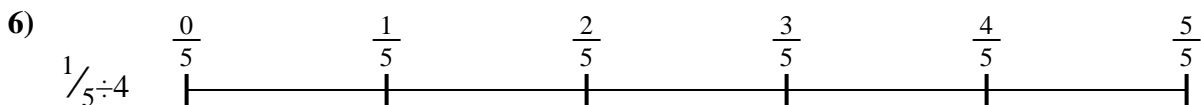


7. \_\_\_\_\_

8. \_\_\_\_\_



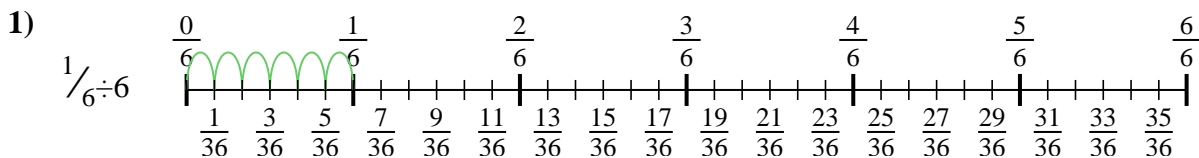
9. \_\_\_\_\_



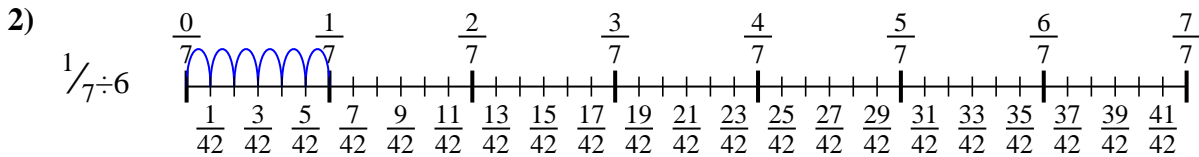


Usa la línea numérica para resolver cada problema. El primero ya está hecho como ejemplo

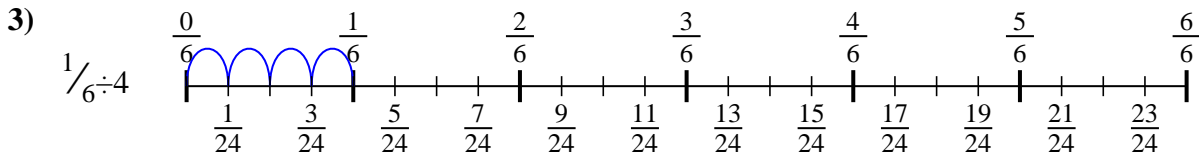
**Respuestas**



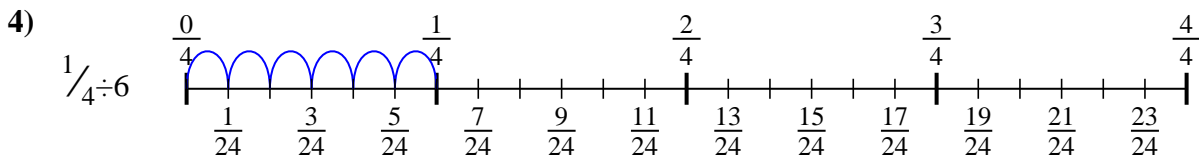
1.  $\frac{1}{36}$



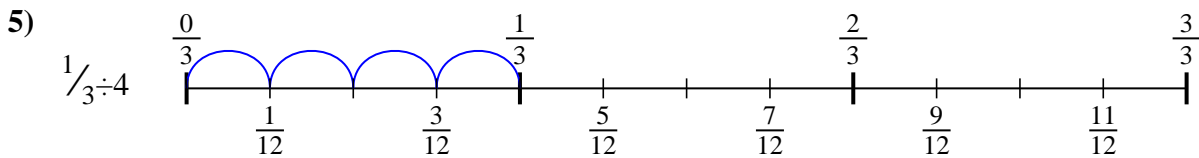
2.  $\frac{1}{42}$



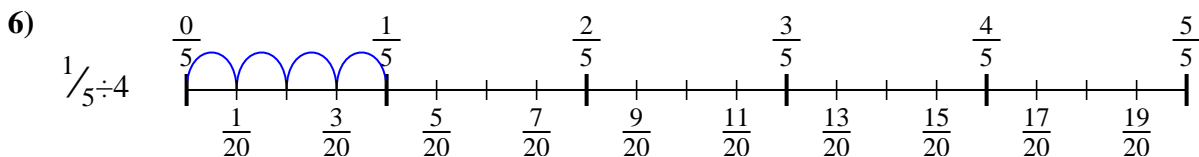
3.  $\frac{1}{24}$



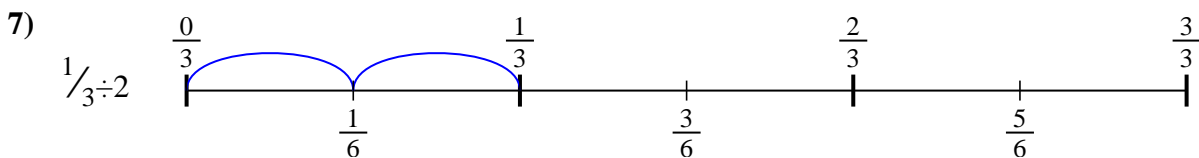
4.  $\frac{1}{24}$



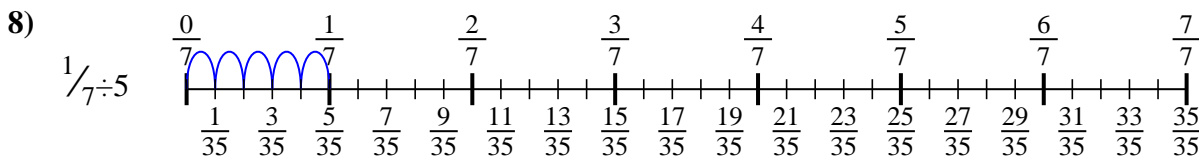
5.  $\frac{1}{12}$



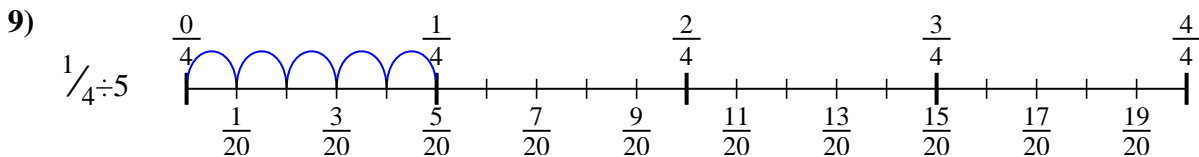
6.  $\frac{1}{20}$



7.  $\frac{1}{6}$



8.  $\frac{1}{35}$



9.  $\frac{1}{20}$



Usa la línea numérica para resolver cada problema. El primero ya está hecho como ejemplo

**Respuestas**

$\frac{1}{35}$

$\frac{1}{6}$

$\frac{1}{24}$

$\frac{1}{42}$

$\frac{1}{24}$

$\frac{1}{36}$

$\frac{1}{20}$

$\frac{1}{20}$

$\frac{1}{12}$

1. \_\_\_\_\_

2. \_\_\_\_\_

3. \_\_\_\_\_

4. \_\_\_\_\_

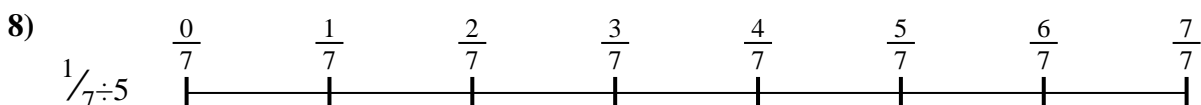

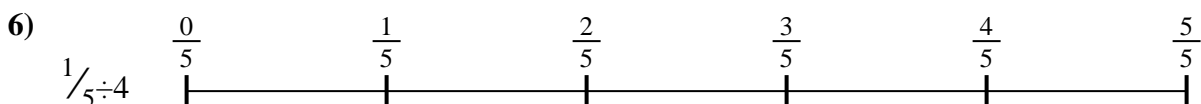
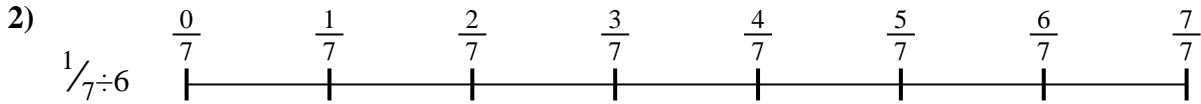

5. \_\_\_\_\_

6. \_\_\_\_\_

7. \_\_\_\_\_

8. \_\_\_\_\_


9. \_\_\_\_\_





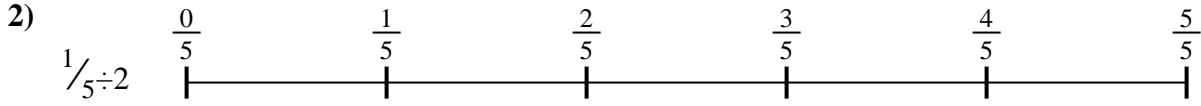
Usa la línea numérica para resolver cada problema. El primero ya está hecho como ejemplo

**Respuestas**



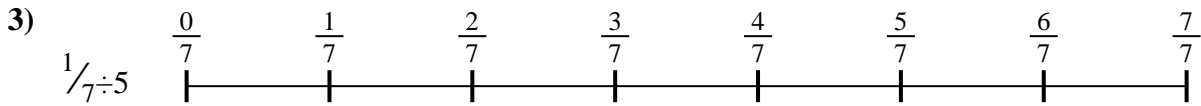
1. \_\_\_\_\_

2. \_\_\_\_\_




3. \_\_\_\_\_

4. \_\_\_\_\_



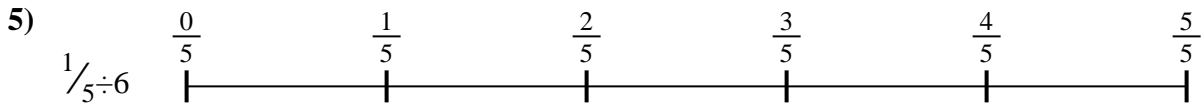
5. \_\_\_\_\_

6. \_\_\_\_\_

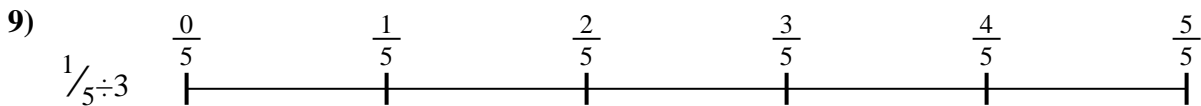



7. \_\_\_\_\_

8. \_\_\_\_\_



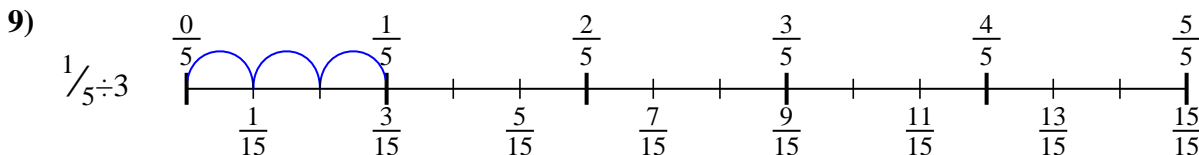
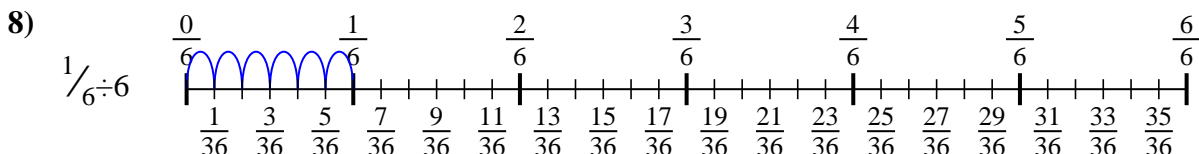
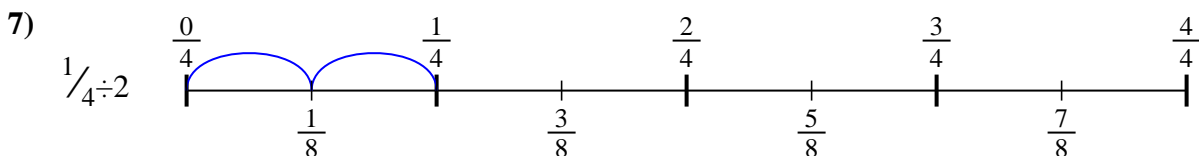
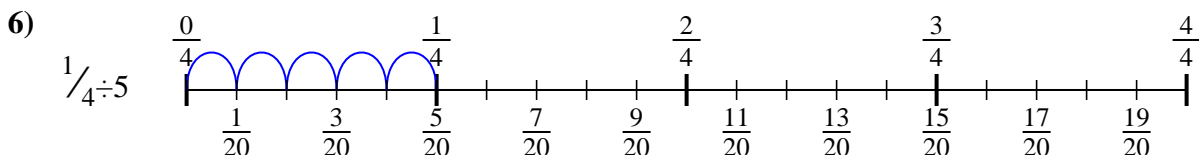
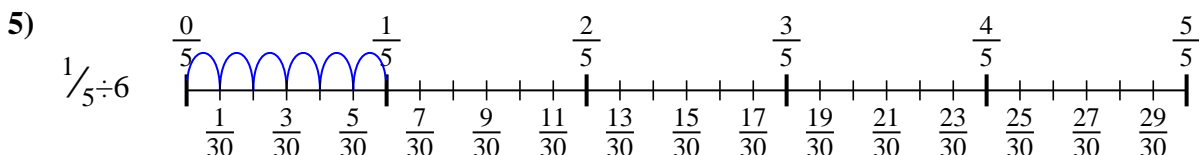
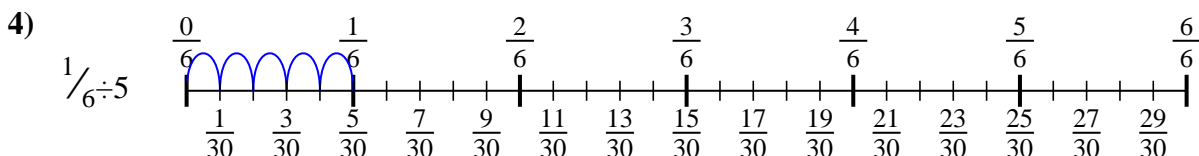
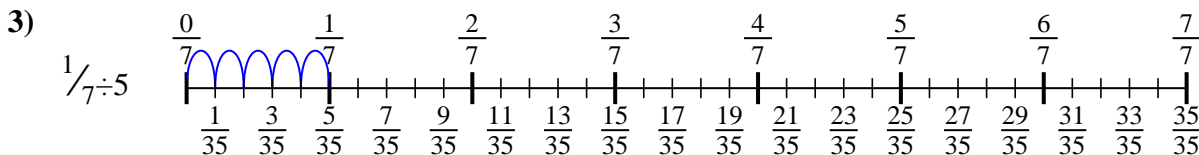
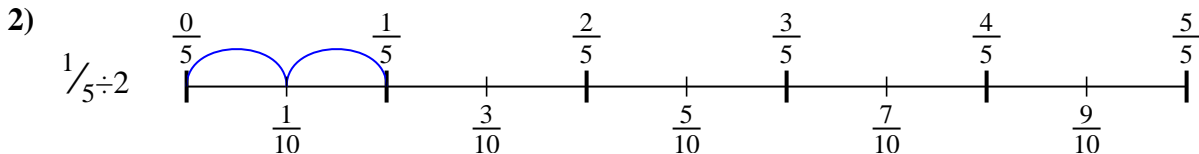
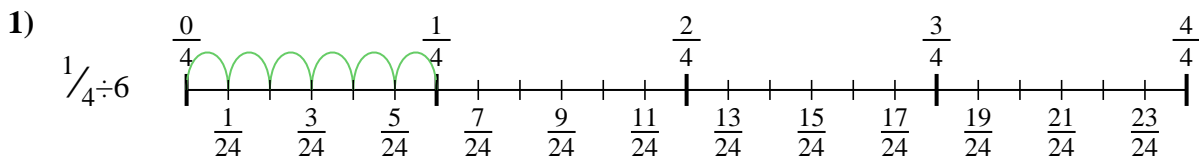
9. \_\_\_\_\_





Usa la línea numérica para resolver cada problema. El primero ya está hecho como ejemplo

**Respuestas**



1.  $\frac{1}{24}$

2.  $\frac{1}{10}$

3.  $\frac{1}{35}$

4.  $\frac{1}{30}$

5.  $\frac{1}{30}$

6.  $\frac{1}{20}$

7.  $\frac{1}{8}$

8.  $\frac{1}{36}$

9.  $\frac{1}{15}$



Usa la línea numérica para resolver cada problema. El primero ya está hecho como ejemplo

**Respuestas**

$\frac{1}{30}$

$\frac{1}{36}$

$\frac{1}{20}$

$\frac{1}{8}$

$\frac{1}{15}$

$\frac{1}{24}$

$\frac{1}{30}$

$\frac{1}{35}$

$\frac{1}{10}$

1. \_\_\_\_\_

2. \_\_\_\_\_

3. \_\_\_\_\_

4. \_\_\_\_\_

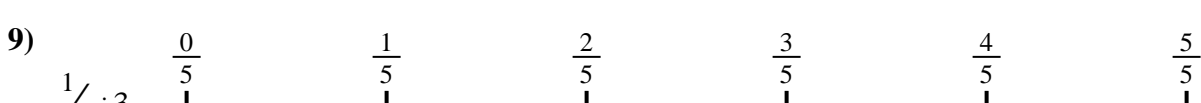
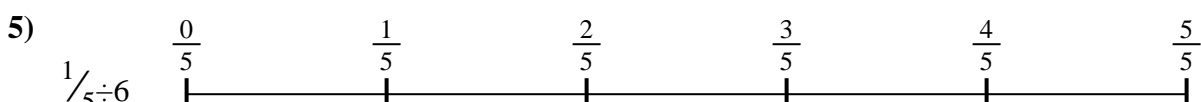

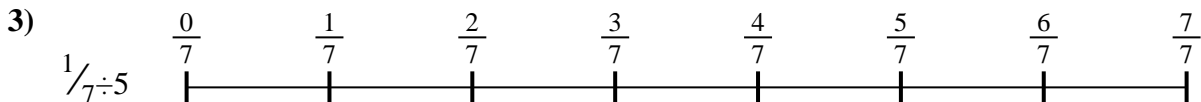
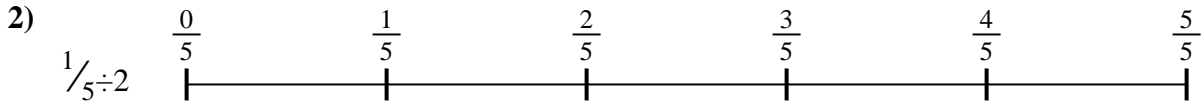

5. \_\_\_\_\_

6. \_\_\_\_\_

7. \_\_\_\_\_

8. \_\_\_\_\_

9. \_\_\_\_\_








Usa la línea numérica para resolver cada problema. El primero ya está hecho como ejemplo

**Respuestas**



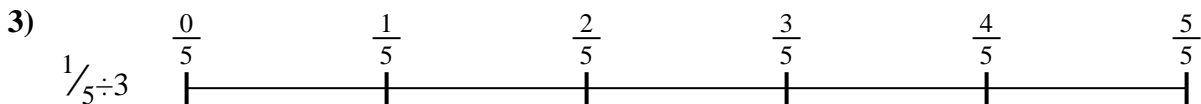
1. \_\_\_\_\_

2. \_\_\_\_\_



3. \_\_\_\_\_

4. \_\_\_\_\_



5. \_\_\_\_\_

6. \_\_\_\_\_


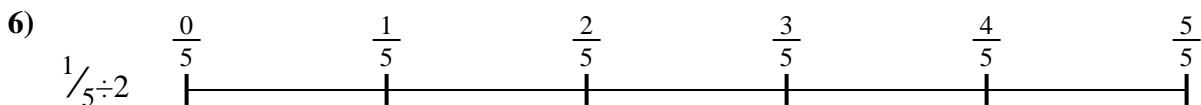


7. \_\_\_\_\_

8. \_\_\_\_\_



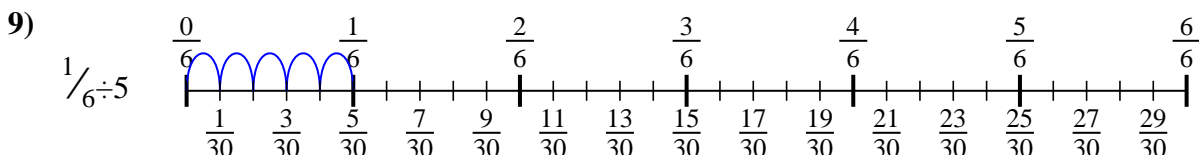
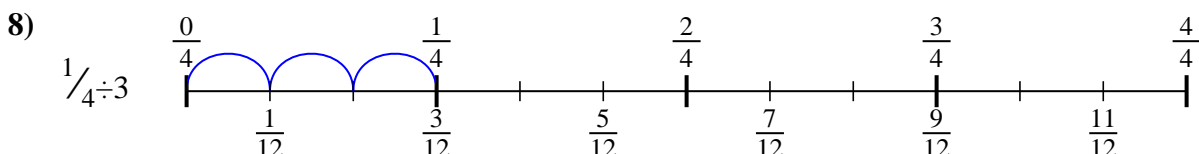
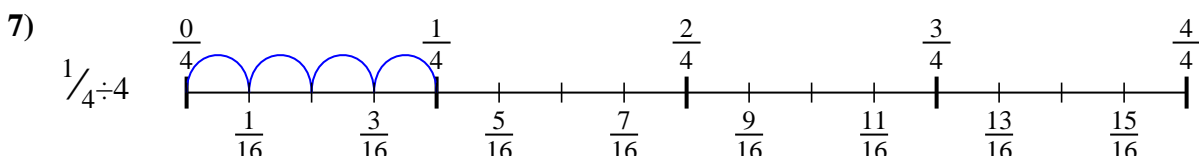
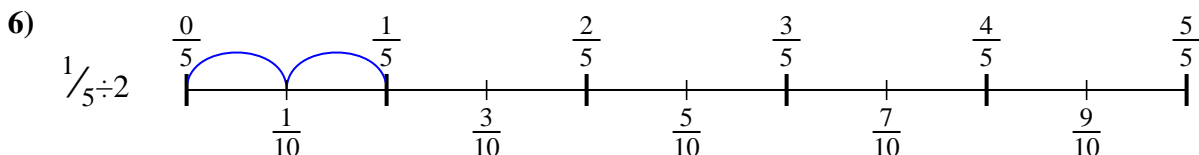
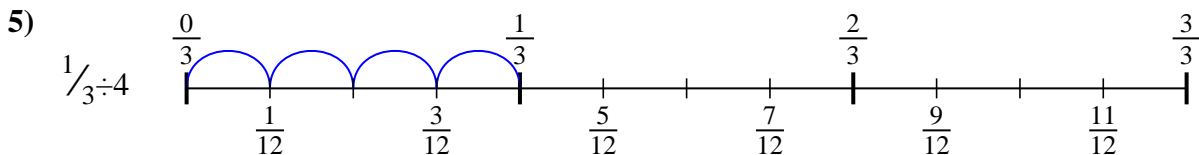
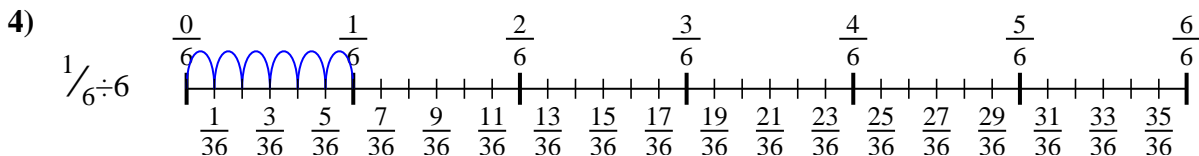
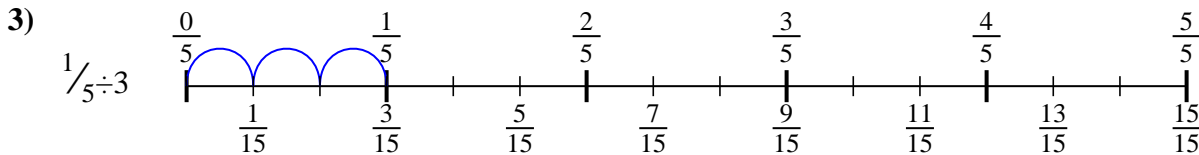
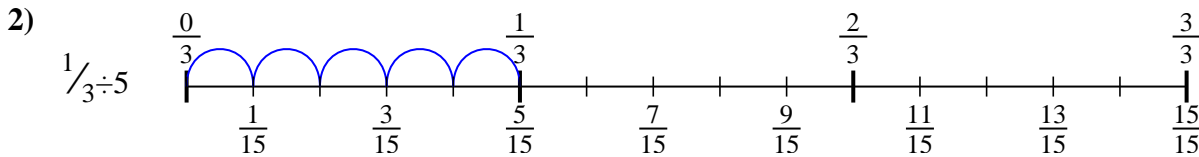
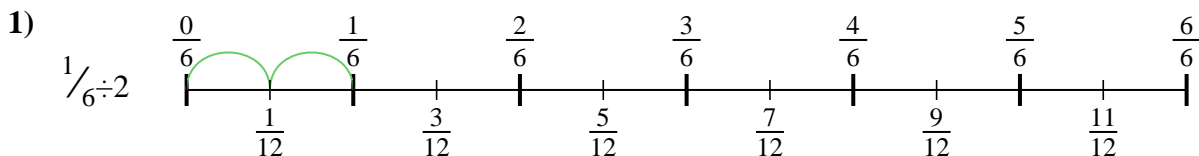
9. \_\_\_\_\_





Usa la línea numérica para resolver cada problema. El primero ya está hecho como ejemplo

**Respuestas**



1.  $\frac{1}{12}$

2.  $\frac{1}{15}$

3.  $\frac{1}{15}$

4.  $\frac{1}{36}$

5.  $\frac{1}{12}$

6.  $\frac{1}{10}$

7.  $\frac{1}{16}$

8.  $\frac{1}{12}$

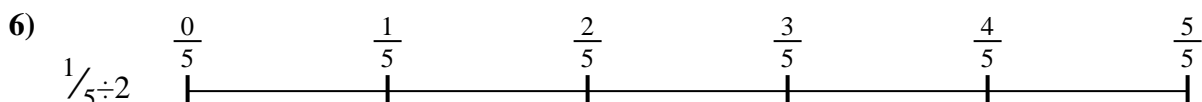

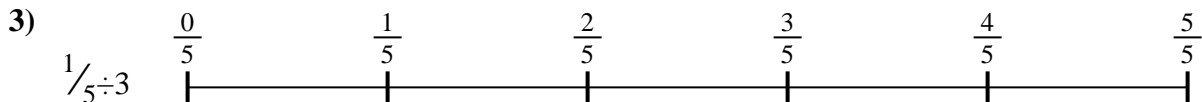
9.  $\frac{1}{30}$



Usa la línea numérica para resolver cada problema. El primero ya está hecho como ejemplo

**Respuestas**

$\frac{1}{36}$	$\frac{1}{12}$	$\frac{1}{30}$	$\frac{1}{12}$
$\frac{1}{15}$	$\frac{1}{10}$	$\frac{1}{12}$	$\frac{1}{16}$
$\frac{1}{15}$			




1. \_\_\_\_\_
2. \_\_\_\_\_
3. \_\_\_\_\_
4. \_\_\_\_\_
5. \_\_\_\_\_
6. \_\_\_\_\_
7. \_\_\_\_\_
8. \_\_\_\_\_
9. \_\_\_\_\_



Usa la línea numérica para resolver cada problema. El primero ya está hecho como ejemplo

**Respuestas**



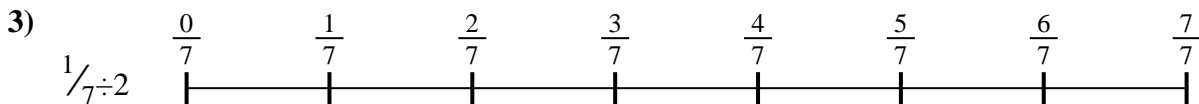
1. \_\_\_\_\_

2. \_\_\_\_\_



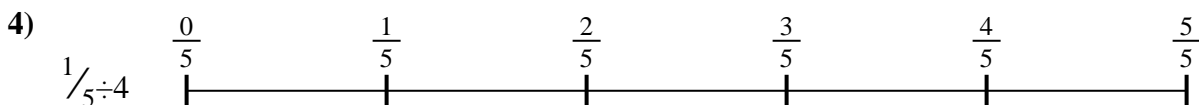
3. \_\_\_\_\_

4. \_\_\_\_\_



5. \_\_\_\_\_

6. \_\_\_\_\_

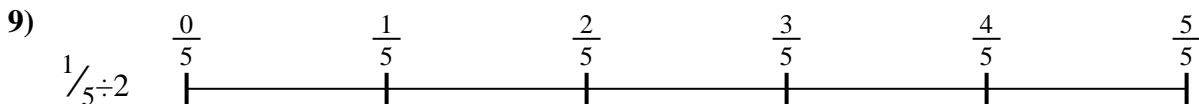
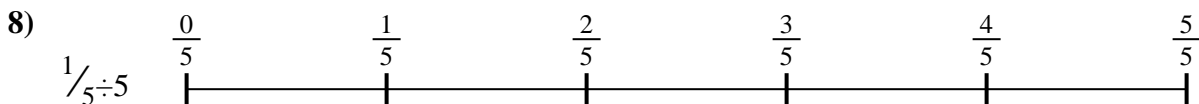



7. \_\_\_\_\_

8. \_\_\_\_\_



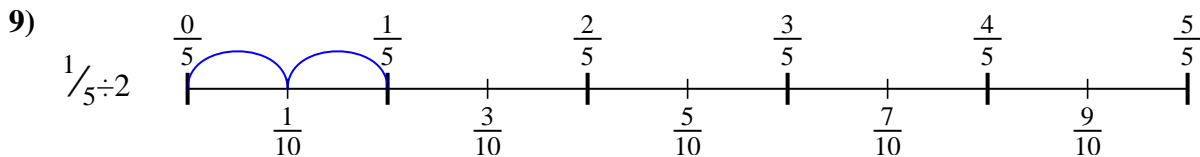
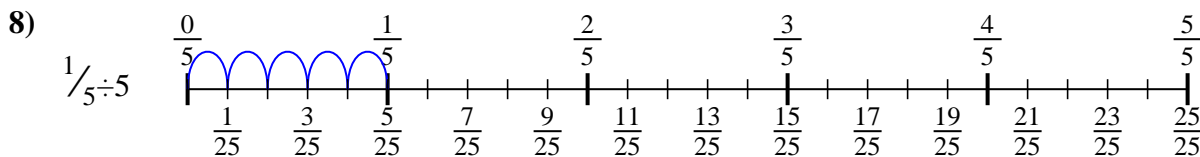
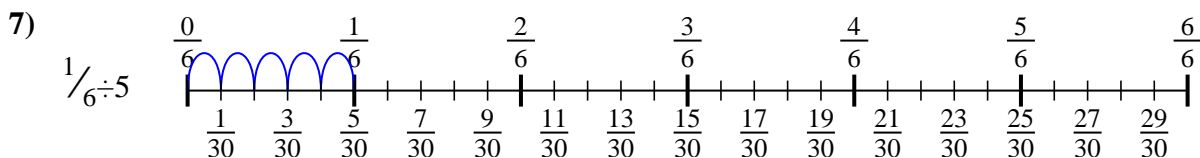
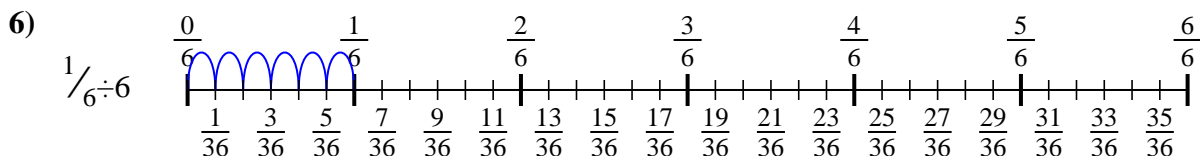
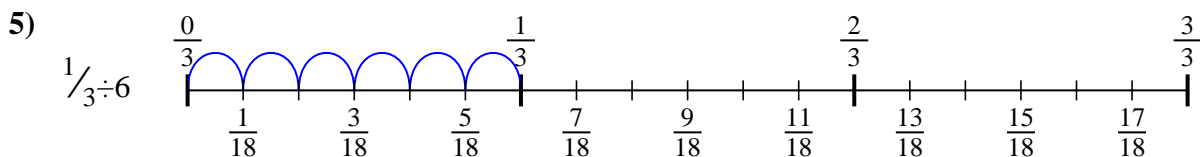
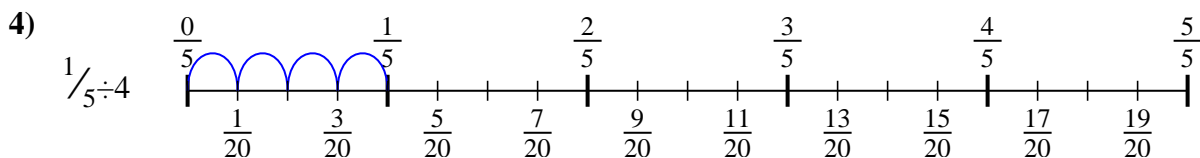
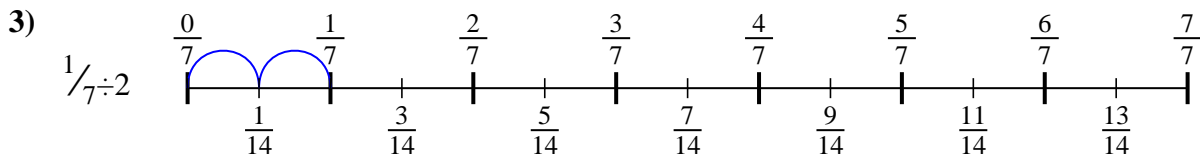
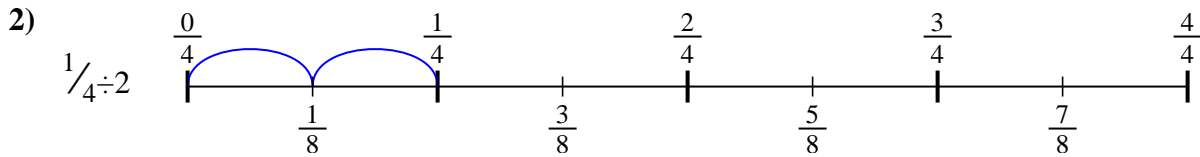
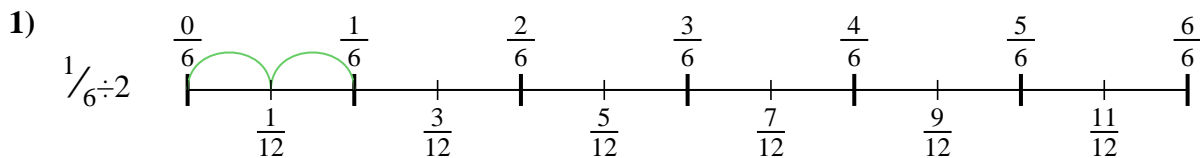
9. \_\_\_\_\_





Usa la línea numérica para resolver cada problema. El primero ya está hecho como ejemplo

**Respuestas**



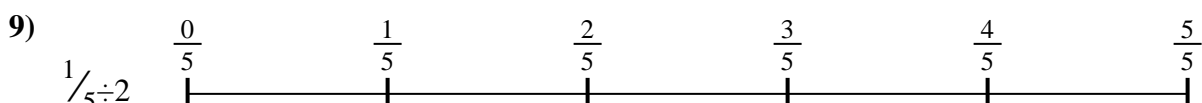
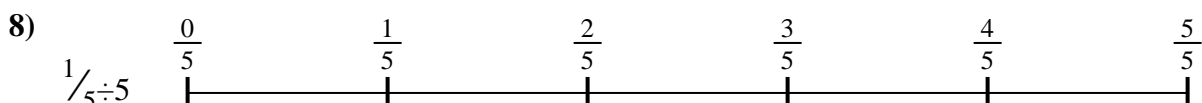

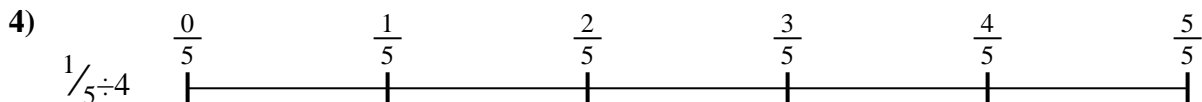
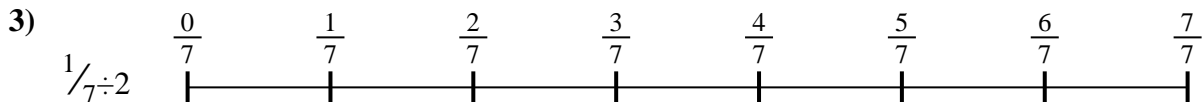
1.  $\frac{1}{12}$
2.  $\frac{1}{8}$
3.  $\frac{1}{14}$
4.  $\frac{1}{20}$
5.  $\frac{1}{18}$
6.  $\frac{1}{36}$
7.  $\frac{1}{30}$
8.  $\frac{1}{25}$
9.  $\frac{1}{10}$



Usa la línea numérica para resolver cada problema. El primero ya está hecho como ejemplo

**Respuestas**

$\frac{1}{30}$	$\frac{1}{12}$	$\frac{1}{36}$	$\frac{1}{8}$
$\frac{1}{18}$	$\frac{1}{25}$	$\frac{1}{14}$	$\frac{1}{20}$
$\frac{1}{10}$			



1. \_\_\_\_\_
2. \_\_\_\_\_
3. \_\_\_\_\_
4. \_\_\_\_\_
5. \_\_\_\_\_
6. \_\_\_\_\_
7. \_\_\_\_\_
8. \_\_\_\_\_
9. \_\_\_\_\_