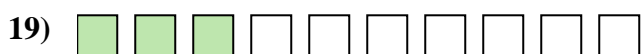

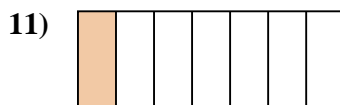
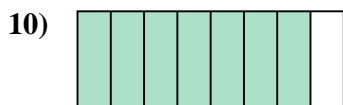

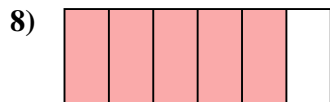
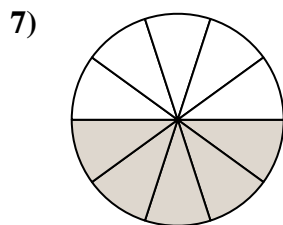
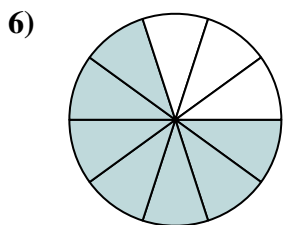
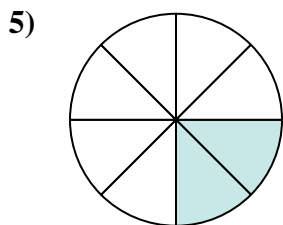








Determina si el área sombreada es 'más', 'menos' o 'igual' que la mitad.

Respuestas

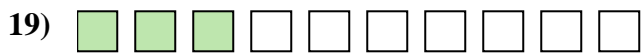
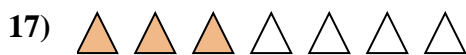
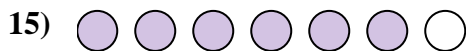
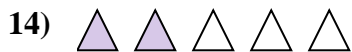


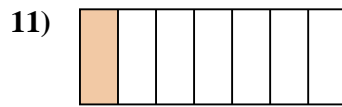
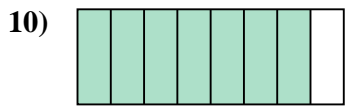
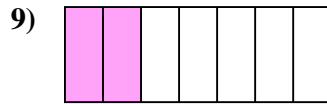
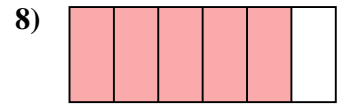
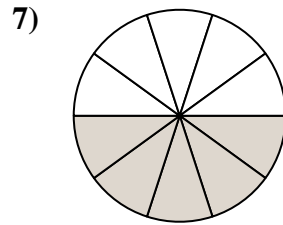
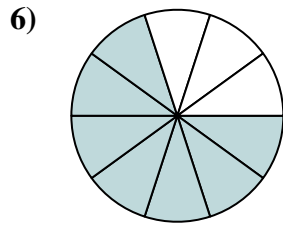
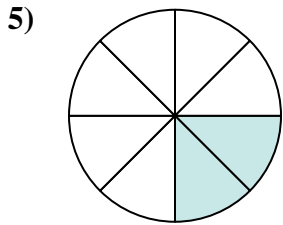






1. _____
2. _____
3. _____
4. _____
5. _____
6. _____
7. _____
8. _____
9. _____
10. _____
11. _____
12. _____
13. _____
14. _____
15. _____
16. _____
17. _____
18. _____
19. _____
20. _____



Determina si el área sombreada es 'más', 'menos' o 'igual' que la mitad.

Respuestas



1. menor

2. menor

3. mayor

4. mayor

5. menor

6. mayor

7. igual

8. mayor

9. menor

10. mayor

11. menor

12. mayor

13. menor

14. menor

15. mayor

16. igual

17. menor

18. menor

19. menor

20. menor