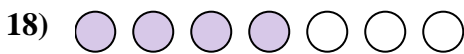




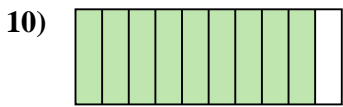
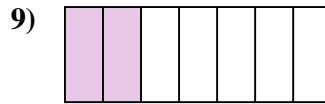
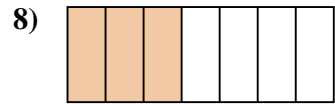
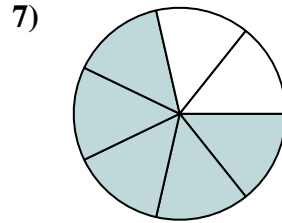
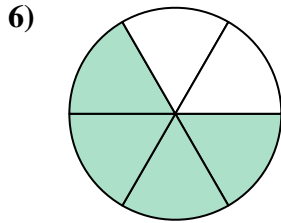
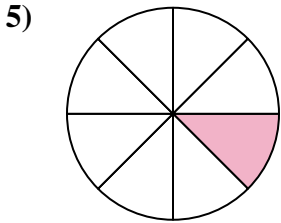







Determina si el área sombreada es 'más', 'menos' o 'igual' que la mitad.




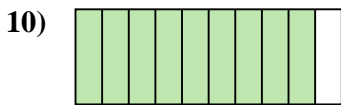
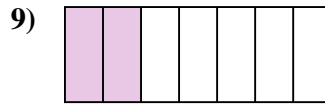
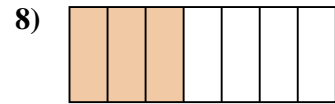
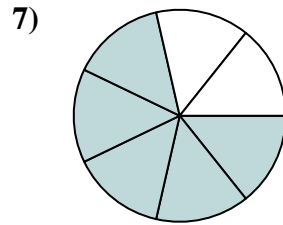
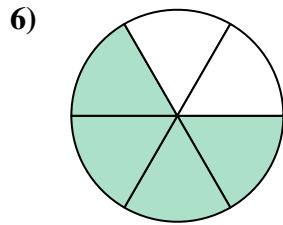
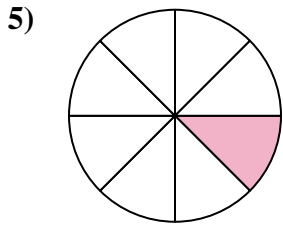


**Respuestas**



1. \_\_\_\_\_
2. \_\_\_\_\_
3. \_\_\_\_\_
4. \_\_\_\_\_
5. \_\_\_\_\_
6. \_\_\_\_\_
7. \_\_\_\_\_
8. \_\_\_\_\_
9. \_\_\_\_\_
10. \_\_\_\_\_
11. \_\_\_\_\_
12. \_\_\_\_\_
13. \_\_\_\_\_
14. \_\_\_\_\_
15. \_\_\_\_\_
16. \_\_\_\_\_
17. \_\_\_\_\_
18. \_\_\_\_\_
19. \_\_\_\_\_
20. \_\_\_\_\_



Determina si el área sombreada es 'más', 'menos' o 'igual' que la mitad.



**Respuestas**

1. **mayor**

2. **igual**

3. **menor**

4. **menor**

5. **menor**

6. **mayor**

7. **mayor**

8. **menor**

9. **menor**

10. **mayor**

11. **igual**

12. **mayor**

13. **menor**

14. **menor**

15. **menor**

16. **mayor**

17. **menor**

18. **mayor**

19. **mayor**

20. **igual**