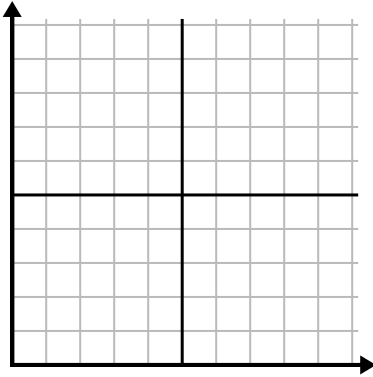




Complete la cuadrícula utilizando la gráfica.

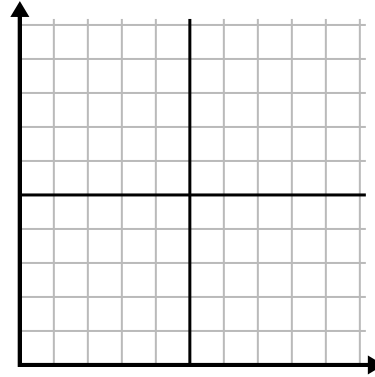
1)

| Año | 1 | 2 | 3 | 4 | 5 | 6 |
|--------------------------------|----|---|---|---|---|---|
| Cajas de bolígrafos utilizados | 10 | 1 | 6 | 2 | 7 | 8 |



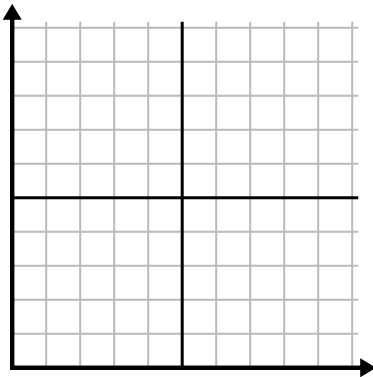
2)

| Día | 1 | 2 | 3 | 4 | 5 |
|-------------------|----|----|----|----|---|
| Mensajes enviados | 25 | 35 | 40 | 15 | 5 |



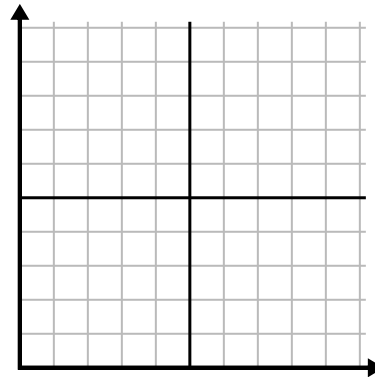
3)

| Año | 1 | 2 | 3 | 4 | 5 |
|---------------------------|----|---|----|---|----|
| Cartuchos de tinta usados | 10 | 4 | 12 | 2 | 14 |



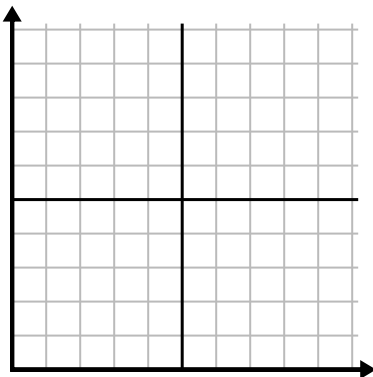
4)

| Día | 1 | 2 | 3 | 4 | 5 |
|--------------------------|-----|----|-----|-----|----|
| Vídeos de Youtube vistos | 120 | 60 | 300 | 150 | 30 |



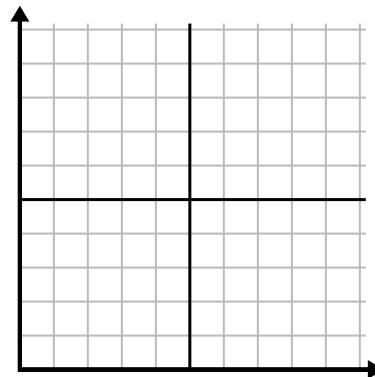
5)

| Semana | 1 | 2 | 3 | 4 | 5 | 6 | 7 |
|----------------------|-----|----|----|----|----|----|----|
| Agua usada (galones) | 100 | 50 | 90 | 10 | 60 | 80 | 40 |



6)

| Día | 1 | 2 | 3 | 4 | 5 | 6 | 7 |
|----------------|---|---|---|---|---|---|---|
| Dinero gastado | 1 | 7 | 3 | 4 | 5 | 6 | 8 |

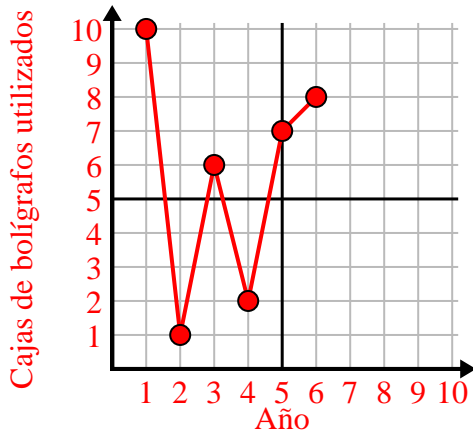




Complete la cuadrícula utilizando la gráfica.

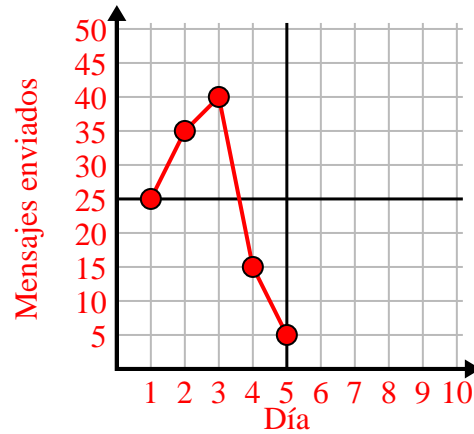
1)

| Año | 1 | 2 | 3 | 4 | 5 | 6 |
|--------------------------------|----|---|---|---|---|---|
| Cajas de bolígrafos utilizados | 10 | 1 | 6 | 2 | 7 | 8 |



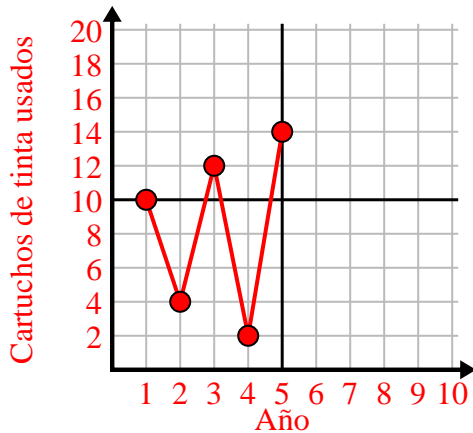
2)

| Día | 1 | 2 | 3 | 4 | 5 |
|-------------------|----|----|----|----|---|
| Mensajes enviados | 25 | 35 | 40 | 15 | 5 |



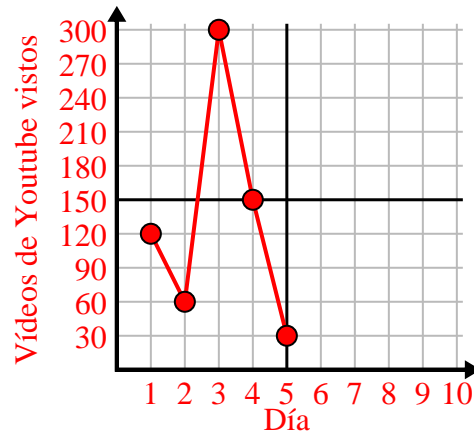
3)

| Año | 1 | 2 | 3 | 4 | 5 |
|---------------------------|----|---|----|---|----|
| Cartuchos de tinta usados | 10 | 4 | 12 | 2 | 14 |



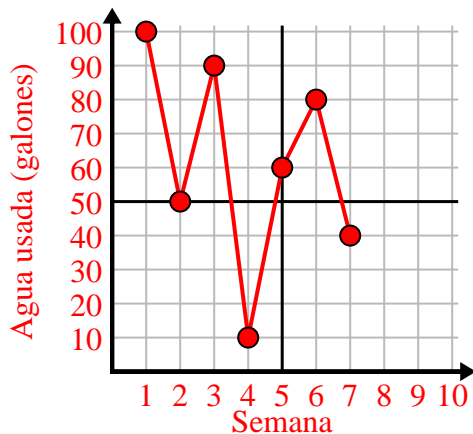
4)

| Día | 1 | 2 | 3 | 4 | 5 |
|--------------------------|-----|----|-----|-----|----|
| Vídeos de Youtube vistos | 120 | 60 | 300 | 150 | 30 |



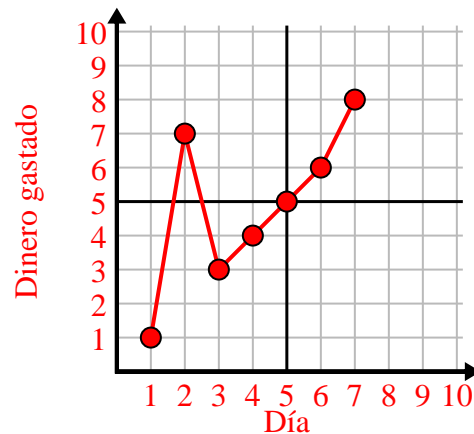
5)

| Semana | 1 | 2 | 3 | 4 | 5 | 6 | 7 |
|----------------------|-----|----|----|----|----|----|----|
| Agua usada (galones) | 100 | 50 | 90 | 10 | 60 | 80 | 40 |



6)

| Día | 1 | 2 | 3 | 4 | 5 | 6 | 7 |
|----------------|---|---|---|---|---|---|---|
| Dinero gastado | 1 | 7 | 3 | 4 | 5 | 6 | 8 |

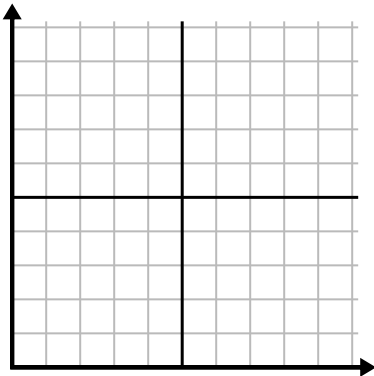




Complete la cuadrícula utilizando la gráfica.

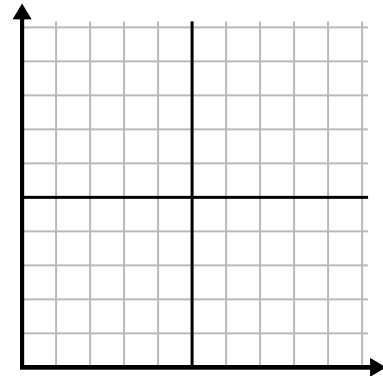
1)

| Día | 1 | 2 | 3 | 4 | 5 | 6 | 7 |
|--------------------------|----|-----|-----|-----|----|----|-----|
| Vídeos de Youtube vistos | 30 | 180 | 270 | 150 | 60 | 90 | 240 |



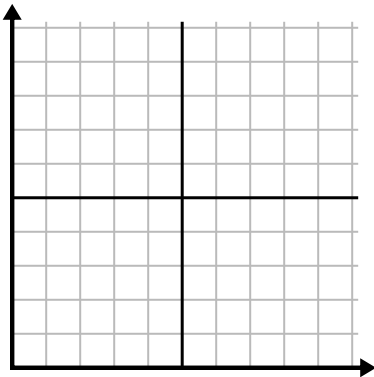
2)

| Mes | 1 | 2 | 3 | 4 | 5 |
|--------------------------------|-----|-----|----|-----|----|
| Precio de la factura eléctrica | 225 | 150 | 75 | 125 | 50 |



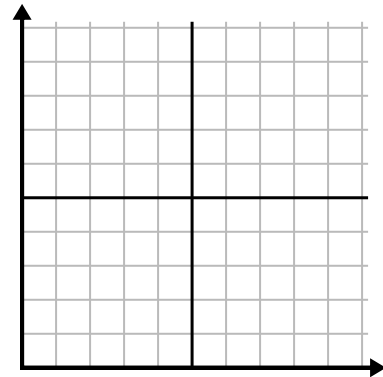
3)

| Año | 1 | 2 | 3 | 4 | 5 |
|---------------------------|----|---|----|----|---|
| Cartuchos de tinta usados | 16 | 2 | 10 | 12 | 8 |



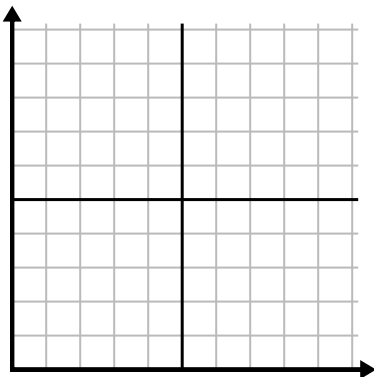
4)

| Día | 1 | 2 | 3 | 4 | 5 | 6 |
|----------------|---|---|---|---|---|---|
| Dinero gastado | 2 | 7 | 9 | 8 | 5 | 1 |



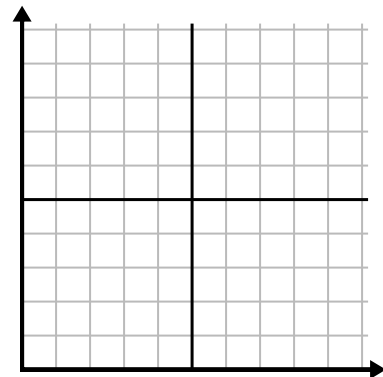
5)

| Hora | 1 | 2 | 3 | 4 | 5 | 6 | 7 |
|------------------|---|---|---|---|---|---|---|
| Cantidad vendida | 5 | 4 | 2 | 9 | 7 | 6 | 8 |



6)

| Día | 1 | 2 | 3 | 4 | 5 | 6 |
|------------------|-----|-----|-----|-----|-----|-----|
| Comidas vendidas | 600 | 900 | 700 | 500 | 100 | 400 |

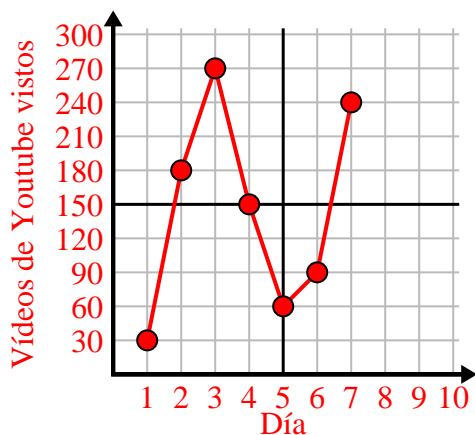




Complete la cuadrícula utilizando la gráfica.

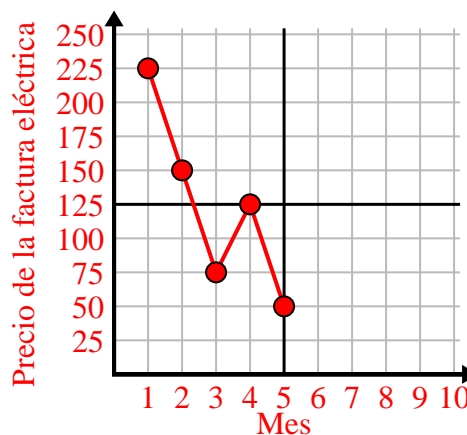
1)

| Día | 1 | 2 | 3 | 4 | 5 | 6 | 7 |
|--------------------------|----|-----|-----|-----|----|----|-----|
| Vídeos de Youtube vistos | 30 | 180 | 270 | 150 | 60 | 90 | 240 |



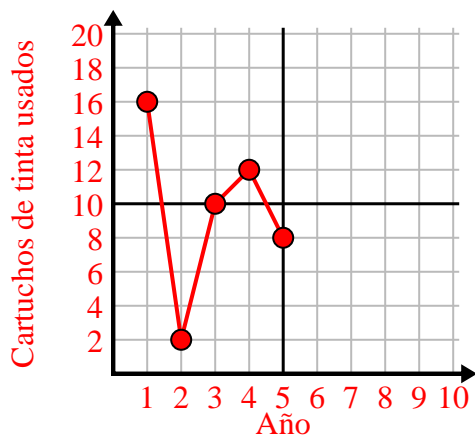
2)

| Mes | 1 | 2 | 3 | 4 | 5 |
|--------------------------------|-----|-----|----|-----|----|
| Precio de la factura eléctrica | 225 | 150 | 75 | 125 | 50 |



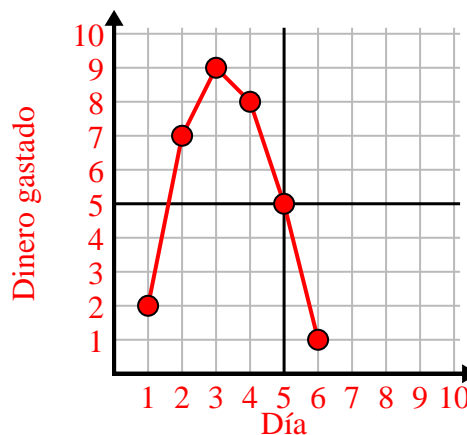
3)

| Año | 1 | 2 | 3 | 4 | 5 |
|---------------------------|----|---|----|----|---|
| Cartuchos de tinta usados | 16 | 2 | 10 | 12 | 8 |



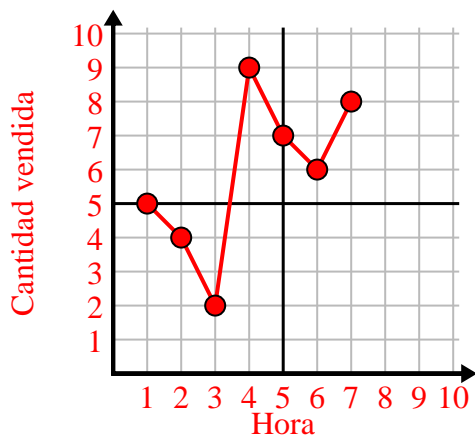
4)

| Día | 1 | 2 | 3 | 4 | 5 | 6 |
|----------------|---|---|---|---|---|---|
| Dinero gastado | 2 | 7 | 9 | 8 | 5 | 1 |



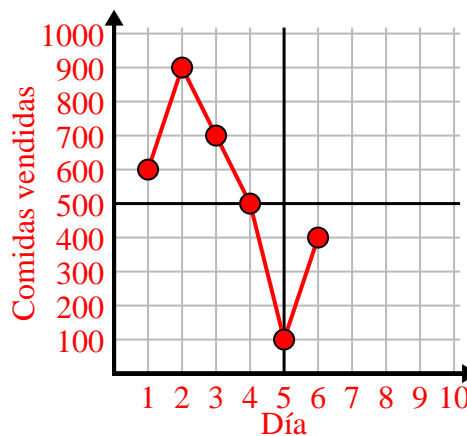
5)

| Hora | 1 | 2 | 3 | 4 | 5 | 6 | 7 |
|------------------|---|---|---|---|---|---|---|
| Cantidad vendida | 5 | 4 | 2 | 9 | 7 | 6 | 8 |



6)

| Día | 1 | 2 | 3 | 4 | 5 | 6 |
|------------------|-----|-----|-----|-----|-----|-----|
| Comidas vendidas | 600 | 900 | 700 | 500 | 100 | 400 |

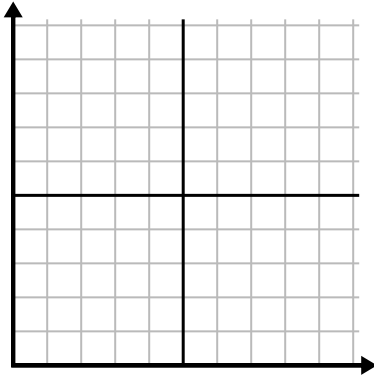




Complete la cuadrícula utilizando la gráfica.

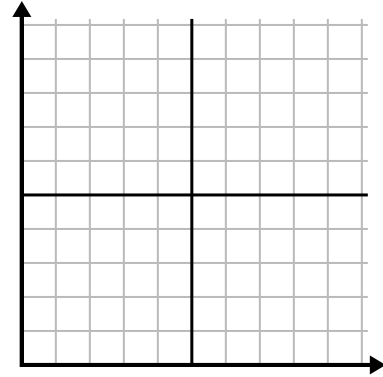
1)

| Mes | 1 | 2 | 3 | 4 | 5 | 6 |
|--------------------------------|-----|----|-----|-----|-----|-----|
| Precio de la factura eléctrica | 175 | 50 | 250 | 200 | 100 | 150 |



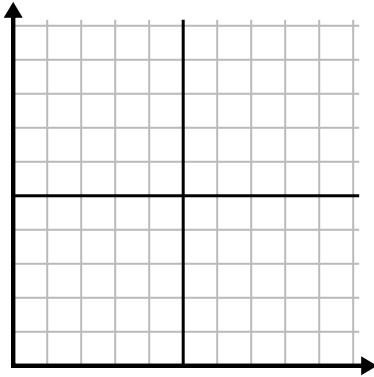
2)

| Día | 1 | 2 | 3 | 4 | 5 |
|------------------|-----|-----|-----|-------|-----|
| Comidas vendidas | 900 | 300 | 600 | 1,000 | 400 |



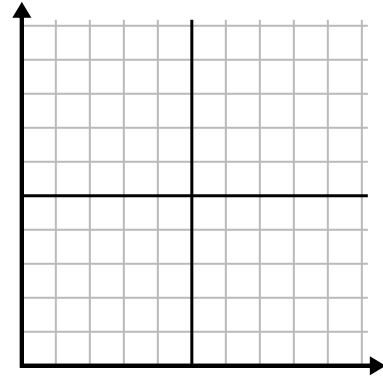
3)

| Semana | 1 | 2 | 3 | 4 | 5 | 6 | 7 |
|----------------------------|----|----|----|----|----|----|----|
| Horas de televisión vistas | 15 | 30 | 50 | 35 | 10 | 25 | 45 |



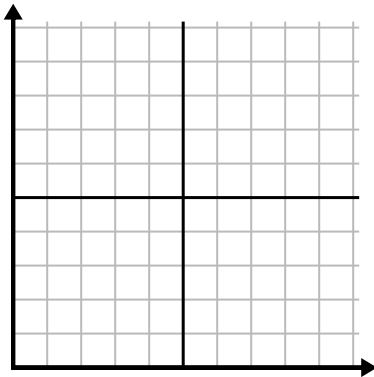
4)

| Hora | 1 | 2 | 3 | 4 | 5 |
|------------------|---|---|---|---|---|
| Cantidad vendida | 2 | 3 | 8 | 1 | 4 |



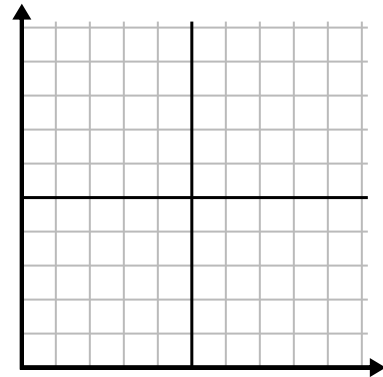
5)

| Día | 1 | 2 | 3 | 4 | 5 |
|-------------------|-----|-----|----|----|-----|
| Calorías quemadas | 200 | 180 | 40 | 80 | 120 |



6)

| Año | 1 | 2 | 3 | 4 | 5 | 6 |
|---------------------------|----|----|----|----|----|---|
| Cartuchos de tinta usados | 18 | 20 | 14 | 16 | 12 | 8 |

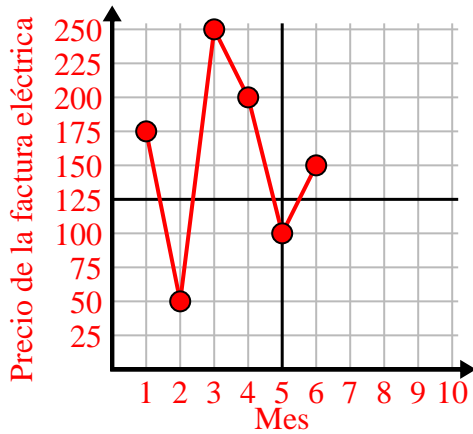




Complete la cuadrícula utilizando la gráfica.

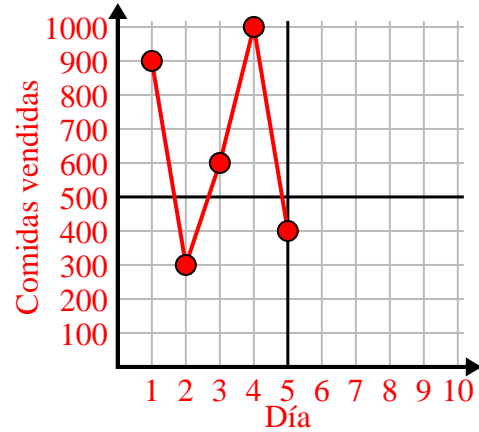
1)

| Mes | 1 | 2 | 3 | 4 | 5 | 6 |
|--------------------------------|-----|----|-----|-----|-----|-----|
| Precio de la factura eléctrica | 175 | 50 | 250 | 200 | 100 | 150 |



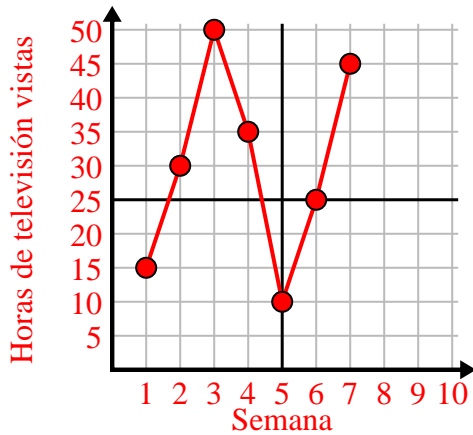
2)

| Día | 1 | 2 | 3 | 4 | 5 |
|------------------|-----|-----|-----|-------|-----|
| Comidas vendidas | 900 | 300 | 600 | 1,000 | 400 |



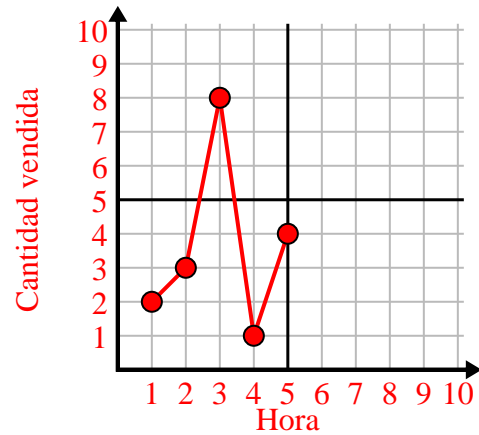
3)

| Semana | 1 | 2 | 3 | 4 | 5 | 6 | 7 |
|----------------------------|----|----|----|----|----|----|----|
| Horas de televisión vistas | 15 | 30 | 50 | 35 | 10 | 25 | 45 |



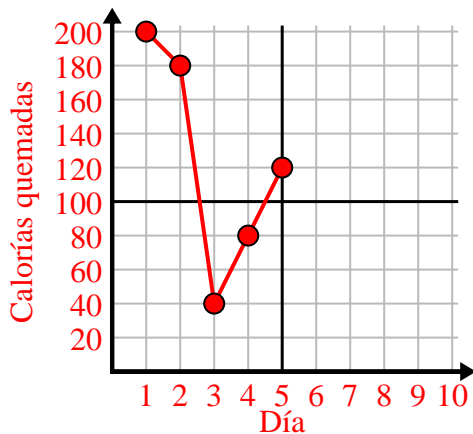
4)

| Hora | 1 | 2 | 3 | 4 | 5 |
|------------------|---|---|---|---|---|
| Cantidad vendida | 2 | 3 | 8 | 1 | 4 |



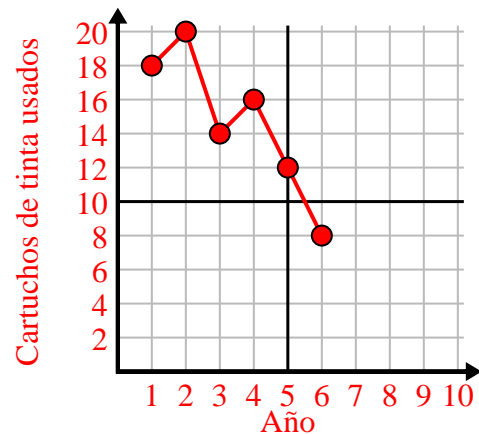
5)

| Día | 1 | 2 | 3 | 4 | 5 |
|-------------------|-----|-----|----|----|-----|
| Calorías quemadas | 200 | 180 | 40 | 80 | 120 |



6)

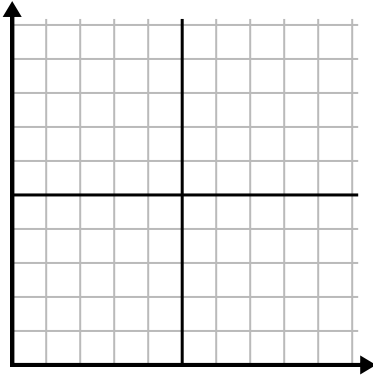
| Año | 1 | 2 | 3 | 4 | 5 | 6 |
|---------------------------|----|----|----|----|----|---|
| Cartuchos de tinta usados | 18 | 20 | 14 | 16 | 12 | 8 |



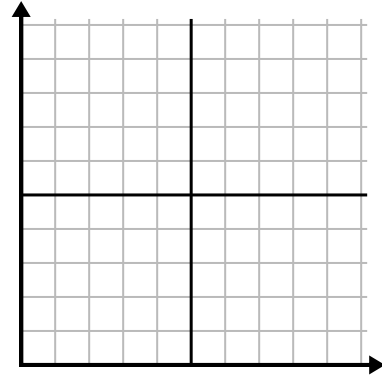


Complete la cuadrícula utilizando la gráfica.

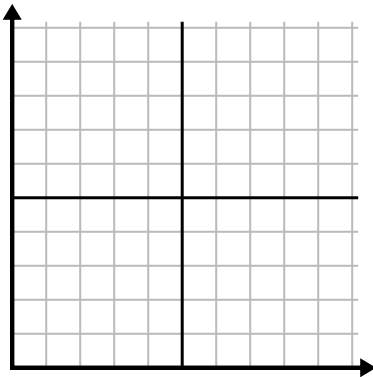
| Día | 1 | 2 | 3 | 4 | 5 | 6 | 7 |
|-------------------|---|----|----|----|----|----|----|
| Mensajes enviados | 5 | 30 | 25 | 50 | 35 | 15 | 10 |



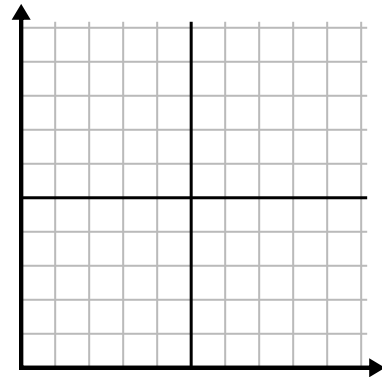
| Día | 1 | 2 | 3 | 4 | 5 | 6 | 7 |
|----------------|---|---|---|---|----|---|---|
| Dinero gastado | 1 | 5 | 4 | 6 | 10 | 2 | 3 |



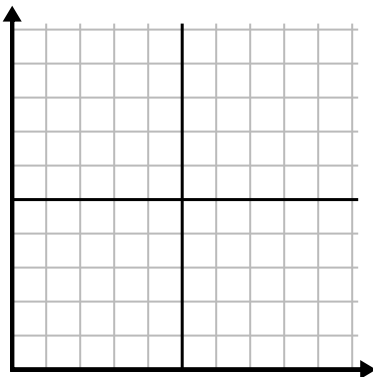
| Semana | 1 | 2 | 3 | 4 | 5 |
|----------------------|----|----|-----|----|----|
| Agua usada (galones) | 20 | 60 | 100 | 90 | 70 |



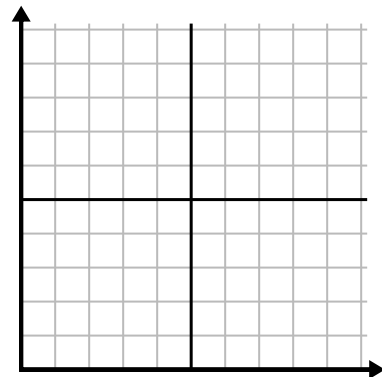
| Día | 1 | 2 | 3 | 4 | 5 | 6 |
|-------------------|----|-----|----|----|-----|-----|
| Calorías quemadas | 80 | 180 | 40 | 20 | 100 | 200 |



| Mes | 1 | 2 | 3 | 4 | 5 |
|--------------------------------|-----|-----|-----|-----|----|
| Precio de la factura eléctrica | 150 | 175 | 125 | 200 | 25 |



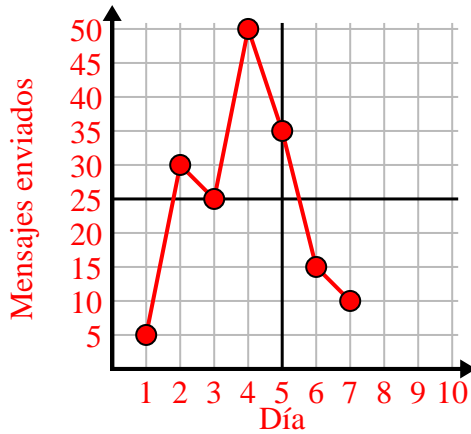
| Hora | 1 | 2 | 3 | 4 | 5 | 6 |
|------------------|---|---|---|----|---|---|
| Cantidad vendida | 4 | 9 | 7 | 10 | 3 | 6 |



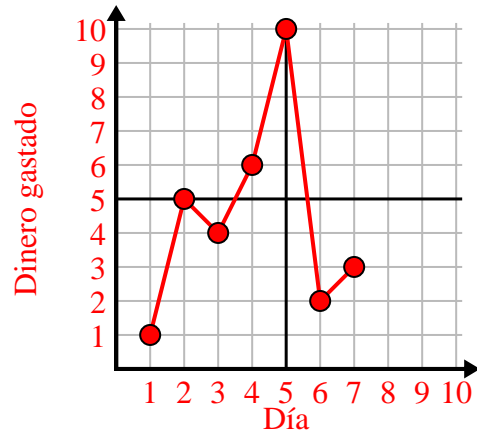


Complete la cuadrícula utilizando la gráfica.

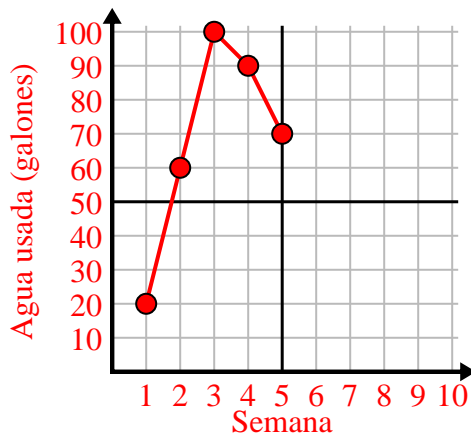
| Día | 1 | 2 | 3 | 4 | 5 | 6 | 7 |
|-------------------|---|----|----|----|----|----|----|
| Mensajes enviados | 5 | 30 | 25 | 50 | 35 | 15 | 10 |



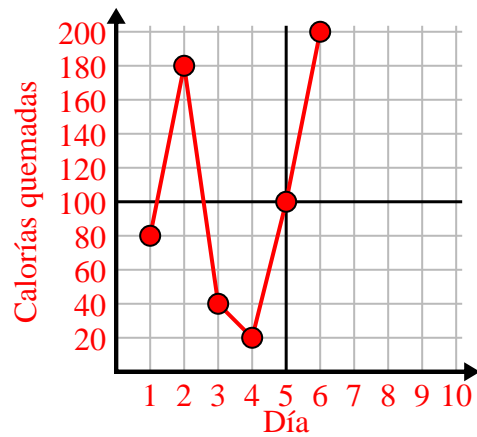
| Día | 1 | 2 | 3 | 4 | 5 | 6 | 7 |
|----------------|---|---|---|---|----|---|---|
| Dinero gastado | 1 | 5 | 4 | 6 | 10 | 2 | 3 |



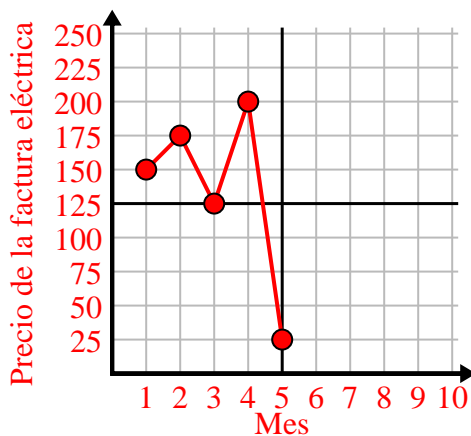
| Semana | 1 | 2 | 3 | 4 | 5 |
|----------------------|----|----|-----|----|----|
| Agua usada (galones) | 20 | 60 | 100 | 90 | 70 |



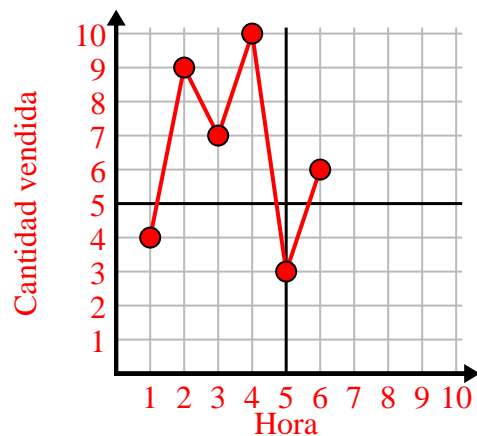
| Día | 1 | 2 | 3 | 4 | 5 | 6 |
|-------------------|----|-----|----|----|-----|-----|
| Calorías quemadas | 80 | 180 | 40 | 20 | 100 | 200 |



| Mes | 1 | 2 | 3 | 4 | 5 |
|--------------------------------|-----|-----|-----|-----|----|
| Precio de la factura eléctrica | 150 | 175 | 125 | 200 | 25 |



| Hora | 1 | 2 | 3 | 4 | 5 | 6 |
|------------------|---|---|---|----|---|---|
| Cantidad vendida | 4 | 9 | 7 | 10 | 3 | 6 |

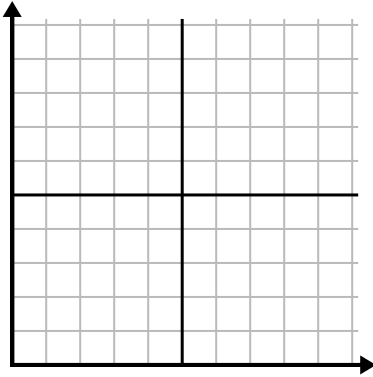




Complete la cuadrícula utilizando la gráfica.

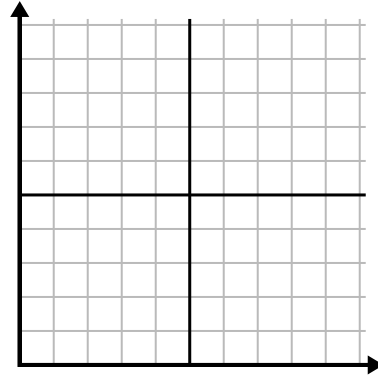
1)

| Día | 1 | 2 | 3 | 4 | 5 |
|-------------------|-----|----|-----|----|-----|
| Calorías quemadas | 160 | 40 | 100 | 20 | 180 |



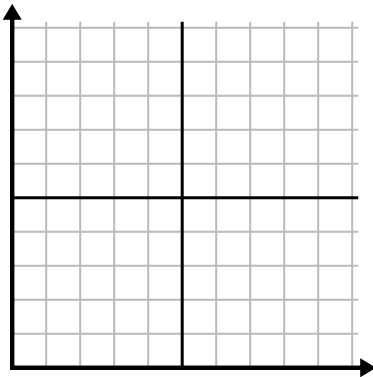
2)

| Año | 1 | 2 | 3 | 4 | 5 |
|--------------------------------|---|---|---|---|----|
| Cajas de bolígrafos utilizados | 9 | 2 | 8 | 6 | 10 |



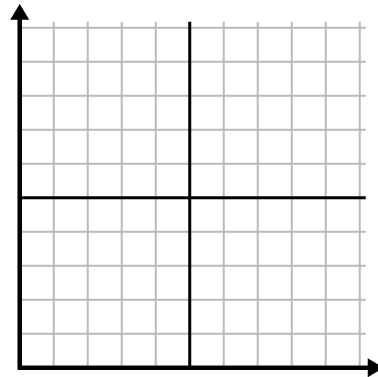
3)

| Día | 1 | 2 | 3 | 4 | 5 |
|-------------------|----|----|----|---|----|
| Mensajes enviados | 40 | 25 | 45 | 5 | 30 |



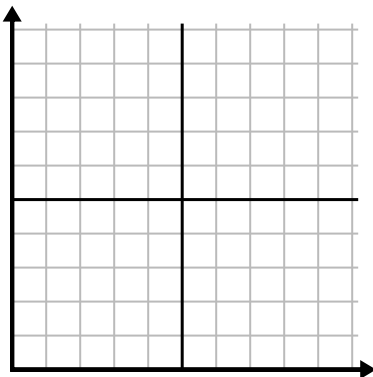
4)

| Día | 1 | 2 | 3 | 4 | 5 | 6 | 7 |
|------------------|-----|-----|-----|-------|-----|-----|-----|
| Comidas vendidas | 600 | 900 | 200 | 1,000 | 500 | 400 | 700 |



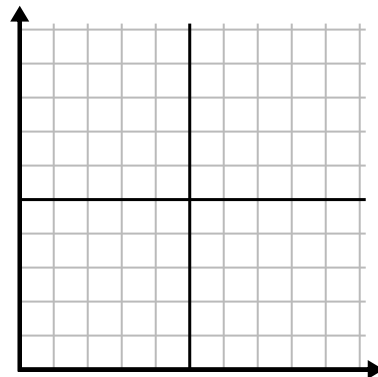
5)

| Hora | 1 | 2 | 3 | 4 | 5 |
|------------------|---|---|----|---|---|
| Cantidad vendida | 8 | 5 | 10 | 3 | 9 |



6)

| Semana | 1 | 2 | 3 | 4 | 5 |
|----------------------|----|----|----|----|-----|
| Agua usada (galones) | 70 | 80 | 10 | 40 | 100 |

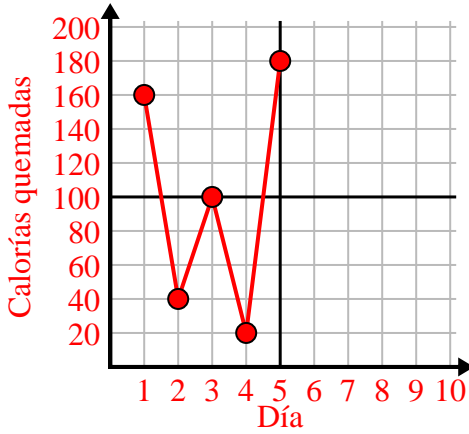




Complete la cuadrícula utilizando la gráfica.

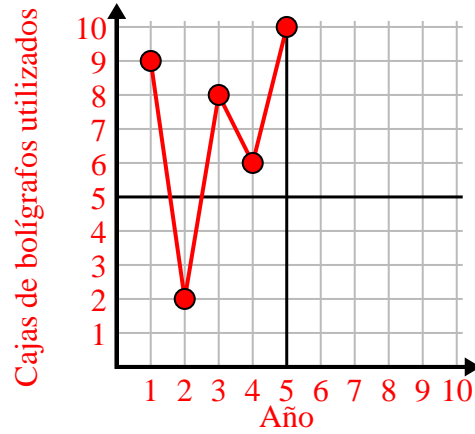
1)

| Día | 1 | 2 | 3 | 4 | 5 |
|-------------------|-----|----|-----|----|-----|
| Calorías quemadas | 160 | 40 | 100 | 20 | 180 |



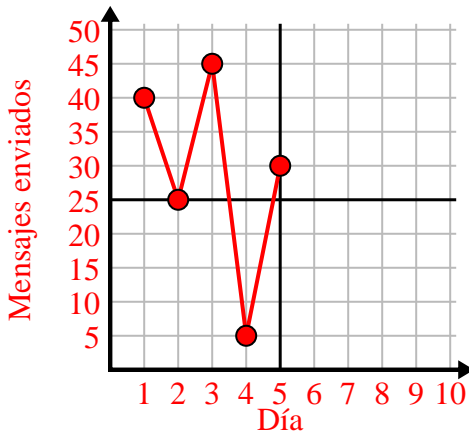
2)

| Año | 1 | 2 | 3 | 4 | 5 |
|--------------------------------|---|---|---|---|----|
| Cajas de bolígrafos utilizados | 9 | 2 | 8 | 6 | 10 |



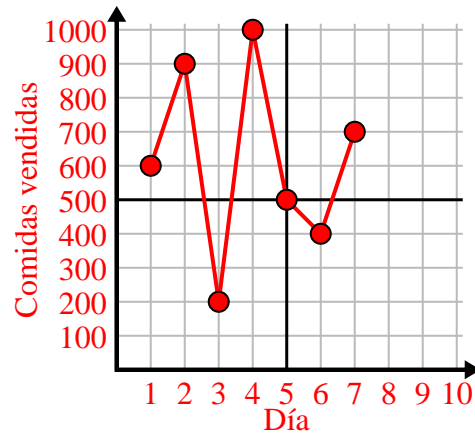
3)

| Día | 1 | 2 | 3 | 4 | 5 |
|-------------------|----|----|----|---|----|
| Mensajes enviados | 40 | 25 | 45 | 5 | 30 |



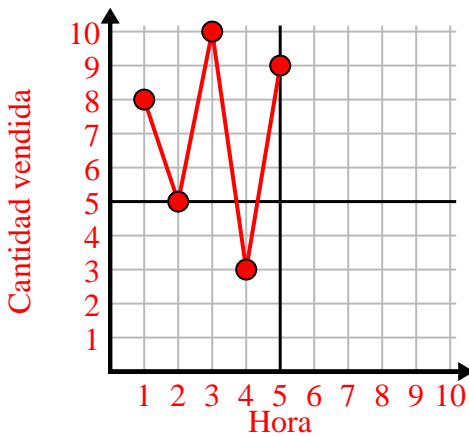
4)

| Día | 1 | 2 | 3 | 4 | 5 | 6 | 7 |
|------------------|-----|-----|-----|-------|-----|-----|-----|
| Comidas vendidas | 600 | 900 | 200 | 1,000 | 500 | 400 | 700 |



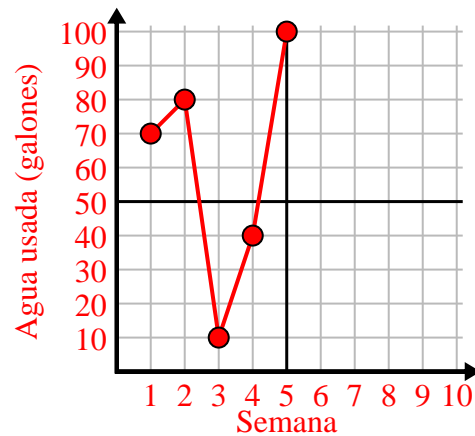
5)

| Hora | 1 | 2 | 3 | 4 | 5 |
|------------------|---|---|----|---|---|
| Cantidad vendida | 8 | 5 | 10 | 3 | 9 |



6)

| Semana | 1 | 2 | 3 | 4 | 5 |
|----------------------|----|----|----|----|-----|
| Agua usada (galones) | 70 | 80 | 10 | 40 | 100 |

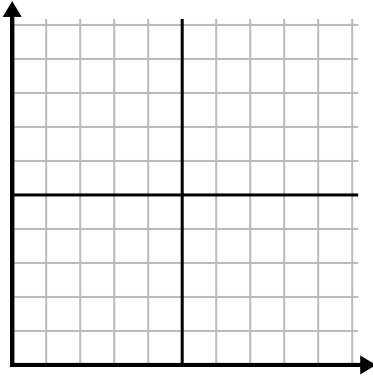




Complete la cuadrícula utilizando la gráfica.

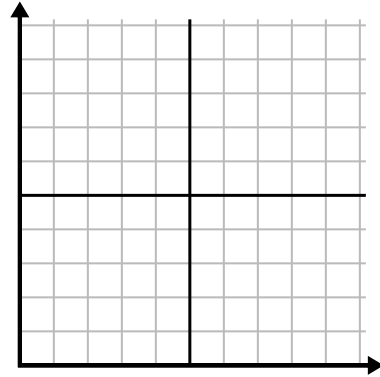
1)

| Día | 1 | 2 | 3 | 4 | 5 | 6 |
|-------------------|----|----|-----|-----|----|-----|
| Calorías quemadas | 80 | 60 | 140 | 100 | 40 | 180 |



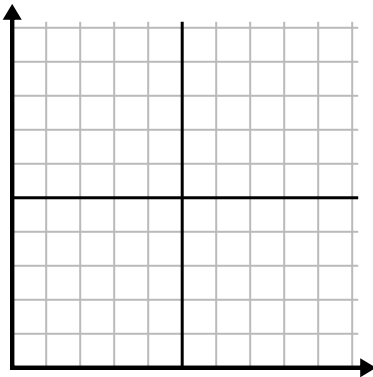
2)

| Mes | 1 | 2 | 3 | 4 | 5 |
|--------------------------------|-----|-----|-----|-----|----|
| Precio de la factura eléctrica | 225 | 250 | 175 | 150 | 75 |



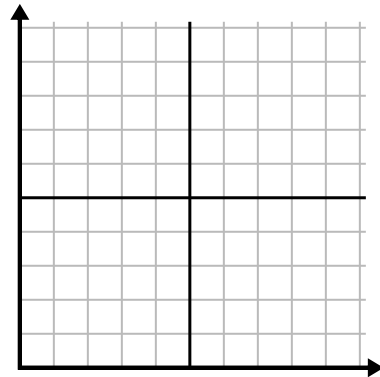
3)

| Hora | 1 | 2 | 3 | 4 | 5 |
|------------------|---|---|---|---|---|
| Cantidad vendida | 1 | 9 | 2 | 6 | 5 |



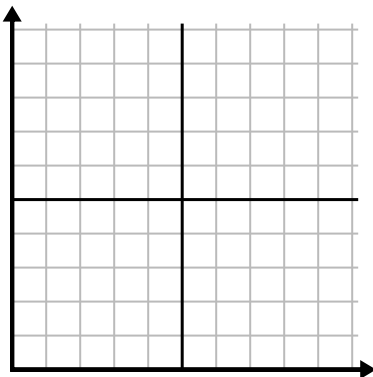
4)

| Día | 1 | 2 | 3 | 4 | 5 | 6 | 7 |
|-------------------|---|----|----|----|----|----|----|
| Mensajes enviados | 5 | 10 | 50 | 30 | 20 | 15 | 25 |



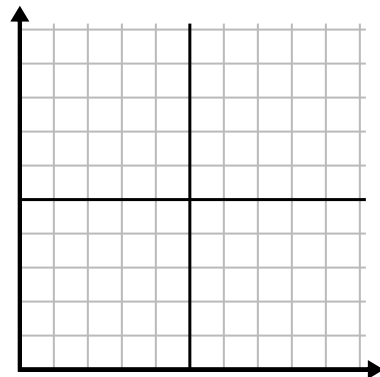
5)

| Semana | 1 | 2 | 3 | 4 | 5 | 6 | 7 |
|----------------------|----|----|----|-----|----|----|----|
| Agua usada (galones) | 90 | 10 | 80 | 100 | 50 | 20 | 70 |



6)

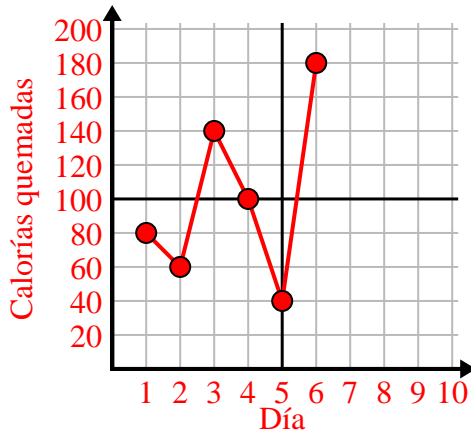
| Día | 1 | 2 | 3 | 4 | 5 | 6 | 7 |
|----------------|---|---|---|---|---|---|----|
| Dinero gastado | 8 | 7 | 6 | 5 | 4 | 3 | 10 |



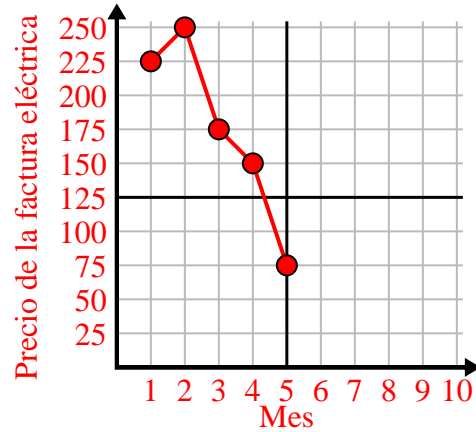


Complete la cuadrícula utilizando la gráfica.

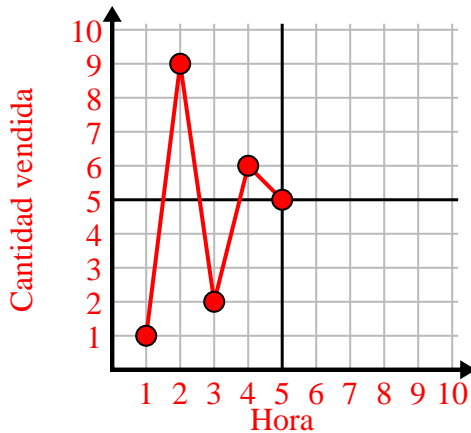
| Día | 1 | 2 | 3 | 4 | 5 | 6 |
|-------------------|----|----|-----|-----|----|-----|
| Calorías quemadas | 80 | 60 | 140 | 100 | 40 | 180 |



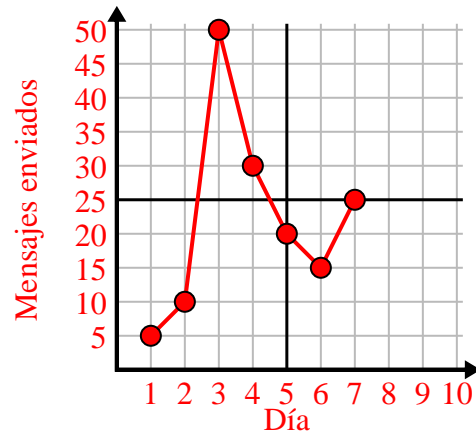
| Mes | 1 | 2 | 3 | 4 | 5 |
|--------------------------------|-----|-----|-----|-----|----|
| Precio de la factura eléctrica | 225 | 250 | 175 | 150 | 75 |



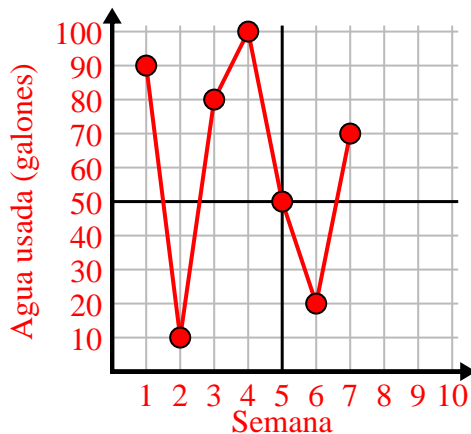
| Hora | 1 | 2 | 3 | 4 | 5 |
|------------------|---|---|---|---|---|
| Cantidad vendida | 1 | 9 | 2 | 6 | 5 |



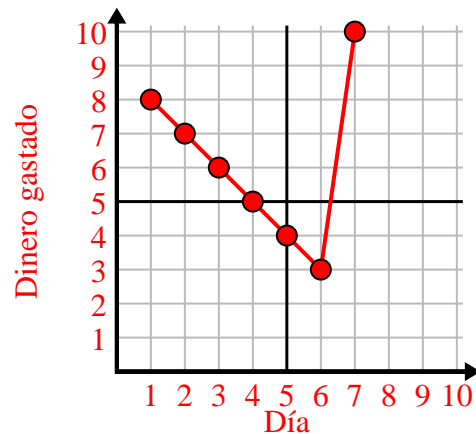
| Día | 1 | 2 | 3 | 4 | 5 | 6 | 7 |
|-------------------|---|----|----|----|----|----|----|
| Mensajes enviados | 5 | 10 | 50 | 30 | 20 | 15 | 25 |



| Semana | 1 | 2 | 3 | 4 | 5 | 6 | 7 |
|----------------------|----|----|----|-----|----|----|----|
| Agua usada (galones) | 90 | 10 | 80 | 100 | 50 | 20 | 70 |



| Día | 1 | 2 | 3 | 4 | 5 | 6 | 7 |
|----------------|---|---|---|---|---|---|----|
| Dinero gastado | 8 | 7 | 6 | 5 | 4 | 3 | 10 |

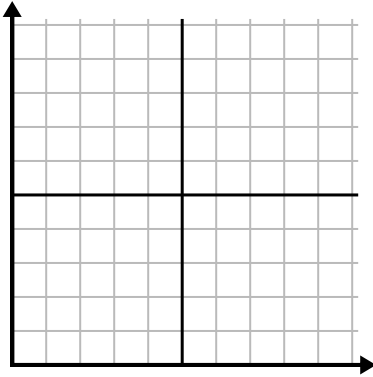




Complete la cuadrícula utilizando la gráfica.

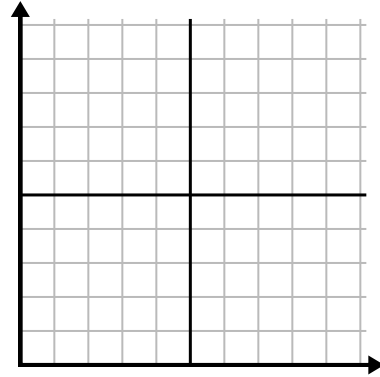
1)

| Día | 1 | 2 | 3 | 4 | 5 |
|------------------|-------|-----|-----|-----|-----|
| Comidas vendidas | 1,000 | 300 | 900 | 100 | 700 |



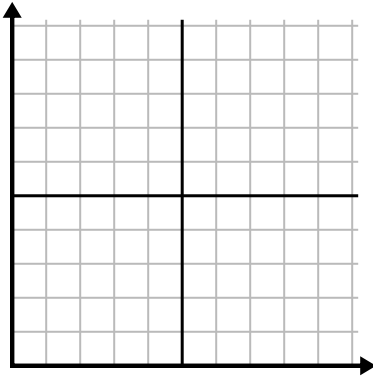
2)

| Día | 1 | 2 | 3 | 4 | 5 | 6 |
|-------------------|----|----|----|----|----|----|
| Mensajes enviados | 40 | 30 | 50 | 15 | 25 | 10 |



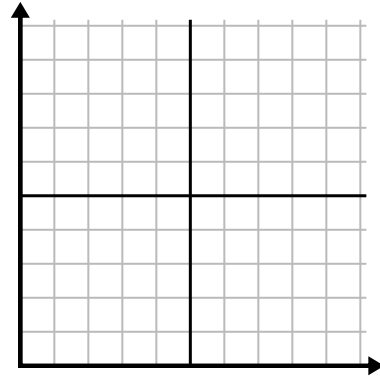
3)

| Año | 1 | 2 | 3 | 4 | 5 | 6 |
|--------------------------------|----|---|---|---|---|---|
| Cajas de bolígrafos utilizados | 10 | 3 | 9 | 1 | 2 | 6 |



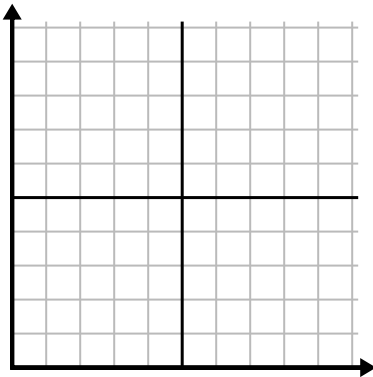
4)

| Año | 1 | 2 | 3 | 4 | 5 |
|---------------------------|---|----|---|----|----|
| Cartuchos de tinta usados | 2 | 18 | 4 | 20 | 12 |



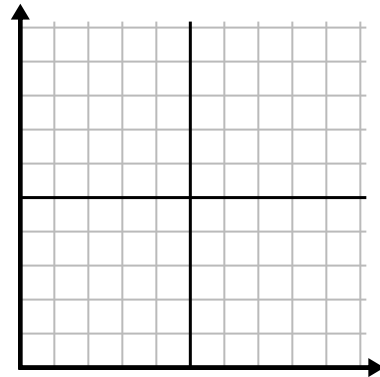
5)

| Hora | 1 | 2 | 3 | 4 | 5 | 6 |
|------------------|---|---|---|---|---|---|
| Cantidad vendida | 6 | 5 | 3 | 4 | 7 | 9 |



6)

| Semana | 1 | 2 | 3 | 4 | 5 | 6 |
|----------------------|----|----|----|----|----|----|
| Agua usada (galones) | 10 | 60 | 80 | 70 | 20 | 40 |

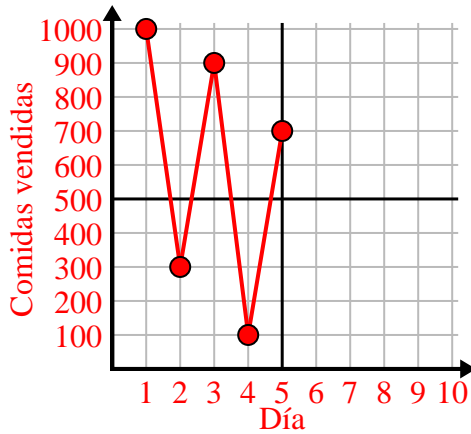




Complete la cuadrícula utilizando la gráfica.

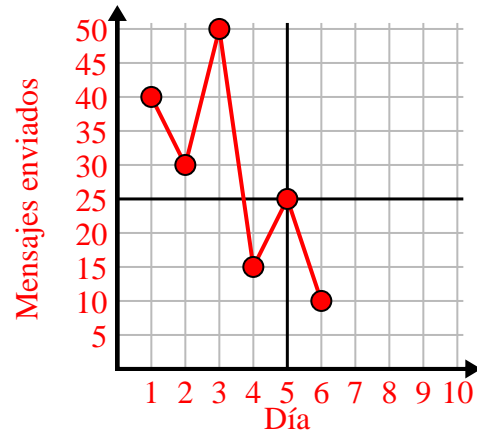
1)

| Día | 1 | 2 | 3 | 4 | 5 |
|------------------|-------|-----|-----|-----|-----|
| Comidas vendidas | 1,000 | 300 | 900 | 100 | 700 |



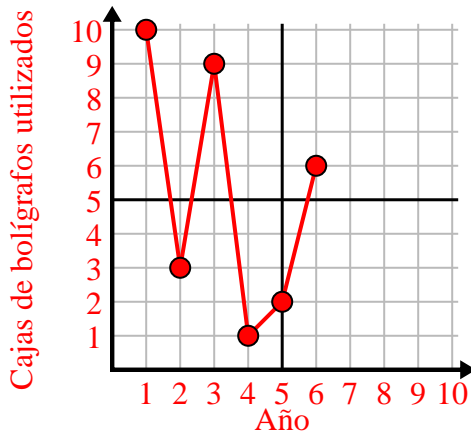
2)

| Día | 1 | 2 | 3 | 4 | 5 | 6 |
|-------------------|----|----|----|----|----|----|
| Mensajes enviados | 40 | 30 | 50 | 15 | 25 | 10 |



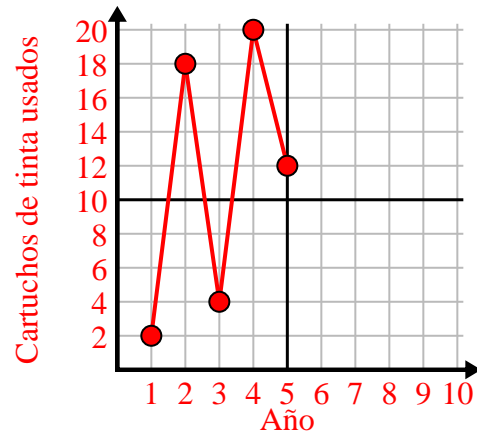
3)

| Año | 1 | 2 | 3 | 4 | 5 | 6 |
|--------------------------------|----|---|---|---|---|---|
| Cajas de bolígrafos utilizados | 10 | 3 | 9 | 1 | 2 | 6 |



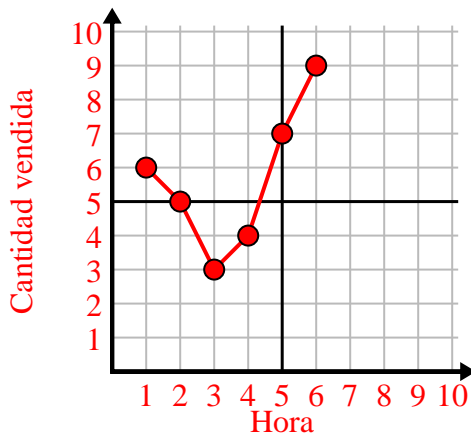
4)

| Año | 1 | 2 | 3 | 4 | 5 |
|---------------------------|---|----|---|----|----|
| Cartuchos de tinta usados | 2 | 18 | 4 | 20 | 12 |



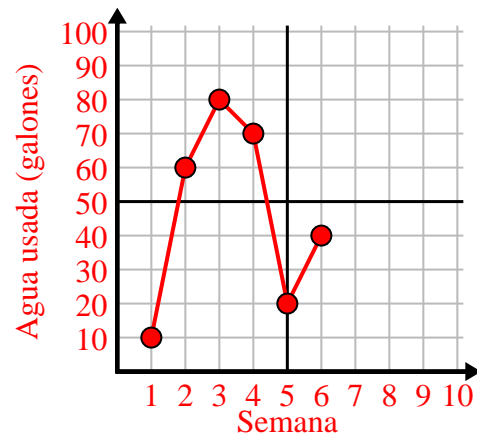
5)

| Hora | 1 | 2 | 3 | 4 | 5 | 6 |
|------------------|---|---|---|---|---|---|
| Cantidad vendida | 6 | 5 | 3 | 4 | 7 | 9 |



6)

| Semana | 1 | 2 | 3 | 4 | 5 | 6 |
|----------------------|----|----|----|----|----|----|
| Agua usada (galones) | 10 | 60 | 80 | 70 | 20 | 40 |

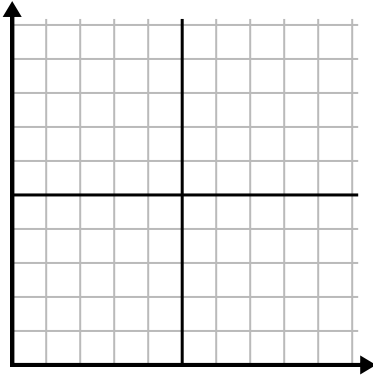




Complete la cuadrícula utilizando la gráfica.

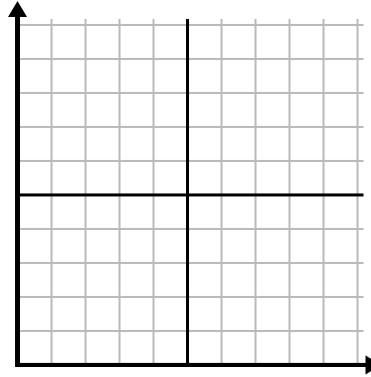
1)

| Hora | 1 | 2 | 3 | 4 | 5 | 6 | 7 |
|------------------|----|---|---|---|---|---|---|
| Cantidad vendida | 10 | 6 | 5 | 4 | 1 | 8 | 9 |



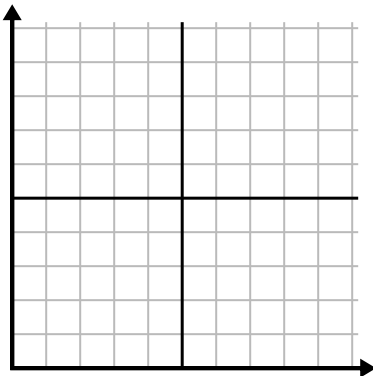
2)

| Semana | 1 | 2 | 3 | 4 | 5 | 6 | 7 |
|----------------------|----|----|----|-----|----|----|----|
| Agua usada (galones) | 30 | 50 | 40 | 100 | 80 | 10 | 20 |



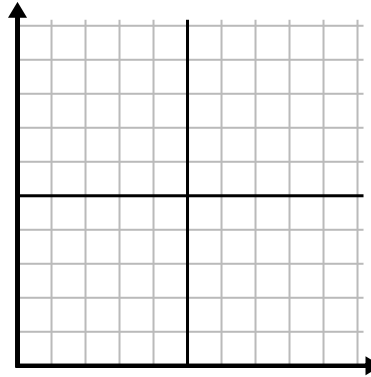
3)

| Año | 1 | 2 | 3 | 4 | 5 | 6 | 7 |
|---------------------------|---|----|---|----|----|----|----|
| Cartuchos de tinta usados | 8 | 18 | 6 | 20 | 16 | 10 | 14 |



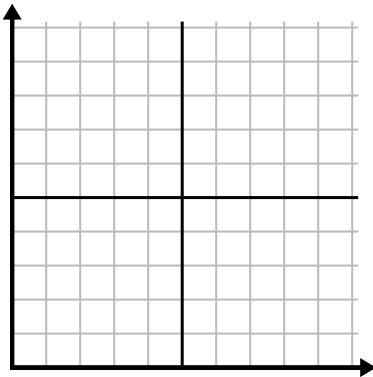
4)

| Día | 1 | 2 | 3 | 4 | 5 | 6 | 7 |
|------------------|-----|-----|-----|-----|-------|-----|-----|
| Comidas vendidas | 900 | 400 | 700 | 500 | 1,000 | 600 | 100 |



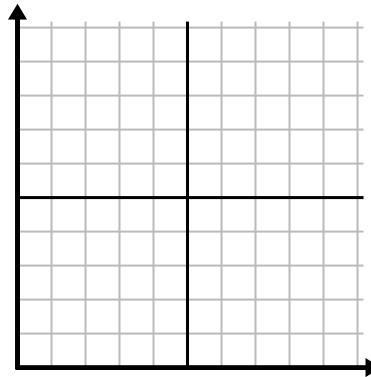
5)

| Día | 1 | 2 | 3 | 4 | 5 | 6 |
|-------------------|----|----|----|----|----|----|
| Mensajes enviados | 40 | 35 | 30 | 50 | 10 | 20 |



6)

| Mes | 1 | 2 | 3 | 4 | 5 | 6 |
|--------------------------------|----|-----|-----|-----|-----|----|
| Precio de la factura eléctrica | 25 | 150 | 175 | 250 | 200 | 50 |

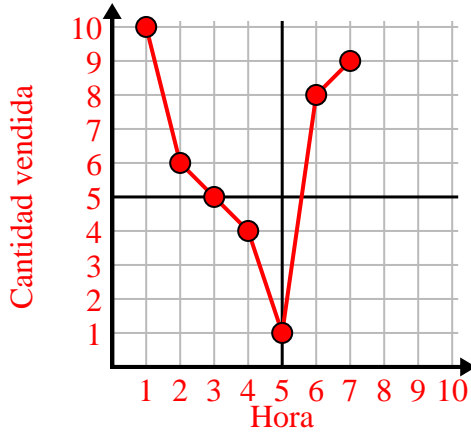




Complete la cuadrícula utilizando la gráfica.

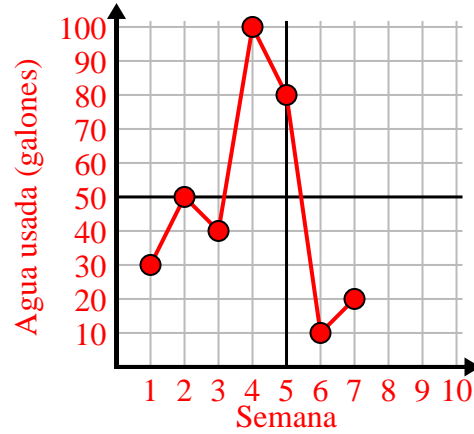
1)

| Hora | 1 | 2 | 3 | 4 | 5 | 6 | 7 |
|------------------|----|---|---|---|---|---|---|
| Cantidad vendida | 10 | 6 | 5 | 4 | 1 | 8 | 9 |



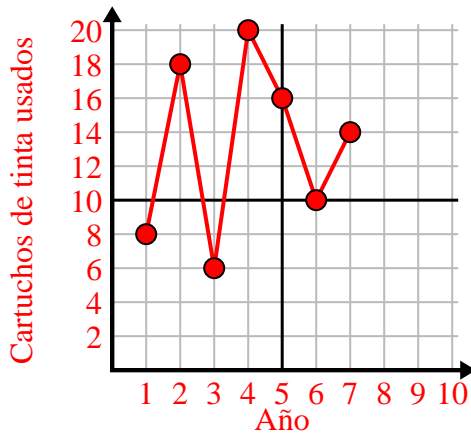
2)

| Semana | 1 | 2 | 3 | 4 | 5 | 6 | 7 |
|----------------------|----|----|----|-----|----|----|----|
| Agua usada (galones) | 30 | 50 | 40 | 100 | 80 | 10 | 20 |



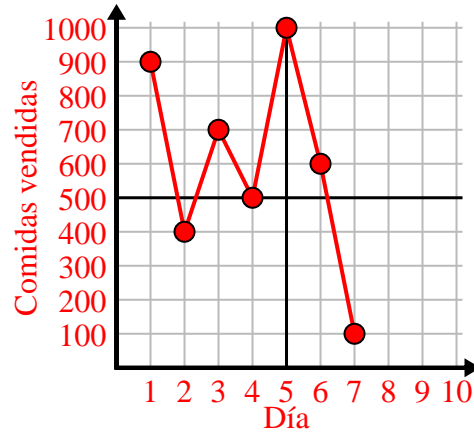
3)

| Año | 1 | 2 | 3 | 4 | 5 | 6 | 7 |
|---------------------------|---|----|---|----|----|----|----|
| Cartuchos de tinta usados | 8 | 18 | 6 | 20 | 16 | 10 | 14 |



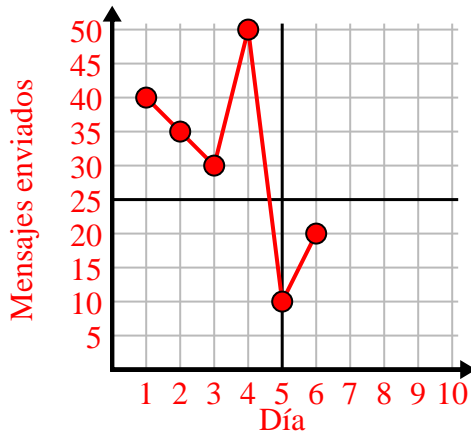
4)

| Día | 1 | 2 | 3 | 4 | 5 | 6 | 7 |
|------------------|-----|-----|-----|-----|-------|-----|-----|
| Comidas vendidas | 900 | 400 | 700 | 500 | 1,000 | 600 | 100 |



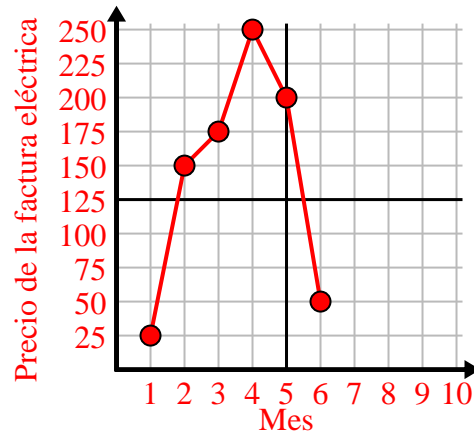
5)

| Día | 1 | 2 | 3 | 4 | 5 | 6 |
|-------------------|----|----|----|----|----|----|
| Mensajes enviados | 40 | 35 | 30 | 50 | 10 | 20 |



6)

| Mes | 1 | 2 | 3 | 4 | 5 | 6 |
|--------------------------------|----|-----|-----|-----|-----|----|
| Precio de la factura eléctrica | 25 | 150 | 175 | 250 | 200 | 50 |

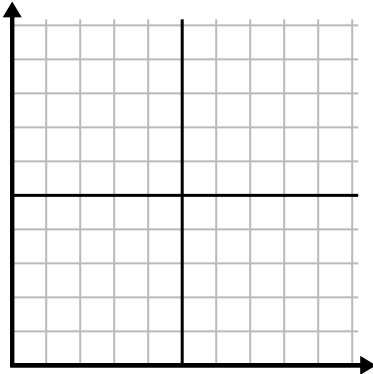




Complete la cuadrícula utilizando la gráfica.

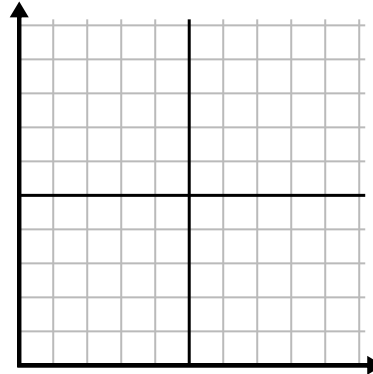
1)

| Mes | 1 | 2 | 3 | 4 | 5 | 6 |
|--------------------------------|----|----|-----|-----|-----|----|
| Precio de la factura eléctrica | 50 | 75 | 250 | 150 | 175 | 25 |



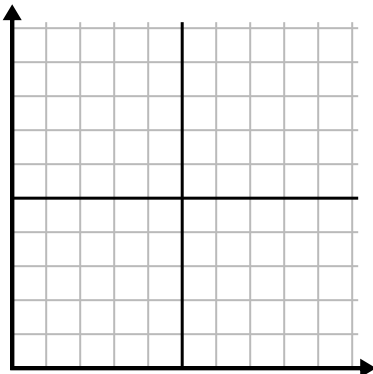
2)

| Día | 1 | 2 | 3 | 4 | 5 | 6 | 7 |
|--------------------------|----|-----|-----|-----|----|----|-----|
| Videos de Youtube vistos | 90 | 210 | 120 | 150 | 60 | 30 | 300 |



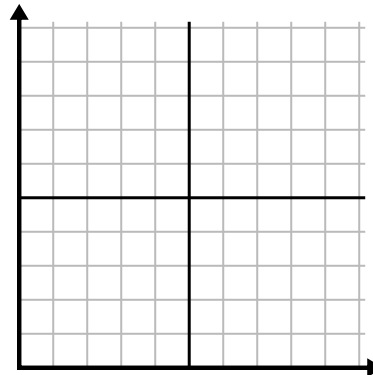
3)

| Semana | 1 | 2 | 3 | 4 | 5 | 6 |
|----------------------------|----|----|----|----|----|----|
| Horas de televisión vistas | 25 | 30 | 15 | 10 | 20 | 50 |



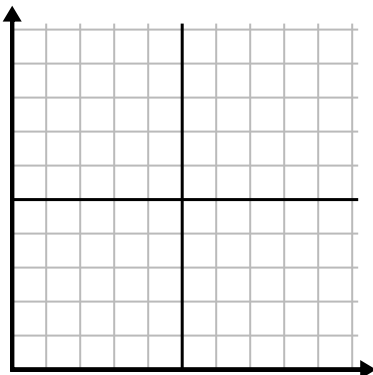
4)

| Día | 1 | 2 | 3 | 4 | 5 | 6 | 7 |
|------------------|-----|-----|-----|-----|-----|-----|-----|
| Comidas vendidas | 900 | 400 | 200 | 800 | 100 | 500 | 300 |



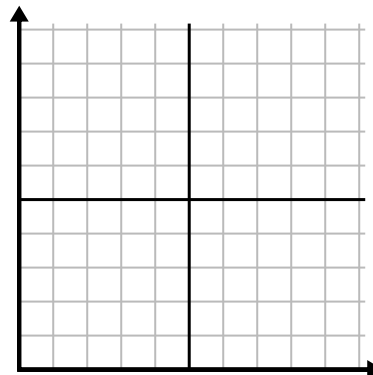
5)

| Semana | 1 | 2 | 3 | 4 | 5 |
|----------------------|----|----|----|----|----|
| Agua usada (galones) | 60 | 80 | 10 | 30 | 20 |



6)

| Día | 1 | 2 | 3 | 4 | 5 |
|-------------------|-----|-----|-----|-----|-----|
| Calorías quemadas | 140 | 120 | 180 | 200 | 160 |

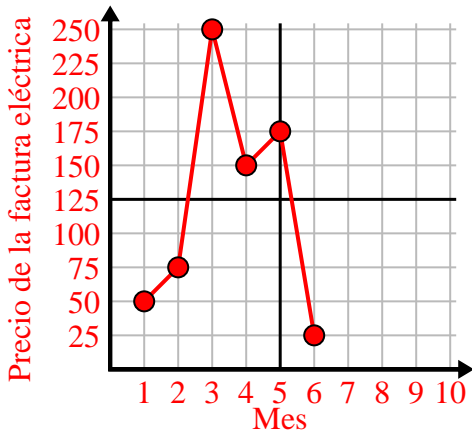




Complete la cuadrícula utilizando la gráfica.

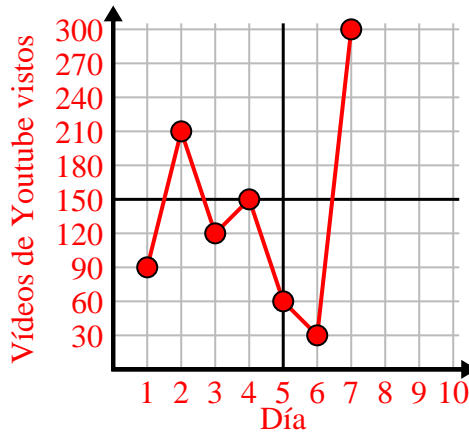
1)

| Mes | 1 | 2 | 3 | 4 | 5 | 6 |
|--------------------------------|----|----|-----|-----|-----|----|
| Precio de la factura eléctrica | 50 | 75 | 250 | 150 | 175 | 25 |



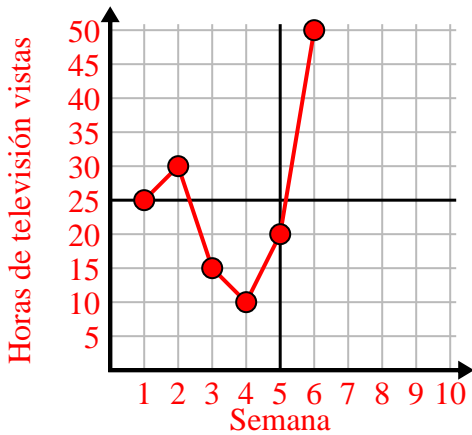
2)

| Día | 1 | 2 | 3 | 4 | 5 | 6 | 7 |
|--------------------------|----|-----|-----|-----|----|----|-----|
| Videos de Youtube vistos | 90 | 210 | 120 | 150 | 60 | 30 | 300 |



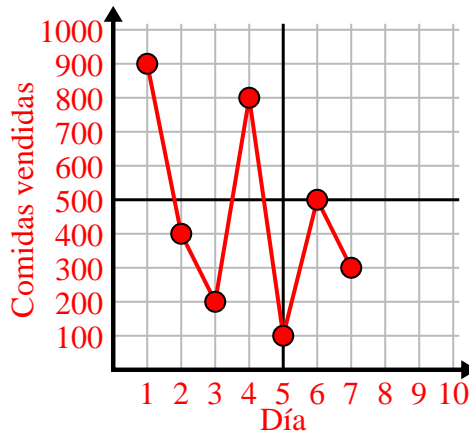
3)

| Semana | 1 | 2 | 3 | 4 | 5 | 6 |
|----------------------------|----|----|----|----|----|----|
| Horas de televisión vistas | 25 | 30 | 15 | 10 | 20 | 50 |



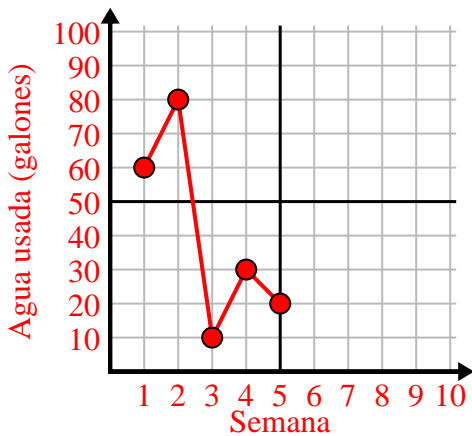
4)

| Día | 1 | 2 | 3 | 4 | 5 | 6 | 7 |
|------------------|-----|-----|-----|-----|-----|-----|-----|
| Comidas vendidas | 900 | 400 | 200 | 800 | 100 | 500 | 300 |



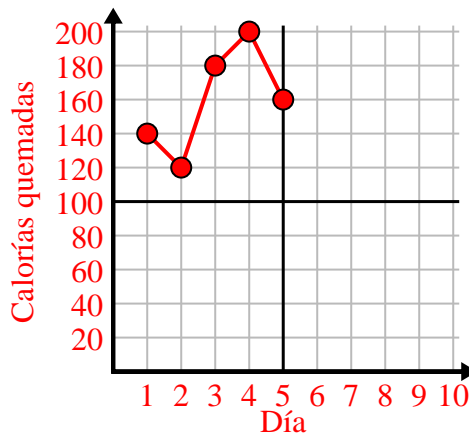
5)

| Semana | 1 | 2 | 3 | 4 | 5 |
|----------------------|----|----|----|----|----|
| Agua usada (galones) | 60 | 80 | 10 | 30 | 20 |



6)

| Día | 1 | 2 | 3 | 4 | 5 |
|-------------------|-----|-----|-----|-----|-----|
| Calorías quemadas | 140 | 120 | 180 | 200 | 160 |

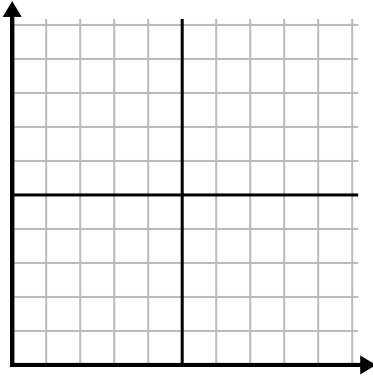




Complete la cuadrícula utilizando la gráfica.

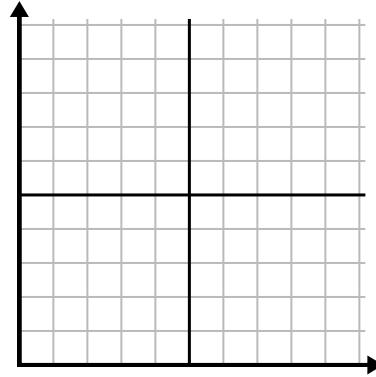
1)

| Semana | 1 | 2 | 3 | 4 | 5 | 6 | 7 |
|----------------------------|----|----|----|----|----|----|----|
| Horas de televisión vistas | 50 | 25 | 45 | 10 | 15 | 30 | 35 |



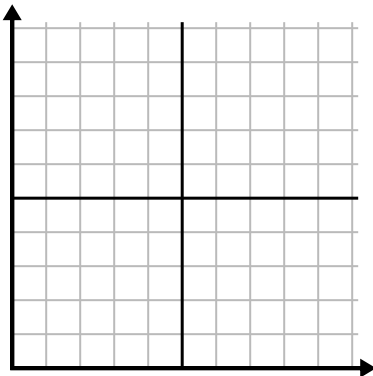
2)

| Día | 1 | 2 | 3 | 4 | 5 | 6 |
|-------------------|----|---|----|----|----|----|
| Mensajes enviados | 20 | 5 | 50 | 30 | 10 | 15 |



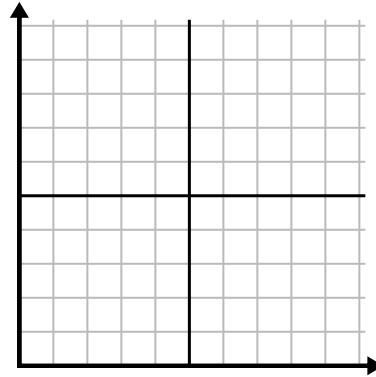
3)

| Día | 1 | 2 | 3 | 4 | 5 | 6 |
|--------------------------|-----|-----|----|-----|-----|-----|
| Vídeos de Youtube vistos | 300 | 240 | 60 | 210 | 180 | 270 |



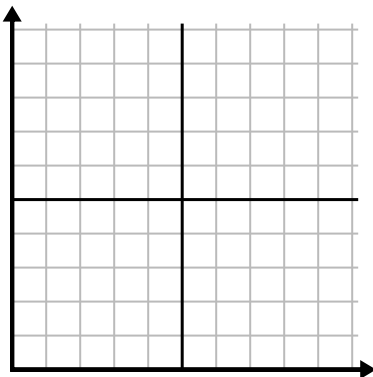
4)

| Día | 1 | 2 | 3 | 4 | 5 |
|----------------|---|---|---|----|---|
| Dinero gastado | 5 | 6 | 7 | 10 | 3 |



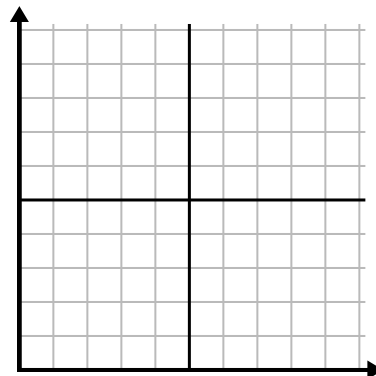
5)

| Hora | 1 | 2 | 3 | 4 | 5 | 6 | 7 |
|------------------|---|---|---|----|---|---|---|
| Cantidad vendida | 8 | 1 | 6 | 10 | 3 | 7 | 4 |



6)

| Mes | 1 | 2 | 3 | 4 | 5 |
|--------------------------------|-----|-----|-----|----|----|
| Precio de la factura eléctrica | 125 | 200 | 150 | 25 | 75 |

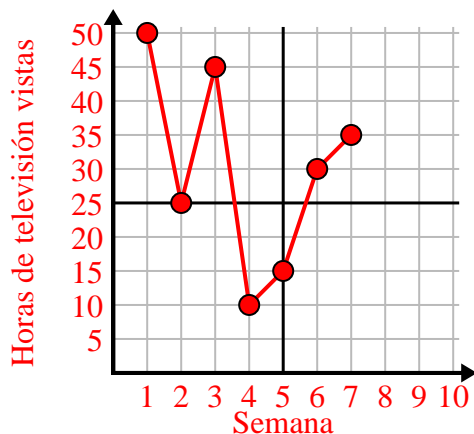




Complete la cuadrícula utilizando la gráfica.

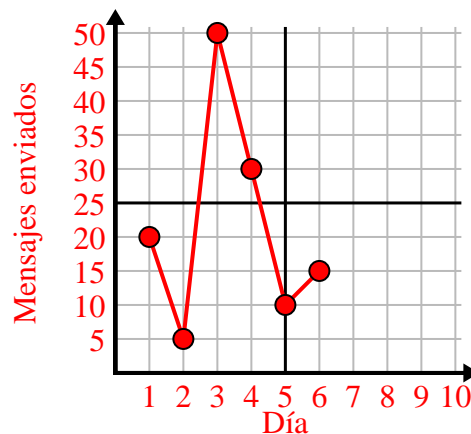
1)

| Semana | 1 | 2 | 3 | 4 | 5 | 6 | 7 |
|----------------------------|----|----|----|----|----|----|----|
| Horas de televisión vistas | 50 | 25 | 45 | 10 | 15 | 30 | 35 |



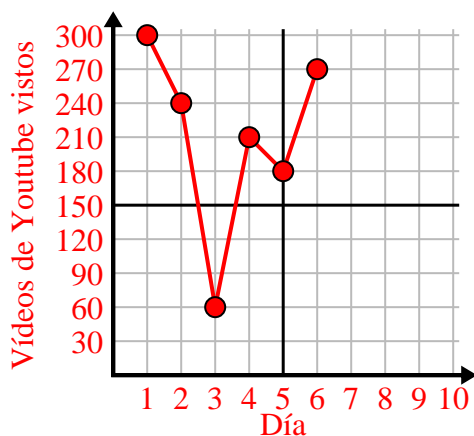
2)

| Día | 1 | 2 | 3 | 4 | 5 | 6 |
|-------------------|----|---|----|----|----|----|
| Mensajes enviados | 20 | 5 | 50 | 30 | 10 | 15 |



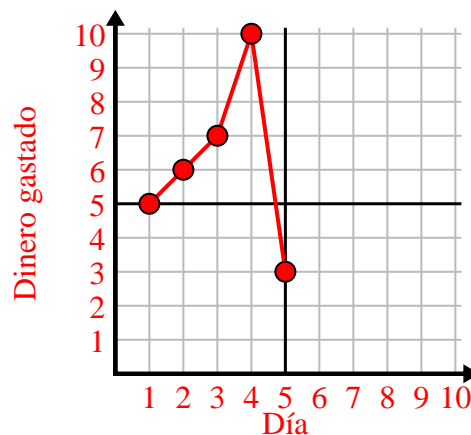
3)

| Día | 1 | 2 | 3 | 4 | 5 | 6 |
|--------------------------|-----|-----|----|-----|-----|-----|
| Vídeos de Youtube vistos | 300 | 240 | 60 | 210 | 180 | 270 |



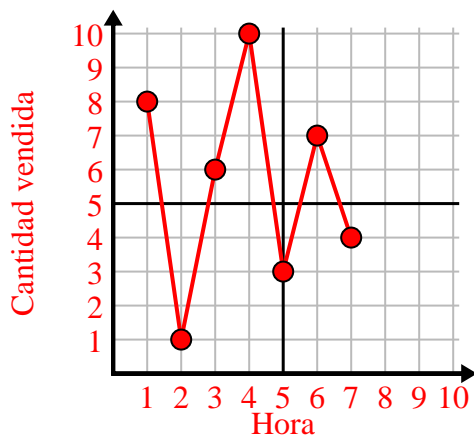
4)

| Día | 1 | 2 | 3 | 4 | 5 |
|----------------|---|---|---|----|---|
| Dinero gastado | 5 | 6 | 7 | 10 | 3 |



5)

| Hora | 1 | 2 | 3 | 4 | 5 | 6 | 7 |
|------------------|---|---|---|----|---|---|---|
| Cantidad vendida | 8 | 1 | 6 | 10 | 3 | 7 | 4 |



6)

| Mes | 1 | 2 | 3 | 4 | 5 |
|--------------------------------|-----|-----|-----|----|----|
| Precio de la factura eléctrica | 125 | 200 | 150 | 25 | 75 |

