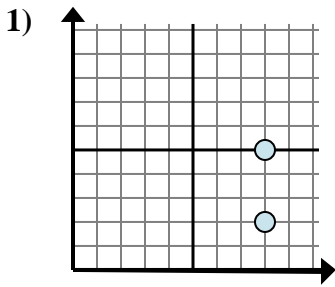


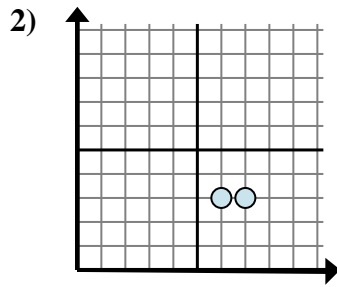


Determine qué expresión muestra mejor la distancia entre los dos puntos.

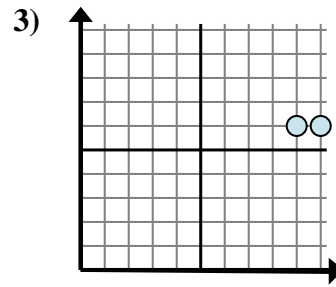
Respuestas



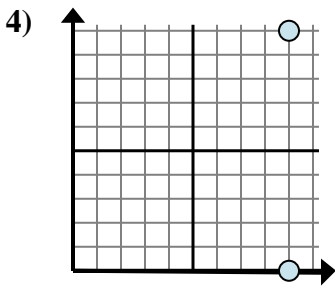
- A. $5 - 2$
- B. $5 - 8$
- C. $2 - 8$
- D. $8 - 2$



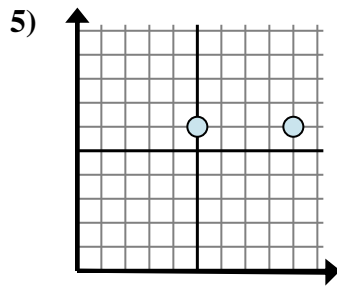
- A. $7 - 6$
- B. $3 - 3$
- C. $3 - 3$
- D. $3 - 7$



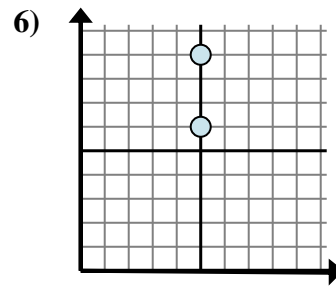
- A. $10 - 6$
- B. $6 - 6$
- C. $10 - 9$
- D. $6 - 6$



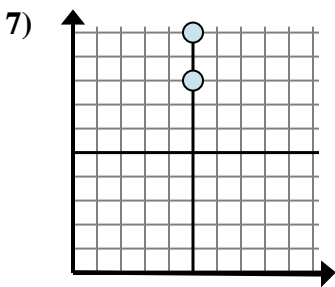
- A. $10 - 0$
- B. $9 - 10$
- C. $9 - 9$
- D. $10 - 9$



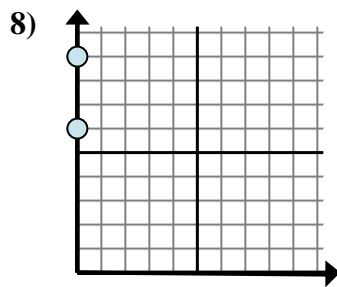
- A. $9 - 5$
- B. $9 - 6$
- C. $6 - 9$
- D. $5 - 9$



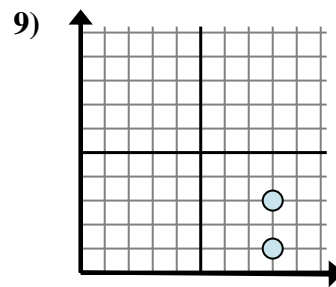
- A. $9 - 6$
- B. $5 - 9$
- C. $6 - 5$
- D. $6 - 9$



- A. $8 - 10$
- B. $10 - 8$
- C. $5 - 5$
- D. $8 - 5$



- A. $9 - 0$
- B. $0 - 0$
- C. $9 - 6$
- D. $0 - 9$

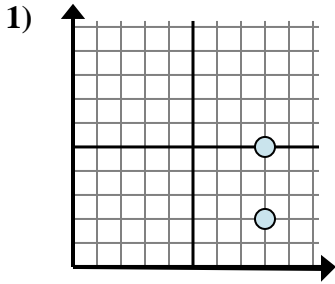


- A. $3 - 8$
- B. $1 - 3$
- C. $3 - 1$
- D. $8 - 3$

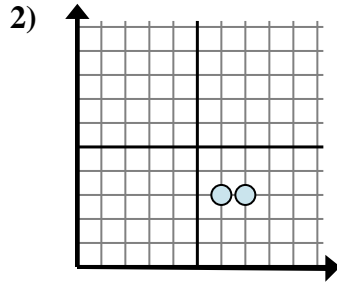
1. _____
2. _____
3. _____
4. _____
5. _____
6. _____
7. _____
8. _____
9. _____



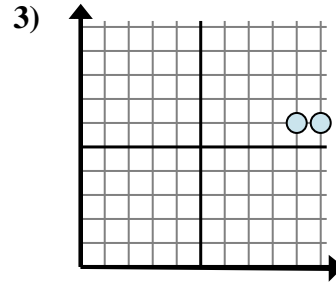
Determine qué expresión muestra mejor la distancia entre los dos puntos.



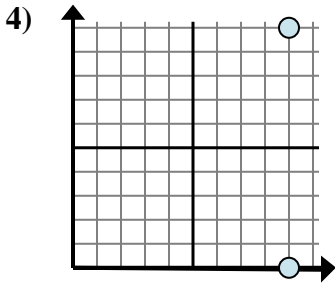
- A. $5 - 2$
- B. $5 - 8$
- C. $2 - 8$
- D. $8 - 2$



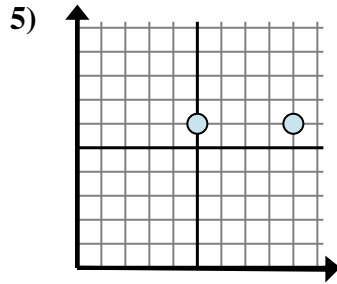
- A. $7 - 6$
- B. $3 - 3$
- C. $3 - 3$
- D. $3 - 7$



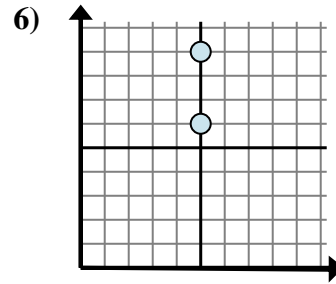
- A. $10 - 6$
- B. $6 - 6$
- C. $10 - 9$
- D. $6 - 6$



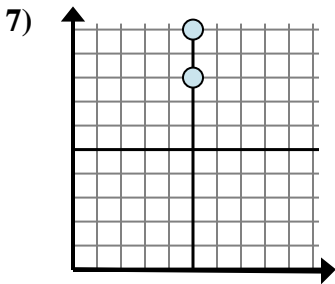
- A. $10 - 0$
- B. $9 - 10$
- C. $9 - 9$
- D. $10 - 9$



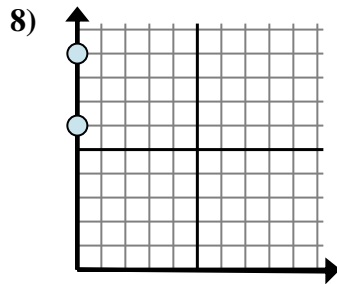
- A. $9 - 5$
- B. $9 - 6$
- C. $6 - 9$
- D. $5 - 9$



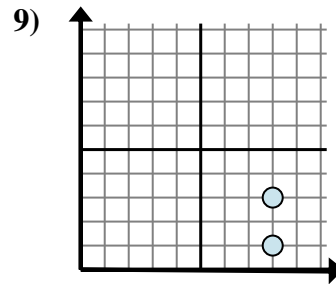
- A. $9 - 6$
- B. $5 - 9$
- C. $6 - 5$
- D. $6 - 9$



- A. $8 - 10$
- B. $10 - 8$
- C. $5 - 5$
- D. $8 - 5$



- A. $9 - 0$
- B. $0 - 0$
- C. $9 - 6$
- D. $0 - 9$



- A. $3 - 8$
- B. $1 - 3$
- C. $3 - 1$
- D. $8 - 3$

Respuestas

- 1. **A**
- 2. **A**
- 3. **C**
- 4. **A**
- 5. **A**
- 6. **A**
- 7. **B**
- 8. **C**
- 9. **C**