





Medir el ancho y alto de cada bloque en pulgadas y en centímetros

Ej)



1)




2)



3)



4)



Respuestas

Ej. 1 1 1/2 2.5 3.8

1. _____

2. _____


3. _____

4. _____




Medir el ancho y alto de cada bloque en pulgadas y en centímetros


Ej)



1)




2)



3)



4)



Respuestas

Ej. 1 1 1/2 2.5 3.8

1. 1 1/2 1 1/2 3.8 3.8

2. 5 1 12.7 2.5

3. 5 1/2 0 1/2 14 1.3

4. 0 1/2 1 1/2 1.3 3.8