





Usar la matriz proporcionada para resolver cada problema.


1) $52 \times 45 =$




2) $48 \times 32 =$




3) $32 \times 18 =$




4) $39 \times 13 =$



5) $35 \times 44 =$



6) $37 \times 27 =$



Respuestas

1. _____

2. _____

3. _____

4. _____

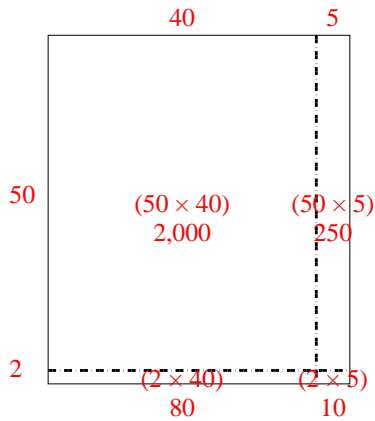
5. _____

6. _____

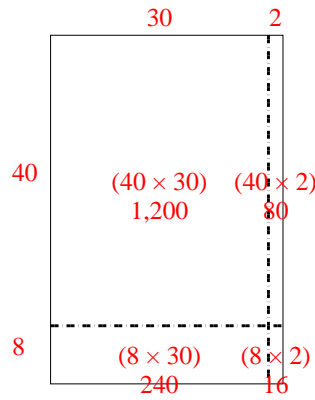


Usar la matriz proporcionada para resolver cada problema.

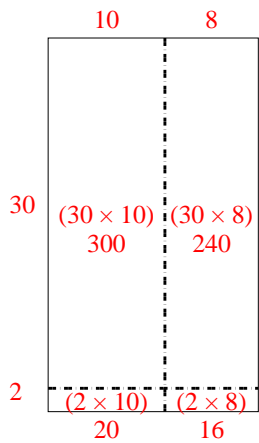
1) $52 \times 45 =$



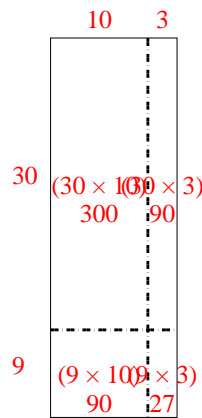
2) $48 \times 32 =$



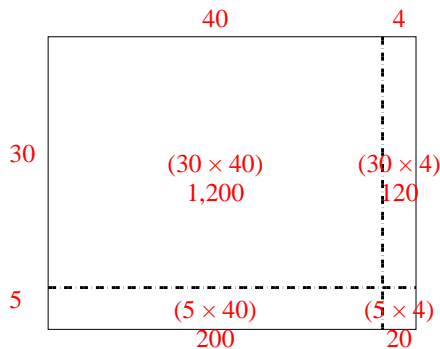
3) $32 \times 18 =$



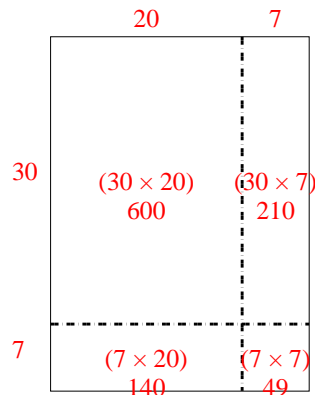
4) $39 \times 13 =$



5) $35 \times 44 =$



6) $37 \times 27 =$



Respuestas

1. **2,340**

2. **1,536**

3. **576**

4. **507**

5. **1,540**

6. **999**