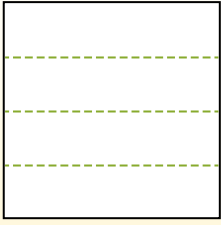


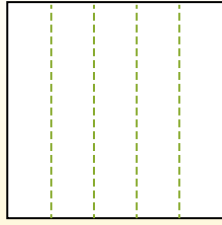


Dividir la forma que se muestra y después cuenta para encontrar el número de cajas.

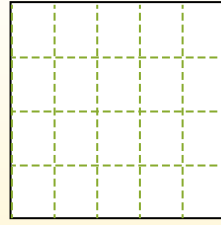
Las filas van de izquierda a derecha.




Las columnas van de arriba a abajo.




Aqui tem 4 linhas e 5 colunas .
Existem 20 caixas no total.




1) 3 filas
3 columnas




2) 5 filas
4 columnas




3) 5 filas
5 columnas




4) 2 filas
3 columnas




5) 2 filas
2 columnas




6) 4 filas
3 columnas




7) 3 filas
4 columnas



8) 3 filas
2 columnas



9) 2 filas
4 columnas



Respuestas

- 1. _____
- 2. _____
- 3. _____
- 4. _____
- 5. _____
- 6. _____
- 7. _____
- 8. _____
- 9. _____

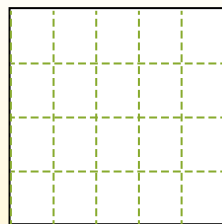
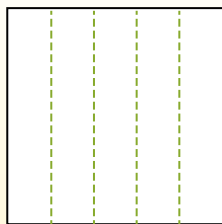
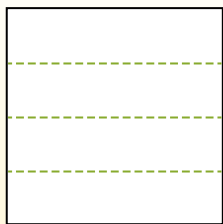


Dividir la forma que se muestra y después cuenta para encontrar el número de cajas.

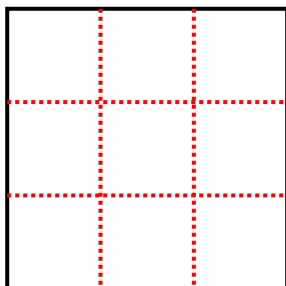
Las filas van de izquierda a derecha.

Las columnas van de arriba a abajo.

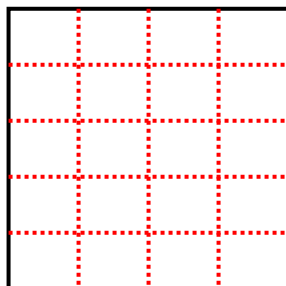
Aqui tem 4 linhas e 5 colunas .
Existem 20 caixas no total.



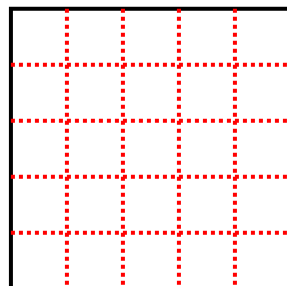
1) 3 filas
3 columnas



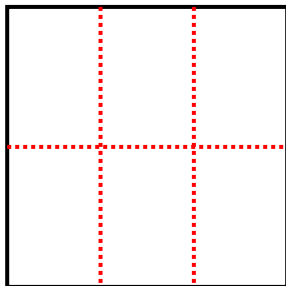
2) 5 filas
4 columnas



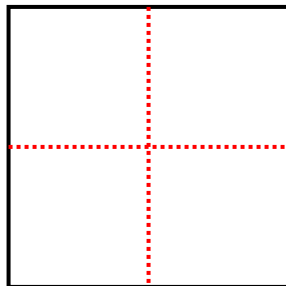
3) 5 filas
5 columnas



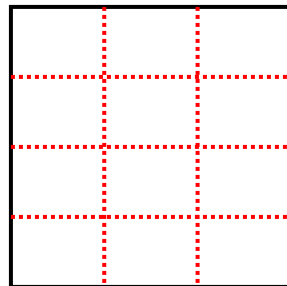
4) 2 filas
3 columnas



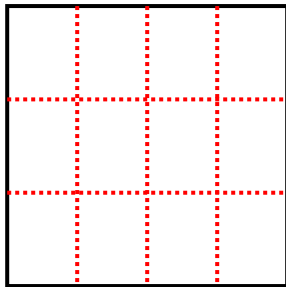
5) 2 filas
2 columnas



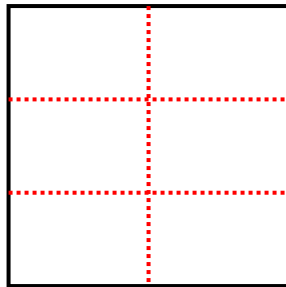
6) 4 filas
3 columnas



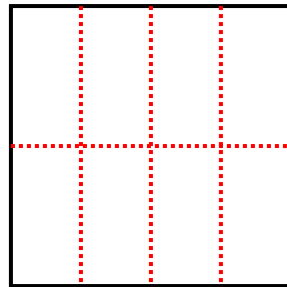
7) 3 filas
4 columnas



8) 3 filas
2 columnas



9) 2 filas
4 columnas



Respuestas

1. 9

2. 20

3. 25

4. 6

5. 4

6. 12

7. 12

8. 6

9. 8