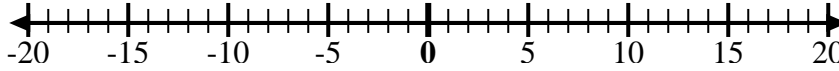


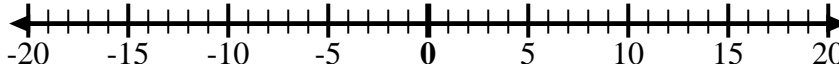


Utilice las rectas numéricas para mostrar cada expresión y resolver.

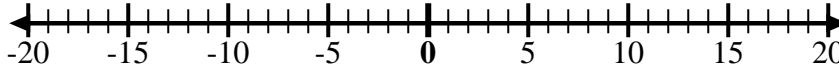
Ej) Empiece en -8
y agregue 18



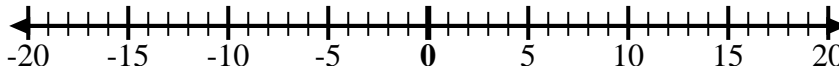
1) Empiece en -6
y agregue 3



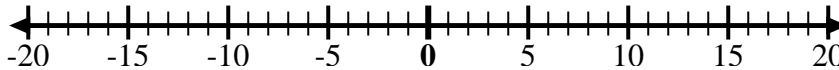
2) Empiece en -4
y agregue -6



3) Empiece en -1
y agregue -8



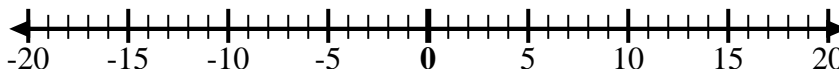
4) Empiece en -4
y agregue -3



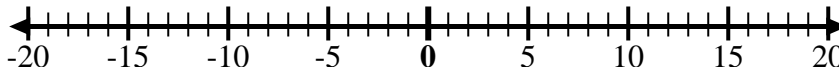
5) Empiece en 0
y agregue -10



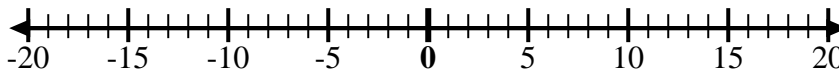
6) Empiece en -7
y agregue 12



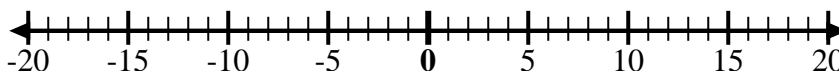
7) Empiece en 2
y agregue -10



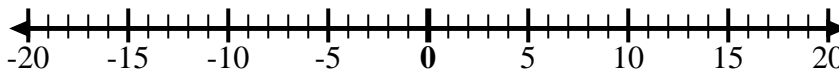
8) Empiece en -6
y agregue -2



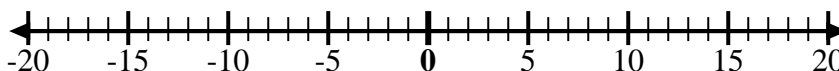
9) Empiece en 1
y agregue -10



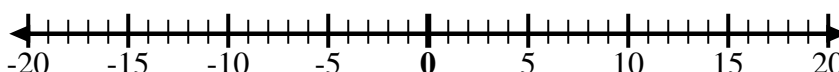
10) Empiece en 3
y agregue -10



11) Empiece en -4
y agregue -2



12) Empiece en
-10 y agregue
6



Respuestas

Ej. $-8 + 18 = 10$

1. _____

2. _____

3. _____

4. _____

5. _____

6. _____

7. _____

8. _____

9. _____

10. _____

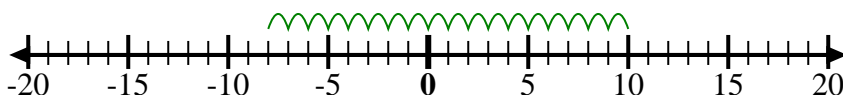
11. _____

12. _____

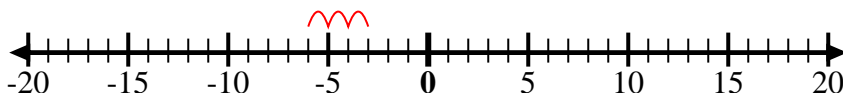


Utilice las rectas numéricas para mostrar cada expresión y resolver.

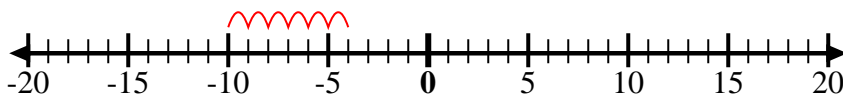
Ej) Empiece en -8
y agregue 18



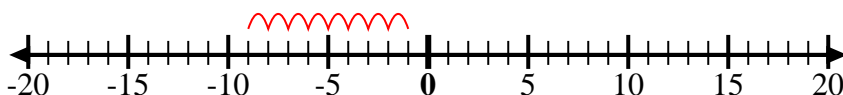
1) Empiece en -6
y agregue 3



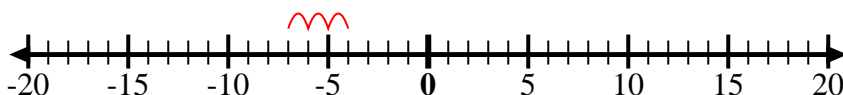
2) Empiece en -4
y agregue -6



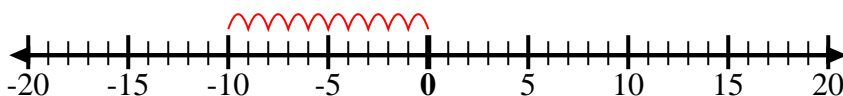
3) Empiece en -1
y agregue -8



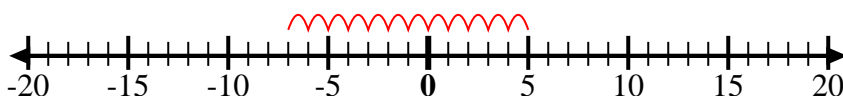
4) Empiece en -4
y agregue -3



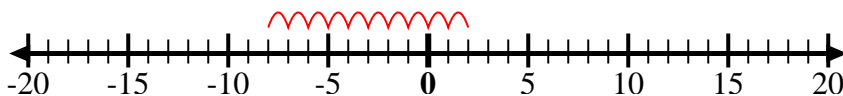
5) Empiece en 0
y agregue -10



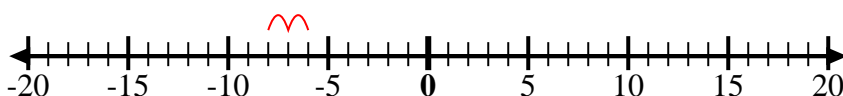
6) Empiece en -7
y agregue 12



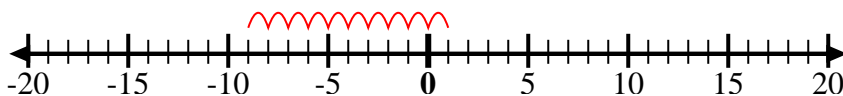
7) Empiece en 2
y agregue -10



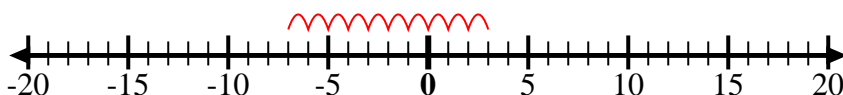
8) Empiece en -6
y agregue -2



9) Empiece en 1
y agregue -10



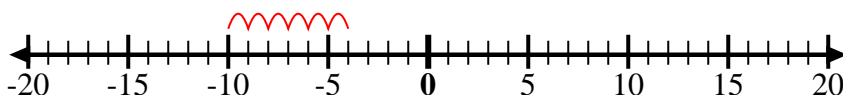
10) Empiece en 3
y agregue -10



11) Empiece en -4
y agregue -2



12) Empiece en
-10 y agregue
6



Respuestas

Ej. $-8 + 18 = 10$

1. $-6 + 3 = -3$

2. $-4 + -6 = -10$

3. $-1 + -8 = -9$

4. $-4 + -3 = -7$

5. $0 + -10 = -10$

6. $-7 + 12 = 5$

7. $2 + -10 = -8$

8. $-6 + -2 = -8$

9. $1 + -10 = -9$

10. $3 + -10 = -7$

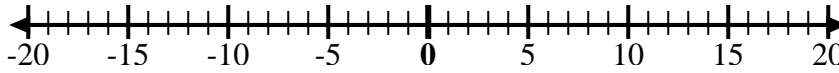
11. $-4 + -2 = -6$

12. $-10 + 6 = -4$

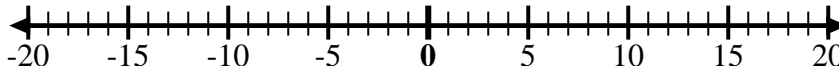


Utilice las rectas numéricas para mostrar cada expresión y resolver.

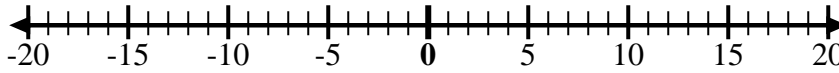
Ej) Empiece en 4 y agregue -8



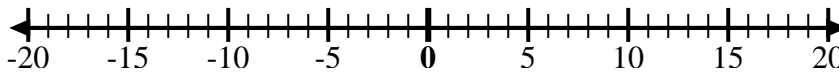
1) Empiece en -9 y agregue 5



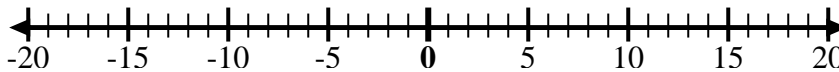
2) Empiece en -6 y agregue -4



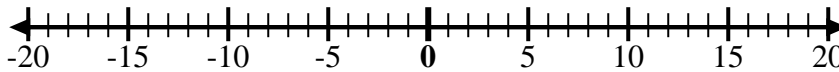
3) Empiece en -5 y agregue 4



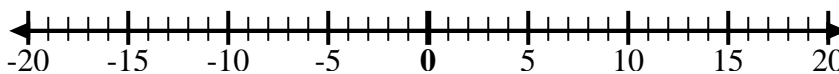
4) Empiece en -7 y agregue -2



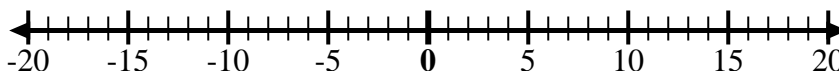
5) Empiece en 9 y agregue -12



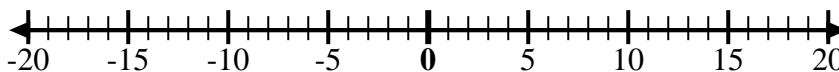
6) Empiece en 7 y agregue -3



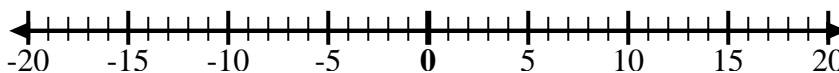
7) Empiece en 1 y agregue -11



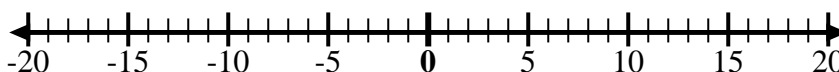
8) Empiece en -2 y agregue -3



9) Empiece en -3 y agregue -3



10) Empiece en -5 y agregue 2



11) Empiece en -10 y agregue 6



12) Empiece en -4 y agregue 8



Respuestas

Ej. $4 + -8 = -4$

1. _____

2. _____

3. _____

4. _____

5. _____

6. _____

7. _____

8. _____

9. _____

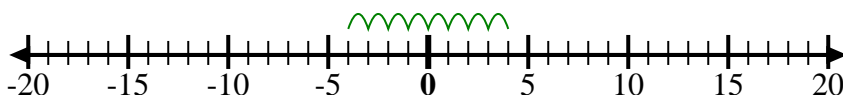
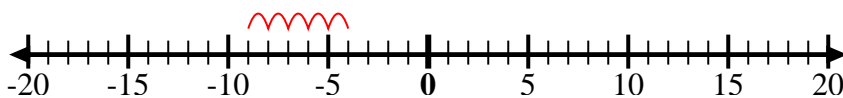
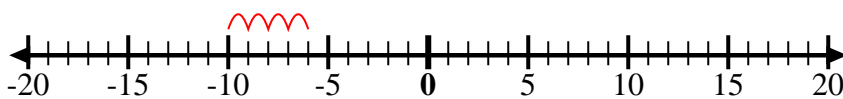
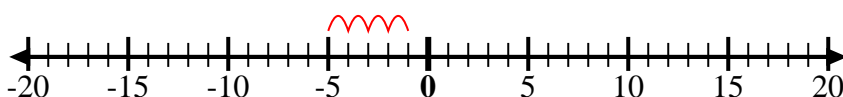
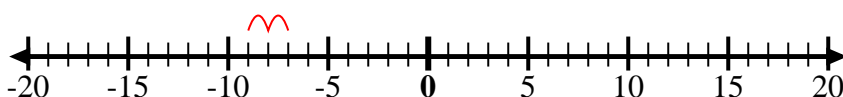
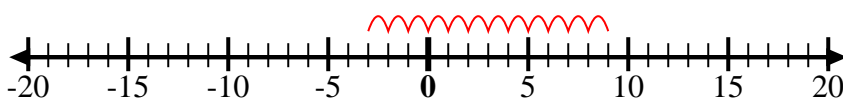
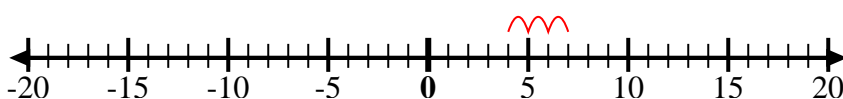
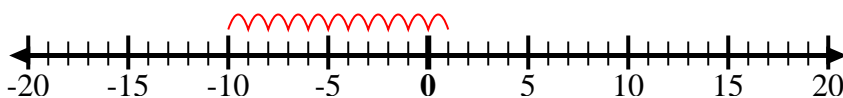
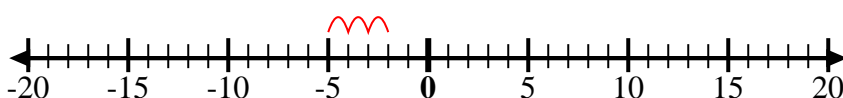
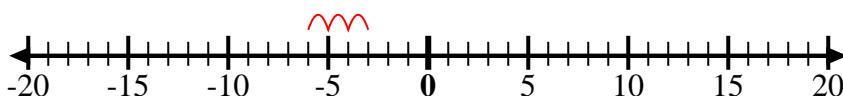
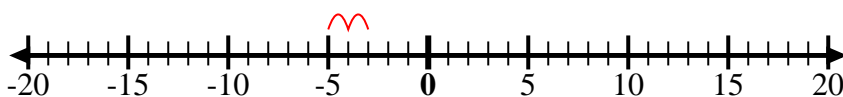
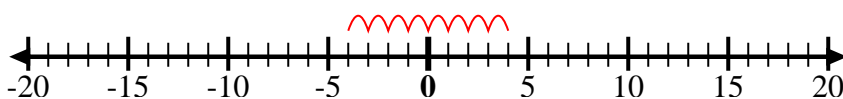
10. _____

11. _____

12. _____



Utilice las rectas numéricas para mostrar cada expresión y resolver.

Ej) Empiece en 4
y agregue -81) Empiece en -9
y agregue 52) Empiece en -6
y agregue -43) Empiece en -5
y agregue 44) Empiece en -7
y agregue -25) Empiece en 9
y agregue -126) Empiece en 7
y agregue -37) Empiece en 1
y agregue -118) Empiece en -2
y agregue -39) Empiece en -3
y agregue -310) Empiece en -5
y agregue 211) Empiece en
-10 y agregue
612) Empiece en -4
y agregue 8**Respuestas**

Ej. $4 + -8 = -4$

1. $-9 + 5 = -4$

2. $-6 + -4 = -10$

3. $-5 + 4 = -1$

4. $-7 + -2 = -9$

5. $9 + -12 = -3$

6. $7 + -3 = 4$

7. $1 + -11 = -10$

8. $-2 + -3 = -5$

9. $-3 + -3 = -6$

10. $-5 + 2 = -3$

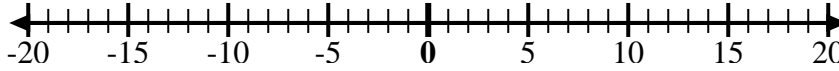
11. $-10 + 6 = -4$

12. $-4 + 8 = 4$

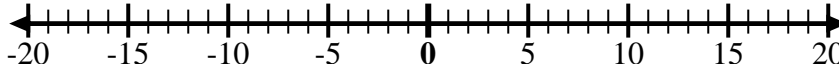


Utilice las rectas numéricas para mostrar cada expresión y resolver.

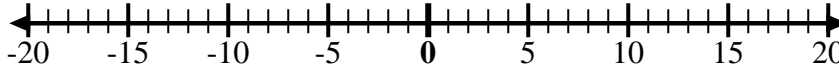
Ej) Empiece en -4
y agregue 8



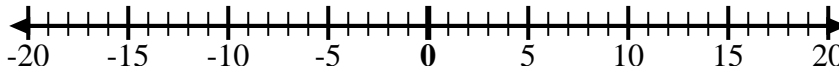
1) Empiece en -3
y agregue 10



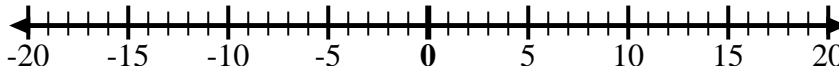
2) Empiece en 2
y agregue -12



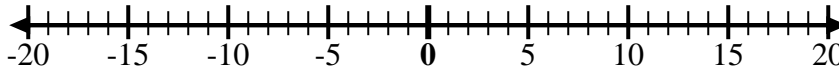
3) Empiece en -5
y agregue 3



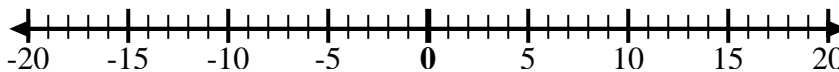
4) Empiece en -7
y agregue 5



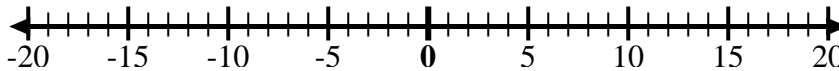
5) Empiece en -3
y agregue -3



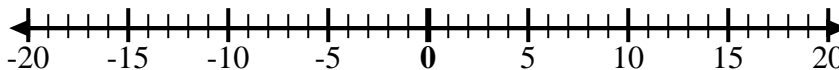
6) Empiece en -1
y agregue -9



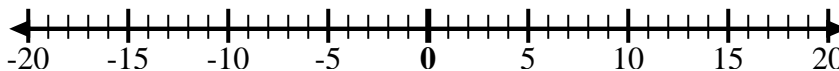
7) Empiece en 1
y agregue -10



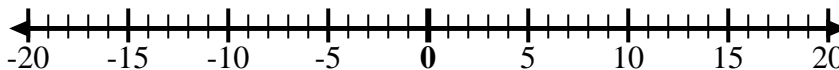
8) Empiece en -6
y agregue -2



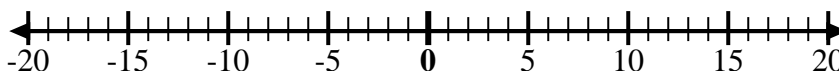
9) Empiece en -8
y agregue 10



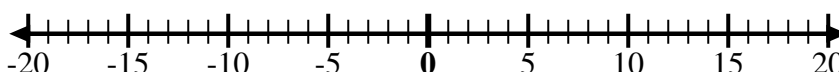
10) Empiece en 0
y agregue -10



11) Empiece en -8
y agregue -2



12) Empiece en 5
y agregue -13



Respuestas

Ej. $-4 + 8 = 4$

1. _____

2. _____

3. _____

4. _____

5. _____

6. _____

7. _____

8. _____

9. _____

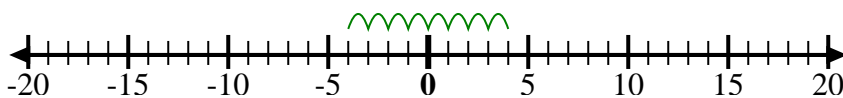
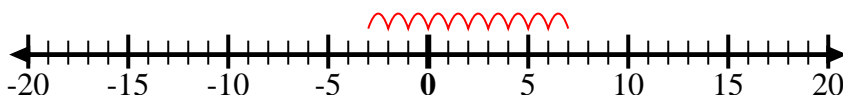
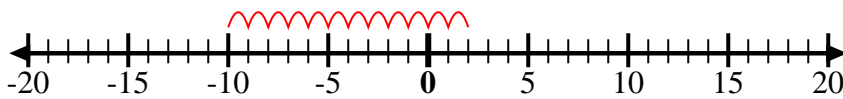
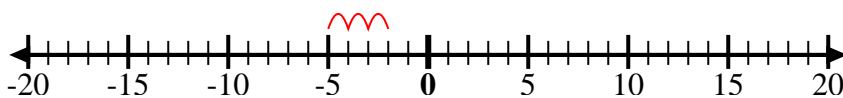
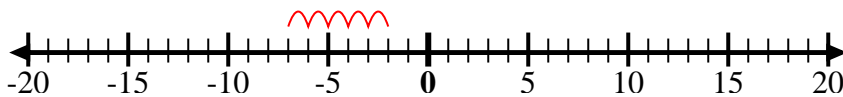
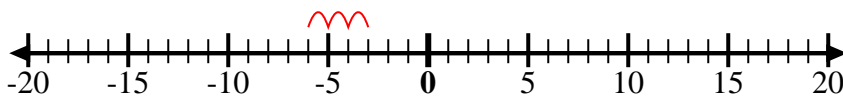
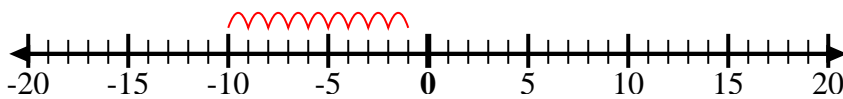
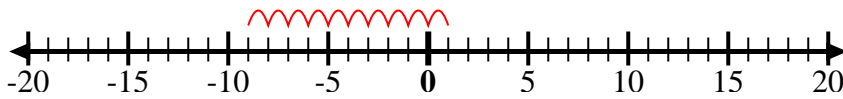
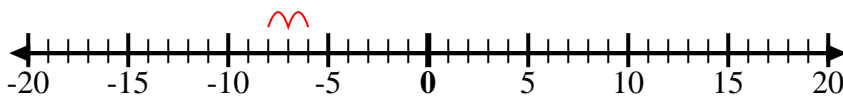
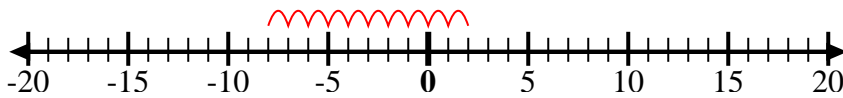
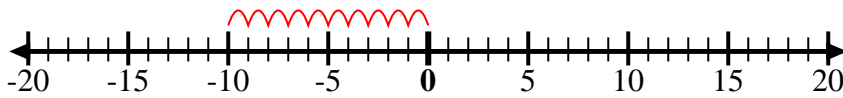
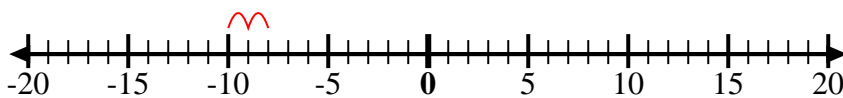
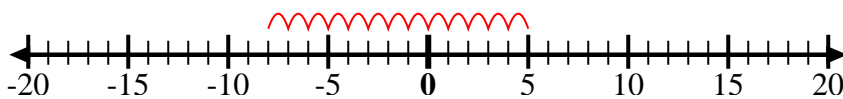
10. _____

11. _____

12. _____



Utilice las rectas numéricas para mostrar cada expresión y resolver.

Ej) Empiece en -4
y agregue 81) Empiece en -3
y agregue 102) Empiece en 2
y agregue -123) Empiece en -5
y agregue 34) Empiece en -7
y agregue 55) Empiece en -3
y agregue -36) Empiece en -1
y agregue -97) Empiece en 1
y agregue -108) Empiece en -6
y agregue -29) Empiece en -8
y agregue 1010) Empiece en 0
y agregue -1011) Empiece en -8
y agregue -212) Empiece en 5
y agregue -13**Respuestas**

Ej. $-4 + 8 = 4$

1. $-3 + 10 = 7$

2. $2 + -12 = -10$

3. $-5 + 3 = -2$

4. $-7 + 5 = -2$

5. $-3 + -3 = -6$

6. $-1 + -9 = -10$

7. $1 + -10 = -9$

8. $-6 + -2 = -8$

9. $-8 + 10 = 2$

10. $0 + -10 = -10$

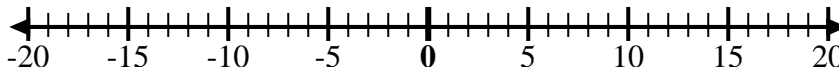
11. $-8 + -2 = -10$

12. $5 + -13 = -8$

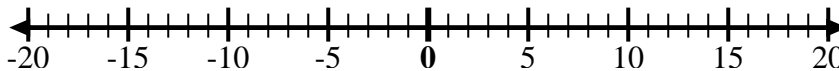


Utilice las rectas numéricas para mostrar cada expresión y resolver.

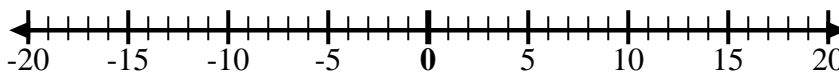
Ej) Empiece en -2
y agregue -8



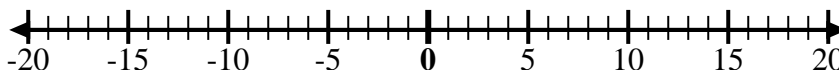
1) Empiece en 8
y agregue -18



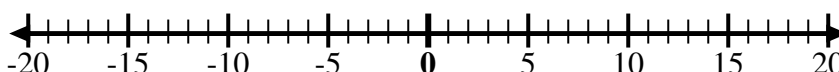
2) Empiece en 4
y agregue -11



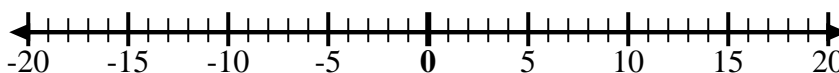
3) Empiece en -5
y agregue -5



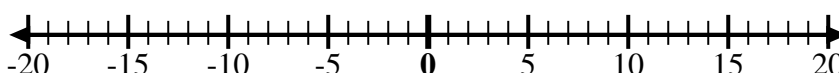
4) Empiece en -8
y agregue 5



5) Empiece en -6
y agregue 3



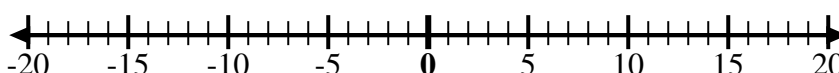
6) Empiece en -1
y agregue -7



7) Empiece en -2
y agregue -6



8) Empiece en -3
y agregue 12



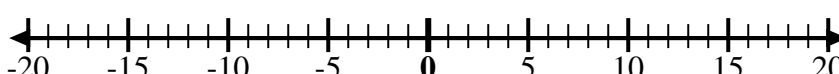
9) Empiece en -1
y agregue 11



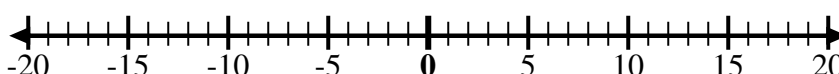
10) Empiece en 2
y agregue -9



11) Empiece en -3
y agregue 13



12) Empiece en
10 y agregue
-12



Respuestas

Ej. $-2 + -8 = -10$

1. _____

2. _____

3. _____

4. _____

5. _____

6. _____

7. _____

8. _____

9. _____

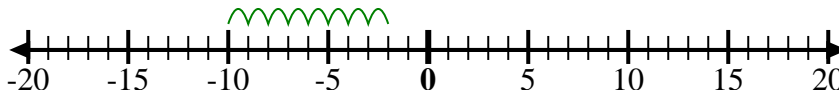
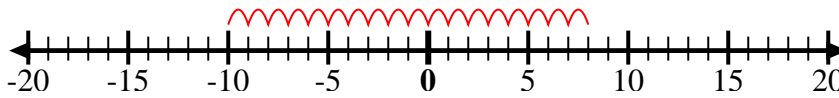
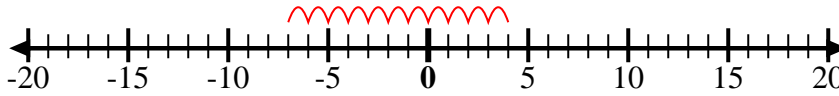
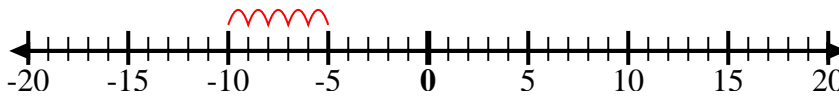
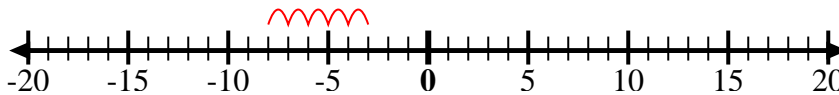
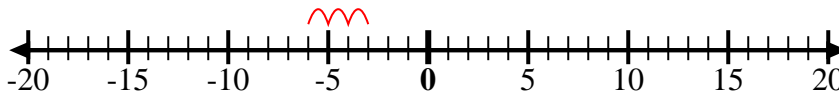
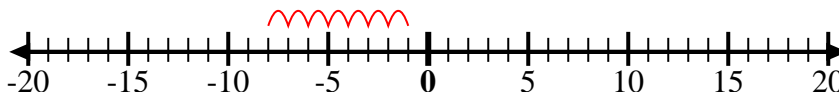
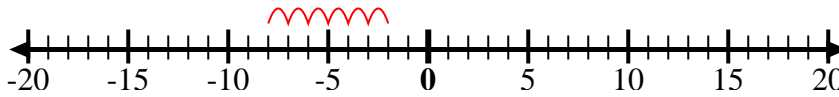
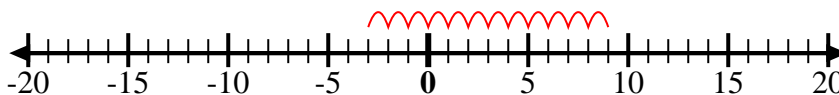
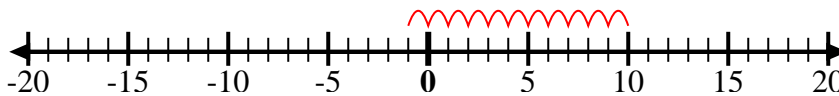
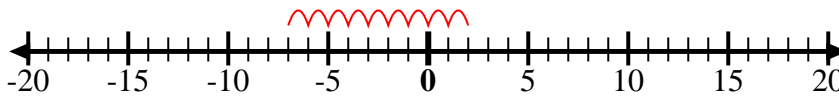
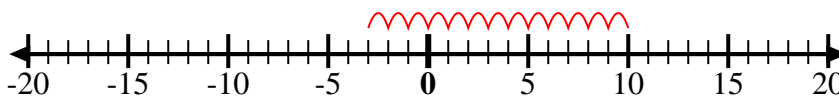
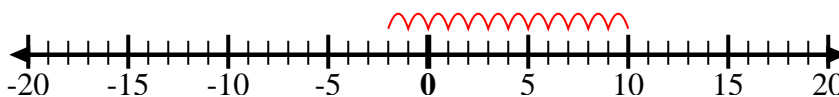
10. _____

11. _____

12. _____



Utilice las rectas numéricas para mostrar cada expresión y resolver.

Ej) Empiece en -2
y agregue -81) Empiece en 8
y agregue -182) Empiece en 4
y agregue -113) Empiece en -5
y agregue -54) Empiece en -8
y agregue 55) Empiece en -6
y agregue 36) Empiece en -1
y agregue -77) Empiece en -2
y agregue -68) Empiece en -3
y agregue 129) Empiece en -1
y agregue 1110) Empiece en 2
y agregue -911) Empiece en -3
y agregue 1312) Empiece en
10 y agregue
-12**Respuestas**

Ej. $-2 + -8 = -10$

1. $8 + -18 = -10$

2. $4 + -11 = -7$

3. $-5 + -5 = -10$

4. $-8 + 5 = -3$

5. $-6 + 3 = -3$

6. $-1 + -7 = -8$

7. $-2 + -6 = -8$

8. $-3 + 12 = 9$

9. $-1 + 11 = 10$

10. $2 + -9 = -7$

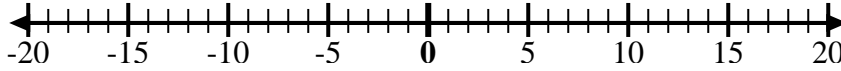
11. $-3 + 13 = 10$

12. $10 + -12 = -2$

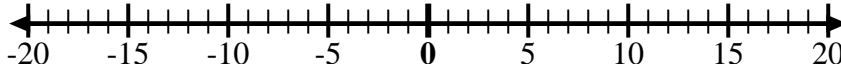


Utilice las rectas numéricas para mostrar cada expresión y resolver.

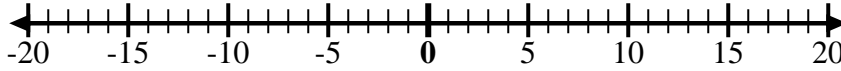
Ej) Empiece en 0
y agregue -2



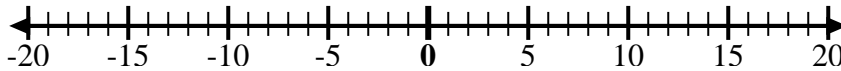
1) Empiece en 0
y agregue -5



2) Empiece en 0
y agregue 7



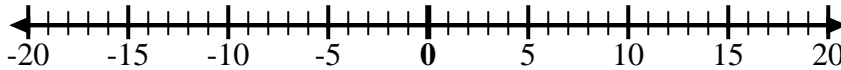
3) Empiece en -6
y agregue 12



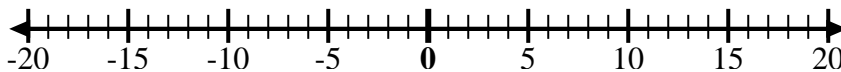
4) Empiece en -2
y agregue -2



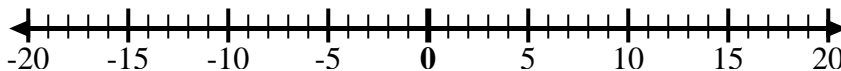
5) Empiece en 2
y agregue -8



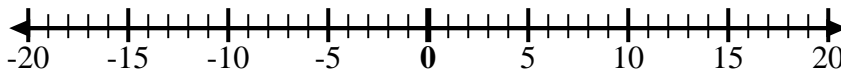
6) Empiece en 3
y agregue -11



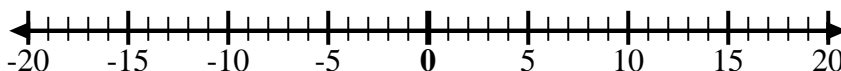
7) Empiece en -7
y agregue 16



8) Empiece en -9
y agregue 7



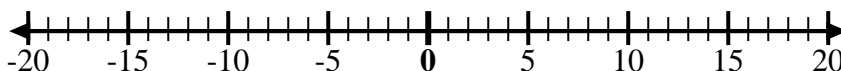
9) Empiece en -8
y agregue 3



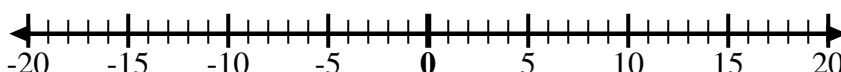
10) Empiece en 5
y agregue -15



11) Empiece en -8
y agregue 4



12) Empiece en 5
y agregue -6



Respuestas

Ej. $0 + -2 = -2$

1. _____

2. _____

3. _____

4. _____

5. _____

6. _____

7. _____

8. _____

9. _____

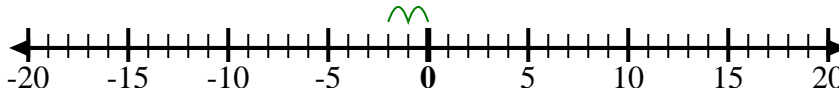
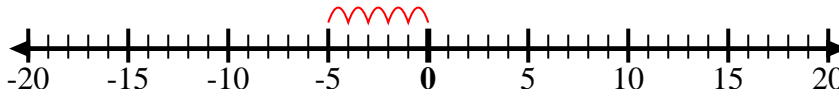
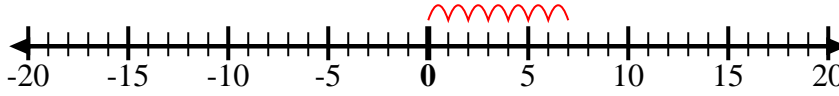
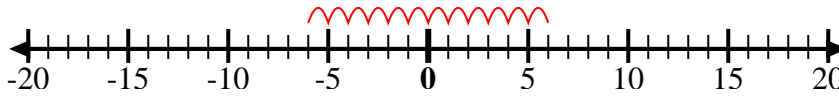
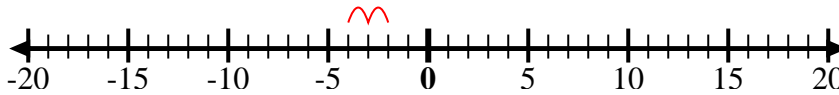
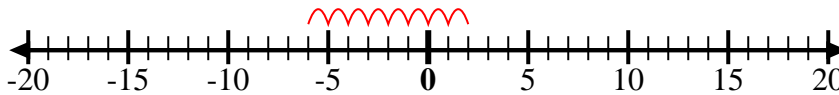
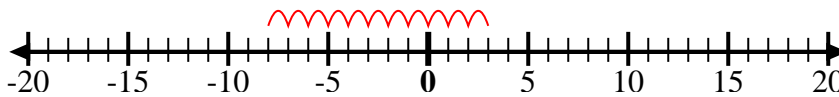
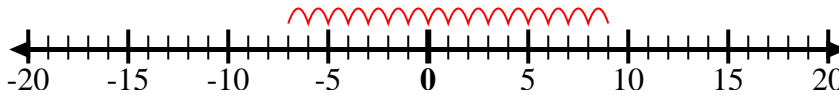
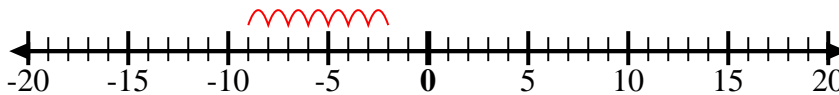
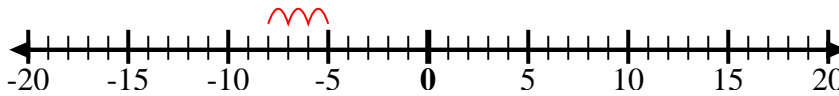
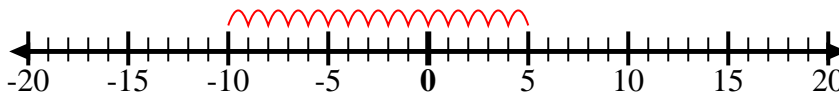
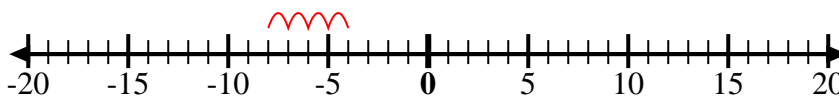
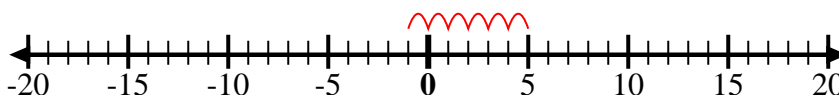
10. _____

11. _____

12. _____



Utilice las rectas numéricas para mostrar cada expresión y resolver.

Ej) Empiece en 0
y agregue -21) Empiece en 0
y agregue -52) Empiece en 0
y agregue 73) Empiece en -6
y agregue 124) Empiece en -2
y agregue -25) Empiece en 2
y agregue -86) Empiece en 3
y agregue -117) Empiece en -7
y agregue 168) Empiece en -9
y agregue 79) Empiece en -8
y agregue 310) Empiece en 5
y agregue -1511) Empiece en -8
y agregue 412) Empiece en 5
y agregue -6**Respuestas**

Ej. $0 + -2 = -2$

1. $0 + -5 = -5$

2. $0 + 7 = 7$

3. $-6 + 12 = 6$

4. $-2 + -2 = -4$

5. $2 + -8 = -6$

6. $3 + -11 = -8$

7. $-7 + 16 = 9$

8. $-9 + 7 = -2$

9. $-8 + 3 = -5$

10. $5 + -15 = -10$

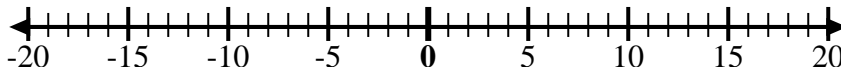
11. $-8 + 4 = -4$

12. $5 + -6 = -1$



Utilice las rectas numéricas para mostrar cada expresión y resolver.

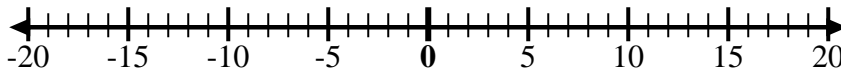
Ej) Empiece en -6
y agregue 15



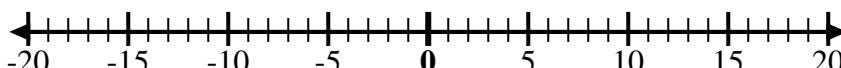
1) Empiece en -3
y agregue -3



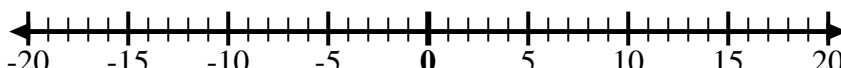
2) Empiece en 10
y agregue 0



3) Empiece en -1
y agregue 10



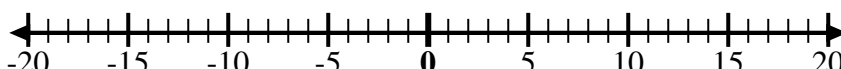
4) Empiece en 2
y agregue -11



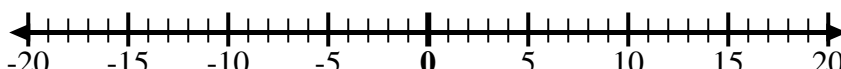
5) Empiece en 3
y agregue -12



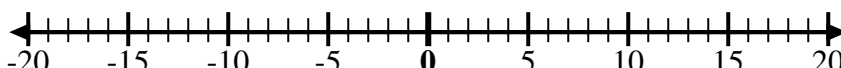
6) Empiece en -8
y agregue 7



7) Empiece en 0
y agregue -5



8) Empiece en -6
y agregue -2



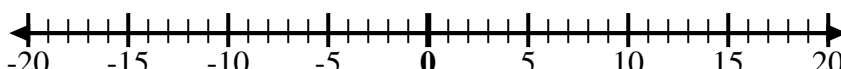
9) Empiece en 9
y agregue -15



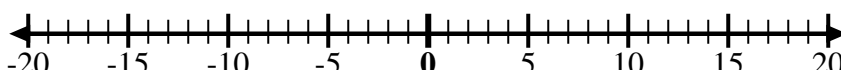
10) Empiece en 4
y agregue -9



11) Empiece en 1
y agregue -10



12) Empiece en -5
y agregue -3



Respuestas

Ej. $-6 + 15 = 9$

1. _____

2. _____

3. _____

4. _____

5. _____

6. _____

7. _____

8. _____

9. _____

10. _____

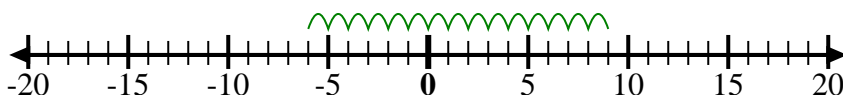
11. _____

12. _____

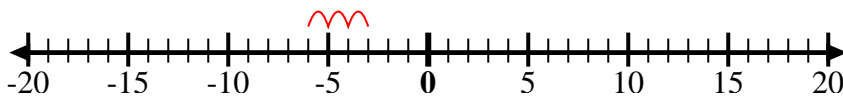


Utilice las rectas numéricas para mostrar cada expresión y resolver.

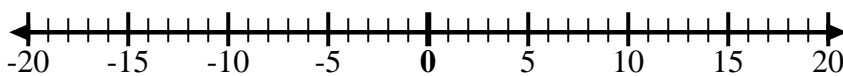
Ej) Empiece en -6
y agregue 15



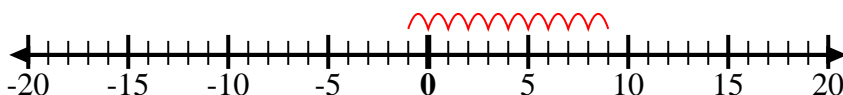
1) Empiece en -3
y agregue -3



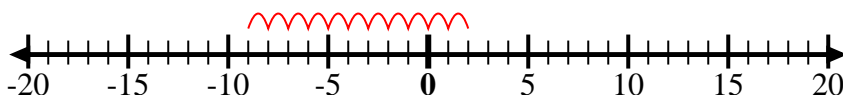
2) Empiece en 10
y agregue 0



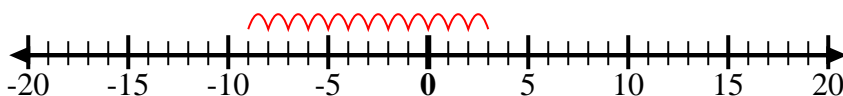
3) Empiece en -1
y agregue 10



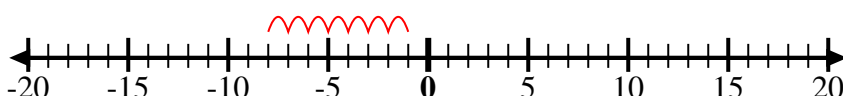
4) Empiece en 2
y agregue -11



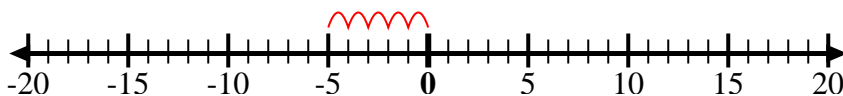
5) Empiece en 3
y agregue -12



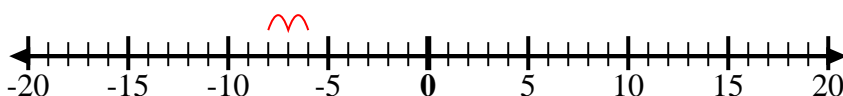
6) Empiece en -8
y agregue 7



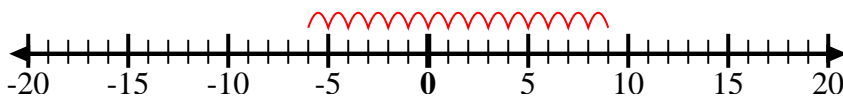
7) Empiece en 0
y agregue -5



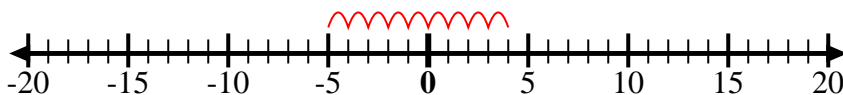
8) Empiece en -6
y agregue -2



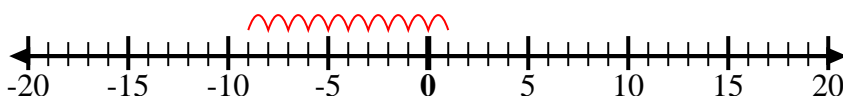
9) Empiece en 9
y agregue -15



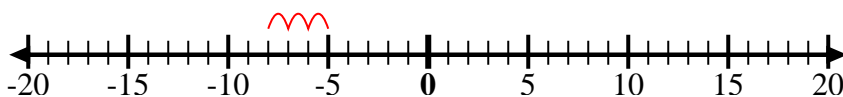
10) Empiece en 4
y agregue -9



11) Empiece en 1
y agregue -10



12) Empiece en -5
y agregue -3



Respuestas

Ej. $-6 + 15 = 9$

1. $-3 + -3 = -6$

2. $10 + 0 = 10$

3. $-1 + 10 = 9$

4. $2 + -11 = -9$

5. $3 + -12 = -9$

6. $-8 + 7 = -1$

7. $0 + -5 = -5$

8. $-6 + -2 = -8$

9. $9 + -15 = -6$

10. $4 + -9 = -5$

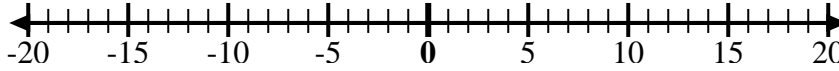
11. $1 + -10 = -9$

12. $-5 + -3 = -8$

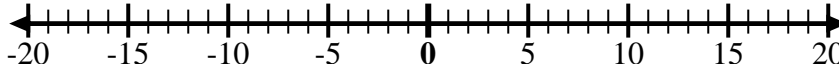


Utilice las rectas numéricas para mostrar cada expresión y resolver.

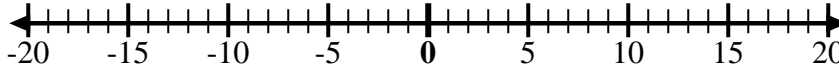
Ej) Empiece en 9
y agregue -4



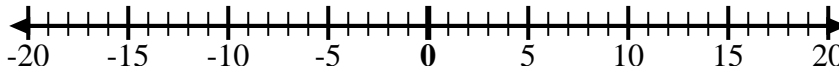
1) Empiece en 5
y agregue -11



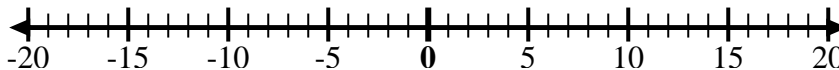
2) Empiece en 2
y agregue -8



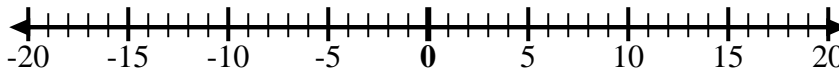
3) Empiece en -5
y agregue -4



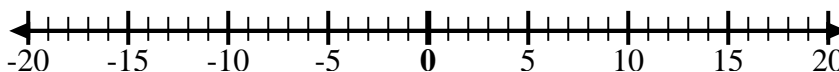
4) Empiece en 0
y agregue 8



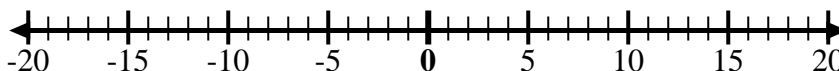
5) Empiece en 5
y agregue -8



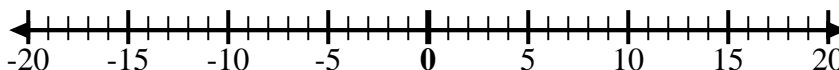
6) Empiece en -7
y agregue 15



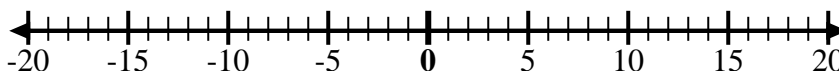
7) Empiece en -9
y agregue 8



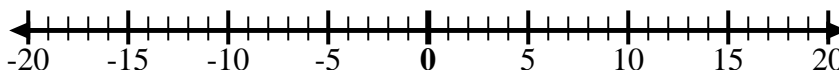
8) Empiece en -2
y agregue -6



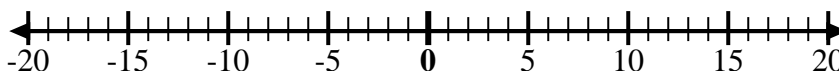
9) Empiece en -5
y agregue 5



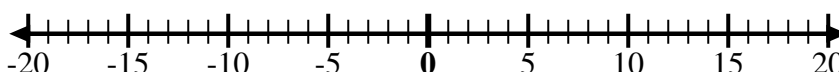
10) Empiece en -1
y agregue -8



11) Empiece en -1
y agregue 7



12) Empiece en
-10 y agregue
14



Respuestas

Ej. $9 + -4 = 5$

1. _____

2. _____

3. _____

4. _____

5. _____

6. _____

7. _____

8. _____

9. _____

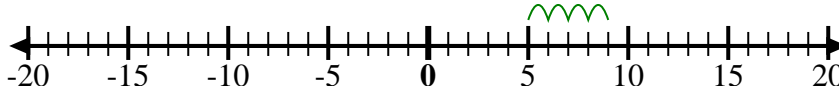
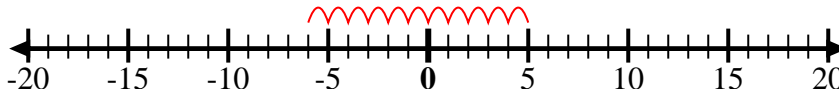
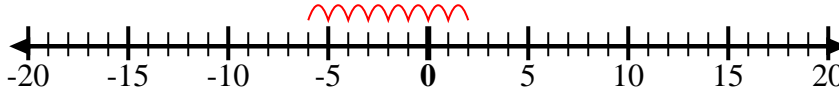
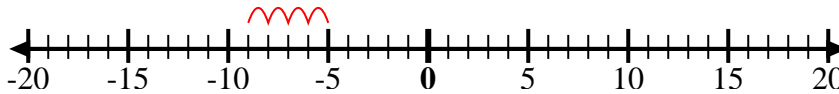
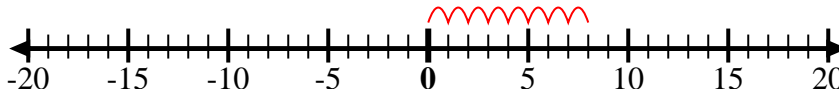
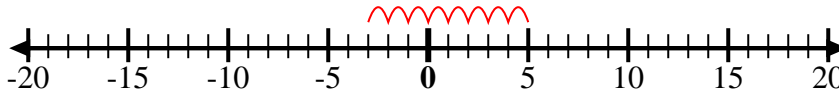
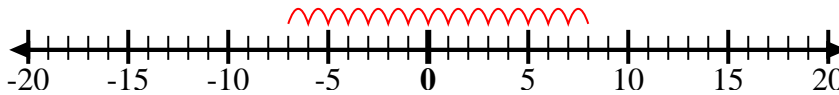
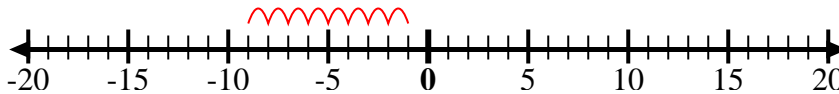
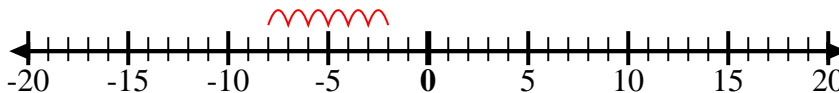
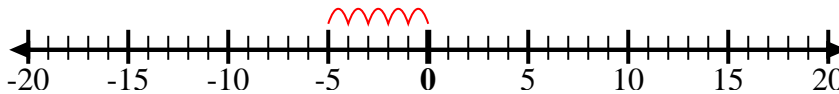
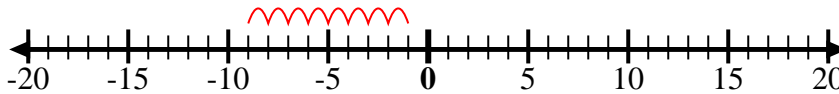
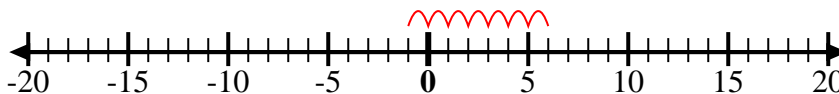
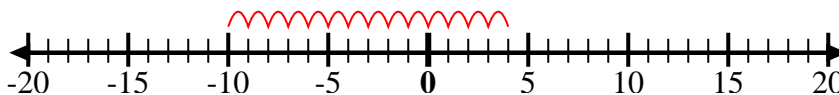
10. _____

11. _____

12. _____



Utilice las rectas numéricas para mostrar cada expresión y resolver.

Ej) Empiece en 9
y agregue -41) Empiece en 5
y agregue -112) Empiece en 2
y agregue -83) Empiece en -5
y agregue -44) Empiece en 0
y agregue 85) Empiece en 5
y agregue -86) Empiece en -7
y agregue 157) Empiece en -9
y agregue 88) Empiece en -2
y agregue -69) Empiece en -5
y agregue 510) Empiece en -1
y agregue -811) Empiece en -1
y agregue 712) Empiece en
-10 y agregue
14**Respuestas**

Ej. $9 + -4 = 5$

1. $5 + -11 = -6$

2. $2 + -8 = -6$

3. $-5 + -4 = -9$

4. $0 + 8 = 8$

5. $5 + -8 = -3$

6. $-7 + 15 = 8$

7. $-9 + 8 = -1$

8. $-2 + -6 = -8$

9. $-5 + 5 = 0$

10. $-1 + -8 = -9$

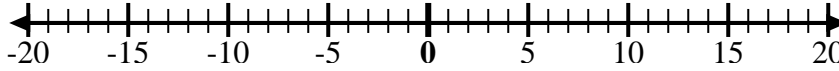
11. $-1 + 7 = 6$

12. $-10 + 14 = 4$

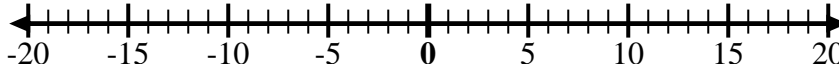


Utilice las rectas numéricas para mostrar cada expresión y resolver.

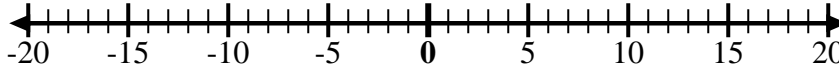
Ej) Empiece en 7
y agregue -12



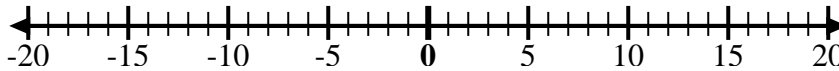
1) Empiece en -2
y agregue 5



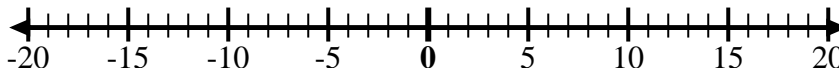
2) Empiece en 8
y agregue -13



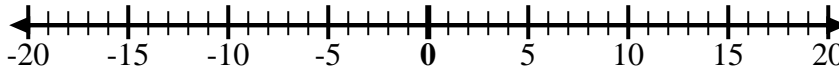
3) Empiece en -7
y agregue -2



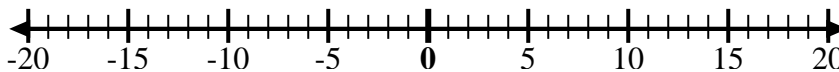
4) Empiece en -4
y agregue -3



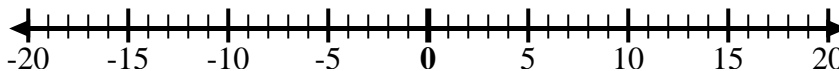
5) Empiece en -3
y agregue -2



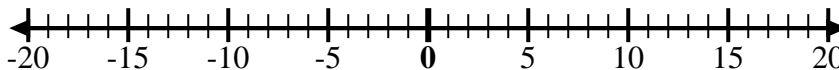
6) Empiece en -7
y agregue 5



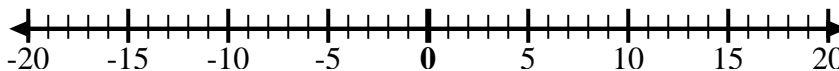
7) Empiece en -6
y agregue -2



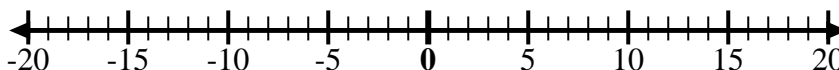
8) Empiece en 1
y agregue -11



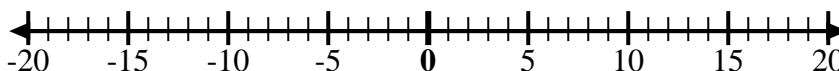
9) Empiece en -7
y agregue 8



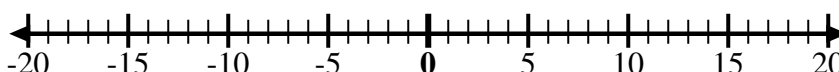
10) Empiece en 1
y agregue -9



11) Empiece en -3
y agregue -3



12) Empiece en 2
y agregue -11



Respuestas

Ej. $7 + -12 = -5$

1. _____

2. _____

3. _____

4. _____

5. _____

6. _____

7. _____

8. _____

9. _____

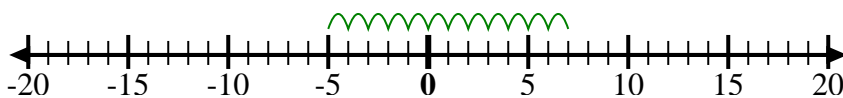
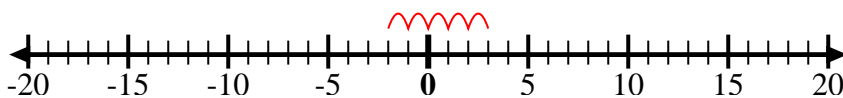
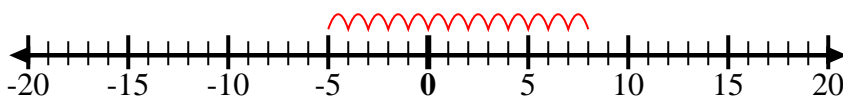
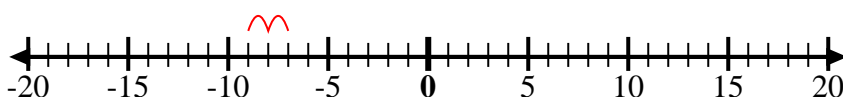
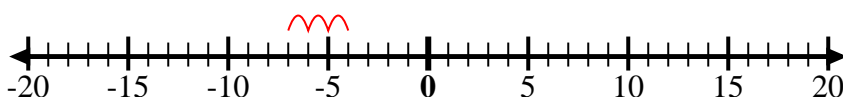
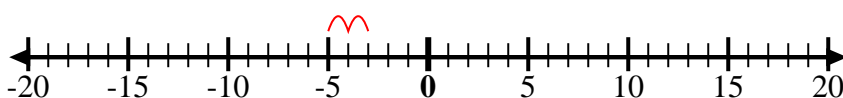
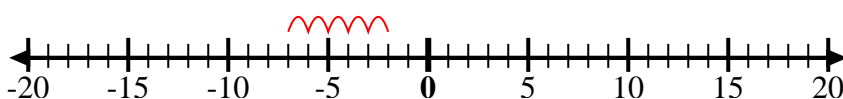
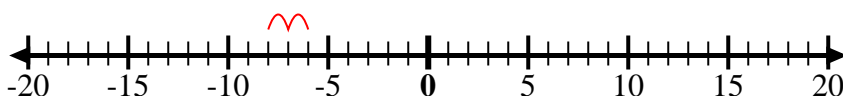
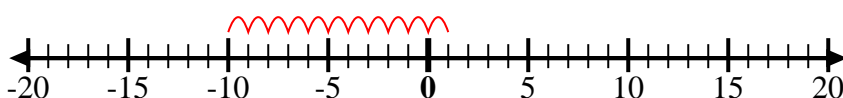
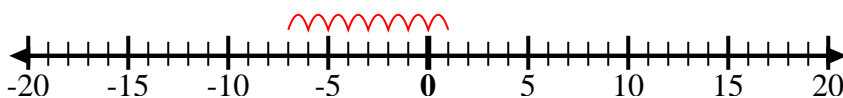
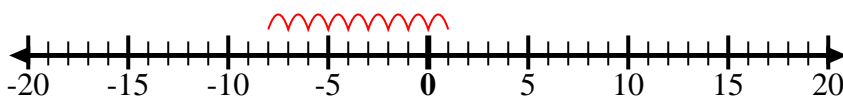
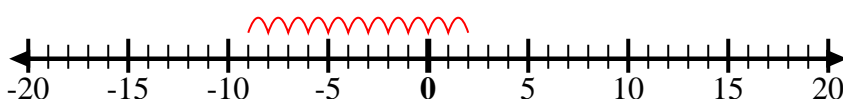
10. _____

11. _____

12. _____



Utilice las rectas numéricas para mostrar cada expresión y resolver.

Ej) Empiece en 7
y agregue -121) Empiece en -2
y agregue 52) Empiece en 8
y agregue -133) Empiece en -7
y agregue -24) Empiece en -4
y agregue -35) Empiece en -3
y agregue -26) Empiece en -7
y agregue 57) Empiece en -6
y agregue -28) Empiece en 1
y agregue -119) Empiece en -7
y agregue 810) Empiece en 1
y agregue -911) Empiece en -3
y agregue -312) Empiece en 2
y agregue -11**Respuestas**

Ej. $7 + -12 = -5$

1. $-2 + 5 = 3$

2. $8 + -13 = -5$

3. $-7 + -2 = -9$

4. $-4 + -3 = -7$

5. $-3 + -2 = -5$

6. $-7 + 5 = -2$

7. $-6 + -2 = -8$

8. $1 + -11 = -10$

9. $-7 + 8 = 1$

10. $1 + -9 = -8$

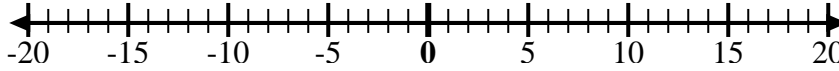
11. $-3 + -3 = -6$

12. $2 + -11 = -9$

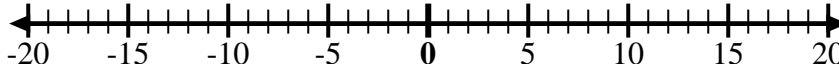


Utilice las rectas numéricas para mostrar cada expresión y resolver.

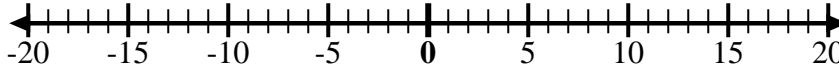
Ej) Empiece en -9
y agregue 5



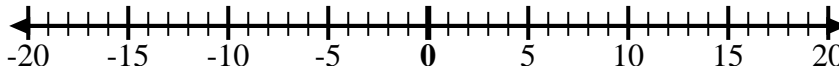
1) Empiece en
-10 y agregue
14



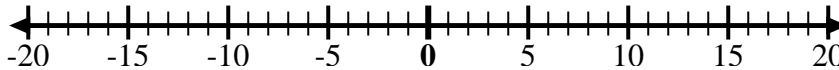
2) Empiece en 3
y agregue -10



3) Empiece en 7
y agregue -6



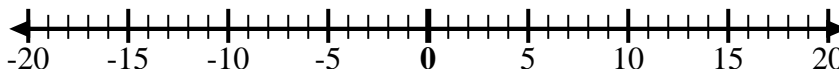
4) Empiece en -8
y agregue -2



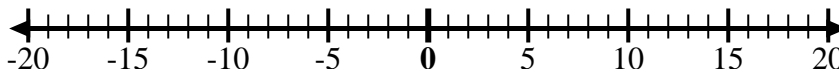
5) Empiece en 5
y agregue -9



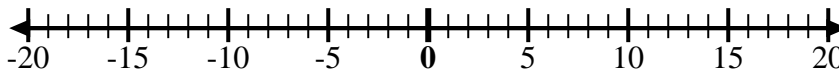
6) Empiece en -5
y agregue 4



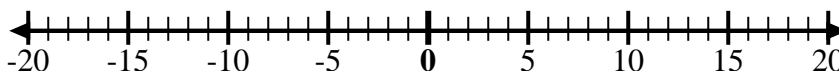
7) Empiece en -6
y agregue 9



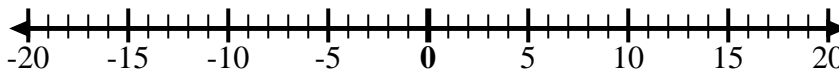
8) Empiece en -4
y agregue 14



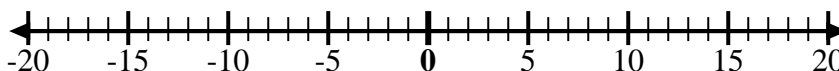
9) Empiece en -4
y agregue -3



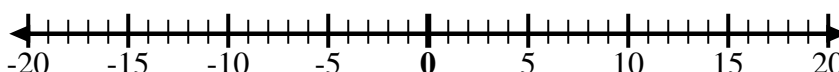
10) Empiece en -7
y agregue -2



11) Empiece en 0
y agregue -7



12) Empiece en -2
y agregue -2



Respuestas

Ej. $-9 + 5 = -4$

1. _____

2. _____

3. _____

4. _____

5. _____

6. _____

7. _____

8. _____

9. _____

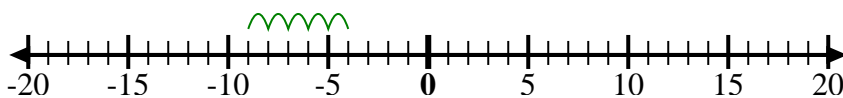
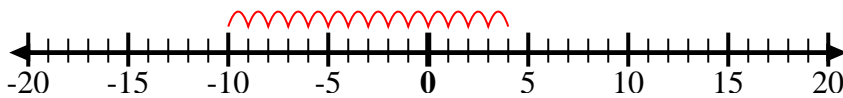
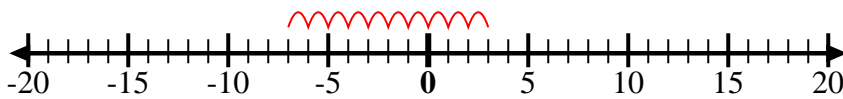
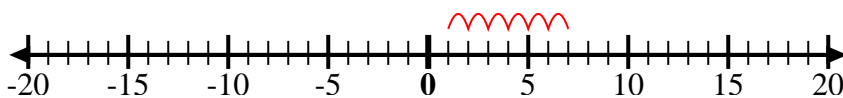
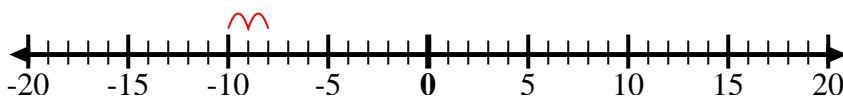
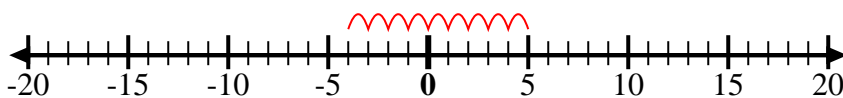
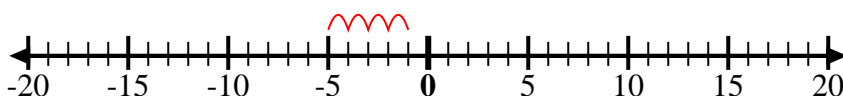
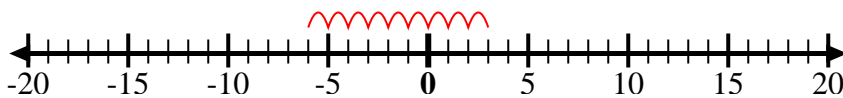
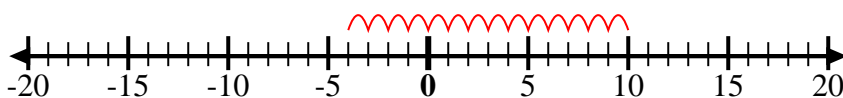
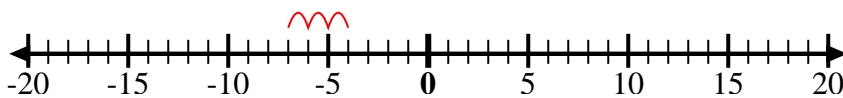
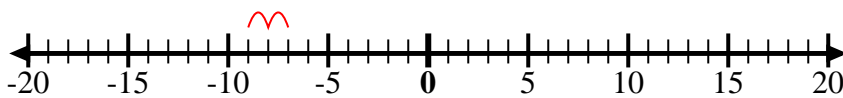
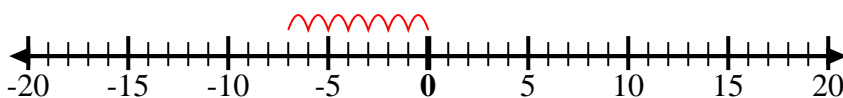
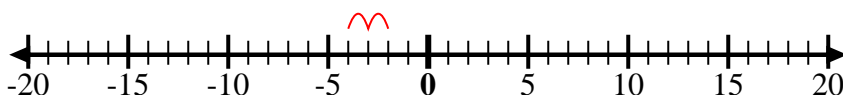
10. _____

11. _____

12. _____



Utilice las rectas numéricas para mostrar cada expresión y resolver.

Ej) Empiece en -9
y agregue 51) Empiece en
-10 y agregue
142) Empiece en 3
y agregue -103) Empiece en 7
y agregue -64) Empiece en -8
y agregue -25) Empiece en 5
y agregue -96) Empiece en -5
y agregue 47) Empiece en -6
y agregue 98) Empiece en -4
y agregue 149) Empiece en -4
y agregue -310) Empiece en -7
y agregue -211) Empiece en 0
y agregue -712) Empiece en -2
y agregue -2**Respuestas**

Ej. $-9 + 5 = -4$

1. $-10 + 14 = 4$

2. $3 + -10 = -7$

3. $7 + -6 = 1$

4. $-8 + -2 = -10$

5. $5 + -9 = -4$

6. $-5 + 4 = -1$

7. $-6 + 9 = 3$

8. $-4 + 14 = 10$

9. $-4 + -3 = -7$

10. $-7 + -2 = -9$

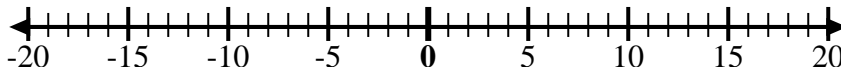
11. $0 + -7 = -7$

12. $-2 + -2 = -4$



Utilice las rectas numéricas para mostrar cada expresión y resolver.

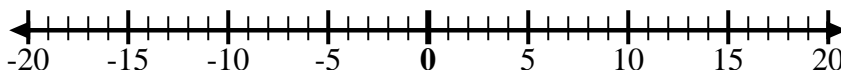
Ej) Empiece en -4
y agregue -6



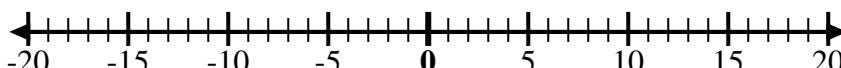
1) Empiece en 7
y agregue -7



2) Empiece en -4
y agregue 9



3) Empiece en 4
y agregue -14



4) Empiece en -2
y agregue -7



5) Empiece en -3
y agregue 7



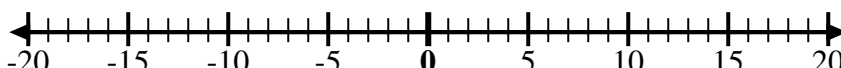
6) Empiece en 1
y agregue -11



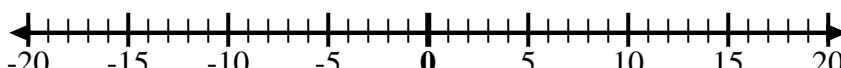
7) Empiece en -6
y agregue -3



8) Empiece en 10
y agregue -1



9) Empiece en 0
y agregue -5



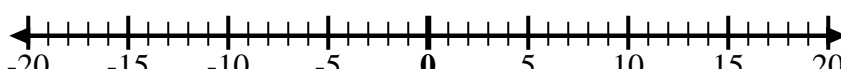
10) Empiece en 0
y agregue -10



11) Empiece en 6
y agregue -11



12) Empiece en -5
y agregue 10



Respuestas

Ej. $-4 + -6 = -10$

1. _____

2. _____

3. _____

4. _____

5. _____

6. _____

7. _____

8. _____

9. _____

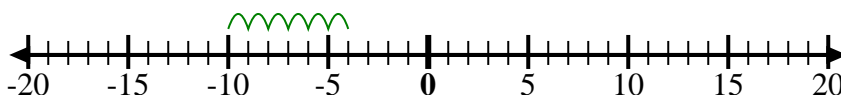
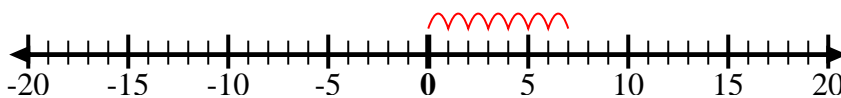
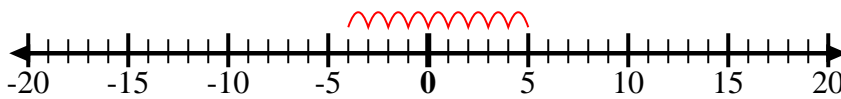
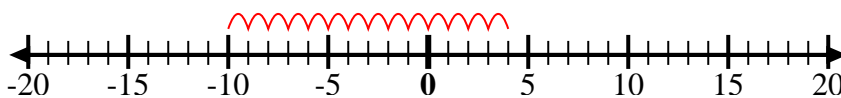
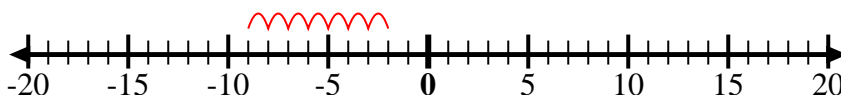
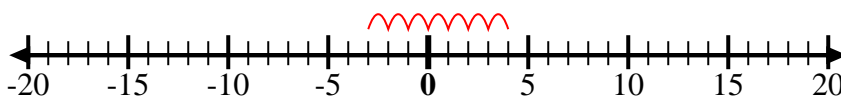
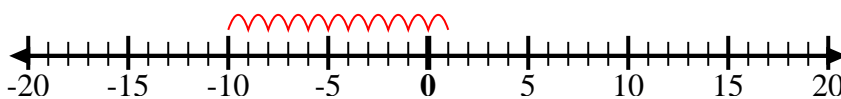
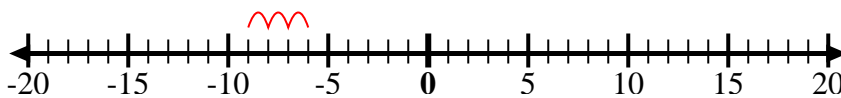
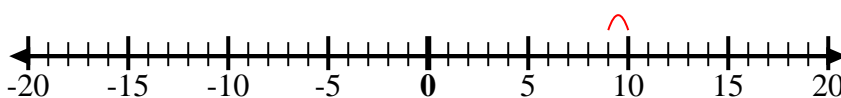
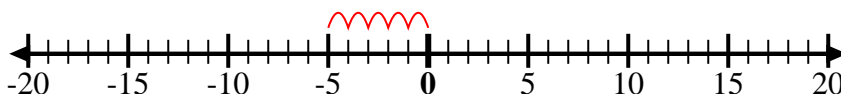
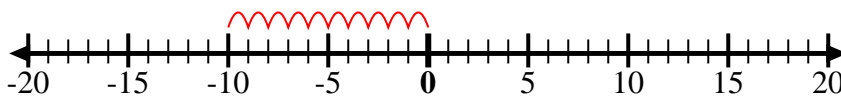
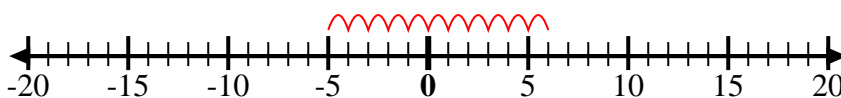
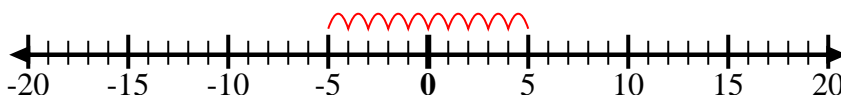
10. _____

11. _____

12. _____



Utilice las rectas numéricas para mostrar cada expresión y resolver.

Ej) Empiece en -4
y agregue -61) Empiece en 7
y agregue -72) Empiece en -4
y agregue 93) Empiece en 4
y agregue -144) Empiece en -2
y agregue -75) Empiece en -3
y agregue 76) Empiece en 1
y agregue -117) Empiece en -6
y agregue -38) Empiece en 10
y agregue -19) Empiece en 0
y agregue -510) Empiece en 0
y agregue -1011) Empiece en 6
y agregue -1112) Empiece en -5
y agregue 10**Respuestas**

Ej. $-4 + -6 = -10$

1. $7 + -7 = 0$

2. $-4 + 9 = 5$

3. $4 + -14 = -10$

4. $-2 + -7 = -9$

5. $-3 + 7 = 4$

6. $1 + -11 = -10$

7. $-6 + -3 = -9$

8. $10 + -1 = 9$

9. $0 + -5 = -5$

10. $0 + -10 = -10$

11. $6 + -11 = -5$

12. $-5 + 10 = 5$