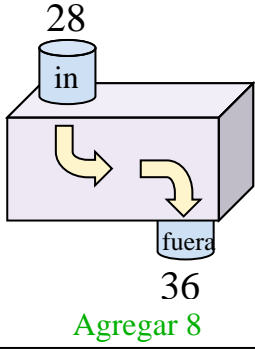


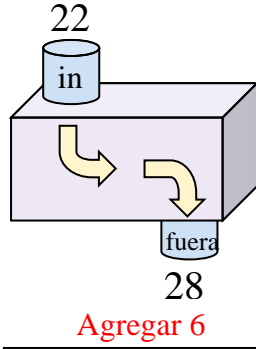


Determina la regla que cada máquina de función está usando.

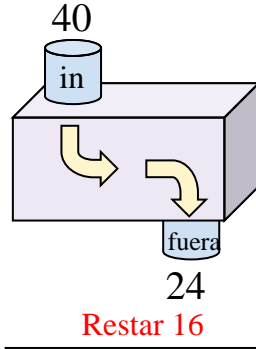
Ej)



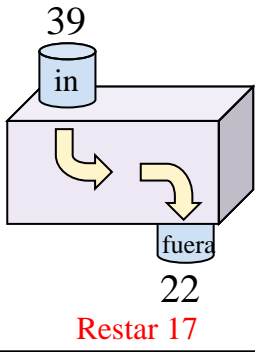
1)



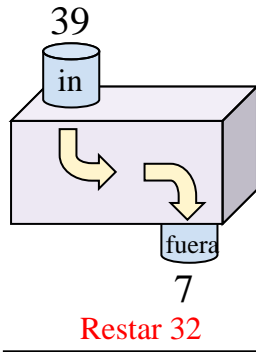
2)



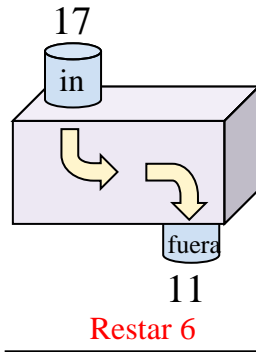
3)



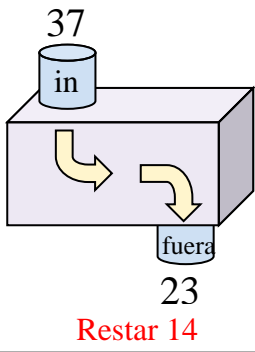
4)



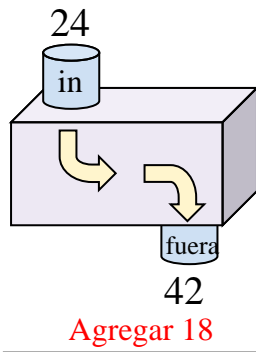
5)



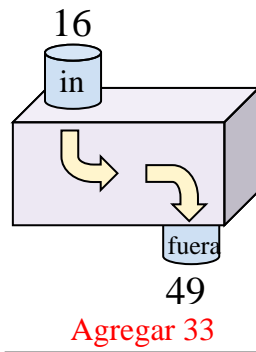
6)



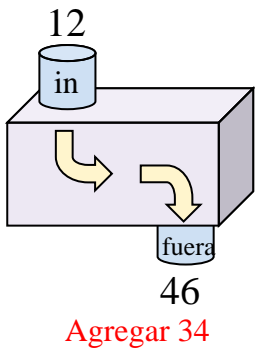
7)



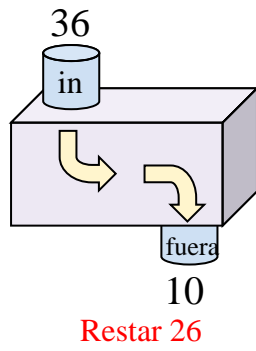
8)



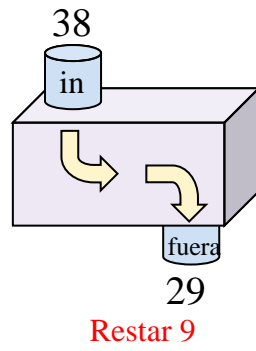
9)



10)



11)



Respuestas

Ej. **Agregar 8**

1. **Agregar 6**

2. **Restar 16**

3. **Restar 17**

4. **Restar 32**

5. **Restar 6**

6. **Restar 14**

7. **Agregar 18**

8. **Agregar 33**

9. **Agregar 34**

10. **Restar 26**

11. **Restar 9**