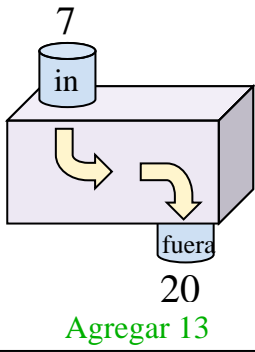


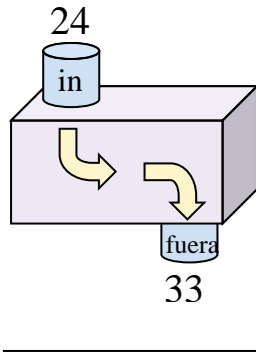


Determina la regla que cada máquina de función está usando.

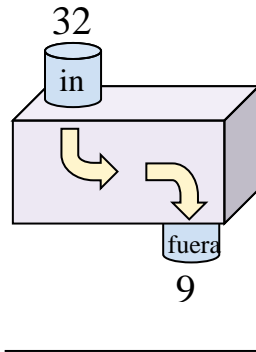
Ej)



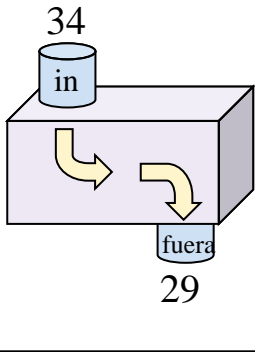
1)



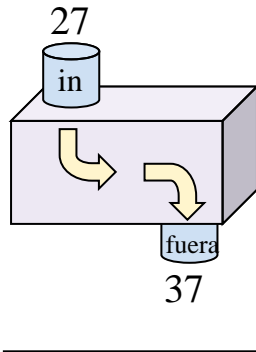
2)



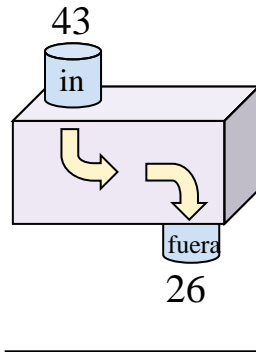
3)



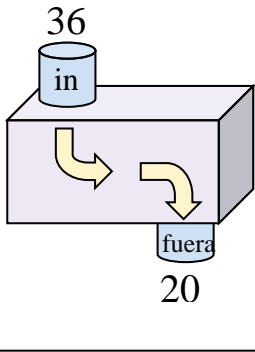
4)



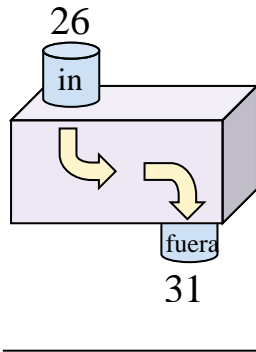
5)



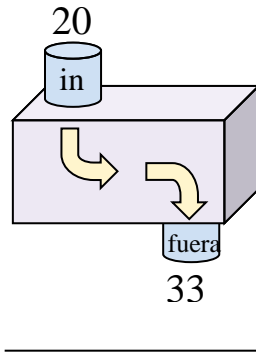
6)



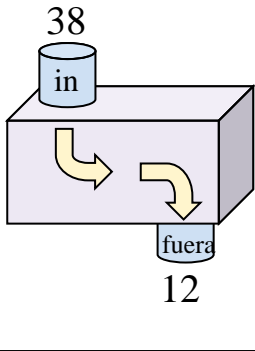
7)



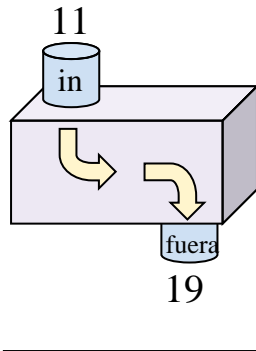
8)



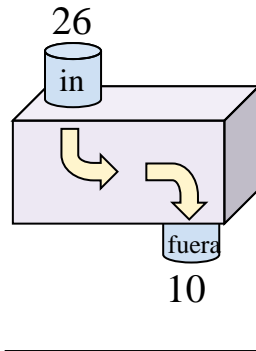
9)



10)



11)



**Respuestas**

Ej. **Agregar 13**

- 1. \_\_\_\_\_
- 2. \_\_\_\_\_
- 3. \_\_\_\_\_
- 4. \_\_\_\_\_
- 5. \_\_\_\_\_
- 6. \_\_\_\_\_
- 7. \_\_\_\_\_
- 8. \_\_\_\_\_
- 9. \_\_\_\_\_
- 10. \_\_\_\_\_
- 11. \_\_\_\_\_



Determina la regla que cada máquina de función está usando.

Ej) **Agregar 13**

1) **Agregar 9**

2) **Restar 23**

3) **Restar 5**

4) **Agregar 10**

5) **Restar 17**

6) **Restar 16**

7) **Agregar 5**

8) **Agregar 13**

9) **Restar 26**

10) **Agregar 8**

11) **Restar 16**

**Respuestas**

- Ej. **Agregar 13**
- 1. **Agregar 9**
- 2. **Restar 23**
- 3. **Restar 5**
- 4. **Agregar 10**
- 5. **Restar 17**
- 6. **Restar 16**
- 7. **Agregar 5**
- 8. **Agregar 13**
- 9. **Restar 26**
- 10. **Agregar 8**
- 11. **Restar 16**