



Resuelve cada problema usando la propiedad distributiva de la división.

**Respuestas**

1)  $424 \div 8 =$

2)  $370 \div 5 =$

3)  $204 \div 3 =$

4)  $210 \div 6 =$

5)  $162 \div 6 =$

6)  $440 \div 8 =$

7)  $396 \div 4 =$

8)  $490 \div 5 =$

9)  $150 \div 5 =$

10)  $192 \div 8 =$

1. \_\_\_\_\_

2. \_\_\_\_\_

3. \_\_\_\_\_

4. \_\_\_\_\_

5. \_\_\_\_\_

6. \_\_\_\_\_

7. \_\_\_\_\_

8. \_\_\_\_\_

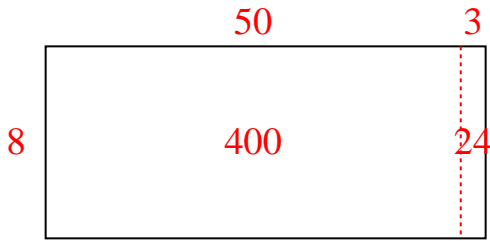
9. \_\_\_\_\_

10. \_\_\_\_\_




Resuelve cada problema usando la propiedad distributiva de la división.


1)  $424 \div 8 =$



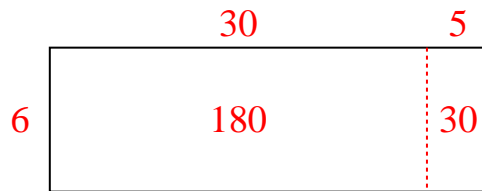
2)  $370 \div 5 =$



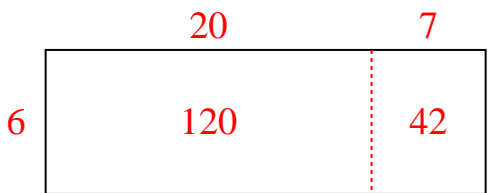
3)  $204 \div 3 =$



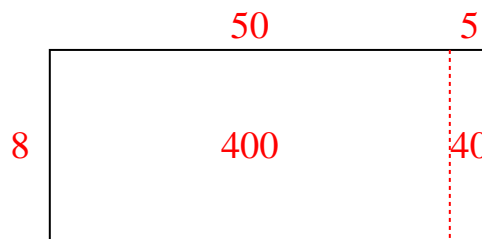
4)  $210 \div 6 =$



5)  $162 \div 6 =$



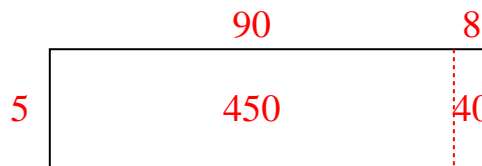
6)  $440 \div 8 =$



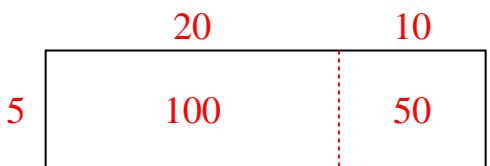
7)  $396 \div 4 =$



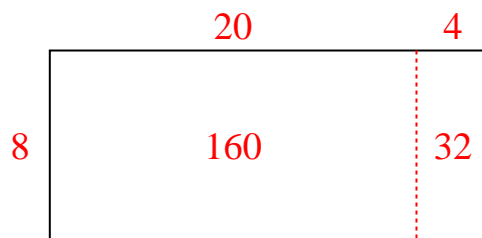
8)  $490 \div 5 =$



9)  $150 \div 5 =$



10)  $192 \div 8 =$



**Respuestas**

1. 53
2. 74
3. 68
4. 35
5. 27
6. 55
7. 99
8. 98
9. 30
10. 24