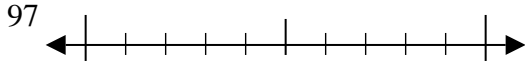


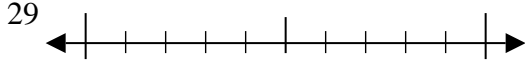


Usar las rectas numéricas para encontrar el número más cercano a 10.

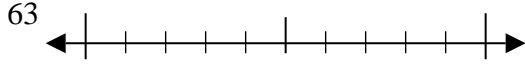
Ej)



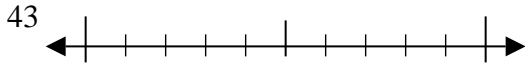
1)



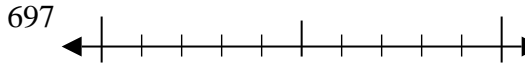
2)



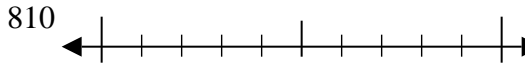
3)



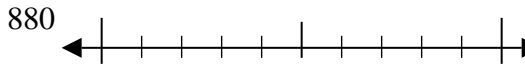
4)



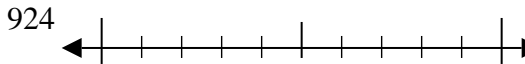
5)



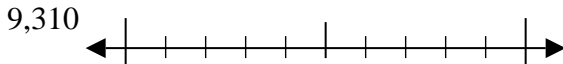
6)



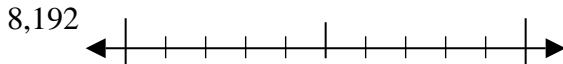
7)



8)



9)



Respuestas

Ej. 100

1. _____

2. _____

3. _____

4. _____

5. _____

6. _____

7. _____

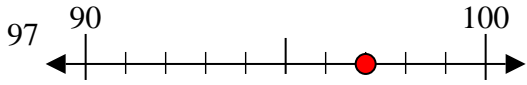
8. _____

9. _____

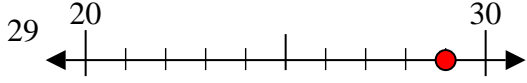


Usar las rectas numéricas para encontrar el número más cercano a 10.

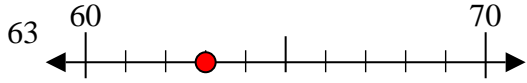
Ej)



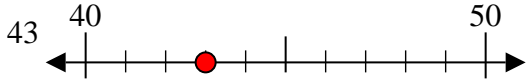
1)



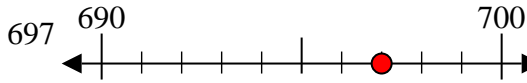
2)



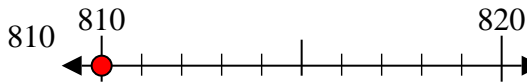
3)



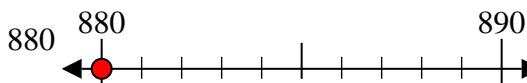
4)



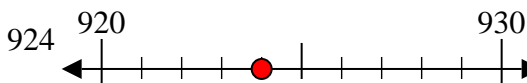
5)



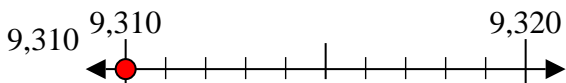
6)



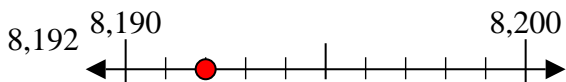
7)



8)



9)



Respuestas

Ej. 100

1. 30

2. 60

3. 40

4. 700

5. 810

6. 880

7. 920

8. 9310

9. 8190