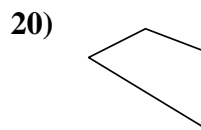
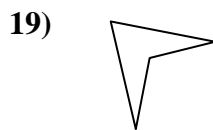
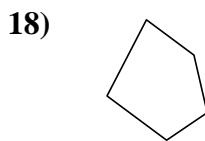
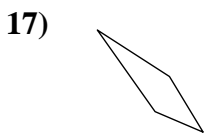
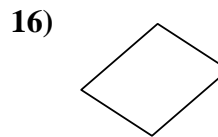
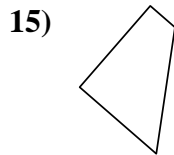
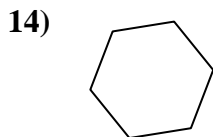
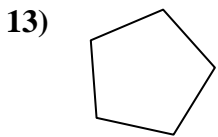
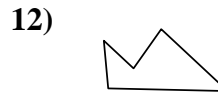
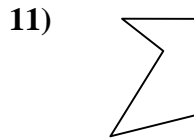
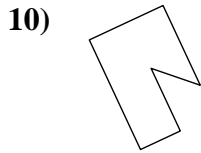
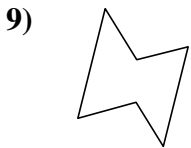
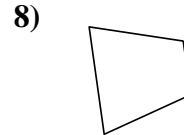
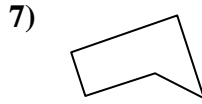
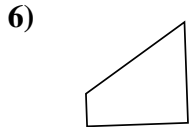
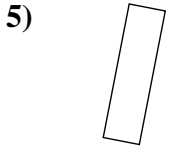
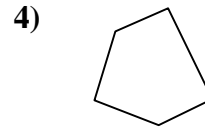
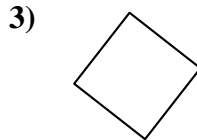
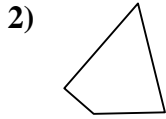
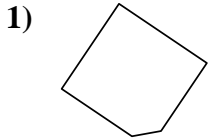




Determinar si la forma mostrada es un cuadrilátero (sí) o no (no).

Respuestas



1. _____

2. _____

3. _____

4. _____

5. _____

6. _____

7. _____

8. _____

9. _____

10. _____

11. _____

12. _____

13. _____

14. _____

15. _____

16. _____

17. _____

18. _____

19. _____

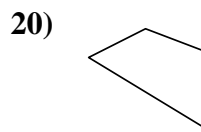
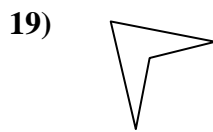
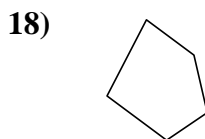
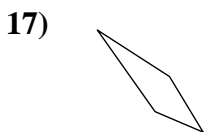
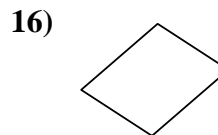
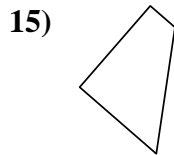
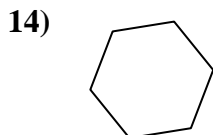
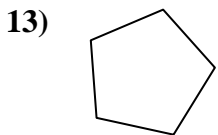
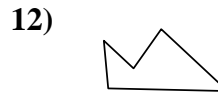
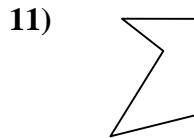
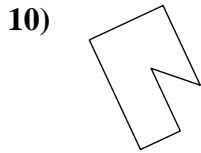
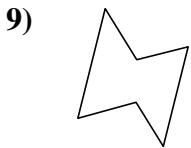
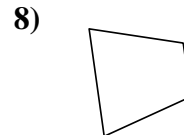
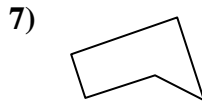
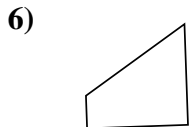
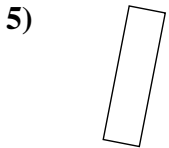
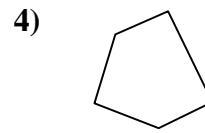
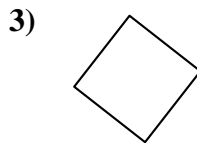
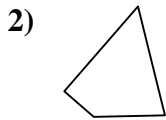
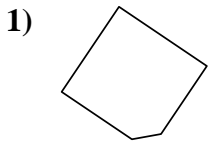
20. _____

1-10	95	90	85	80	75	70	65	60	55	50
11-20	45	40	35	30	25	20	15	10	5	0



Determinar si la forma mostrada es un cuadrilátero (si) o no (no).

Respuestas



1. **no**

2. **si**

3. **si**

4. **no**

5. **si**

6. **si**

7. **no**

8. **si**

9. **no**

10. **no**

11. **no**

12. **no**

13. **no**

14. **no**

15. **si**

16. **si**

17. **si**

18. **no**

19. **si**

20. **si**