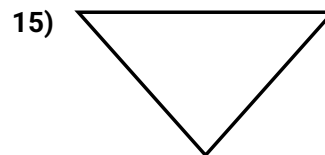
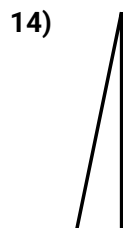
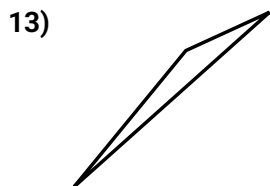
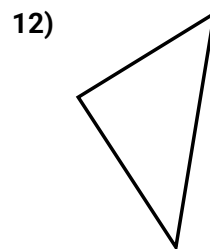
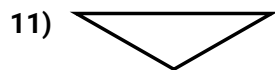
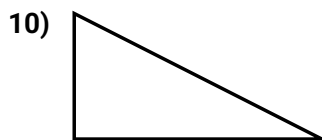
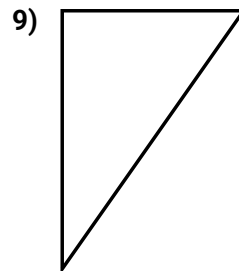
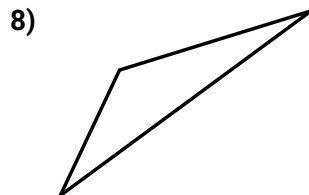
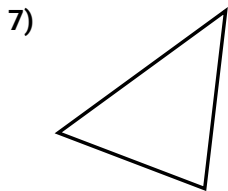
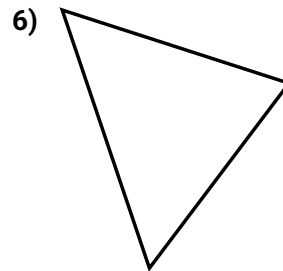
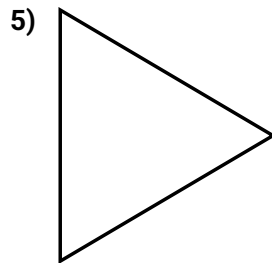


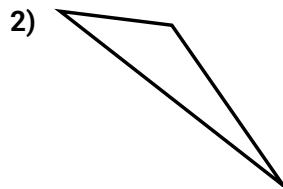
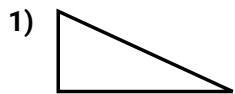




Determinar si el triángulo mostrado es un triángulo recto (sí) o no (no).

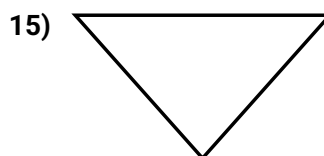
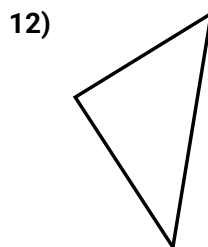
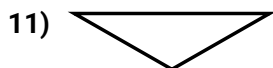
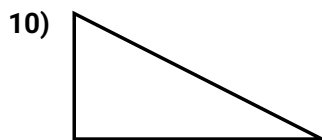
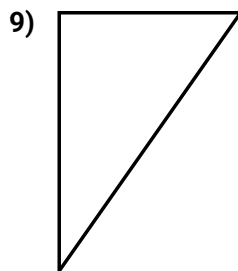
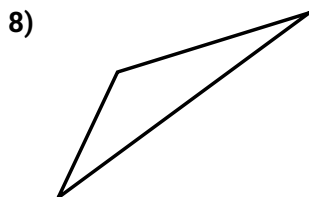
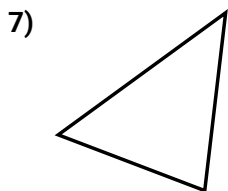
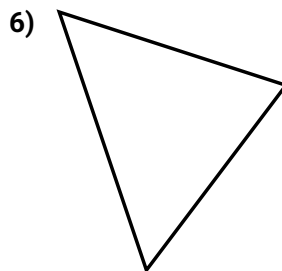
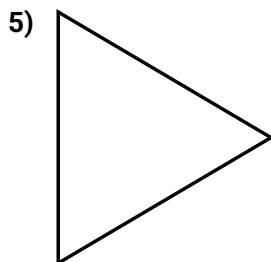
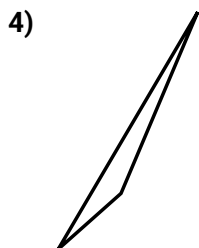
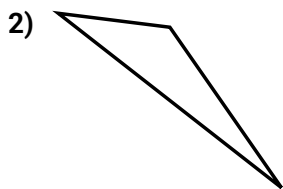
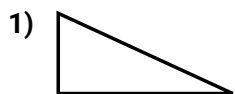
**Respuestas**



1. \_\_\_\_\_
2. \_\_\_\_\_
3. \_\_\_\_\_
4. \_\_\_\_\_
5. \_\_\_\_\_
6. \_\_\_\_\_
7. \_\_\_\_\_
8. \_\_\_\_\_
9. \_\_\_\_\_
10. \_\_\_\_\_
11. \_\_\_\_\_
12. \_\_\_\_\_
13. \_\_\_\_\_
14. \_\_\_\_\_
15. \_\_\_\_\_



Determinar si el triángulo mostrado es un triángulo recto (sí) o no (no).

**Respuestas**1.     **si**    2.     **no**    3.     **si**    4.     **no**    5.     **no**    6.     **no**    7.     **no**    8.     **no**    9.     **si**    10.     **si**    11.     **no**    12.     **si**    13.     **no**    14.     **si**    15.     **no**