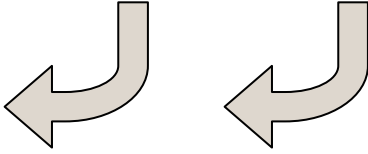





Determina si las figuras que se muestran son 'similares', 'congruentes' o 'ninguna'.

Respuestas

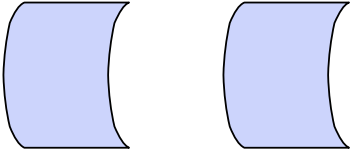
1)



2)



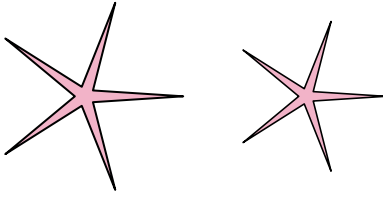
3)



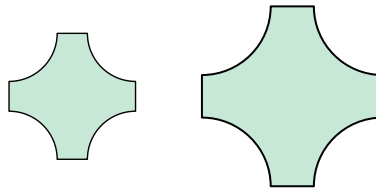
4)



5)



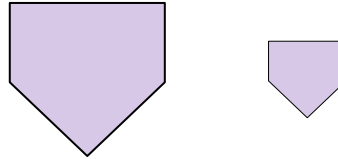
6)



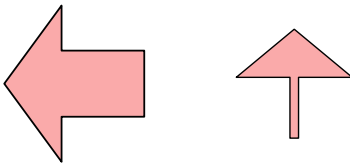
7)




8)



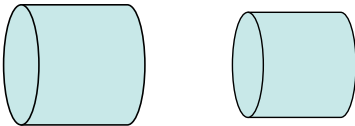
9)



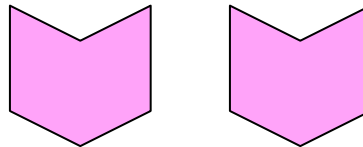
10)



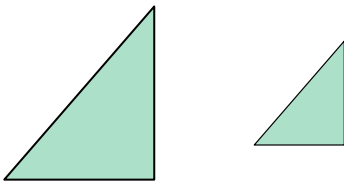
11)



12)




13)



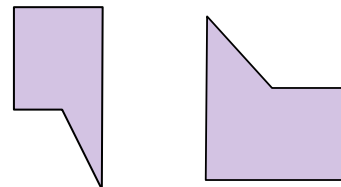
14)



15)



16)

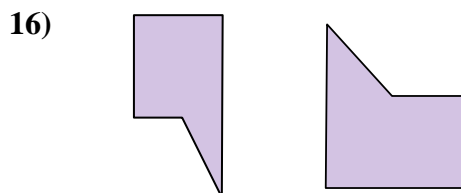

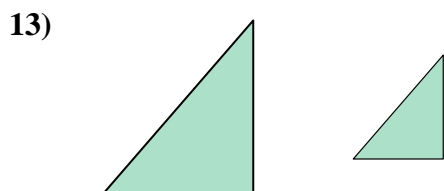


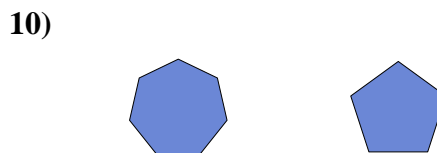
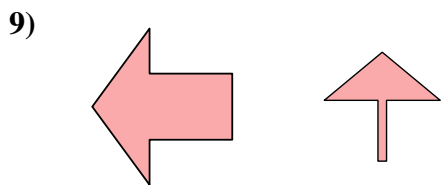
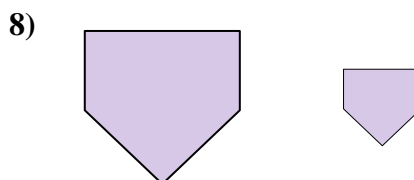
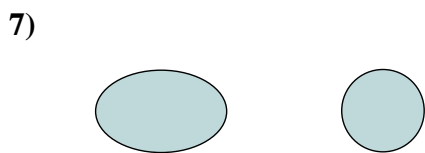
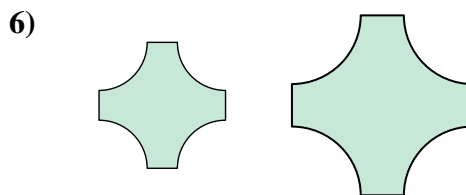

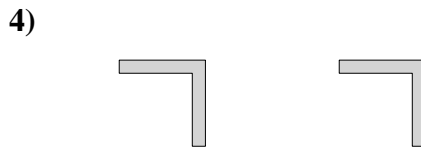
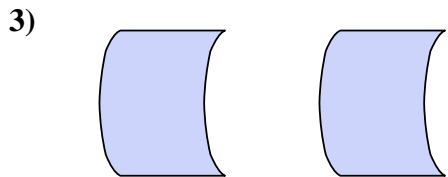
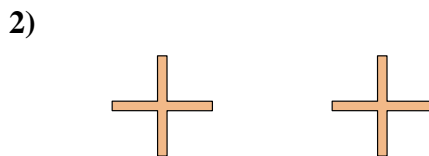
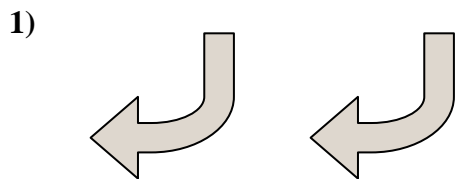


1. _____
2. _____
3. _____
4. _____
5. _____
6. _____
7. _____
8. _____
9. _____
10. _____
11. _____
12. _____
13. _____
14. _____
15. _____
16. _____



Determina si las figuras que se muestran son 'similares', 'congruentes' o 'ninguna'.

Respuestas



1. congruente

2. congruente

3. congruente

4. congruente

5. similar

6. similar

7. ninguno

8. similar

9. ninguno

10. ninguno

11. similar

12. congruente

13. similar

14. congruente

15. ninguno

16. ninguno