



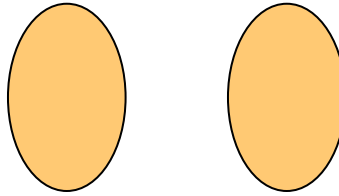
Determina si las figuras que se muestran son 'similares', 'congruentes' o 'ninguna'.

Respuestas

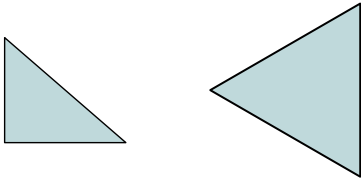
1)



2)



3)



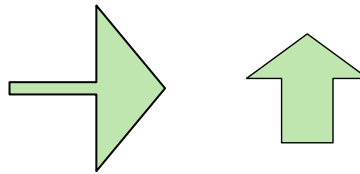
4)




5)



6)



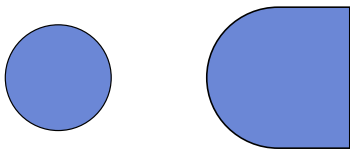
7)



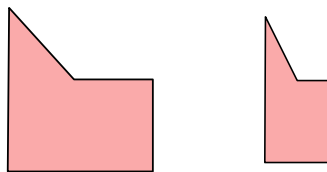
8)



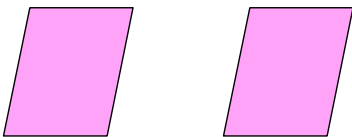
9)



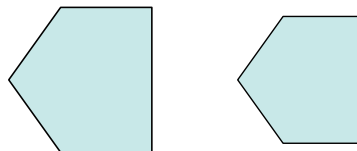
10)




11)




12)



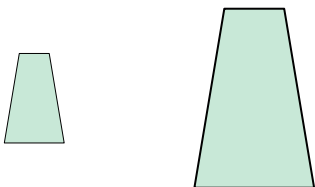
13)



14)



15)



16)



1. _____
2. _____
3. _____
4. _____
5. _____
6. _____
7. _____
8. _____
9. _____
10. _____
11. _____
12. _____
13. _____
14. _____
15. _____
16. _____





Determina si las figuras que se muestran son 'similares', 'congruentes' o 'ninguna'.

Respuestas


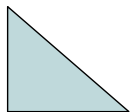
1)



2)



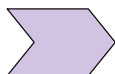
3)



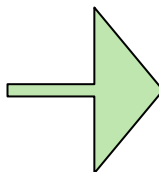
4)



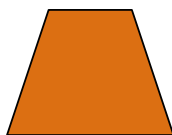
5)



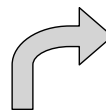
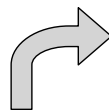
6)




7)



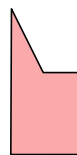
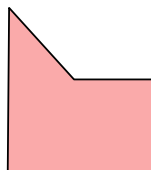
8)



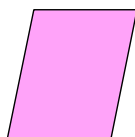
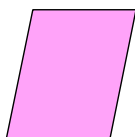
9)



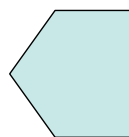
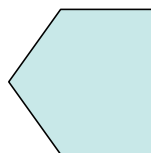
10)





11)





12)



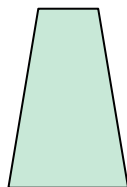
13)



14)



15)



16)



1. similar
2. congruente
3. ninguno
4. congruente
5. ninguno
6. ninguno
7. ninguno
8. congruente
9. ninguno
10. ninguno
11. congruente
12. similar
13. ninguno
14. similar
15. similar
16. congruente