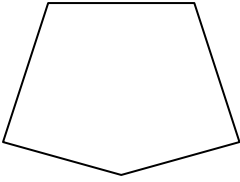





Determinar si la figura mostrada es una forma regular o irregular.

**Respuestas**


1)



2)




3)

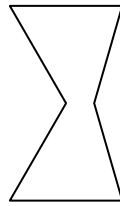


1. \_\_\_\_\_

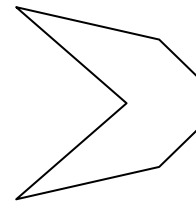
4)



5)



6)



2. \_\_\_\_\_

3. \_\_\_\_\_

4. \_\_\_\_\_

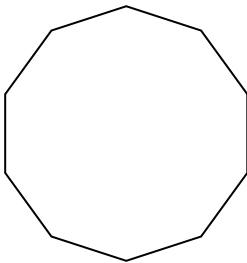
5. \_\_\_\_\_

6. \_\_\_\_\_

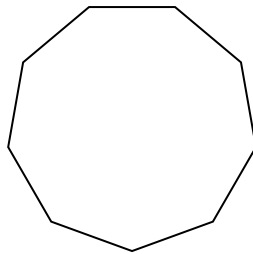
7. \_\_\_\_\_

8. \_\_\_\_\_

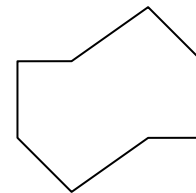
7)



8)



9)



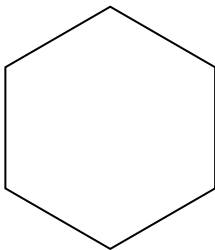
9. \_\_\_\_\_

10. \_\_\_\_\_

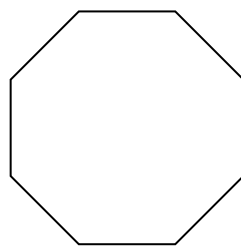
11. \_\_\_\_\_

12. \_\_\_\_\_

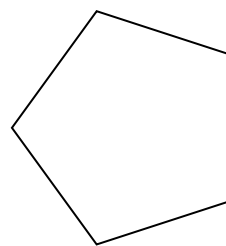
10)



11)



12)




13. \_\_\_\_\_

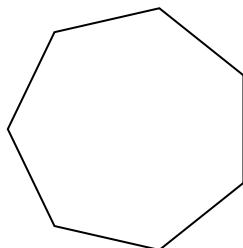
14. \_\_\_\_\_

15. \_\_\_\_\_


13)



14)



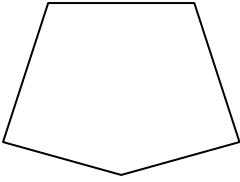
15)






Determinar si la figura mostrada es una forma regular o irregular.

1)




2)



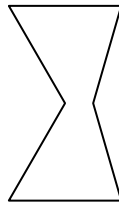
3)



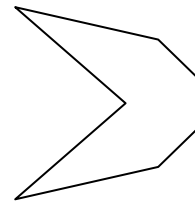
4)



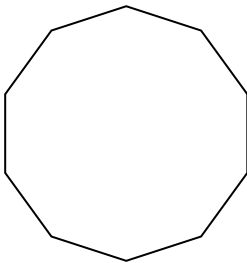
5)



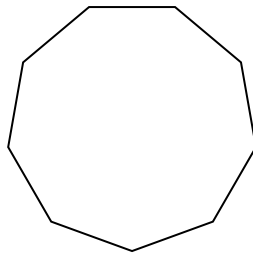
6)



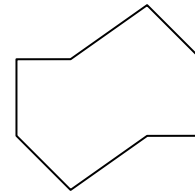
7)



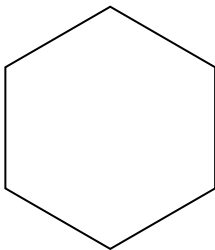
8)



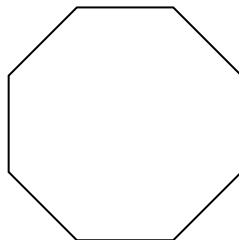
9)



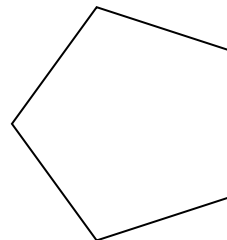
10)




11)



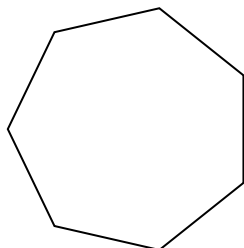
12)




13)



14)



15)



**Respuestas**

1. **Irregulare**

2. **Irregulare**

3. **Regulare**

4. **Irregulare**

5. **Irregulare**

6. **Irregulare**

7. **Regulare**

8. **Regulare**

9. **Irregulare**

10. **Regulare**

11. **Regulare**

12. **Regulare**

13. **Irregulare**

14. **Regulare**


15. **Irregulare**



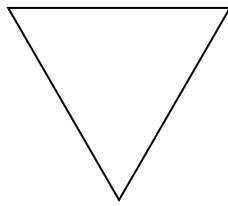
Determinar si la figura mostrada es una forma regular o irregular.

**Respuestas**

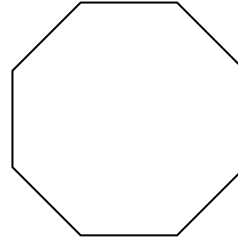
1)



2)



3)



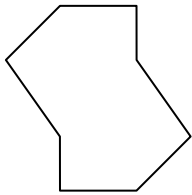
1. \_\_\_\_\_

2. \_\_\_\_\_

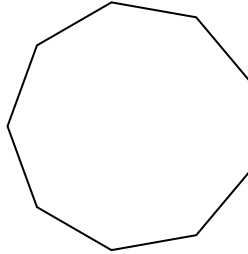
3. \_\_\_\_\_

4. \_\_\_\_\_


4)



5)



6)




5. \_\_\_\_\_

6. \_\_\_\_\_


7. \_\_\_\_\_

8. \_\_\_\_\_

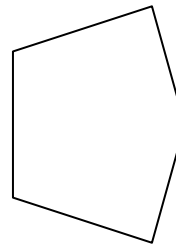
7)



8)



9)




9. \_\_\_\_\_

10. \_\_\_\_\_

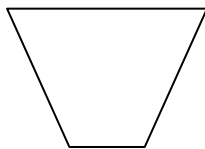
11. \_\_\_\_\_

12. \_\_\_\_\_

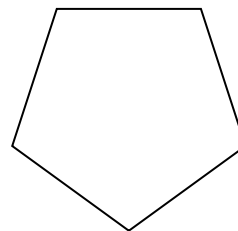
10)



11)



12)

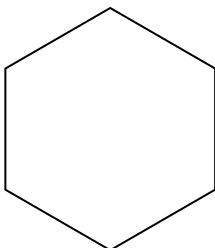


13. \_\_\_\_\_

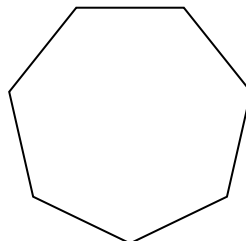
14. \_\_\_\_\_

15. \_\_\_\_\_

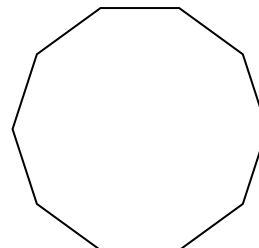
13)



14)




15)



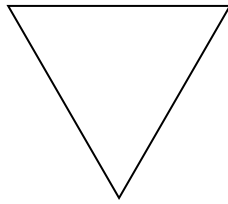


Determinar si la figura mostrada es una forma regular o irregular.

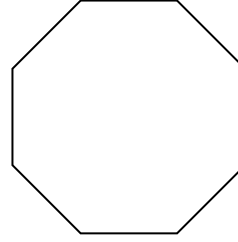
1)



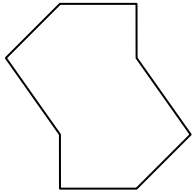
2)



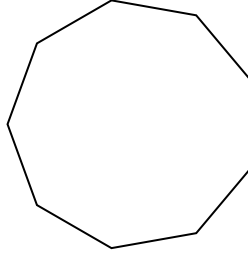
3)



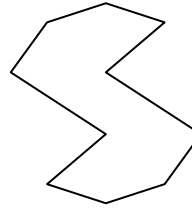
4)




5)




6)



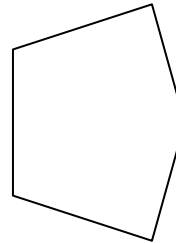
7)




8)



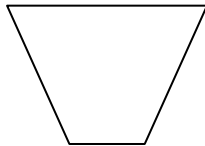
9)



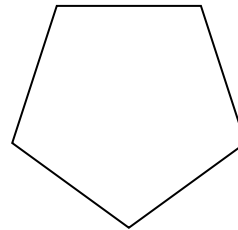
10)



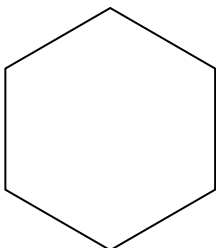
11)



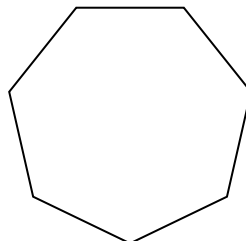
12)



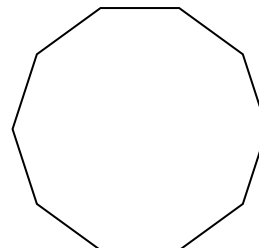
13)



14)



15)



**Respuestas**

1. Regulare

2. Regulare

3. Regulare

4. Irregulare

5. Regulare

6. Irregulare

7. Irregulare

8. Irregulare

9. Irregulare

10. Irregulare

11. Irregulare

12. Regulare

13. Regulare

14. Regulare

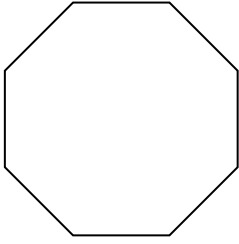
15. Regulare



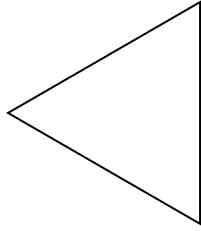
Determinar si la figura mostrada es una forma regular o irregular.

**Respuestas**

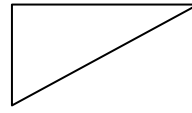
1)



2)

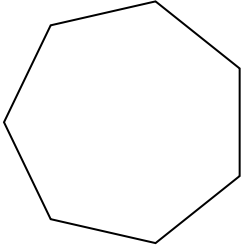


3)

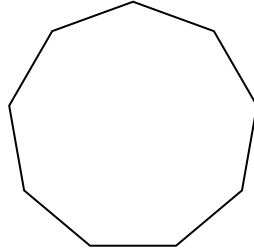


1. \_\_\_\_\_

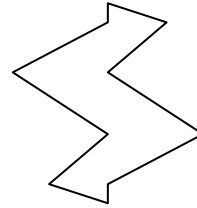
4)



5)



6)



2. \_\_\_\_\_

3. \_\_\_\_\_

4. \_\_\_\_\_

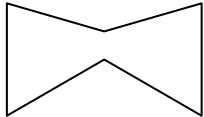
5. \_\_\_\_\_

6. \_\_\_\_\_

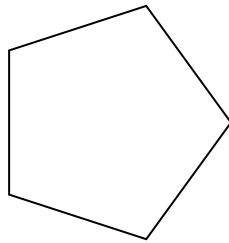
7. \_\_\_\_\_

8. \_\_\_\_\_


7)



8)



9)




9. \_\_\_\_\_

10. \_\_\_\_\_

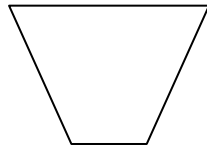
11. \_\_\_\_\_

12. \_\_\_\_\_


10)



11)



12)




13. \_\_\_\_\_


14. \_\_\_\_\_

15. \_\_\_\_\_

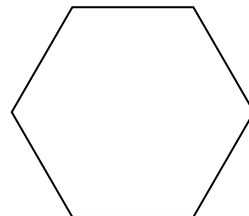
13)



14)



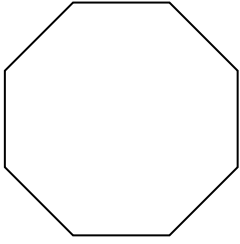
15)



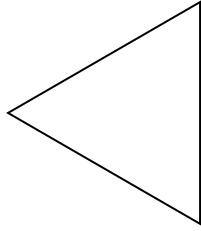


Determinar si la figura mostrada es una forma regular o irregular.

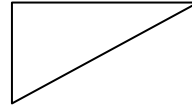
1)



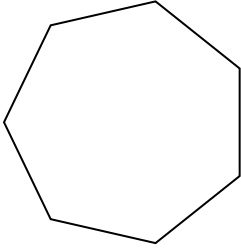
2)



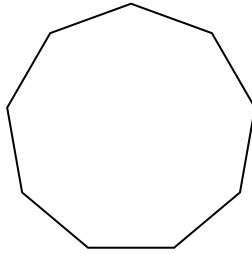
3)



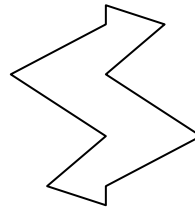
4)



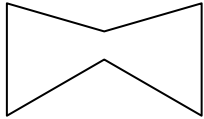
5)



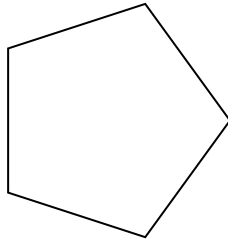
6)




7)




8)



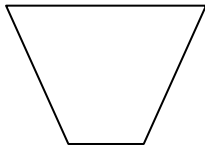
9)




10)




11)




12)



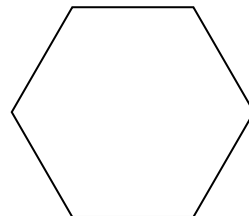
13)



14)



15)



**Respuestas**

1. Regulare

2. Regulare

3. Irregulare

4. Regulare

5. Regulare

6. Irregulare

7. Irregulare

8. Regulare

9. Irregulare

10. Regulare

11. Irregulare

12. Irregulare

13. Irregulare

14. Irregulare

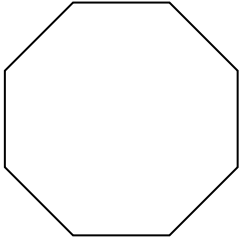
15. Regulare




Determinar si la figura mostrada es una forma regular o irregular.

**Respuestas**

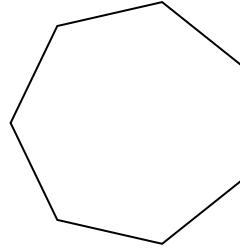
1)



2)



3)




1. \_\_\_\_\_

2. \_\_\_\_\_


3. \_\_\_\_\_

4. \_\_\_\_\_

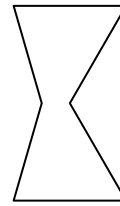
4)



5)



6)



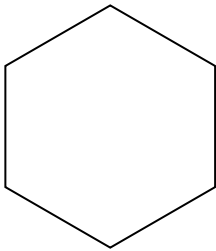
5. \_\_\_\_\_

6. \_\_\_\_\_

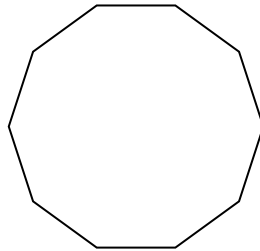
7. \_\_\_\_\_

8. \_\_\_\_\_


7)



8)



9)



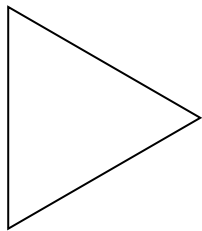
9. \_\_\_\_\_

10. \_\_\_\_\_


11. \_\_\_\_\_

12. \_\_\_\_\_

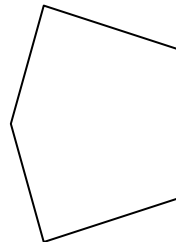
10)



11)



12)




13. \_\_\_\_\_

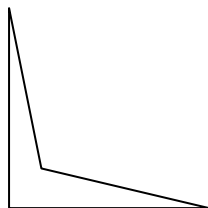
14. \_\_\_\_\_

15. \_\_\_\_\_

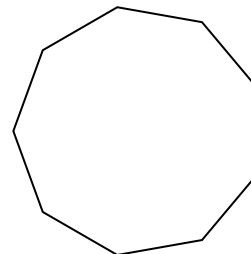
13)



14)

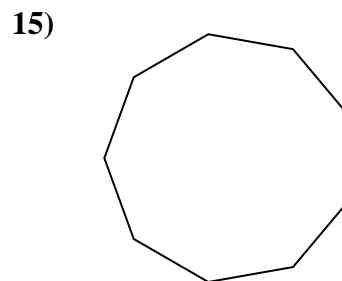
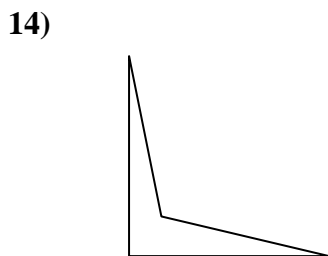
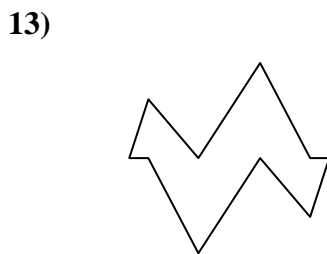
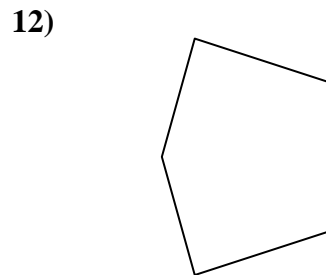
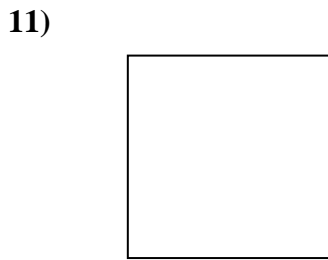
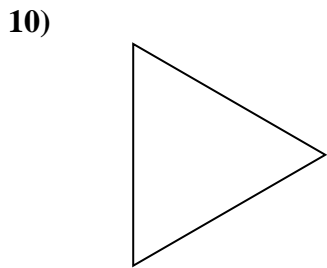
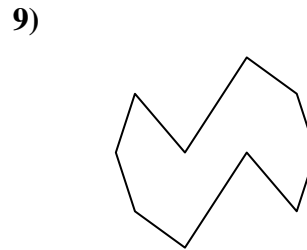
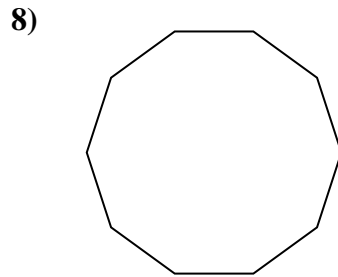
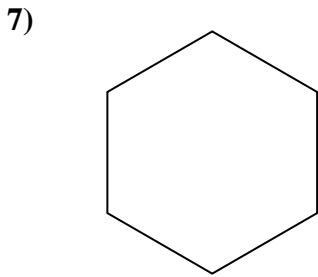
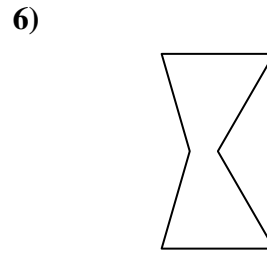
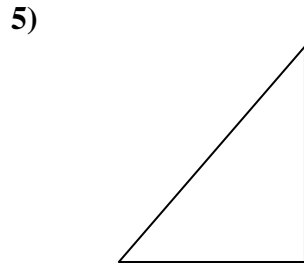
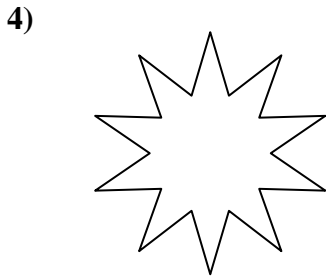
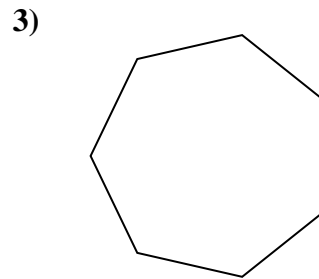

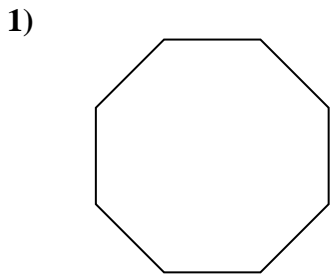


15)





Determinar si la figura mostrada es una forma regular o irregular.



**Respuestas**

1. Regulare

2. Irregulare

3. Regulare

4. Irregulare

5. Irregulare

6. Irregulare

7. Regulare

8. Regulare

9. Irregulare

10. Regulare

11. Regulare

12. Irregulare

13. Irregulare

14. Irregulare

15. Regulare

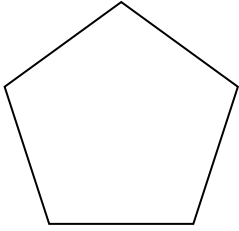




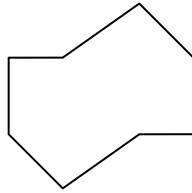
Determinar si la figura mostrada es una forma regular o irregular.

**Respuestas**


1)



2)

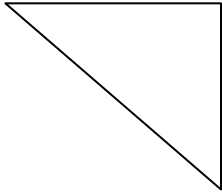


3)

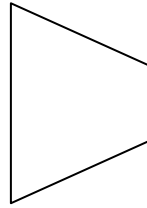


1. \_\_\_\_\_

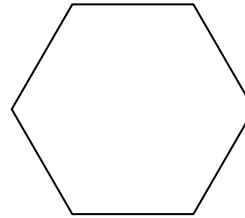
4)



5)




6)




2. \_\_\_\_\_

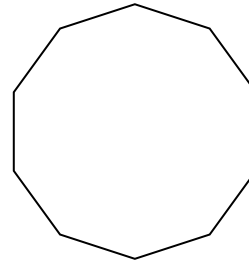
7)



8)



9)



3. \_\_\_\_\_

4. \_\_\_\_\_

5. \_\_\_\_\_

6. \_\_\_\_\_

7. \_\_\_\_\_

8. \_\_\_\_\_

9. \_\_\_\_\_

10. \_\_\_\_\_

11. \_\_\_\_\_

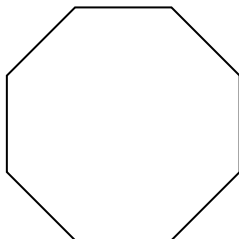
12. \_\_\_\_\_

13. \_\_\_\_\_


14. \_\_\_\_\_

15. \_\_\_\_\_

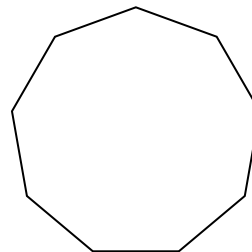
10)



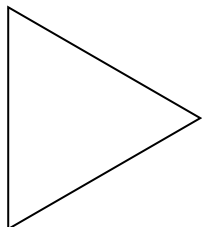
11)




12)



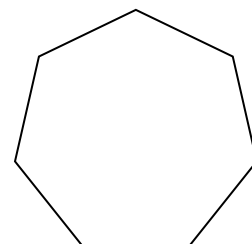
13)



14)



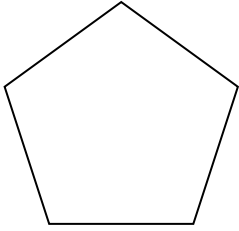
15)



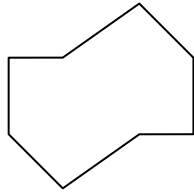


Determinar si la figura mostrada es una forma regular o irregular.


1)



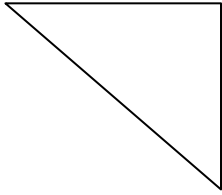
2)



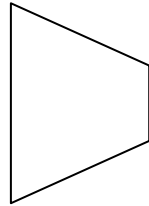
3)



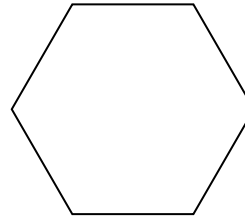
4)




5)




6)



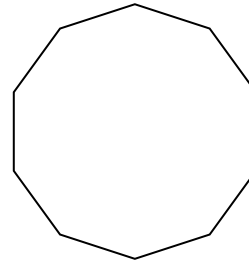
7)



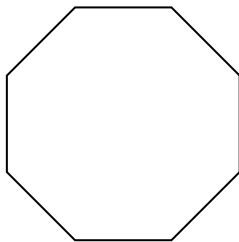
8)




9)



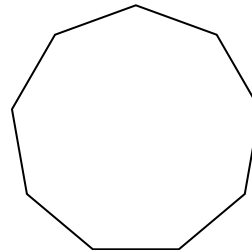
10)



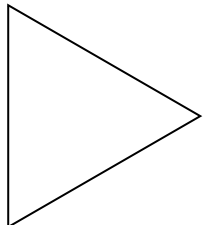
11)




12)



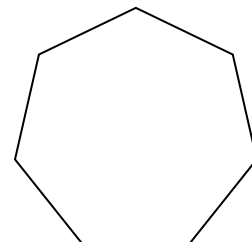
13)



14)



15)



**Respuestas**

1. Regulare

2. Irregulare

3. Regulare

4. Irregulare

5. Irregulare

6. Regulare

7. Irregulare

8. Irregulare

9. Regulare

10. Regulare

11. Irregulare

12. Regulare

13. Regulare

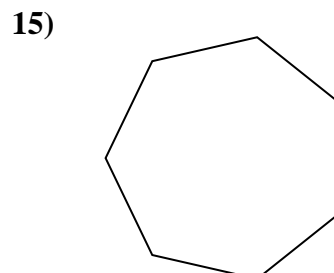
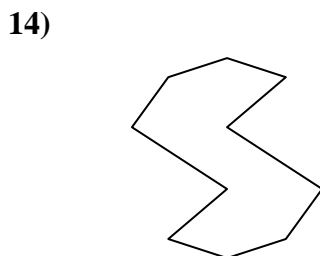
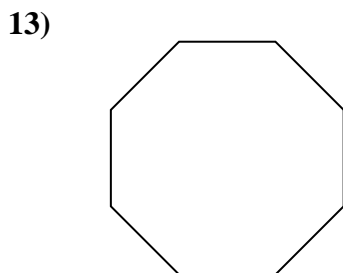
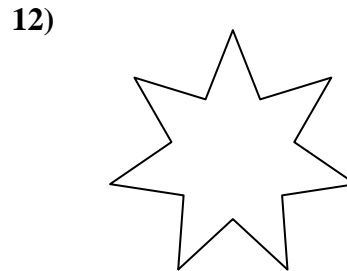
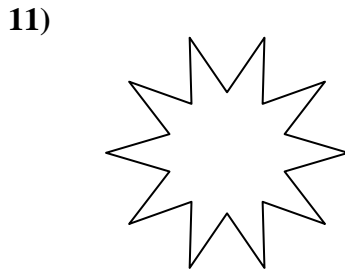
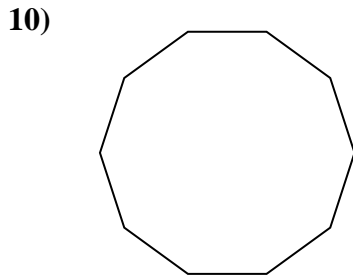
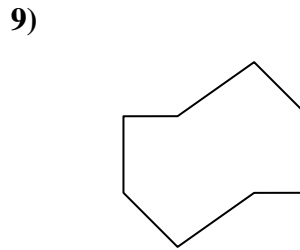
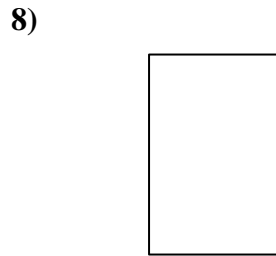
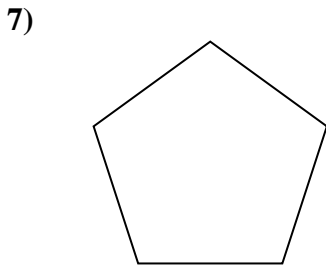
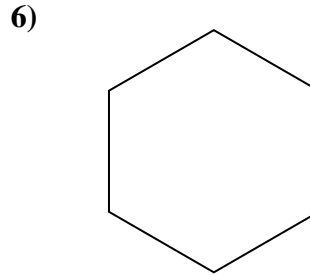
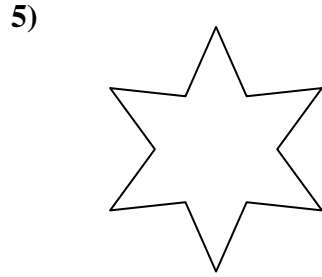
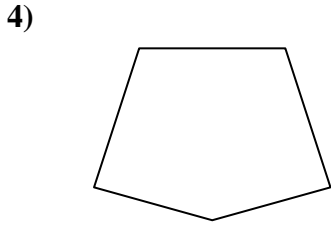
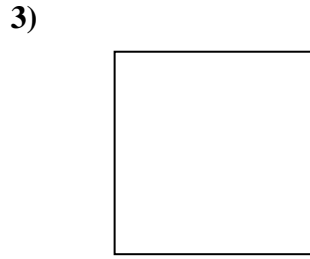
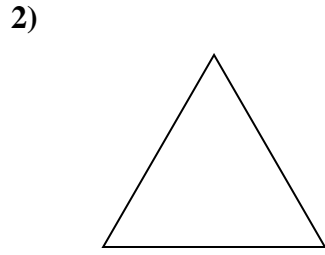
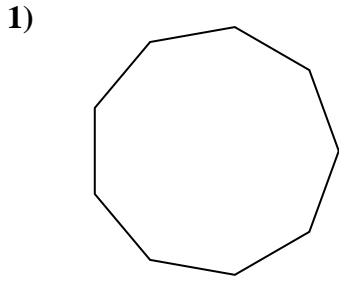
14. Irregulare

15. Regulare



Determinar si la figura mostrada es una forma regular o irregular.

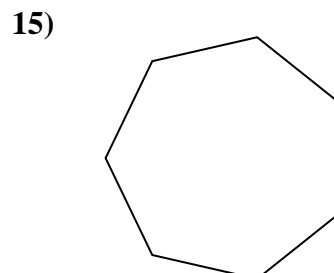
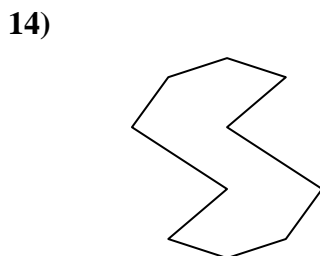
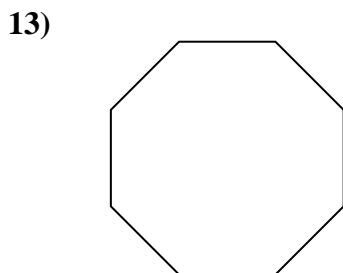
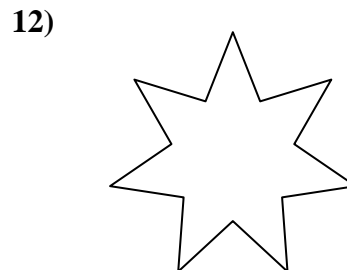
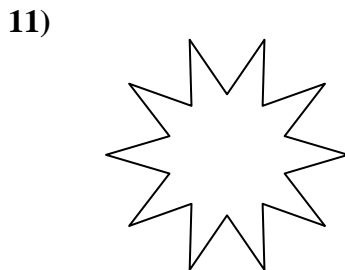
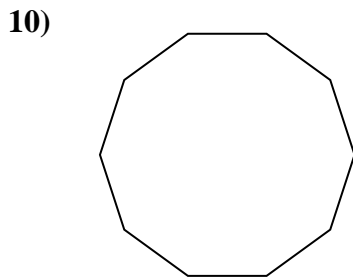
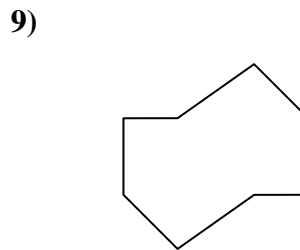
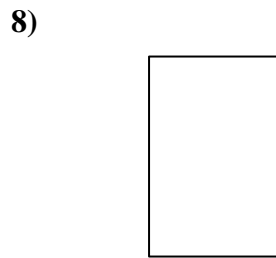
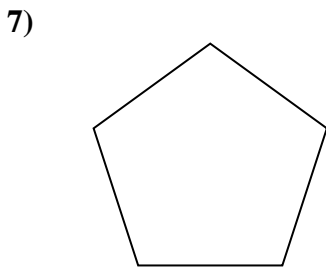
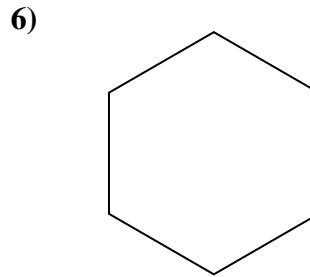

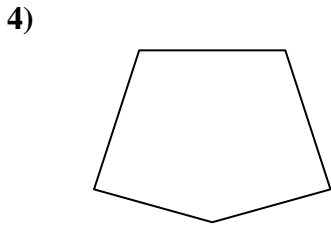
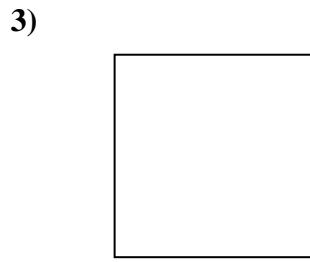
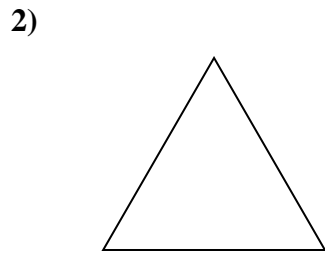
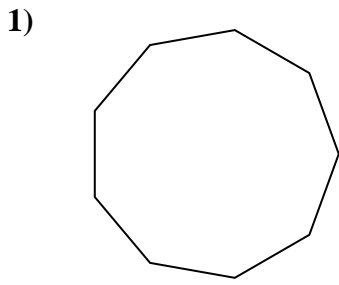
**Respuestas**



1. \_\_\_\_\_
2. \_\_\_\_\_
3. \_\_\_\_\_
4. \_\_\_\_\_
5. \_\_\_\_\_
6. \_\_\_\_\_
7. \_\_\_\_\_
8. \_\_\_\_\_
9. \_\_\_\_\_
10. \_\_\_\_\_
11. \_\_\_\_\_
12. \_\_\_\_\_
13. \_\_\_\_\_
14. \_\_\_\_\_
15. \_\_\_\_\_



Determinar si la figura mostrada es una forma regular o irregular.



**Respuestas**

1. Regulare

2. Regulare

3. Regulare

4. Irregulare

5. Irregulare

6. Regulare

7. Regulare

8. Irregulare

9. Irregulare

10. Regulare

11. Irregulare

12. Irregulare

13. Regulare

14. Irregulare

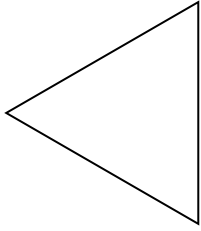
15. Regulare



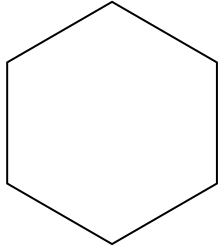
Determinar si la figura mostrada es una forma regular o irregular.

**Respuestas**


1)



2)

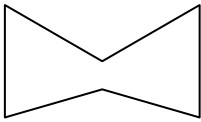


3)




1. \_\_\_\_\_

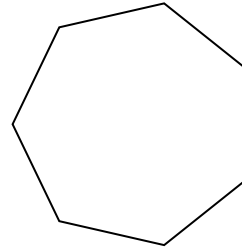
4)



5)



6)



2. \_\_\_\_\_

3. \_\_\_\_\_

4. \_\_\_\_\_

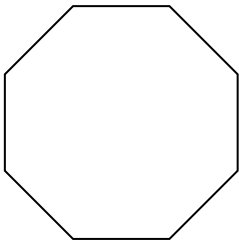
5. \_\_\_\_\_

6. \_\_\_\_\_


7. \_\_\_\_\_

8. \_\_\_\_\_

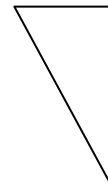
7)



8)



9)



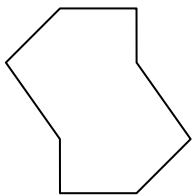
9. \_\_\_\_\_

10. \_\_\_\_\_

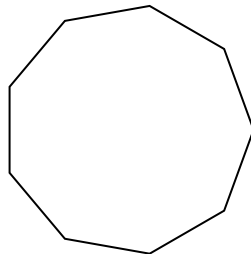
11. \_\_\_\_\_

12. \_\_\_\_\_

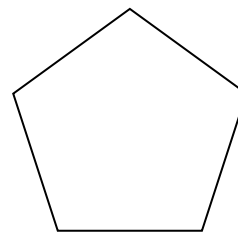
10)



11)



12)

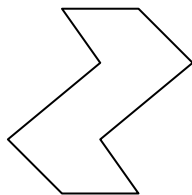


13. \_\_\_\_\_


14. \_\_\_\_\_

15. \_\_\_\_\_

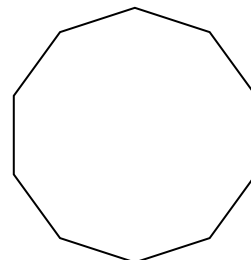
13)



14)



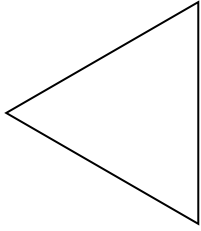
15)



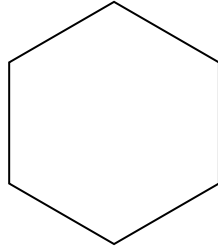


Determinar si la figura mostrada es una forma regular o irregular.


1)



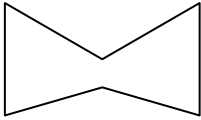
2)




3)



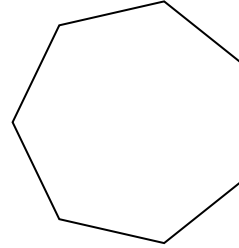
4)



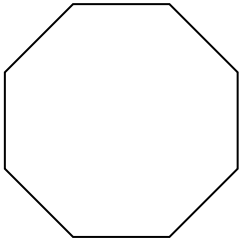
5)




6)



7)



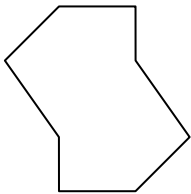
8)



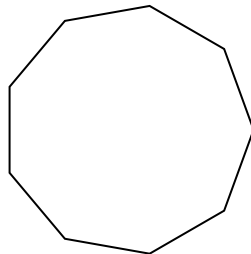
9)



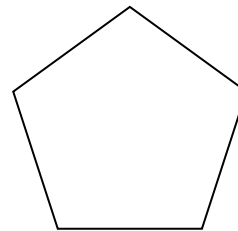
10)



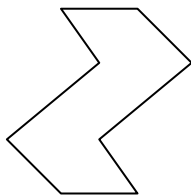
11)




12)



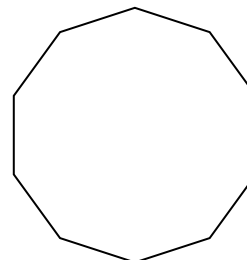
13)



14)



15)



**Respuestas**

1. Regulare

2. Regulare

3. Irregulare

4. Irregulare

5. Irregulare

6. Regulare

7. Regulare

8. Regulare

9. Irregulare

10. Irregulare

11. Regulare

12. Regulare

13. Irregulare

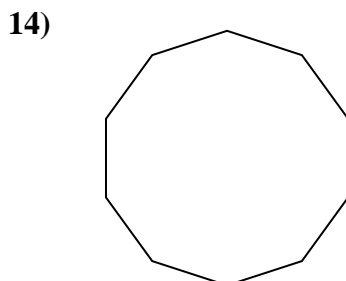
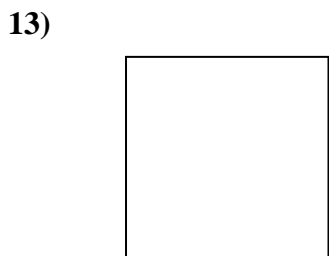
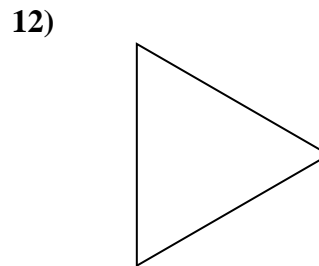
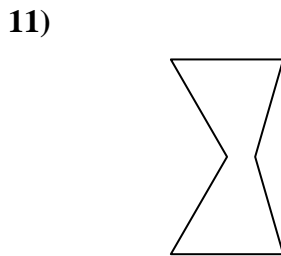
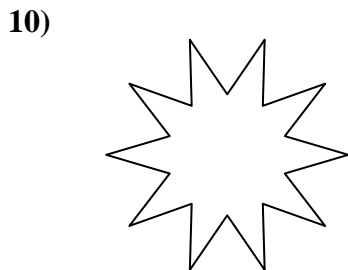
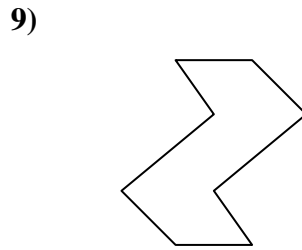
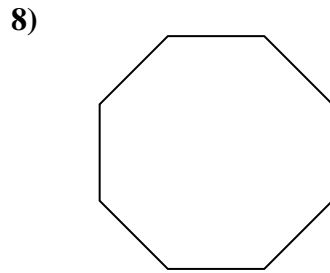
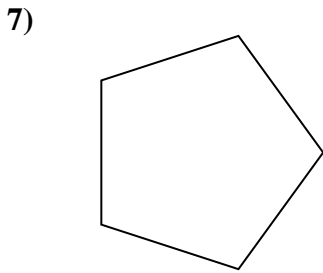
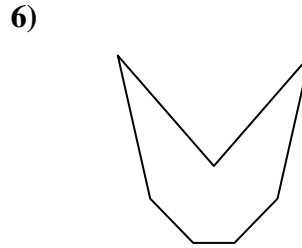
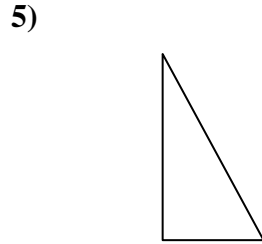
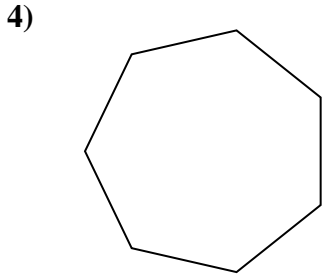
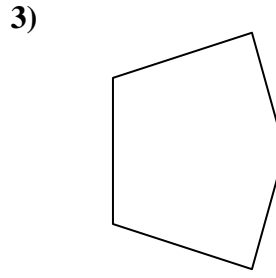
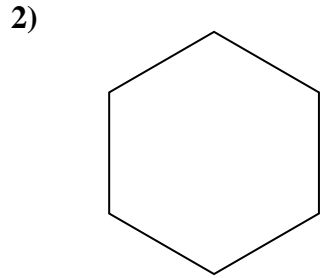
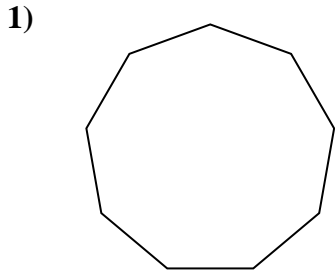
14. Irregulare

15. Regulare



Determinar si la figura mostrada es una forma regular o irregular.

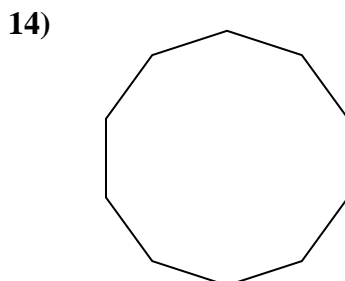
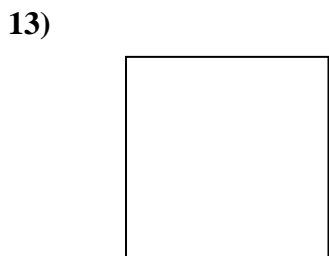
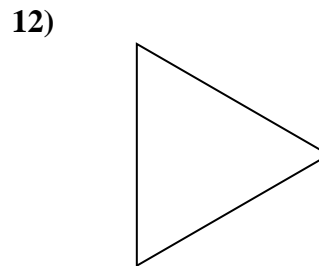
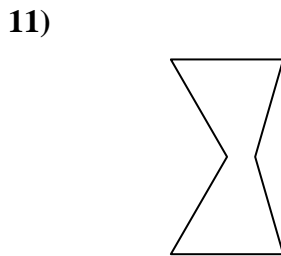
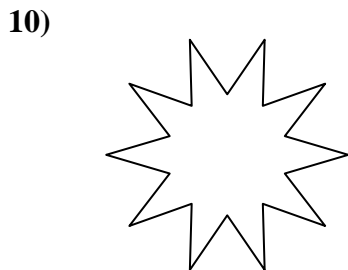
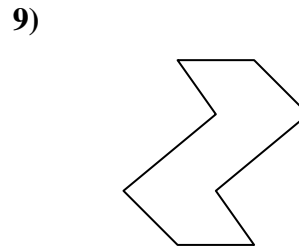
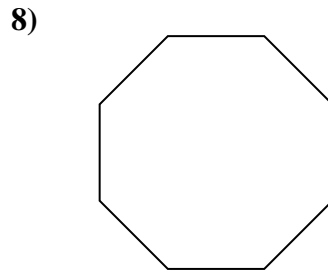
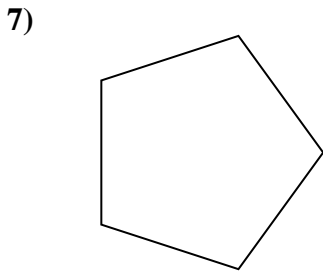
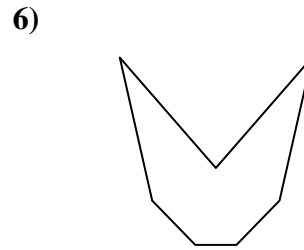
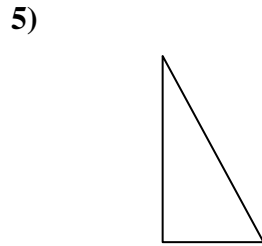
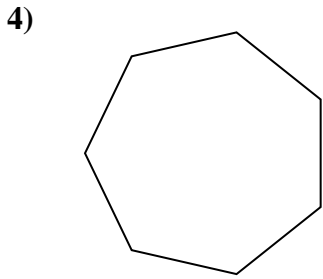
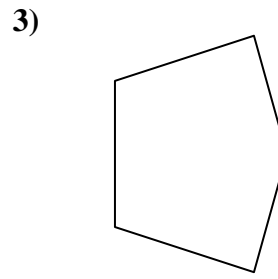
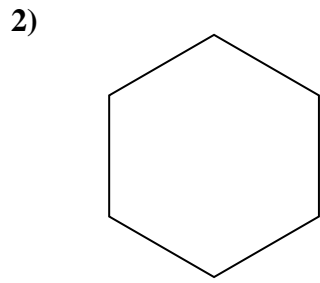
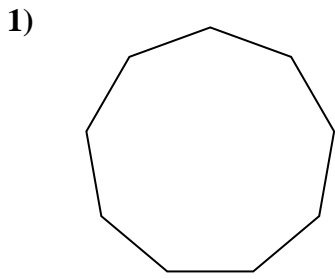
**Respuestas**



1. \_\_\_\_\_
2. \_\_\_\_\_
3. \_\_\_\_\_
4. \_\_\_\_\_
5. \_\_\_\_\_
6. \_\_\_\_\_
7. \_\_\_\_\_
8. \_\_\_\_\_
9. \_\_\_\_\_
10. \_\_\_\_\_
11. \_\_\_\_\_
12. \_\_\_\_\_
13. \_\_\_\_\_
14. \_\_\_\_\_
15. \_\_\_\_\_



Determinar si la figura mostrada es una forma regular o irregular.



**Respuestas**

1. Regulare

2. Regulare

3. Irregulare

4. Regulare

5. Irregulare

6. Irregulare

7. Regulare

8. Regulare

9. Irregulare

10. Irregulare

11. Irregulare

12. Regulare

13. Regulare

14. Regulare

15. Irregulare

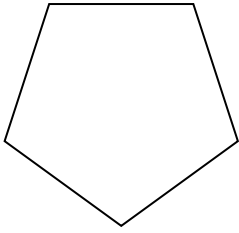




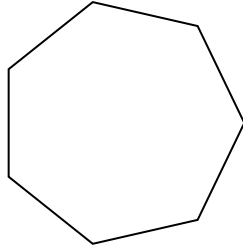
Determinar si la figura mostrada es una forma regular o irregular.

**Respuestas**

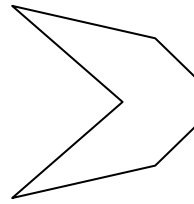
1)



2)




3)

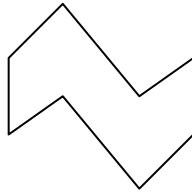


1. \_\_\_\_\_

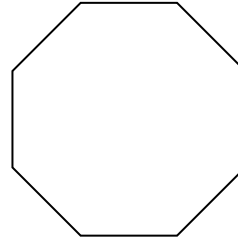
4)



5)

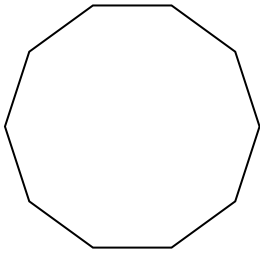


6)

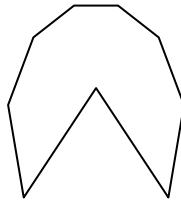


2. \_\_\_\_\_

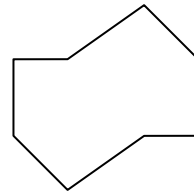
7)



8)

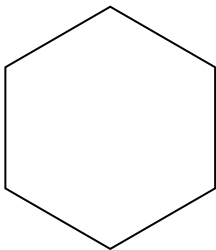


9)

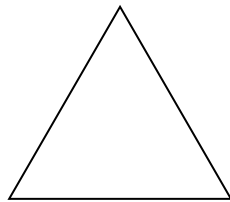


3. \_\_\_\_\_

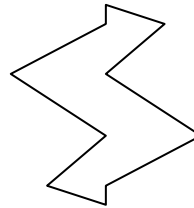
10)



11)




12)

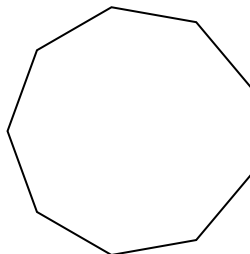


4. \_\_\_\_\_


13)



14)



15)



5. \_\_\_\_\_

6. \_\_\_\_\_

7. \_\_\_\_\_

8. \_\_\_\_\_

9. \_\_\_\_\_

10. \_\_\_\_\_

11. \_\_\_\_\_

12. \_\_\_\_\_


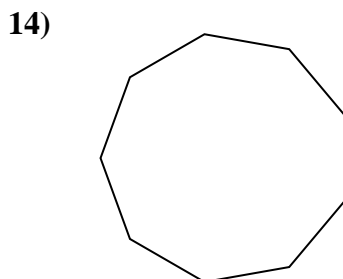
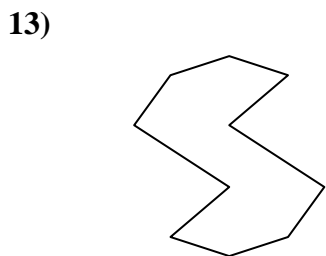
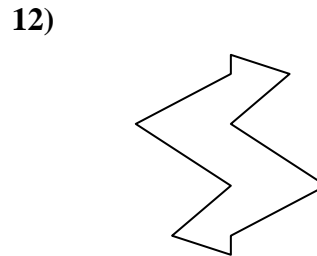
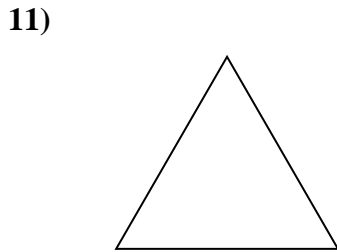
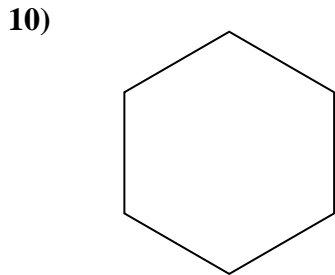
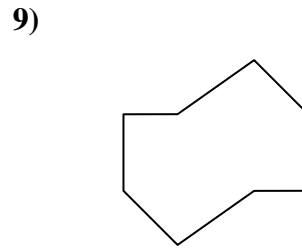
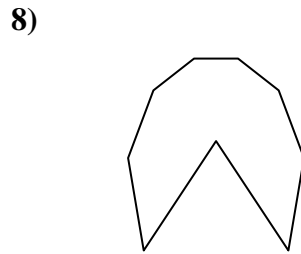
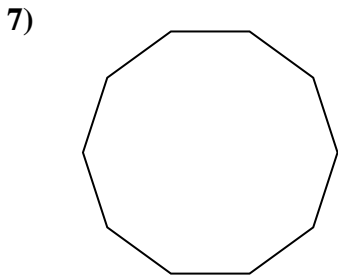
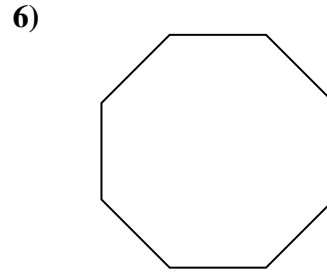
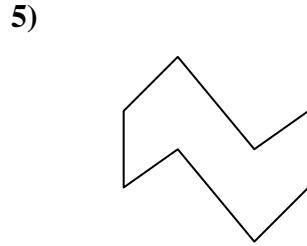
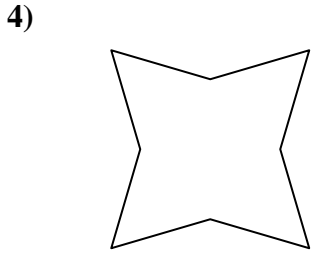
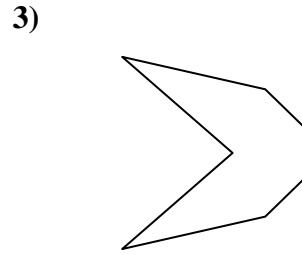
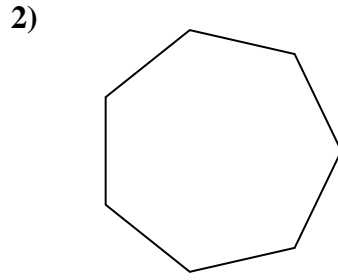
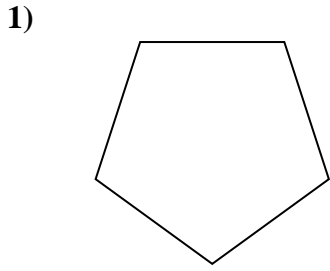
13. \_\_\_\_\_

14. \_\_\_\_\_

15. \_\_\_\_\_



Determinar si la figura mostrada es una forma regular o irregular.



**Respuestas**

1. Regulare

2. Regulare

3. Irregulare

4. Irregulare

5. Irregulare

6. Regulare

7. Regulare

8. Irregulare

9. Irregulare

10. Regulare

11. Regulare

12. Irregulare

13. Irregulare

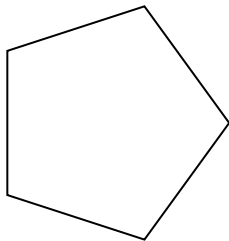
14. Regulare

15. Irregulare

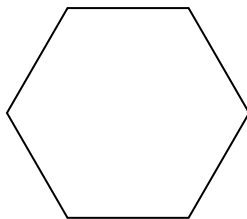


Determinar si la figura mostrada es una forma regular o irregular.

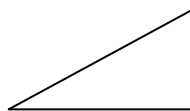
1)



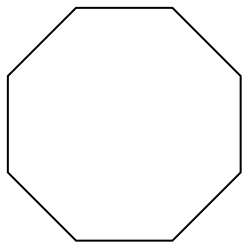
2)



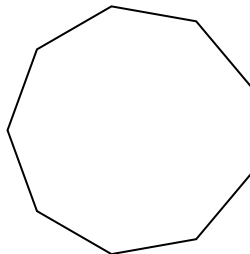
3)



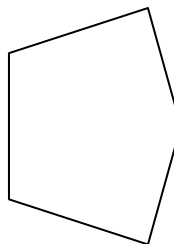
4)



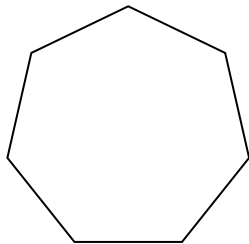
5)



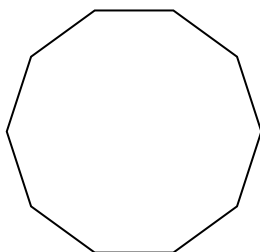
6)



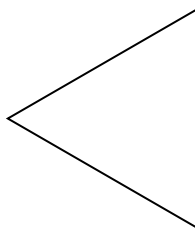
7)




8)




9)



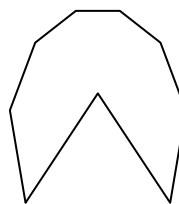
10)




11)




12)



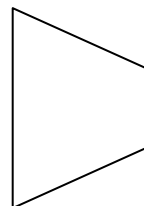
13)



14)



15)



**Respuestas**

1. \_\_\_\_\_

2. \_\_\_\_\_

3. \_\_\_\_\_

4. \_\_\_\_\_

5. \_\_\_\_\_

6. \_\_\_\_\_

7. \_\_\_\_\_

8. \_\_\_\_\_

9. \_\_\_\_\_

10. \_\_\_\_\_

11. \_\_\_\_\_

12. \_\_\_\_\_

13. \_\_\_\_\_

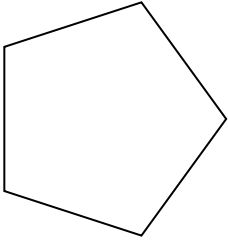
14. \_\_\_\_\_

15. \_\_\_\_\_

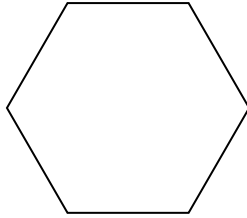


Determinar si la figura mostrada es una forma regular o irregular.

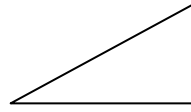
1)



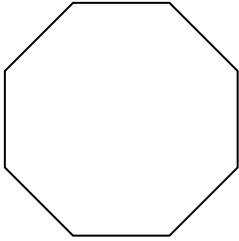
2)



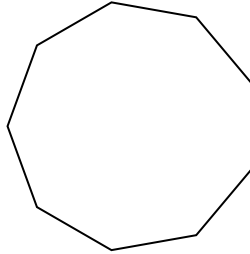
3)



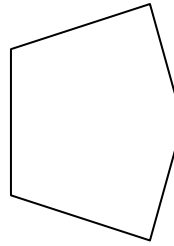
4)



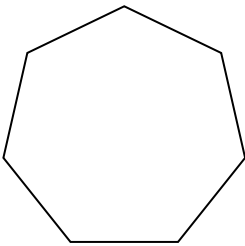
5)



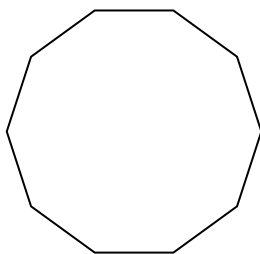
6)



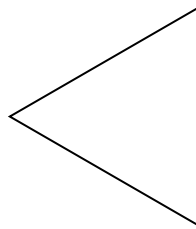
7)




8)




9)



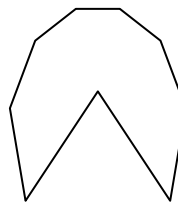
10)




11)




12)



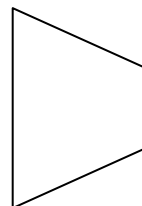
13)



14)



15)



**Respuestas**

1. Regulare

2. Regulare

3. Irregulare

4. Regulare

5. Regulare

6. Irregulare

7. Regulare

8. Regulare

9. Regulare

10. Irregulare

11. Regulare

12. Irregulare

13. Irregulare

14. Irregulare

15. Irregulare