





Determinar si la figura se está trasladando (deslizando), rotando (girando) o reflejando (volteando)

Respuestas


1)



2)



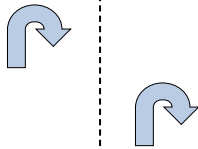
3)



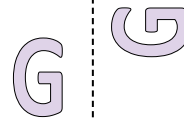
4)



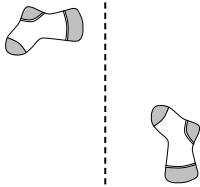
5)



6)



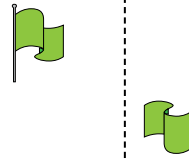
7)




8)



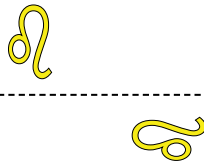
9)



10)




11)



12)



13)



14)



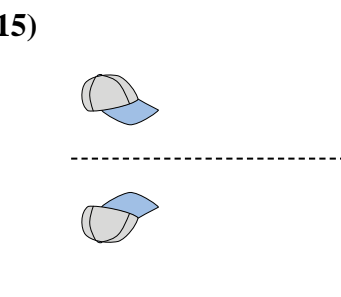
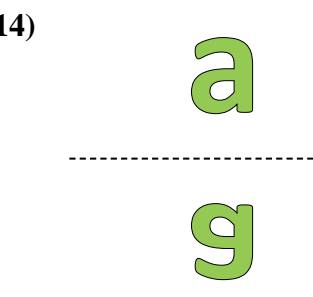
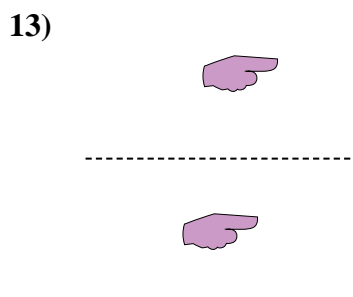
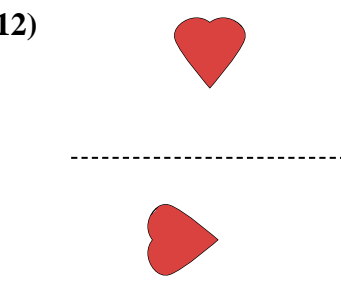
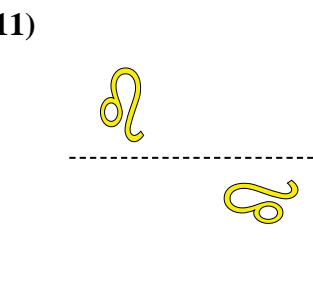
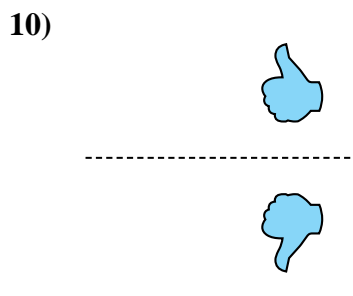
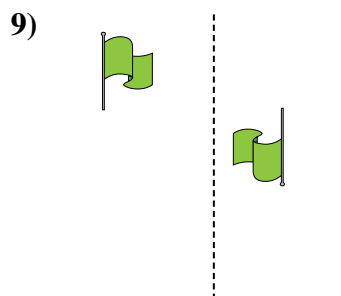
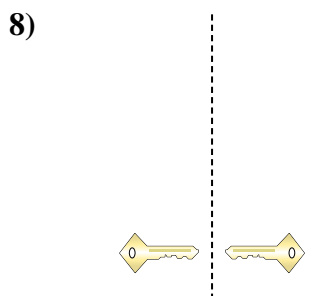
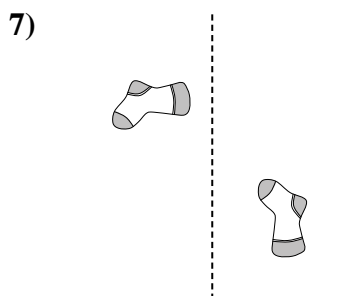
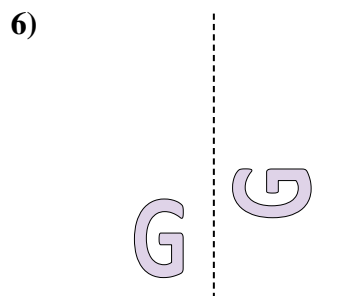
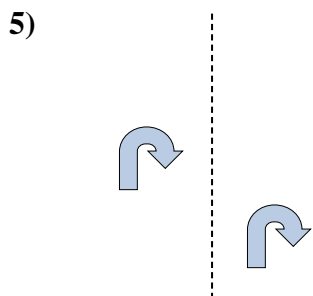
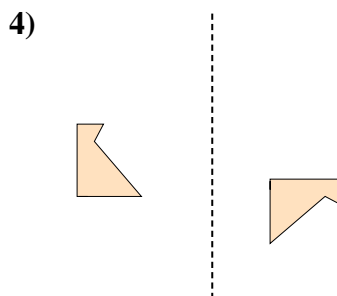
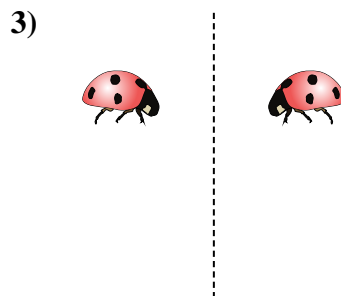
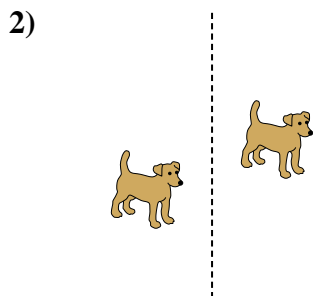
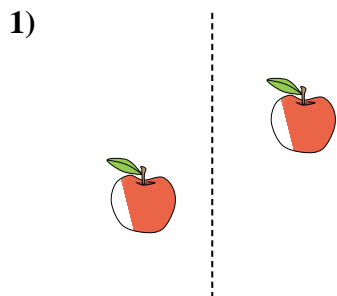
15)



1. _____
2. _____
3. _____
4. _____
5. _____
6. _____
7. _____
8. _____
9. _____
10. _____
11. _____
12. _____
13. _____
14. _____
15. _____



Determinar si la figura se está trasladando (deslizando), rotando (girando) o reflejando (volteando)



Respuestas

1. deslizando

2. deslizando

3. volteando

4. girando

5. deslizando

6. girando

7. girando

8. volteando

9. girando

10. volteando

11. girando

12. girando

13. deslizando

14. volteando

15. volteando