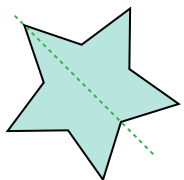




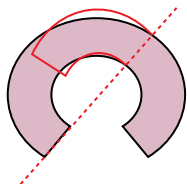
**Determinar si la línea a través de cada figura es una línea de simetría.**

## Respuestas

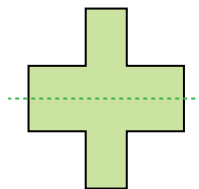
**Ej)**



1)



2)



Ej.            **si**

1. **no**

2. **si**

3. **si**

4. **no**

5. **si**

6. **no**

7. **no**

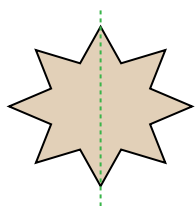
8. **no**

9. **no**

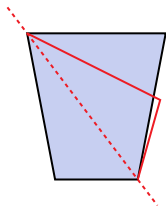
10. **no**

11. **si**

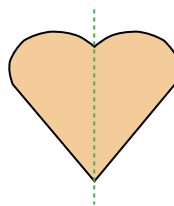
**3)**



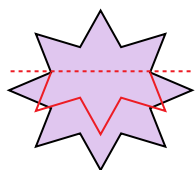
4)



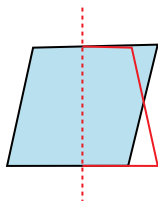
5)



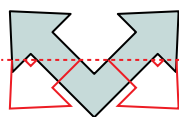
6)



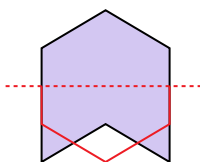
**7)**



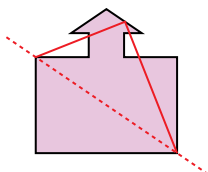
**8)**



9)



10)



11)

