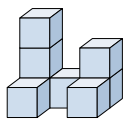


**Resuelve cada problema.****Respuestas**

- 1) If you were looking at the 3d shape from above what would you see?



A.



B.



C.



D.



1. \_\_\_\_\_

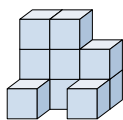
2. \_\_\_\_\_

3. \_\_\_\_\_

4. \_\_\_\_\_

5. \_\_\_\_\_

- 2) If you were looking at the 3d shape from above what would you see?



A.



B.



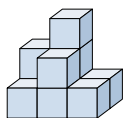
C.



D.



- 3) If you were looking at the 3d shape from the right side what would you see?



A.



B.



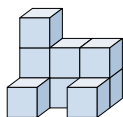
C.



D.



- 4) If you were looking at the 3d shape from above what would you see?



A.



B.



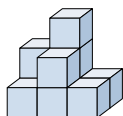
C.



D.



- 5) If you were looking at the 3d shape from above what would you see?



A.



B.



C.



D.

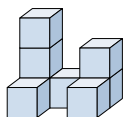




Resuelve cada problema.

**Respuestas**

- 1) If you were looking at the 3d shape from above what would you see?



A.



B.



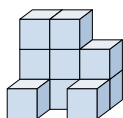
C.



D.

1. **A**

- 2) If you were looking at the 3d shape from above what would you see?



A.



B.



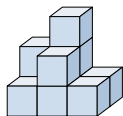
C.



D.

2. **C**3. **D**4. **A**5. **C**

- 3) If you were looking at the 3d shape from the right side what would you see?



A.



B.



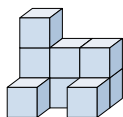
C.



D.



- 4) If you were looking at the 3d shape from above what would you see?



A.



B.



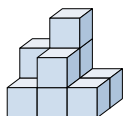
C.



D.



- 5) If you were looking at the 3d shape from above what would you see?



A.



B.



C.

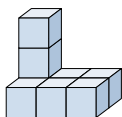


D.



**Resuelve cada problema.****Respuestas**

- 1) If you were looking at the 3d shape from the right side what would you see?



A.



B.



C.



D.



1. \_\_\_\_\_

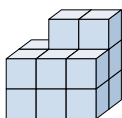
2. \_\_\_\_\_

3. \_\_\_\_\_

4. \_\_\_\_\_

5. \_\_\_\_\_

- 2) If you were looking at the 3d shape from the back what would you see?



A.



B.



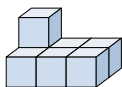
C.



D.



- 3) If you were looking at the 3d shape from the right side what would you see?



A.



B.



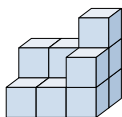
C.



D.



- 4) If you were looking at the 3d shape from above what would you see?



A.



B.



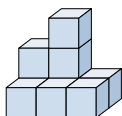
C.



D.



- 5) If you were looking at the 3d shape from the back what would you see?



A.



B.



C.



D.

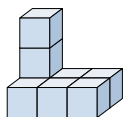




Resuelve cada problema.

**Respuestas**

- 1) If you were looking at the 3d shape from the right side what would you see?



A.



B.



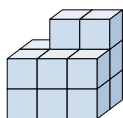
C.



D.

1. **C**

- 2) If you were looking at the 3d shape from the back what would you see?



A.



B.



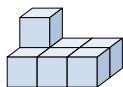
C.



D.

2. **C**3. **A**4. **B**5. **B**

- 3) If you were looking at the 3d shape from the right side what would you see?



A.



B.



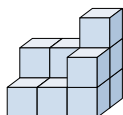
C.



D.



- 4) If you were looking at the 3d shape from above what would you see?



A.



B.



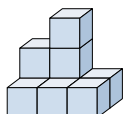
C.



D.



- 5) If you were looking at the 3d shape from the back what would you see?



A.



B.



C.

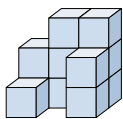


D.



**Resuelve cada problema.****Respuestas**

- 1) If you were looking at the 3d shape from the back what would you see?



A.



B.



C.



D.



1. \_\_\_\_\_

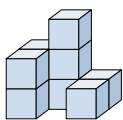
2. \_\_\_\_\_

3. \_\_\_\_\_

4. \_\_\_\_\_

5. \_\_\_\_\_

- 2) If you were looking at the 3d shape from the back what would you see?



A.



B.



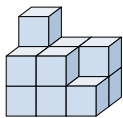
C.



D.



- 3) If you were looking at the 3d shape from the back what would you see?



A.



B.



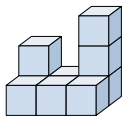
C.



D.



- 4) If you were looking at the 3d shape from the left side what would you see?



A.



B.



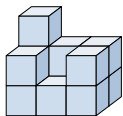
C.



D.



- 5) If you were looking at the 3d shape from the back what would you see?



A.



B.



C.



D.

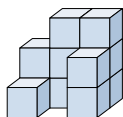




Resuelve cada problema.

**Respuestas**

- 1) If you were looking at the 3d shape from the back what would you see?



A.



B.



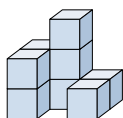
C.



D.

1. **B**

- 2) If you were looking at the 3d shape from the back what would you see?



A.



B.



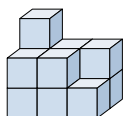
C.



D.

2. **B**3. **C**4. **B**5. **C**

- 3) If you were looking at the 3d shape from the back what would you see?



A.



B.



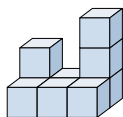
C.



D.



- 4) If you were looking at the 3d shape from the left side what would you see?



A.



B.



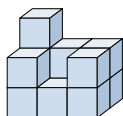
C.



D.



- 5) If you were looking at the 3d shape from the back what would you see?



A.



B.



C.

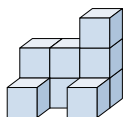


D.



**Resuelve cada problema.****Respuestas**

- 1) If you were looking at the 3d shape from above what would you see?



A.



B.



C.



D.



1. \_\_\_\_\_

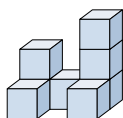
2. \_\_\_\_\_

3. \_\_\_\_\_

4. \_\_\_\_\_

5. \_\_\_\_\_

- 2) If you were looking at the 3d shape from the left side what would you see?



A.



B.



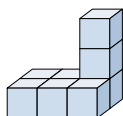
C.



D.



- 3) If you were looking at the 3d shape from above what would you see?



A.



B.



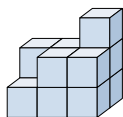
C.



D.



- 4) If you were looking at the 3d shape from the left side what would you see?



A.



B.



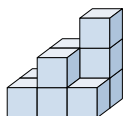
C.



D.



- 5) If you were looking at the 3d shape from the right side what would you see?



A.



B.



C.



D.

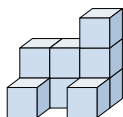




Resuelve cada problema.

**Respuestas**

- 1) If you were looking at the 3d shape from above what would you see?



A.



B.



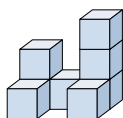
C.



D.

1. **B**

- 2) If you were looking at the 3d shape from the left side what would you see?



A.



B.



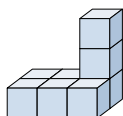
C.



D.

2. **A**3. **B**4. **D**5. **D**

- 3) If you were looking at the 3d shape from above what would you see?



A.



B.



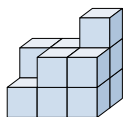
C.



D.



- 4) If you were looking at the 3d shape from the left side what would you see?



A.



B.



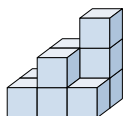
C.



D.



- 5) If you were looking at the 3d shape from the right side what would you see?



A.



B.



C.



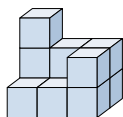
D.





**Resuelve cada problema.****Respuestas**

- 1) If you were looking at the 3d shape from the right side what would you see?



A.



B.



C.



D.



1. \_\_\_\_\_

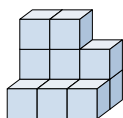
2. \_\_\_\_\_

3. \_\_\_\_\_

4. \_\_\_\_\_

5. \_\_\_\_\_

- 2) If you were looking at the 3d shape from the left side what would you see?



A.



B.



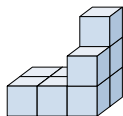
C.



D.



- 3) If you were looking at the 3d shape from above what would you see?



A.



B.



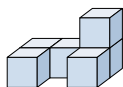
C.



D.



- 4) If you were looking at the 3d shape from the left side what would you see?



A.



B.



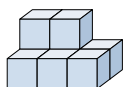
C.



D.



- 5) If you were looking at the 3d shape from the right side what would you see?



A.



B.



C.

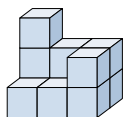


D.



**Resuelve cada problema.****Respuestas**

- 1) If you were looking at the 3d shape from the right side what would you see?



A.



B.



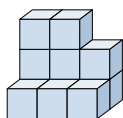
C.



D.

1. **D**

- 2) If you were looking at the 3d shape from the left side what would you see?



A.



B.



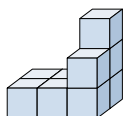
C.



D.

2. **A**3. **A**4. **D**5. **B**

- 3) If you were looking at the 3d shape from above what would you see?



A.



B.



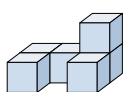
C.



D.



- 4) If you were looking at the 3d shape from the left side what would you see?



A.



B.



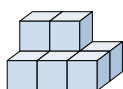
C.



D.



- 5) If you were looking at the 3d shape from the right side what would you see?



A.



B.



C.

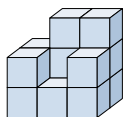


D.



**Resuelve cada problema.****Respuestas**

- 1) If you were looking at the 3d shape from the left side what would you see?



A.



B.



C.



D.



1. \_\_\_\_\_

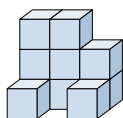
2. \_\_\_\_\_

3. \_\_\_\_\_

4. \_\_\_\_\_

5. \_\_\_\_\_

- 2) If you were looking at the 3d shape from above what would you see?



A.



B.



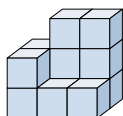
C.



D.



- 3) If you were looking at the 3d shape from the back what would you see?



A.



B.



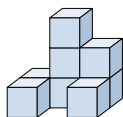
C.



D.



- 4) If you were looking at the 3d shape from the left side what would you see?



A.



B.



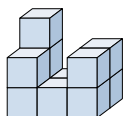
C.



D.



- 5) If you were looking at the 3d shape from the left side what would you see?



A.



B.



C.



D.

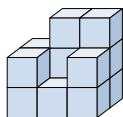




Resuelve cada problema.

**Respuestas**

- 1) If you were looking at the 3d shape from the left side what would you see?



A.



B.



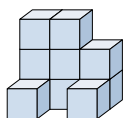
C.



D.

1. **C**

- 2) If you were looking at the 3d shape from above what would you see?



A.



B.



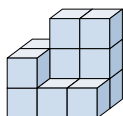
C.



D.

2. **A**3. **A**4. **C**5. **D**

- 3) If you were looking at the 3d shape from the back what would you see?



A.



B.



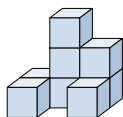
C.



D.



- 4) If you were looking at the 3d shape from the left side what would you see?



A.



B.



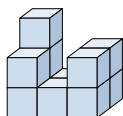
C.



D.



- 5) If you were looking at the 3d shape from the left side what would you see?



A.



B.



C.

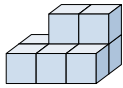


D.



**Resuelve cada problema.****Respuestas**

- 1) If you were looking at the 3d shape from the left side what would you see?



A.



B.



C.



D.



1. \_\_\_\_\_

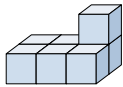
2. \_\_\_\_\_

3. \_\_\_\_\_

4. \_\_\_\_\_

5. \_\_\_\_\_

- 2) If you were looking at the 3d shape from the right side what would you see?



A.



B.



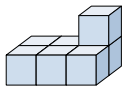
C.



D.



- 3) If you were looking at the 3d shape from the back what would you see?



A.



B.



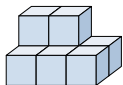
C.



D.



- 4) If you were looking at the 3d shape from above what would you see?



A.



B.



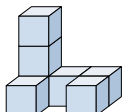
C.



D.



- 5) If you were looking at the 3d shape from above what would you see?



A.



B.



C.



D.

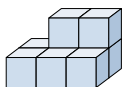




Resuelve cada problema.

**Respuestas**

- 1) If you were looking at the 3d shape from the left side what would you see?



A.



B.



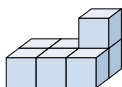
C.



D.

1. **A**

- 2) If you were looking at the 3d shape from the right side what would you see?



A.



B.



C.



D.

2. **D**3. **D**4. **B**5. **D**

- 3) If you were looking at the 3d shape from the back what would you see?



A.



B.



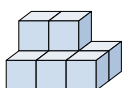
C.



D.



- 4) If you were looking at the 3d shape from above what would you see?



A.



B.



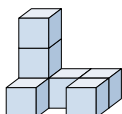
C.



D.



- 5) If you were looking at the 3d shape from above what would you see?



A.



B.



C.

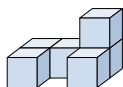


D.



**Resuelve cada problema.****Respuestas**

- 1) If you were looking at the 3d shape from the right side what would you see?



A.



B.



C.



D.



1. \_\_\_\_\_

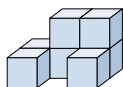
2. \_\_\_\_\_

3. \_\_\_\_\_

4. \_\_\_\_\_

5. \_\_\_\_\_

- 2) If you were looking at the 3d shape from the right side what would you see?



A.



B.



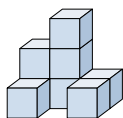
C.



D.



- 3) If you were looking at the 3d shape from the back what would you see?



A.



B.



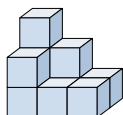
C.



D.



- 4) If you were looking at the 3d shape from above what would you see?



A.



B.



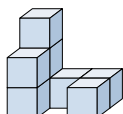
C.



D.



- 5) If you were looking at the 3d shape from the right side what would you see?



A.



B.



C.

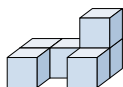


D.



**Resuelve cada problema.****Respuestas**

- 1) If you were looking at the 3d shape from the right side what would you see?



A.



B.



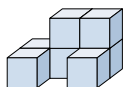
C.



D.

1. **A**

- 2) If you were looking at the 3d shape from the right side what would you see?



A.



B.



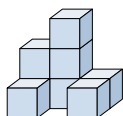
C.



D.

2. **C**3. **D**4. **B**5. **B**

- 3) If you were looking at the 3d shape from the back what would you see?



A.



B.



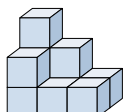
C.



D.



- 4) If you were looking at the 3d shape from above what would you see?



A.



B.



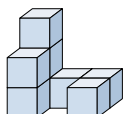
C.



D.



- 5) If you were looking at the 3d shape from the right side what would you see?



A.



B.



C.



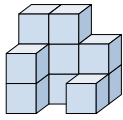
D.





**Resuelve cada problema.****Respuestas**

- 1) If you were looking at the 3d shape from the right side what would you see?



A.



B.



C.



D.



1. \_\_\_\_\_

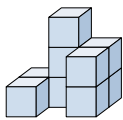
2. \_\_\_\_\_

3. \_\_\_\_\_

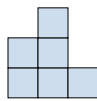
4. \_\_\_\_\_

5. \_\_\_\_\_

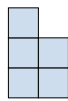
- 2) If you were looking at the 3d shape from the right side what would you see?



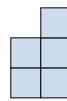
A.



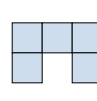
B.



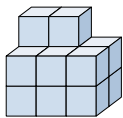
C.



D.



- 3) If you were looking at the 3d shape from above what would you see?



A.



B.



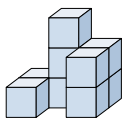
C.



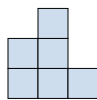
D.



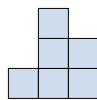
- 4) If you were looking at the 3d shape from the left side what would you see?



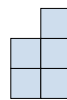
A.



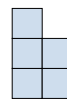
B.



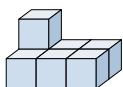
C.



D.



- 5) If you were looking at the 3d shape from the left side what would you see?



A.



B.



C.



D.

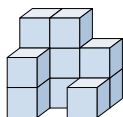




Resuelve cada problema.

**Respuestas**

- 1) If you were looking at the 3d shape from the right side what would you see?



A.



B.



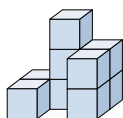
C.



D.

1. **B**

- 2) If you were looking at the 3d shape from the right side what would you see?



A.



B.



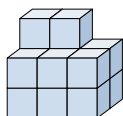
C.



D.

2. **C**3. **B**4. **D**5. **B**

- 3) If you were looking at the 3d shape from above what would you see?



A.



B.



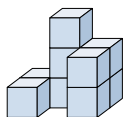
C.



D.



- 4) If you were looking at the 3d shape from the left side what would you see?



A.



B.



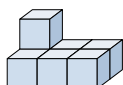
C.



D.



- 5) If you were looking at the 3d shape from the left side what would you see?



A.



B.



C.

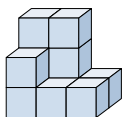


D.



**Resuelve cada problema.****Respuestas**

- 1) If you were looking at the 3d shape from the right side what would you see?



A.



B.



C.



D.



1. \_\_\_\_\_

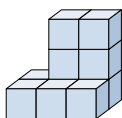
2. \_\_\_\_\_

3. \_\_\_\_\_

4. \_\_\_\_\_

5. \_\_\_\_\_

- 2) If you were looking at the 3d shape from the back what would you see?



A.



B.



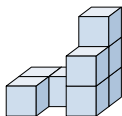
C.



D.



- 3) If you were looking at the 3d shape from the back what would you see?



A.



B.



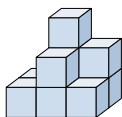
C.



D.



- 4) If you were looking at the 3d shape from the back what would you see?



A.



B.



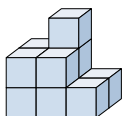
C.



D.



- 5) If you were looking at the 3d shape from above what would you see?



A.



B.



C.



D.

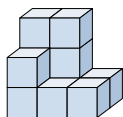




Resuelve cada problema.

**Respuestas**

- 1) If you were looking at the 3d shape from the right side what would you see?



A.



B.



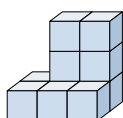
C.



D.

1. **D**

- 2) If you were looking at the 3d shape from the back what would you see?



A.



B.



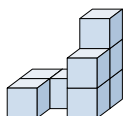
C.



D.

2. **A**3. **C**4. **C**5. **A**

- 3) If you were looking at the 3d shape from the back what would you see?



A.



B.



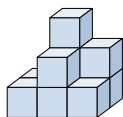
C.



D.



- 4) If you were looking at the 3d shape from the back what would you see?



A.



B.



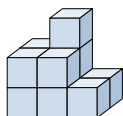
C.



D.



- 5) If you were looking at the 3d shape from above what would you see?



A.



B.



C.



D.

