



Resuelve cada problema.

Respuestas

1) Inicio: _____
 Transcurrido: 1 hr y 35 mins
 Final: 1:50

1. _____

2) Inicio: _____
 Transcurrido: 1 hr y 25 mins
 Final: 12:55

2. _____

3) Inicio: _____
 Transcurrido: 1 hr y 35 mins
 Final: 6:45

3. _____

4) Inicio: _____
 Transcurrido: 1 hr y 10 mins
 Final: 12:10

4. _____

5) Inicio: _____
 Transcurrido: 1 hr y 10 mins
 Final: 1:40

5. _____

6) Inicio: _____
 Transcurrido: 1 hr y 25 mins
 Final: 2:05

6. _____

7) Inicio: _____
 Transcurrido: 1 hr y 50 mins
 Final: 11:30

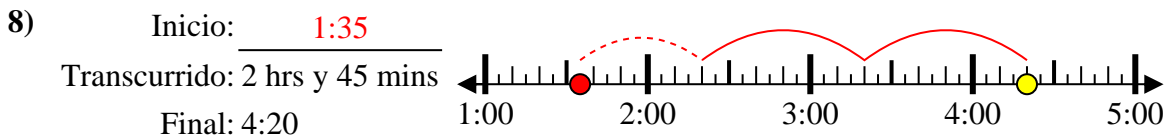
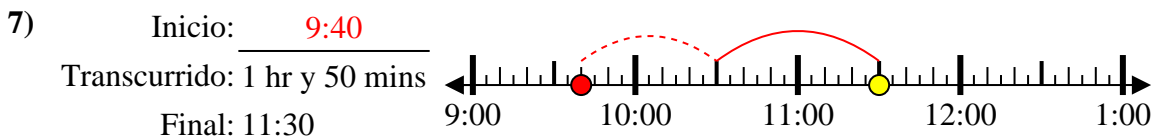
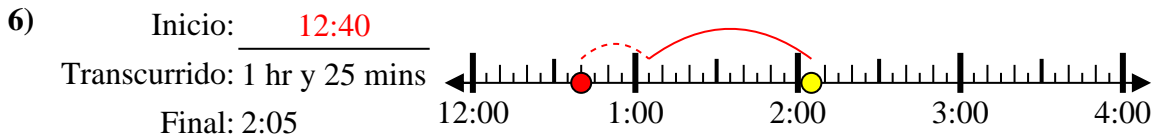
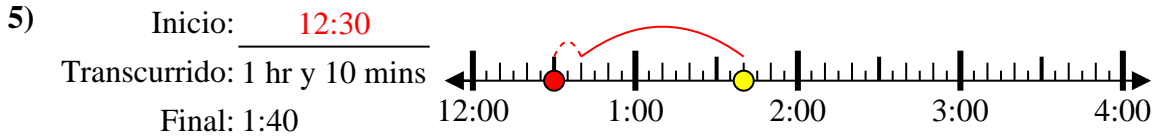
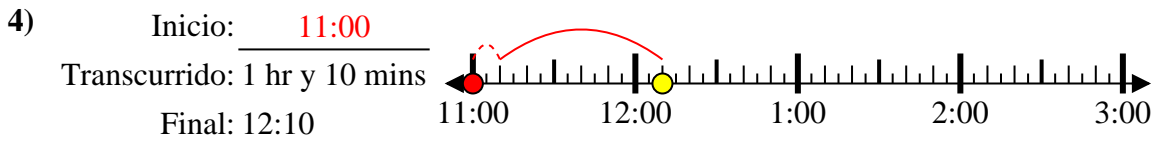
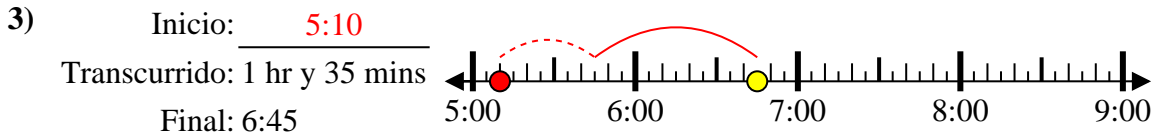
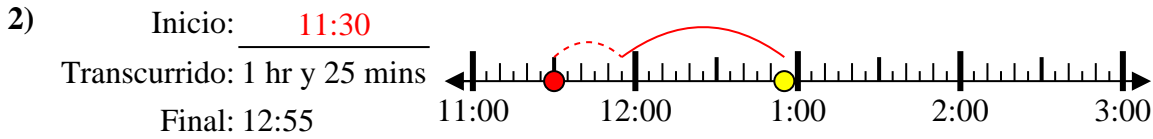
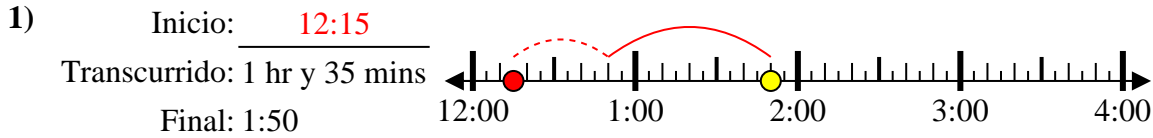
7. _____

8) Inicio: _____
 Transcurrido: 2 hrs y 45 mins
 Final: 4:20

8. _____



Resuelve cada problema.



Respuestas

1. 12:15

2. 11:30

3. 5:10

4. 11:00

5. 12:30

6. 12:40

7. 9:40

8. 1:35