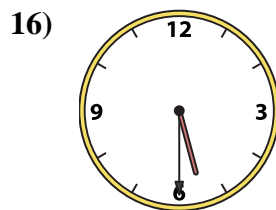
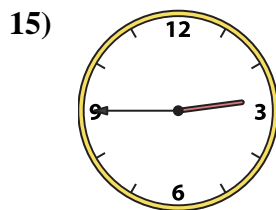
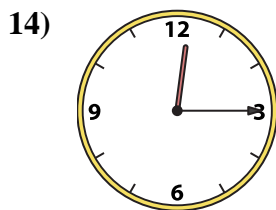
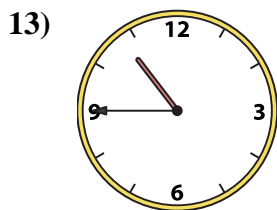
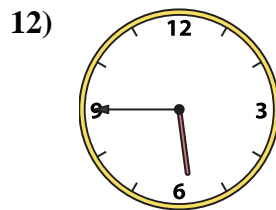
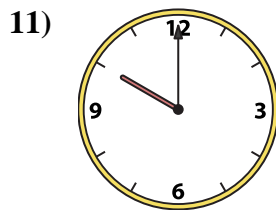
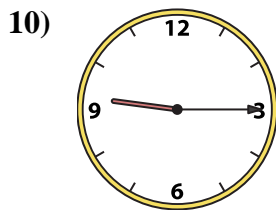
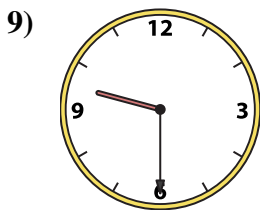
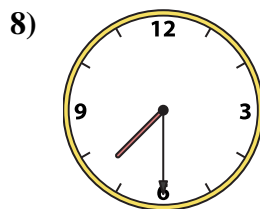
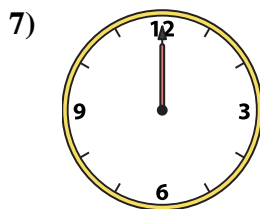
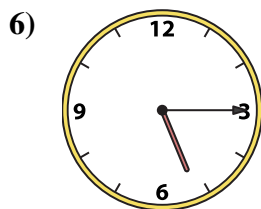
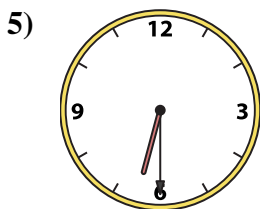
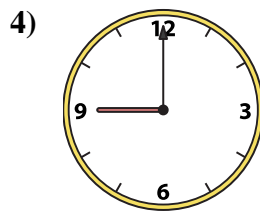
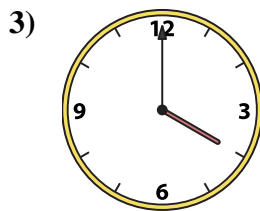
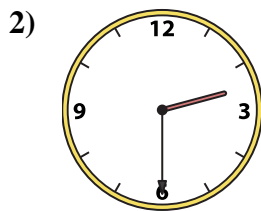
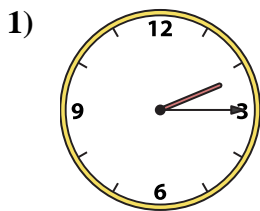




Emparejar el reloj analógico con el reloj digital correspondiente.

**Respuestas**



1. \_\_\_\_\_
2. \_\_\_\_\_
3. \_\_\_\_\_
4. \_\_\_\_\_
5. \_\_\_\_\_
6. \_\_\_\_\_
7. \_\_\_\_\_
8. \_\_\_\_\_
9. \_\_\_\_\_
10. \_\_\_\_\_
11. \_\_\_\_\_
12. \_\_\_\_\_
13. \_\_\_\_\_
14. \_\_\_\_\_
15. \_\_\_\_\_
16. \_\_\_\_\_

A. 7:30

B. 9:15

C. 2:30

D. 10:00

E. 6:30

F. 5:15

G. 5:45

H. 9:30

I. 4:00

J. 2:45

K. 10:45

L. 12:15

M. 12:00

N. 2:15

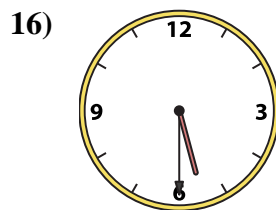
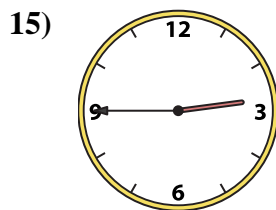
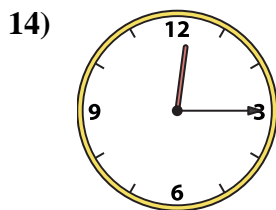
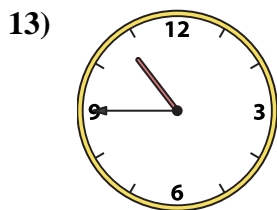
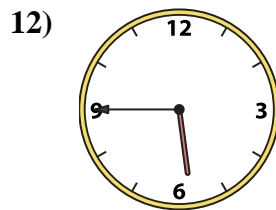
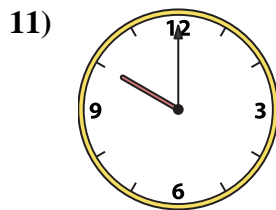
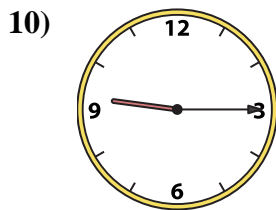
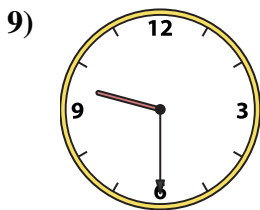
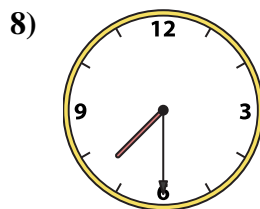
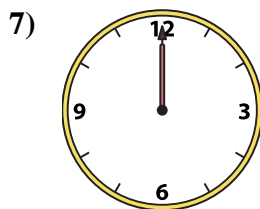
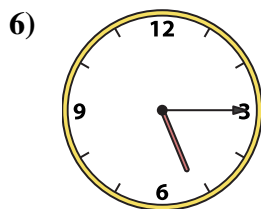
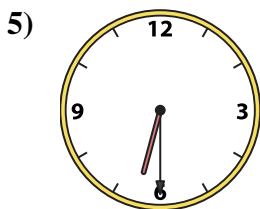
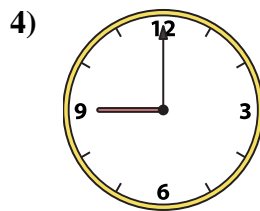
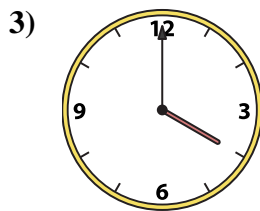
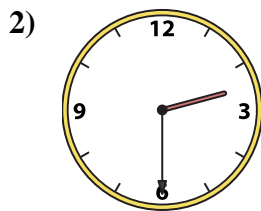
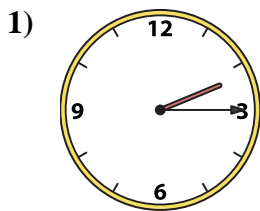
O. 9:00

P. 5:30



Emparejar el reloj analógico con el reloj digital correspondiente.

**Respuestas**



A. 7:30

B. 9:15

C. 2:30

D. 10:00

E. 6:30

F. 5:15

G. 5:45

H. 9:30

I. 4:00

J. 2:45

K. 10:45

L. 12:15

M. 12:00

N. 2:15

O. 9:00

P. 5:30

- 1.     N
- 2.     C
- 3.     I
- 4.     O
- 5.     E
- 6.     F
- 7.     M
- 8.     A
- 9.     H
- 10.    B
- 11.    D
- 12.    G
- 13.    K
- 14.    L
- 15.    J
- 16.    P