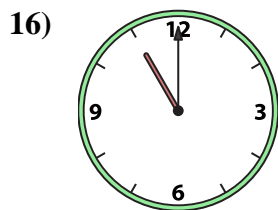
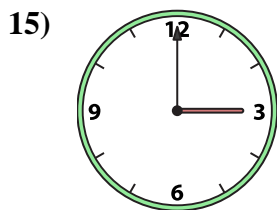
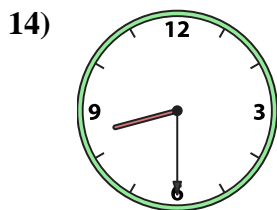
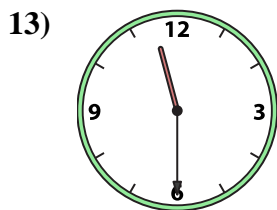
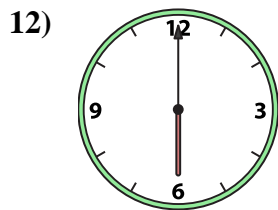
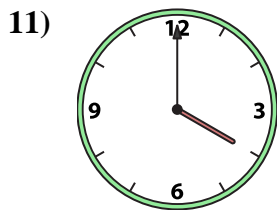
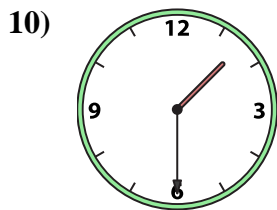
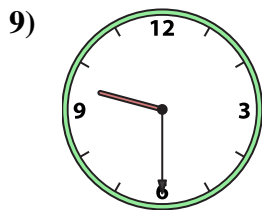
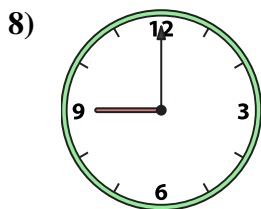
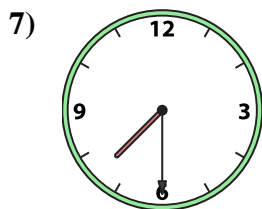

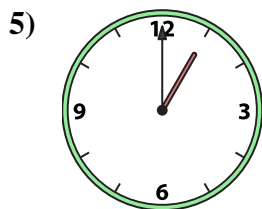
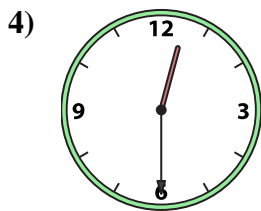
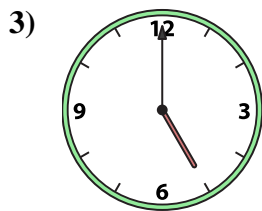
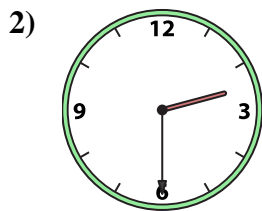
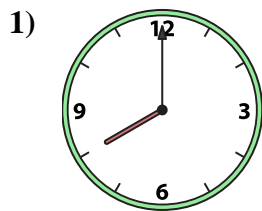




Emparejar el reloj analógico con el reloj digital correspondiente.

Respuestas



1. _____
2. _____
3. _____
4. _____
5. _____
6. _____
7. _____
8. _____
9. _____
10. _____
11. _____
12. _____
13. _____
14. _____
15. _____
16. _____

A. 5:00

B. 9:30

C. 2:30

D. 3:00

E. 7:30

F. 8:00

G. 11:00

H. 6:00

I. 4:00

J. 12:30

K. 9:00

L. 1:30

M. 11:30

N. 1:00

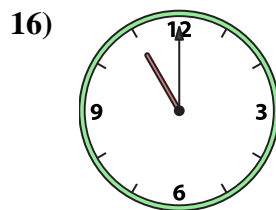
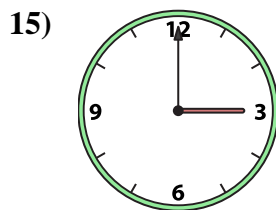
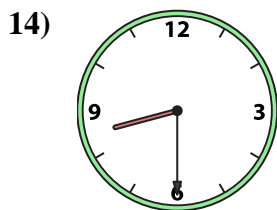
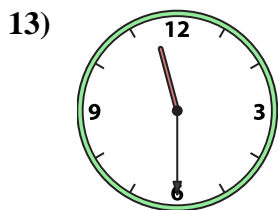
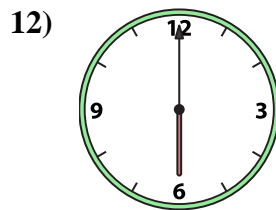
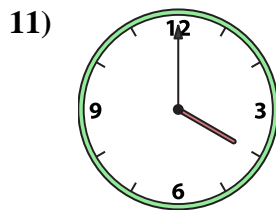
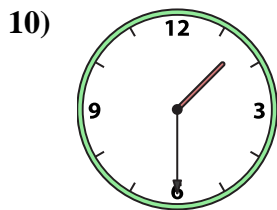
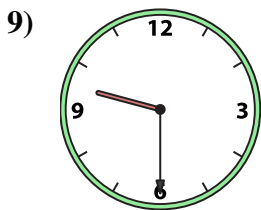
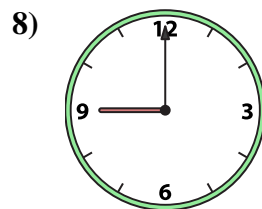
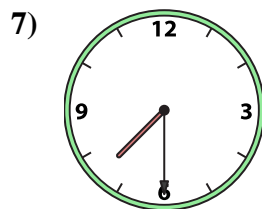


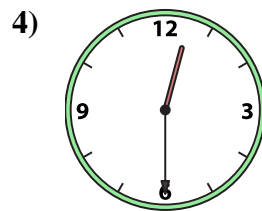
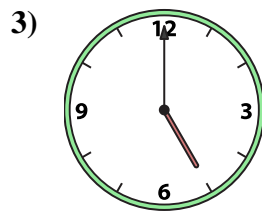
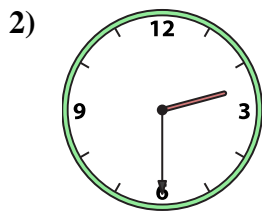

O. 8:30

P. 2:00



Emparejar el reloj analógico con el reloj digital correspondiente.

Respuestas



A. 5:00

B. 9:30

C. 2:30

D. 3:00

E. 7:30

F. 8:00

G. 11:00

H. 6:00

I. 4:00

J. 12:30

K. 9:00

L. 1:30

M. 11:30

N. 1:00

O. 8:30

P. 2:00

- 1. **F**
- 2. **C**
- 3. **A**
- 4. **J**
- 5. **N**
- 6. **P**
- 7. **E**
- 8. **K**
- 9. **B**
- 10. **L**
- 11. **I**
- 12. **H**
- 13. **M**
- 14. **O**
- 15. **D**
- 16. **G**