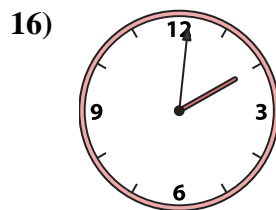
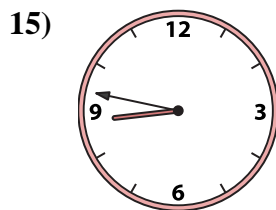
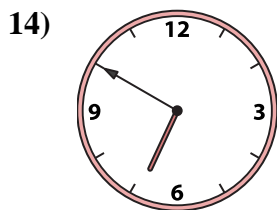

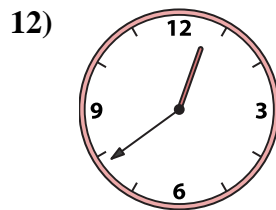
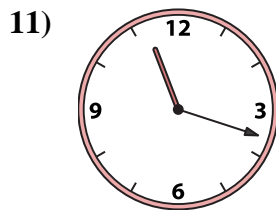
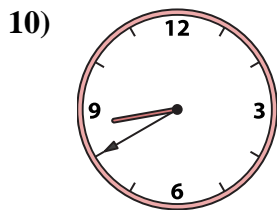
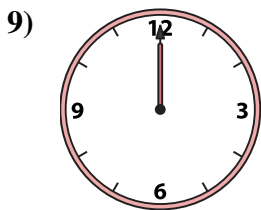
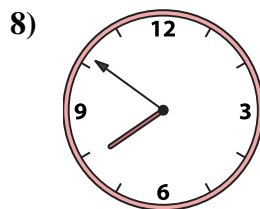
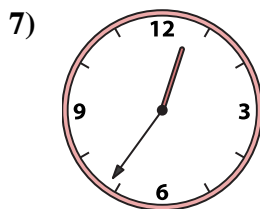

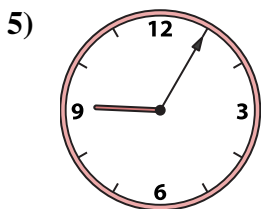
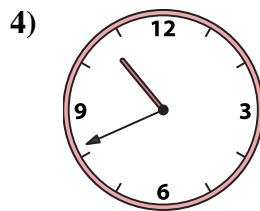
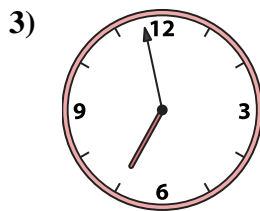
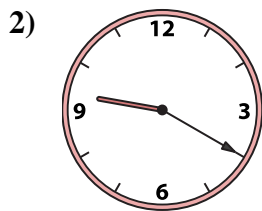
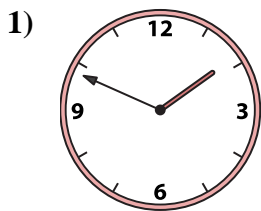




Emparejar el reloj analógico con el reloj digital correspondiente.

Respuestas



1. \_\_\_\_\_
2. \_\_\_\_\_
3. \_\_\_\_\_
4. \_\_\_\_\_
5. \_\_\_\_\_
6. \_\_\_\_\_
7. \_\_\_\_\_
8. \_\_\_\_\_
9. \_\_\_\_\_
10. \_\_\_\_\_
11. \_\_\_\_\_
12. \_\_\_\_\_
13. \_\_\_\_\_
14. \_\_\_\_\_
15. \_\_\_\_\_
16. \_\_\_\_\_

A. 12:36

B. 2:02

C. 7:51

D. 9:05

E. 2:01

F. 7:03

G. 11:18

H. 1:49

I. 6:50

J. 12:00

K. 6:58

L. 10:41

M. 12:39

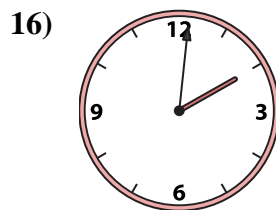
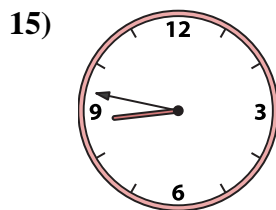
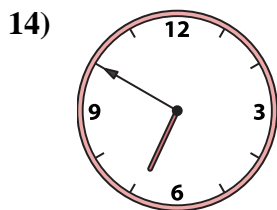

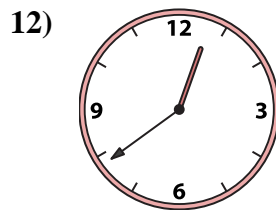
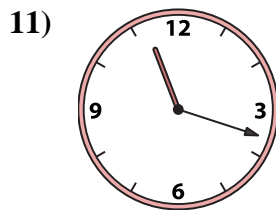
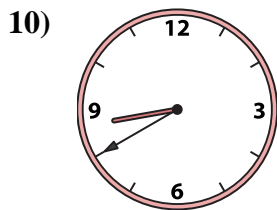
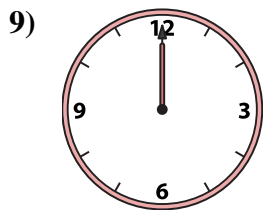
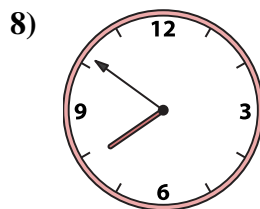
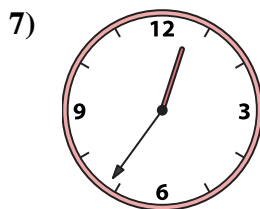


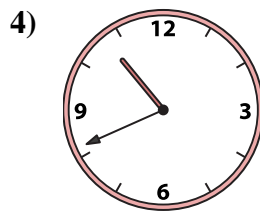
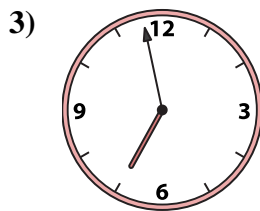
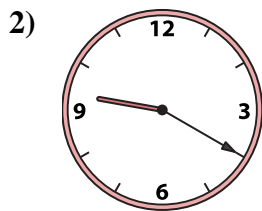
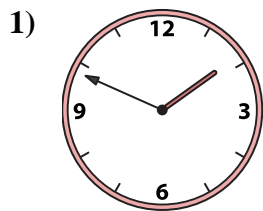
N. 8:47

O. 9:20

P. 8:40



Emparejar el reloj analógico con el reloj digital correspondiente.



Respuestas

1. H

2. O

3. K

4. L

5. D

6. B

7. A

8. C

9. J

10. P

11. G

12. M

13. F

14. I

15. N

16. E

A. 12:36

B. 2:02

C. 7:51

D. 9:05

E. 2:01

F. 7:03

G. 11:18

H. 1:49

I. 6:50

J. 12:00

K. 6:58

L. 10:41

M. 12:39

N. 8:47

O. 9:20

P. 8:40