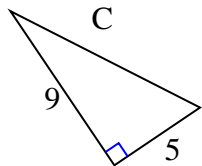




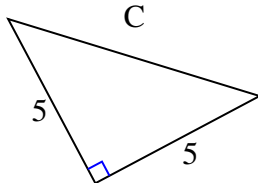
Encuentra el valor de 'C', redondea tu respuesta al centésimo más cercano.

Respuestas

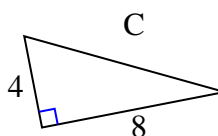
1)



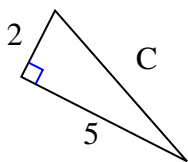
2)



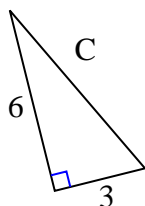
3)



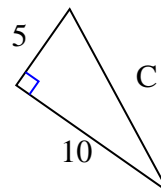
4)



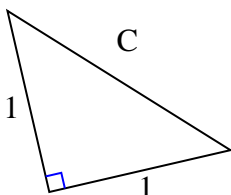
5)



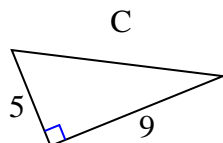
6)



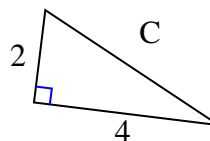
7)



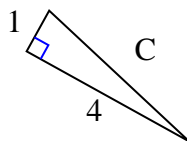
8)



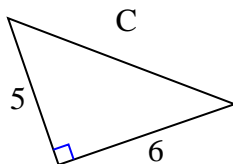
9)



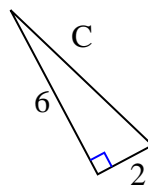
10)



11)



12)



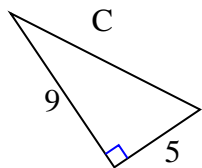
1. _____
2. _____
3. _____
4. _____
5. _____
6. _____
7. _____
8. _____
9. _____
10. _____
11. _____
12. _____



Encuentra el valor de 'C', redondea tu respuesta al centésimo más cercano.

Respuestas

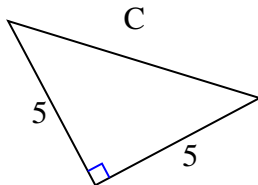
1)



$$81 + 25 = 106$$

$$\sqrt{106} = 10.3$$

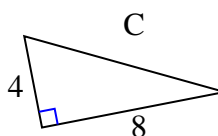
2)



$$25 + 25 = 50$$

$$\sqrt{50} = 7.07$$

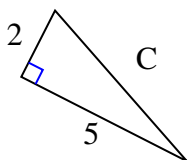
3)



$$16 + 64 = 80$$

$$\sqrt{80} = 8.94$$

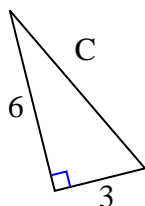
4)



$$4 + 25 = 29$$

$$\sqrt{29} = 5.39$$

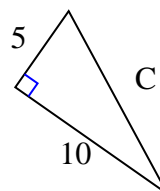
5)



$$36 + 9 = 45$$

$$\sqrt{45} = 6.71$$

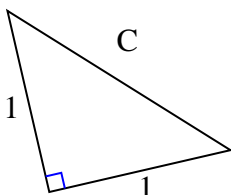
6)



$$25 + 100 = 125$$

$$\sqrt{125} = 11.18$$

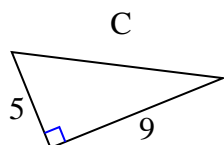
7)



$$1 + 1 = 2$$

$$\sqrt{2} = 1.41$$

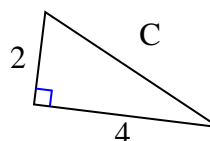
8)



$$25 + 81 = 106$$

$$\sqrt{106} = 10.3$$

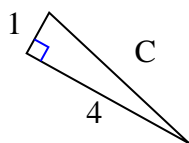
9)



$$4 + 16 = 20$$

$$\sqrt{20} = 4.47$$

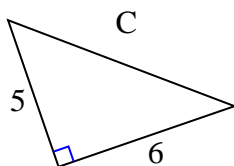
10)



$$1 + 16 = 17$$

$$\sqrt{17} = 4.12$$

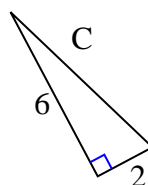
11)



$$25 + 36 = 61$$

$$\sqrt{61} = 7.81$$

12)



$$36 + 4 = 40$$

$$\sqrt{40} = 6.32$$

1. **10.3**2. **7.07**3. **8.94**4. **5.39**5. **6.71**6. **11.18**7. **1.41**8. **10.3**9. **4.47**10. **4.12**11. **7.81**12. **6.32**