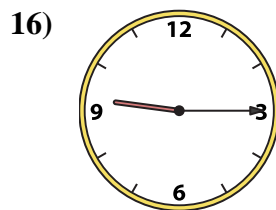
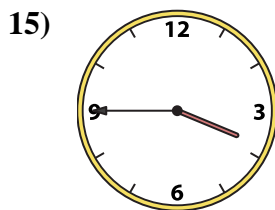
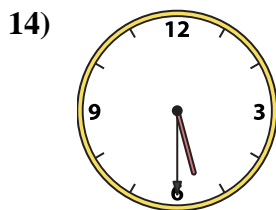
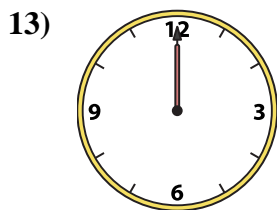
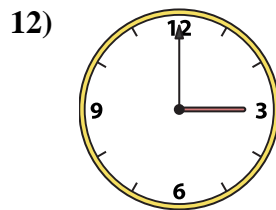
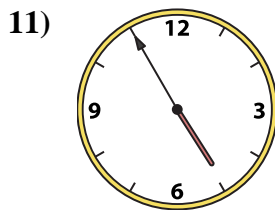
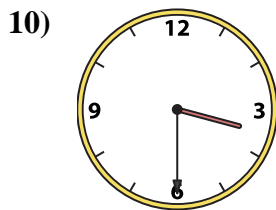
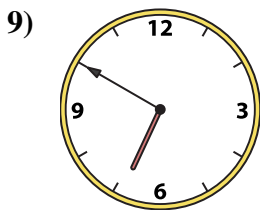
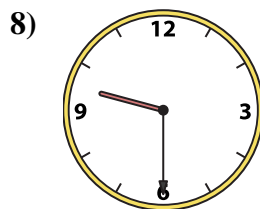
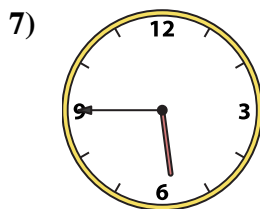

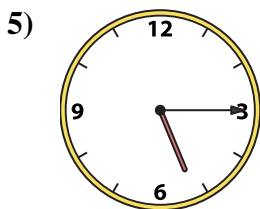
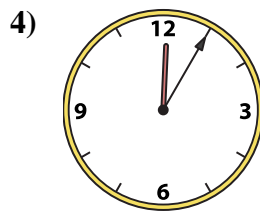
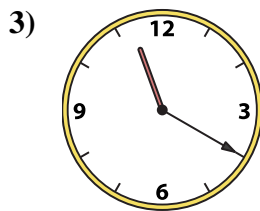
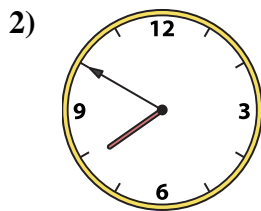
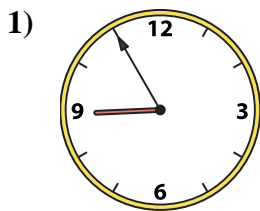




Emparejar el reloj analógico con el reloj digital correspondiente.

Respuestas



A. 5:45

B. 3:00

C. 3:45

D. 12:05

E. 3:30

F. 6:50

G. 7:50

H. 12:00

I. 9:30

J. 3:55

K. 4:55

L. 8:55

M. 5:15

N. 9:15

O. 11:20

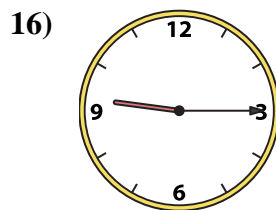
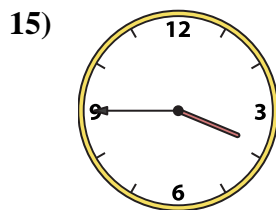
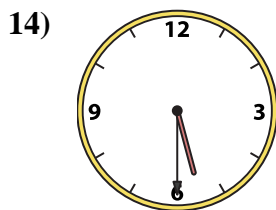
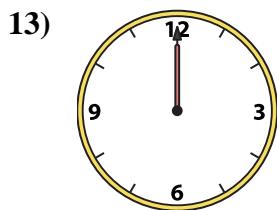
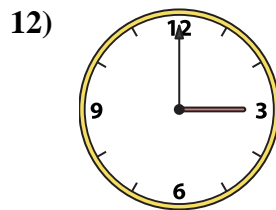
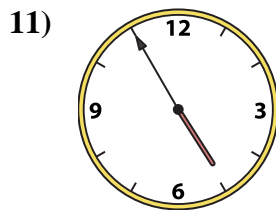
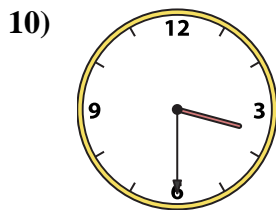
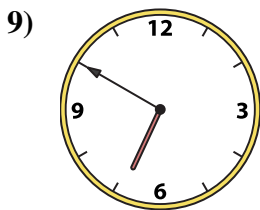
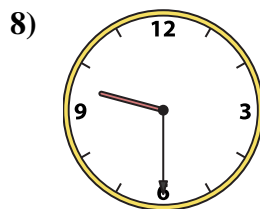
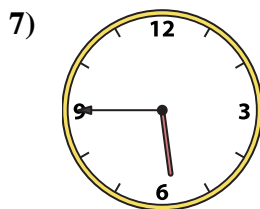

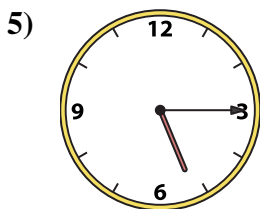
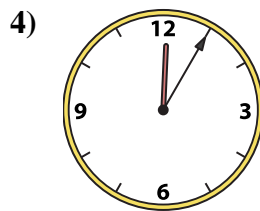
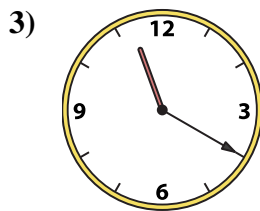
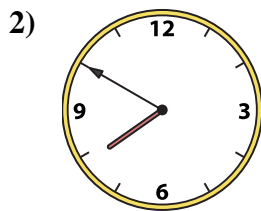
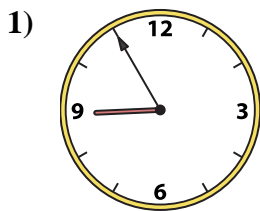
P. 5:30

- 1. \_\_\_\_\_
- 2. \_\_\_\_\_
- 3. \_\_\_\_\_
- 4. \_\_\_\_\_
- 5. \_\_\_\_\_
- 6. \_\_\_\_\_
- 7. \_\_\_\_\_
- 8. \_\_\_\_\_
- 9. \_\_\_\_\_
- 10. \_\_\_\_\_
- 11. \_\_\_\_\_
- 12. \_\_\_\_\_
- 13. \_\_\_\_\_
- 14. \_\_\_\_\_
- 15. \_\_\_\_\_
- 16. \_\_\_\_\_



Emparejar el reloj analógico con el reloj digital correspondiente.

**Respuestas**



A. 5:45

B. 3:00

C. 3:45

D. 12:05

E. 3:30

F. 6:50

G. 7:50

H. 12:00

I. 9:30

J. 3:55

K. 4:55

L. 8:55

M. 5:15

N. 9:15

O. 11:20

P. 5:30

- 1.   **L**
- 2.   **G**
- 3.   **O**
- 4.   **D**
- 5.   **M**
- 6.   **J**
- 7.   **A**
- 8.   **I**
- 9.   **F**
- 10.   **E**
- 11.   **K**
- 12.   **B**
- 13.   **H**
- 14.   **P**
- 15.   **C**
- 16.   **N**