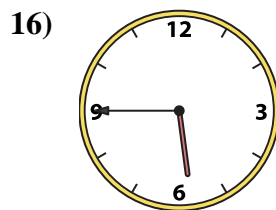
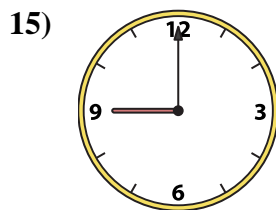
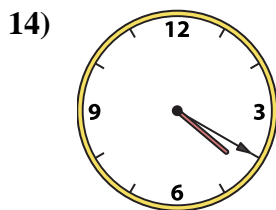
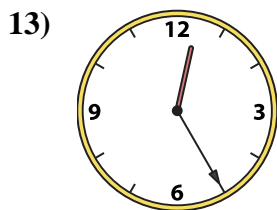
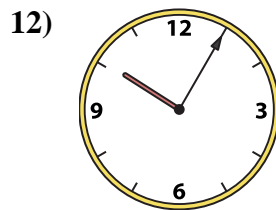
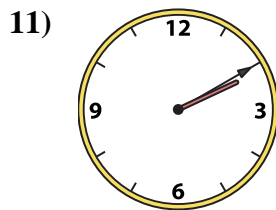
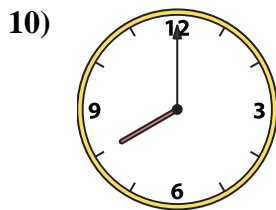
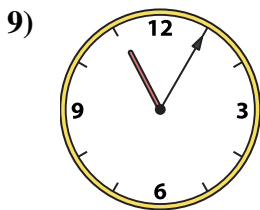
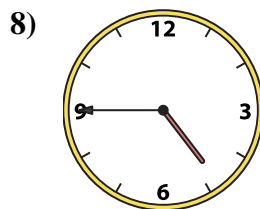
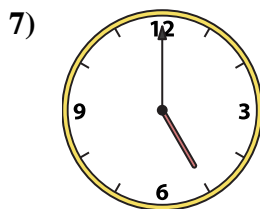
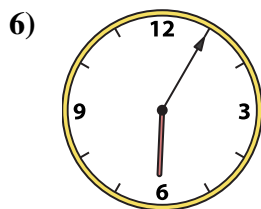
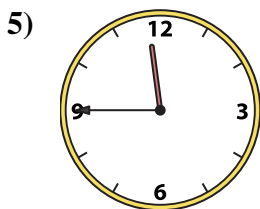
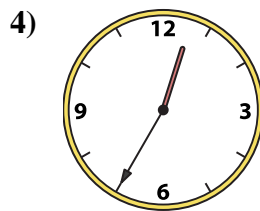
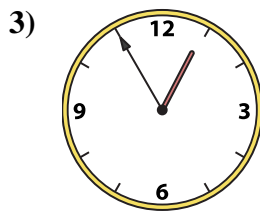
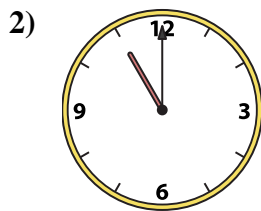
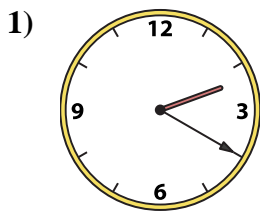




Emparejar el reloj analógico con el reloj digital correspondiente.

Respuestas



1. _____

2. _____

3. _____

4. _____

5. _____

6. _____

7. _____

8. _____

9. _____

10. _____

11. _____

12. _____

13. _____

14. _____

15. _____

16. _____

A. 11:45

B. 5:00

C. 12:35

D. 11:05

E. 2:20

F. 2:10

G. 5:45

H. 12:55

I. 9:00

J. 4:45

K. 12:25

L. 8:00

M. 11:00

N. 4:20

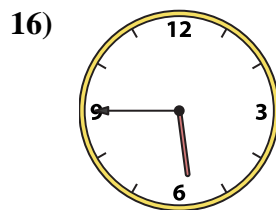
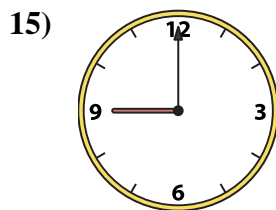
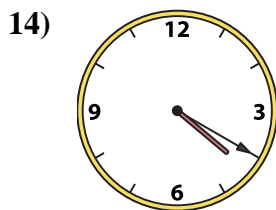

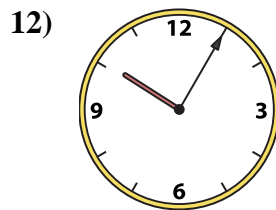
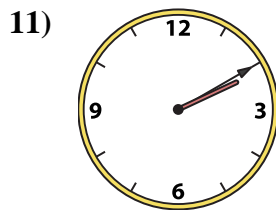
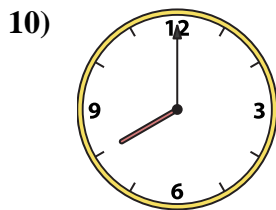
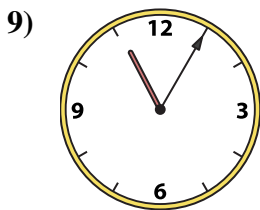
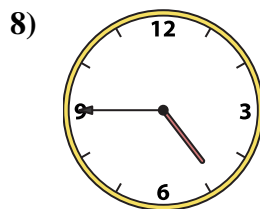
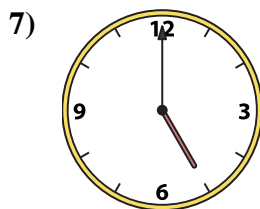
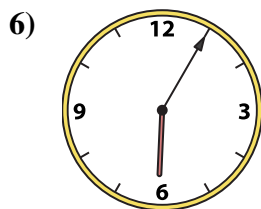
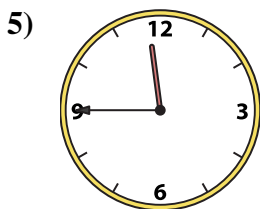
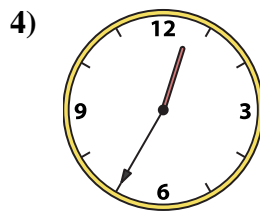
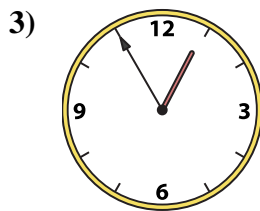
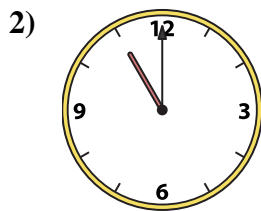
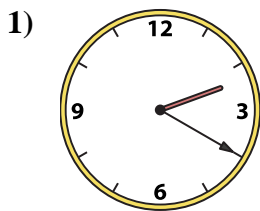
O. 6:05

P. 10:05



Emparejar el reloj analógico con el reloj digital correspondiente.

Respuestas



A. 11:45

B. 5:00

C. 12:35

D. 11:05

E. 2:20

F. 2:10

G. 5:45

H. 12:55

I. 9:00

J. 4:45

K. 12:25

L. 8:00

M. 11:00

N. 4:20

O. 6:05

P. 10:05

- 1. E
- 2. M
- 3. H
- 4. C
- 5. A
- 6. O
- 7. B
- 8. J
- 9. D
- 10. L
- 11. F
- 12. P
- 13. K
- 14. N
- 15. I
- 16. G