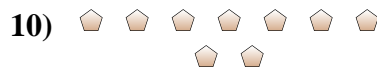
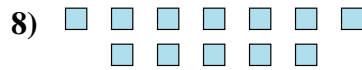
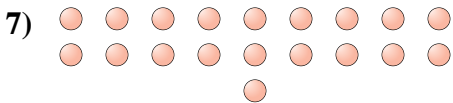
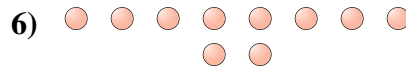

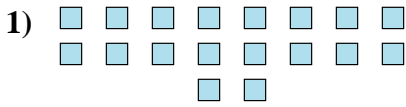




Determinar si el número de figuras en la caja es par o impar.

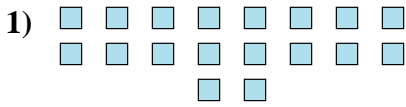


**Respuestas**


- 1. \_\_\_\_\_
- 2. \_\_\_\_\_
- 3. \_\_\_\_\_
- 4. \_\_\_\_\_
- 5. \_\_\_\_\_
- 6. \_\_\_\_\_
- 7. \_\_\_\_\_
- 8. \_\_\_\_\_
- 9. \_\_\_\_\_
- 10. \_\_\_\_\_



Determinar si el número de figuras en la caja es par o impar.



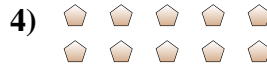
18



20



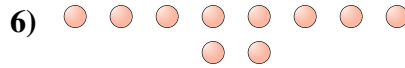
14



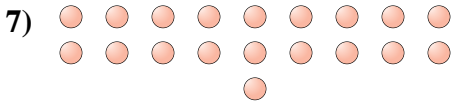
10



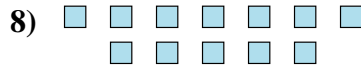
12



10



19



12



7



9

**Respuestas**

1. **Par**

2. **Par**

3. **Par**

4. **Par**

5. **Par**

6. **Par**

7. **Impar**

8. **Par**

9. **Impar**

10. **Impar**