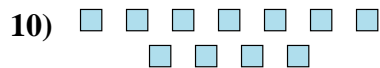
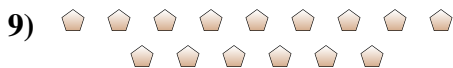
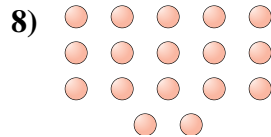
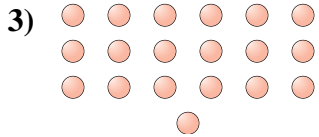
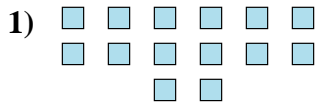




Determinar si el número de figuras en la caja es par o impar.

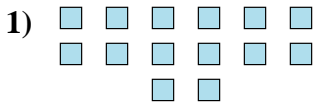


Respuestas

- 1. _____
- 2. _____
- 3. _____
- 4. _____
- 5. _____
- 6. _____
- 7. _____
- 8. _____
- 9. _____
- 10. _____



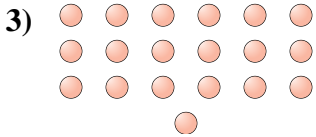
Determinar si el número de figuras en la caja es par o impar.



14



10




19



7



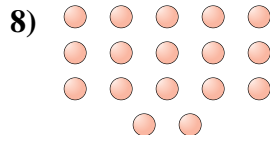
8



12



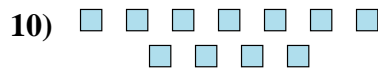
5



17



15



11

Respuestas

1. **Par**

2. **Par**

3. **Impar**

4. **Impar**

5. **Par**

6. **Par**

7. **Impar**

8. **Impar**

9. **Impar**

10. **Impar**