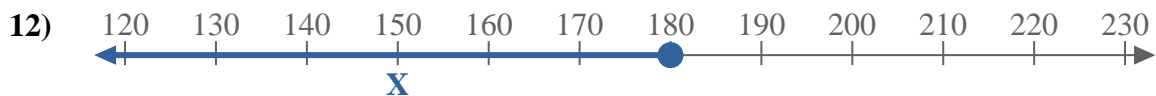
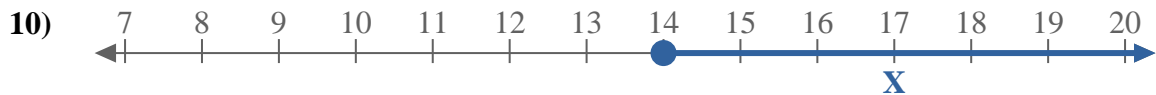
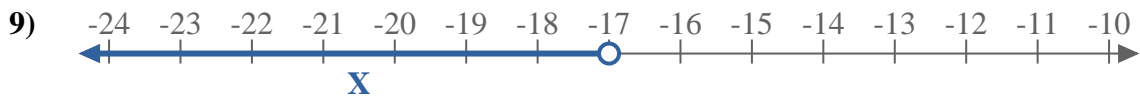
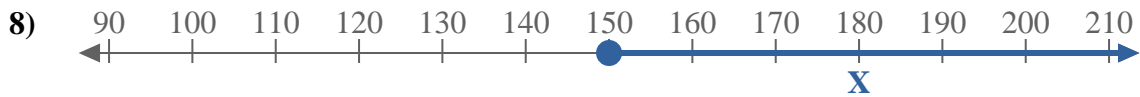
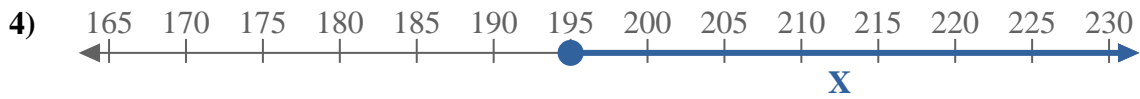
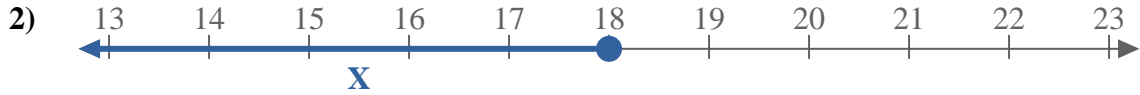
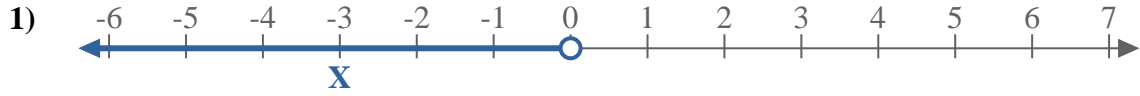
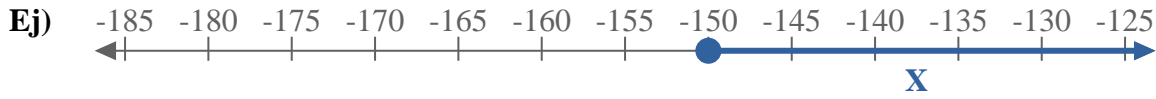




Escribe una desigualdad para expresar la línea de número.



Respuestas

Ej. $X \geq -150$

1. _____

2. _____

3. _____

4. _____

5. _____

6. _____

7. _____

8. _____

9. _____

10. _____

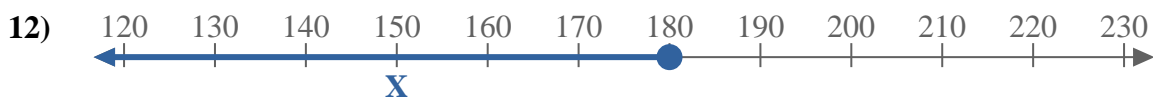
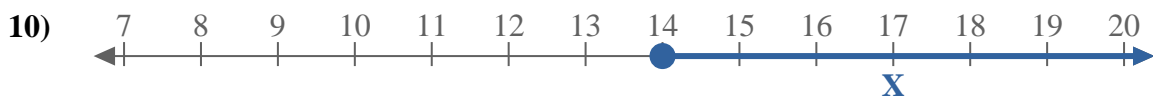
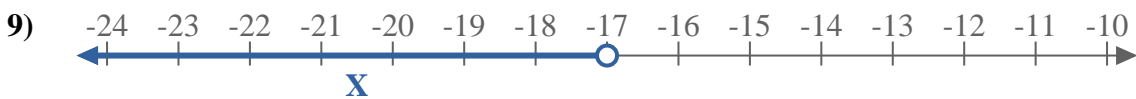
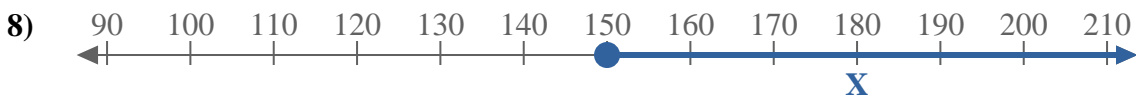
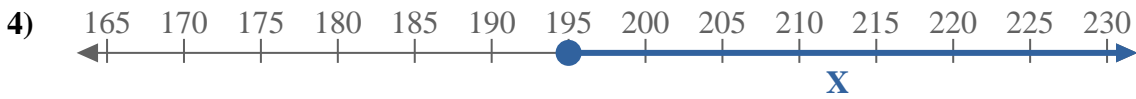
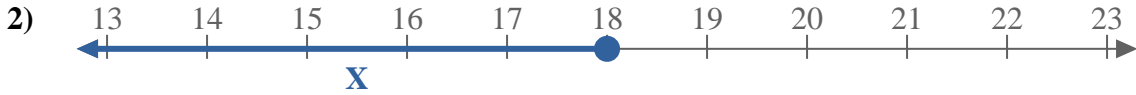
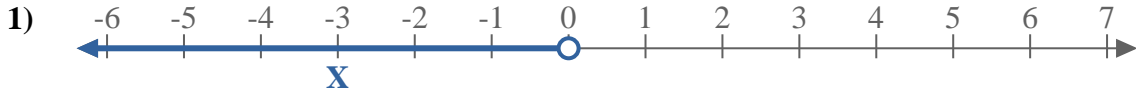
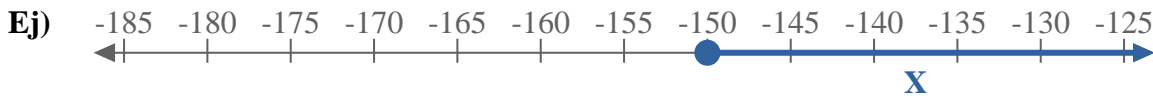
11. _____

12. _____

13. _____



Escribe una desigualdad para expresar la línea de número.



Respuestas

Ej. $x \geq -150$

1. $x < 0$

2. $x \leq 18$

3. $x \geq 10$

4. $x \geq 195$

5. $x < 10$

6. $x \leq 130$

7. $x \leq -8$

8. $x \geq 150$

9. $x < -17$

10. $x \geq 14$

11. $x < -8$

12. $x \leq 180$

13. $x > -55$